

JEFFERSON MATH PROJECT REGENTS AT RANDOM

The NY Integrated Algebra Regents Exams
Fall 2007-August 2012

www.jmap.org

Dear Sir

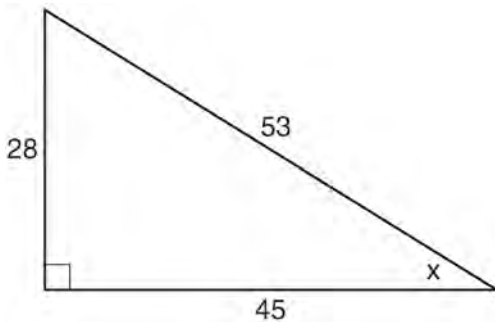
I have to acknowledge the receipt of your favor of May 14. in which you mention that you have finished the 6. first books of Euclid, plane trigonometry, surveying & algebra and ask whether I think a further pursuit of that branch of science would be useful to you. there are some propositions in the latter books of Euclid, & some of Archimedes, which are useful, & I have no doubt you have been made acquainted with them. trigonometry, so far as this, is most valuable to every man, there is scarcely a day in which he will not resort to it for some of the purposes of common life. the science of calculation also is indispensable as far as the extraction of the square & cube roots; Algebra as far as the quadratic equation & the use of logarithms are often of value in ordinary cases: but all beyond these is but a luxury; a delicious luxury indeed; but not to be indulged in by one who is to have a profession to follow for his subsistence. in this light I view the conic sections, curves of the higher orders, perhaps even spherical trigonometry, Algebraical operations beyond the 2d dimension, and fluxions.

Letter from Thomas Jefferson to William G. Munford, Monticello, June 18, 1799.

Integrated Algebra Regents at Random

- 1 Which ordered pair is a solution to the system of equations $y = x + 3$ and $y = x^2 - x$?
- 1) (6,9)
 - 2) (3,6)
 - 3) (3,-1)
 - 4) (2,5)

- 2 Which ratio represents $\sin x$ in the right triangle shown below?



- 1) $\frac{28}{53}$
 - 2) $\frac{28}{45}$
 - 3) $\frac{45}{53}$
 - 4) $\frac{53}{28}$
- 3 If the universal set is {pennies, nickels, dimes, quarters}, what is the complement of the set {nickels}?
- 1) { }
 - 2) {pennies, quarters}
 - 3) {pennies, dimes, quarters}
 - 4) {pennies, nickels, dimes, quarters}

- 4 Solve for c in terms of a and b : $bc + ac = ab$

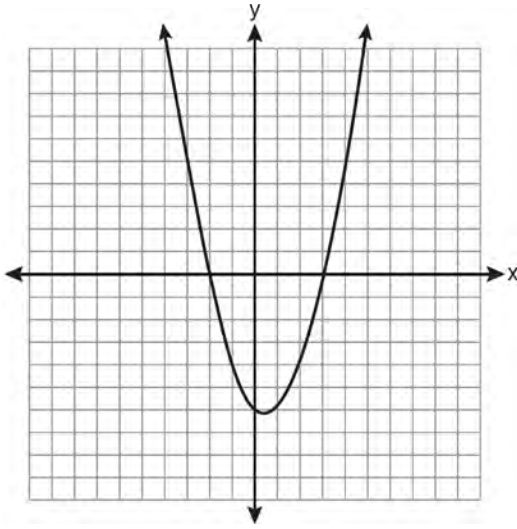
- 5 What is the product of (6×10^3) , (4.6×10^5) , and (2×10^{-2}) expressed in scientific notation?
- 1) 55.2×10^6
 - 2) 5.52×10^7
 - 3) 55.2×10^7
 - 4) 5.52×10^{10}

- 6 Maria has a set of 10 index cards labeled with the digits 0 through 9. She puts them in a bag and selects one at random. The outcome that is most likely to occur is selecting
- 1) an odd number
 - 2) a prime number
 - 3) a number that is at most 5
 - 4) a number that is divisible by 3

- 7 What is the slope of the line that passes through the points (3,5) and (-2,2)?
- 1) $\frac{1}{5}$
 - 2) $\frac{3}{5}$
 - 3) $\frac{5}{3}$
 - 4) 5

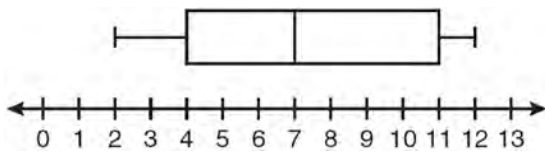
- 8 Express in simplest form: $\frac{45a^4b^3 - 90a^3b}{15a^2b}$

- 9 A student correctly graphed the parabola shown below to solve a given quadratic equation.



What are the roots of the quadratic equation associated with this graph?

- 1) -6 and 3
 - 2) -6 and 0
 - 3) -3 and 2
 - 4) -2 and 3
- 10 Based on the box-and-whisker plot below, which statement is *false*?



- 1) The median is 7.
- 2) The range is 12.
- 3) The first quartile is 4.
- 4) The third quartile is 11.

- 11 What is the solution of $3(2m - 1) \leq 4m + 7$?
- 1) $m \leq 5$
 - 2) $m \geq 5$
 - 3) $m \leq 4$
 - 4) $m \geq 4$

- 12 Which point is on the line $4y - 2x = 0$?
- 1) $(-2, -1)$
 - 2) $(-2, 1)$
 - 3) $(-1, -2)$
 - 4) $(1, 2)$

- 13 Which linear equation represents a line containing the point $(1, 3)$?
- 1) $x + 2y = 5$
 - 2) $x - 2y = 5$
 - 3) $2x + y = 5$
 - 4) $2x - y = 5$

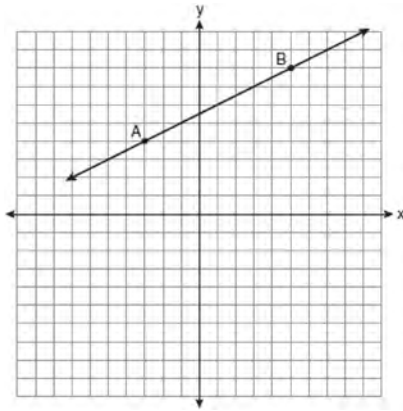
- 14 What is the result when $2x^2 + 3xy - 6$ is subtracted from $x^2 - 7xy + 2$?
- 1) $-x^2 - 10xy + 8$
 - 2) $x^2 + 10xy - 8$
 - 3) $-x^2 - 4xy - 4$
 - 4) $x^2 - 4xy - 4$

- 15 Which phrase best describes the relationship between the number of miles driven and the amount of gasoline used?
- 1) causal, but not correlated
 - 2) correlated, but not causal
 - 3) both correlated and causal
 - 4) neither correlated nor causal

16 Alexis calculates the surface area of a gift box as 600 square inches. The actual surface area of the gift box is 592 square inches. Find the relative error of Alexis' calculation expressed as a decimal to the nearest thousandth.

17 Joseph typed a 1,200-word essay in 25 minutes. At this rate, determine how many words he can type in 45 minutes.

18 In the diagram below, what is the slope of the line passing through points A and B?



- 1) -2
- 2) 2
- 3) $-\frac{1}{2}$
- 4) $\frac{1}{2}$

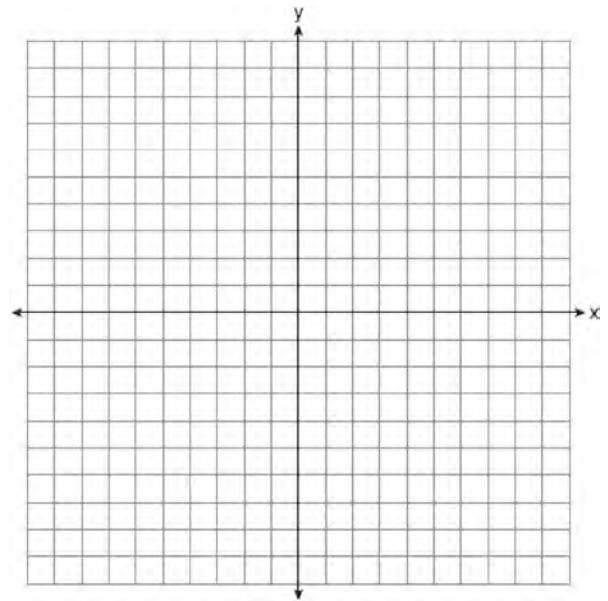
19 What is the solution of the system of equations $c + 3d = 8$ and $c = 4d - 6$?

- 1) $c = -14, d = -2$
- 2) $c = -2, d = 2$
- 3) $c = 2, d = 2$
- 4) $c = 14, d = -2$

20 On the set of axes below, solve the following system of equations graphically and state the coordinates of all points in the solution set.

$$y = -x^2 + 6x - 3$$

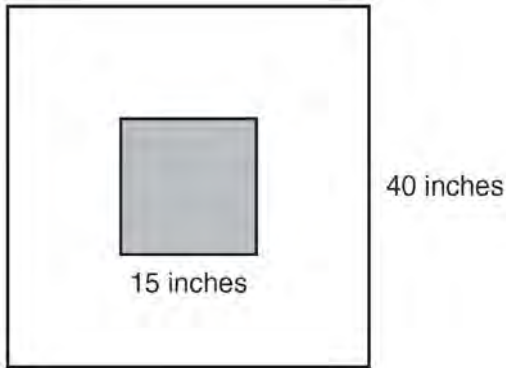
$$x + y = 7$$



21 How many different three-letter arrangements can be formed using the letters in the word ABSOLUTE if each letter is used only once?

- 1) 56
- 2) 112
- 3) 168
- 4) 336

- 22 The square dart board shown below has a side that measures 40 inches. The shaded portion in the center is a square whose side is 15 inches. A dart thrown at the board is equally likely to land on any point on the dartboard.



Find the probability that a dart hitting the board will *not* land in the shaded area.

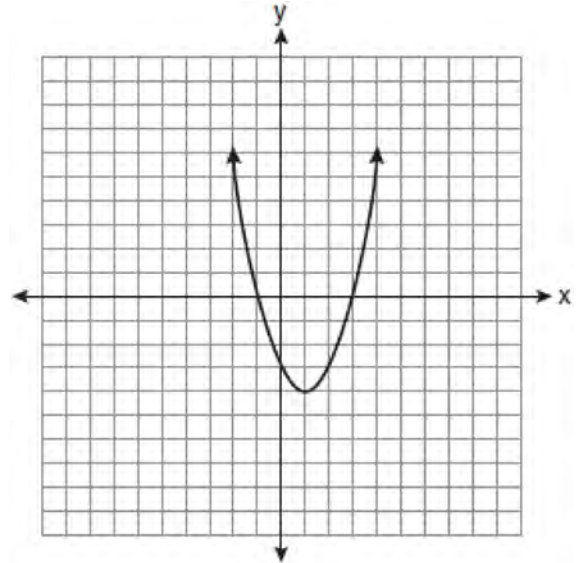
- 23 What is the perimeter of a regular pentagon with a side whose length is $x + 4$?

- 1) $x^2 + 16$
- 2) $4x + 16$
- 3) $5x + 4$
- 4) $5x + 20$

- 24 This year, John played in 10 baseball games. In these games he had hit the ball 2, 3, 0, 1, 3, 2, 4, 0, 2, and 3 times. In the first 10 games he plays next year, John wants to increase his average (mean) hits per game by 0.5. What is the total number of hits John needs over the first 10 games next year to achieve his goal?

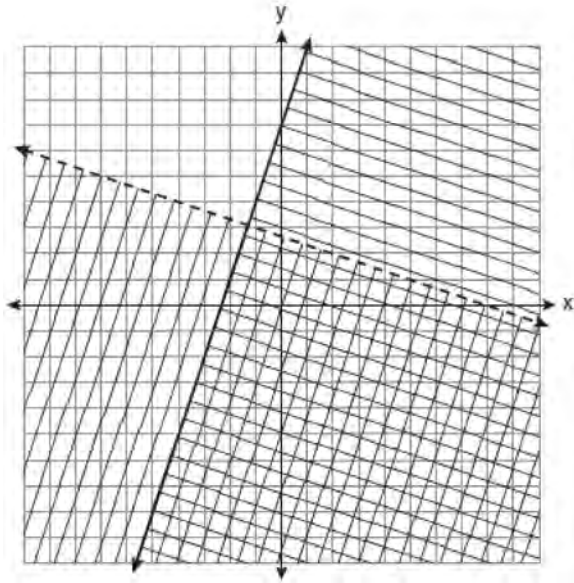
- 1) 5
- 2) 2
- 3) 20
- 4) 25

- 25 What are the vertex and axis of symmetry of the parabola shown in the diagram below?



- 1) vertex: $(1, -4)$; axis of symmetry: $x = 1$
 - 2) vertex: $(1, -4)$; axis of symmetry: $x = -4$
 - 3) vertex: $(-4, 1)$; axis of symmetry: $x = 1$
 - 4) vertex: $(-4, 1)$; axis of symmetry: $x = -4$
- 26 A password consists of three digits, 0 through 9, followed by three letters from an alphabet having 26 letters. If repetition of digits is allowed, but repetition of letters is not allowed, determine the number of different passwords that can be made. If repetition is not allowed for digits or letters, determine how many fewer different passwords can be made.
- 27 A line having a slope of $\frac{3}{4}$ passes through the point $(-8, 4)$. Write the equation of this line in slope-intercept form.

- 28 Which ordered pair is in the solution set of the system of linear inequalities graphed below?



- 1) $(1, -4)$
- 2) $(-5, 7)$
- 3) $(5, 3)$
- 4) $(-7, -2)$

- 29 Given: $Q = \{0, 2, 4, 6\}$

$$W = \{0, 1, 2, 3\}$$

$$Z = \{1, 2, 3, 4\}$$

What is the intersection of sets Q , W , and Z ?

- 1) $\{2\}$
- 2) $\{0, 2\}$
- 3) $\{1, 2, 3\}$
- 4) $\{0, 1, 2, 3, 4, 6\}$

- 30 Four hundred licensed drivers participated in the math club's survey on driving habits. The table below shows the number of drivers surveyed in each age group.

Ages of People in Survey on Driving Habits

Age Group	Number of Drivers
16-25	150
26-35	129
36-45	33
46-55	57
56-65	31

Which statement best describes a conclusion based on the data in the table?

- 1) It may be biased because no one younger than 16 was surveyed.
- 2) It would be fair because many different age groups were surveyed.
- 3) It would be fair because the survey was conducted by the math club students.
- 4) It may be biased because the majority of drivers surveyed were in the younger age intervals.

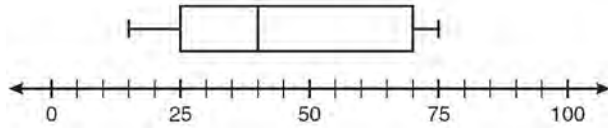
- 31 What is an equation of the line that passes through the points $(1, 3)$ and $(8, 5)$?

- 1) $y + 1 = \frac{2}{7}(x + 3)$
- 2) $y - 5 = \frac{2}{7}(x - 8)$
- 3) $y - 1 = \frac{2}{7}(x + 3)$
- 4) $y + 5 = \frac{2}{7}(x - 8)$

32 What is $\frac{7}{12x} - \frac{y}{6x^2}$ expressed in simplest form?

- 1) $\frac{7-y}{6x}$
- 2) $\frac{7-y}{12x-6x^2}$
- 3) $-\frac{7y}{12x^2}$
- 4) $\frac{7x-2y}{12x^2}$

33 What is the range of the data represented in the box-and-whisker plot shown below?



- 1) 40
- 2) 45
- 3) 60
- 4) 100

34 What is the sum of $\frac{3}{2x}$ and $\frac{7}{4x}$?

- 1) $\frac{21}{8x^2}$
- 2) $\frac{13}{4x}$
- 3) $\frac{10}{6x}$
- 4) $\frac{13}{8x}$

35 Which expression is equivalent to $3^3 \cdot 3^4$?

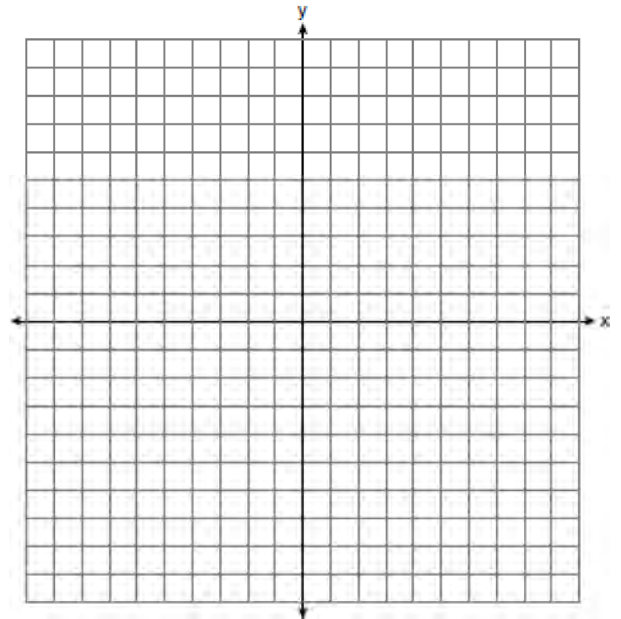
- 1) 9^{12}
- 2) 9^7
- 3) 3^{12}
- 4) 3^7

36 On the set of axes below, solve the following system of inequalities graphically.

$$y < 2x + 1$$

$$y \geq -\frac{1}{3}x + 4$$

State the coordinates of a point in the solution set.

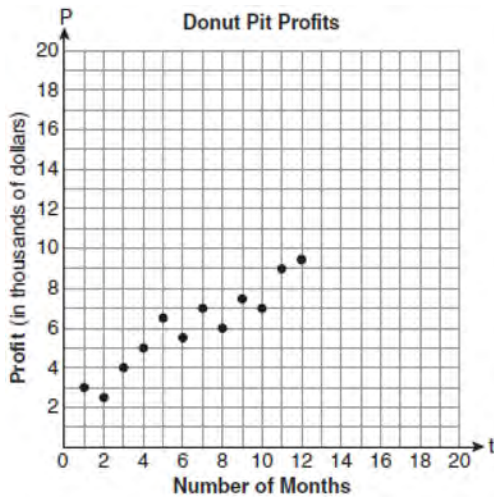


37 Which situation describes a correlation that is *not* a causal relationship?

- 1) the length of the edge of a cube and the volume of the cube
- 2) the distance traveled and the time spent driving
- 3) the age of a child and the number of siblings the child has
- 4) the number of classes taught in a school and the number of teachers employed

- 38 Megan and Bryce opened a new store called the Donut Pit. Their goal is to reach a profit of \$20,000 in their 18th month of business. The table and scatter plot below represent the profit, P , in thousands of dollars, that they made during the first 12 months.

t (months)	P (profit, in thousands of dollars)
1	3.0
2	2.5
3	4.0
4	5.0
5	6.5
6	5.5
7	7.0
8	6.0
9	7.5
10	7.0
11	9.0
12	9.5



Draw a reasonable line of best fit. Using the line of best fit, predict whether Megan and Bryce will reach their goal in the 18th month of their business. Justify your answer.

- 39 Which data table represents univariate data?

Side Length of a Square	Area of Square
2	4
3	9
4	16
5	25

1)

Hours Worked	Pay
20	\$160
25	\$200
30	\$240
35	\$280

2)

Age Group	Frequency
20–29	9
30–39	7
40–49	10
50–59	4

3)

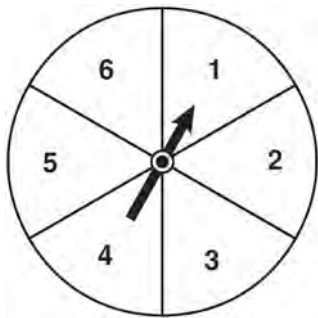
People	Number of Fingers
2	20
3	30
4	40
5	50

4)

- 40 What is $3\sqrt{250}$ expressed in simplest radical form?
- 1) $5\sqrt{10}$
 - 2) $8\sqrt{10}$
 - 3) $15\sqrt{10}$
 - 4) $75\sqrt{10}$

- 41 Which interval notation represents the set of all real numbers greater than 2 and less than or equal to 20?
- 1) $(2, 20)$
 - 2) $(2, 20]$
 - 3) $[2, 20)$
 - 4) $[2, 20]$

- 42 The spinner shown in the diagram below is divided into six equal sections.

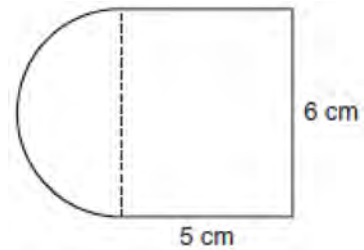


Which outcome is *least* likely to occur on a single spin?

- 1) an odd number
- 2) a prime number
- 3) a perfect square
- 4) a number divisible by 2

- 43 Which equation represents a line parallel to the y -axis?
- 1) $y = x$
 - 2) $y = 3$
 - 3) $x = -y$
 - 4) $x = -4$

- 44 A figure is made up of a rectangle and a semicircle as shown in the diagram below.



What is the area of the figure, to the *nearest tenth of a square centimeter*?

- 1) 39.4
- 2) 44.1
- 3) 48.8
- 4) 58.3

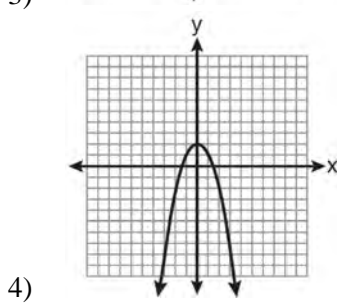
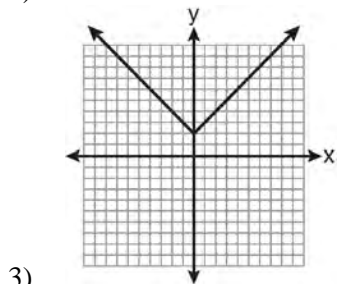
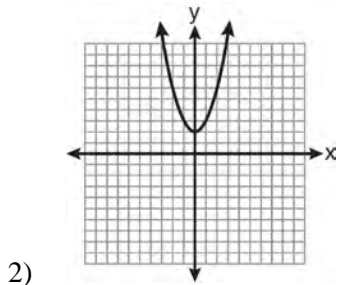
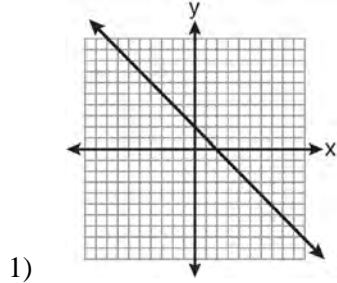
- 45 The number of songs fifteen students have on their MP3 players is:

120, 124, 132, 145, 200, 255, 260, 292,
 308, 314, 342, 407, 421, 435, 452

State the values of the minimum, 1st quartile, median, 3rd quartile, and maximum. Using these values, construct a box-and-whisker plot using an appropriate scale on the line below.



46 Which is the graph of $y = |x| + 2$?



47 How many square inches of wrapping paper are needed to entirely cover a box that is 2 inches by 3 inches by 4 inches?

- 1) 18
- 2) 24
- 3) 26
- 4) 52

48 Which expression represents $\frac{x^2 - x - 6}{x^2 - 5x + 6}$ in simplest form?

- 1) $\frac{x+2}{x-2}$
- 2) $\frac{-x-6}{-5x+6}$
- 3) $\frac{1}{5}$
- 4) -1

49 What is the sum of $\frac{3x^2}{x-2}$ and $\frac{x^2}{x-2}$?

- 1) $\frac{3x^4}{(x-2)^2}$
- 2) $\frac{3x^4}{x-2}$
- 3) $\frac{4x^2}{(x-2)^2}$
- 4) $\frac{4x^2}{x-2}$

50 How many different sandwiches consisting of one type of cheese, one condiment, and one bread choice can be prepared from five types of cheese, two condiments, and three bread choices?

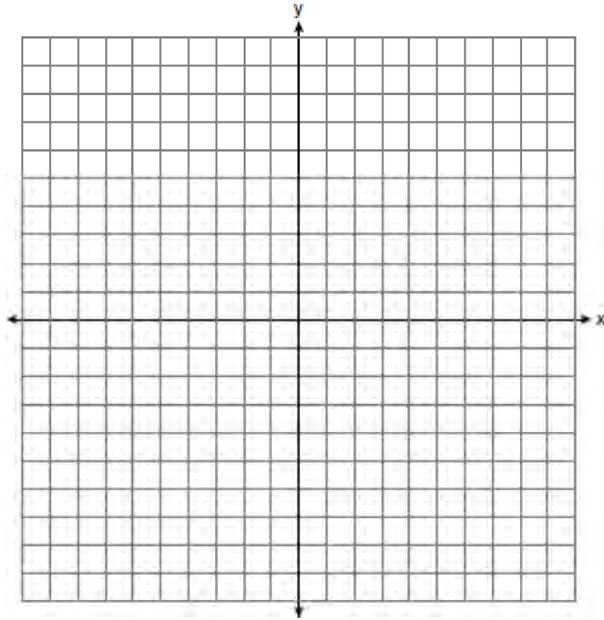
- 1) 10
- 2) 13
- 3) 15
- 4) 30

- 51 Graph and label the following equations on the set of axes below.

$$y = |x|$$

$$y = \left| \frac{1}{2}x \right|$$

Explain how *decreasing* the coefficient of x affects the graph of the equation $y = |x|$.



- 52 A formula used for calculating velocity is $v = \frac{1}{2}at^2$. What is a expressed in terms of v and t ?

- 1) $a = \frac{2v}{t}$
- 2) $a = \frac{2v}{t^2}$
- 3) $a = \frac{v}{t}$
- 4) $a = \frac{v}{2t^2}$

- 53 Given: $U = \{1, 2, 3, 4, 5, 6, 7, 8\}$

$$B = \{2, 3, 5, 6\}$$

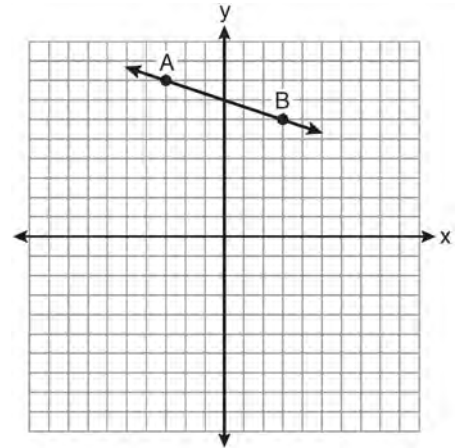
Set B is a subset of set U . What is the complement of set B ?

- 1) $\{ \}$
- 2) $\{2, 3, 5, 6\}$
- 3) $\{1, 4, 7, 8\}$
- 4) $\{1, 2, 3, 4, 5, 6, 7, 8\}$

- 54 What is the solution set of $\frac{x+2}{x-2} = \frac{-3}{x}$?

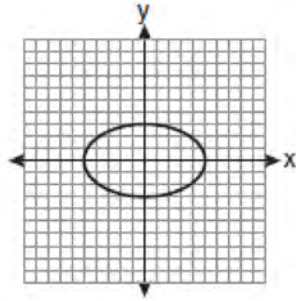
- 1) $\{-2, 3\}$
- 2) $\{-3, -2\}$
- 3) $\{-1, 6\}$
- 4) $\{-6, 1\}$

- 55 What is the slope of the line passing through the points A and B , as shown on the graph below?

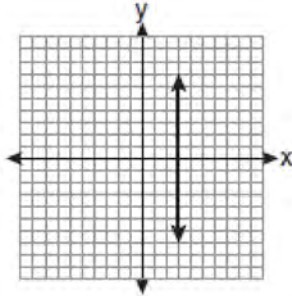


- 1) -3
- 2) $-\frac{1}{3}$
- 3) 3
- 4) $\frac{1}{3}$

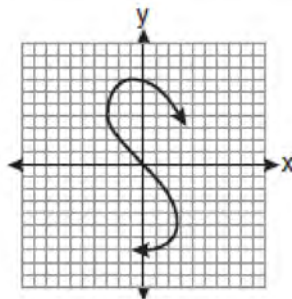
56 Which graph represents a function?



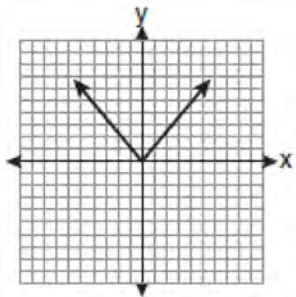
1)



2)



3)



4)

57 Find the roots of the equation $x^2 - x = 6$ algebraically.

58 Which notation describes $\{1, 2, 3\}$?

- 1) $\{x \mid 1 \leq x < 3, \text{ where } x \text{ is an integer}\}$
- 2) $\{x \mid 0 < x \leq 3, \text{ where } x \text{ is an integer}\}$
- 3) $\{x \mid 1 < x < 3, \text{ where } x \text{ is an integer}\}$
- 4) $\{x \mid 0 \leq x \leq 3, \text{ where } x \text{ is an integer}\}$

59 The expression $6\sqrt{50} + 6\sqrt{2}$ written in simplest radical form is

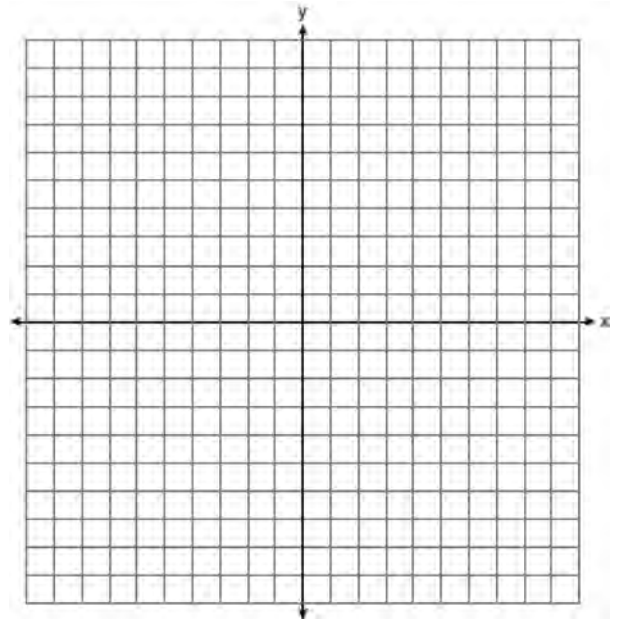
- 1) $6\sqrt{52}$
- 2) $12\sqrt{52}$
- 3) $17\sqrt{2}$
- 4) $36\sqrt{2}$

60 Solve the following system of inequalities graphically on the set of axes below.

$$3x + y < 7$$

$$y \geq \frac{2}{3}x - 4$$

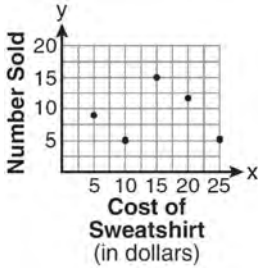
State the coordinates of a point in the solution set.



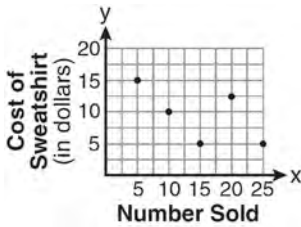
- 61 The school store did a study comparing the cost of a sweatshirt with the number of sweatshirts sold. The price was changed several times and the numbers of sweatshirts sold were recorded. The data are shown in the table below.

Cost of Sweatshirt	\$10	\$25	\$15	\$20	\$5
Number Sold	9	6	15	11	14

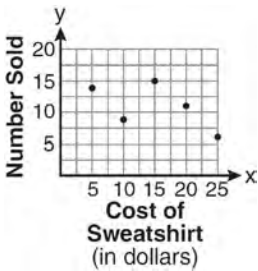
Which scatter plot represents the data?



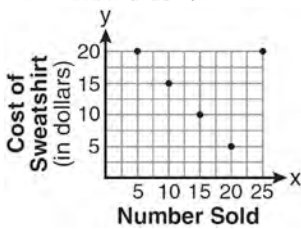
1)



2)



3)



4)

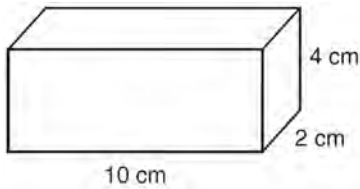
- 62 The data in the table below are graphed, and the slope is examined.

x	y
0.5	9.0
1	8.75
1.5	8.5
2	8.25
2.5	8.0

The rate of change represented in this table can be described as

- 1) negative
 - 2) positive
 - 3) undefined
 - 4) zero
- 63 Which quadrant will be completely shaded in the graph of the inequality $y \leq 2x$?
- 1) Quadrant I
 - 2) Quadrant II
 - 3) Quadrant III
 - 4) Quadrant IV
- 64 Perform the indicated operation: $-6(a - 7)$
 State the name of the property used.
- 65 The Booster Club raised \$30,000 for a sports fund. No more money will be placed into the fund. Each year the fund will decrease by 5%. Determine the amount of money, to the *nearest cent*, that will be left in the sports fund after 4 years.

- 66 Find the volume, in cubic centimeters, *and* the surface area, in square centimeters, of the rectangular prism shown below.



- 67 Which equation represents a line parallel to the y -axis?
- 1) $x = y$
 - 2) $x = 4$
 - 3) $y = 4$
 - 4) $y = x + 4$

- 68 The width of a rectangle is 3 less than twice the length, x . If the area of the rectangle is 43 square feet, which equation can be used to find the length, in feet?
- 1) $2x(x - 3) = 43$
 - 2) $x(3 - 2x) = 43$
 - 3) $2x + 2(2x - 3) = 43$
 - 4) $x(2x - 3) = 43$

- 69 Vince buys a box of candy that consists of six chocolate pieces, four fruit-flavored pieces, and two mint pieces. He selects three pieces of candy at random, without replacement. Calculate the probability that the first piece selected will be fruit flavored and the other two will be mint. Calculate the probability that all three pieces selected will be the same type of candy.

- 70 An outfit Jennifer wears to school consists of a top, a bottom, and shoes. Possible choices are listed below.

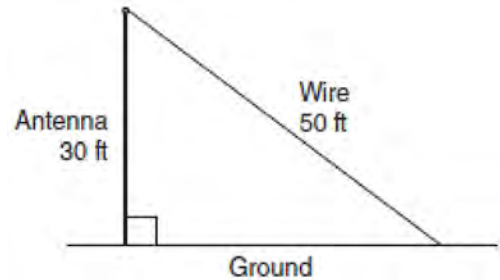
Tops: T-shirt, blouse, sweater

Bottoms: jeans, skirt, capris

Shoes: flip-flops, sneakers

List the sample space or draw a tree diagram to represent all possible outfits consisting of one type of top, one type of bottom, and one pair of shoes. Determine how many different outfits contain jeans and flip-flops. Determine how many different outfits do *not* include a sweater.

- 71 A communications company is building a 30-foot antenna to carry cell phone transmissions. As shown in the diagram below, a 50-foot wire from the top of the antenna to the ground is used to stabilize the antenna.



Find, to the *nearest degree*, the measure of the angle that the wire makes with the ground.

- 72 An example of an algebraic expression is
- 1) $y = mx + b$
 - 2) $3x + 4y - 7$
 - 3) $2x + 3y \leq 18$
 - 4) $(x + y)(x - y) = 25$


- 73 The test scores for 18 students in Ms. Mosher's class are listed below:

86, 81, 79, 71, 58, 87, 52, 71, 87,
 87, 93, 64, 94, 81, 76, 98, 94, 68

Complete the frequency table below.

Interval	Tally	Frequency
51–60		
61–70		
71–80		
81–90		
91–100		

Draw and label a frequency histogram on the grid below.



- 74 When $5x + 4y$ is subtracted from $5x - 4y$, the difference is

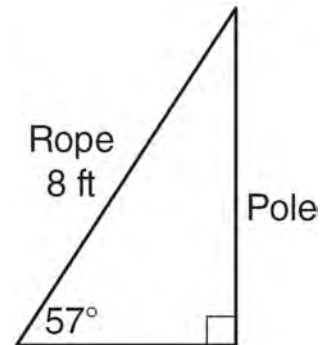
- 1) 0
- 2) $10x$
- 3) $8y$
- 4) $-8y$

- 75 Each of the hats shown below has colored marbles placed inside. Hat A contains five green marbles and four red marbles. Hat B contains six blue marbles and five red marbles. Hat C contains five green marbles and five blue marbles.



If a student were to randomly pick one marble from each of these three hats, determine from which hat the student would most likely pick a green marble. Justify your answer. Determine the fewest number of marbles, if any, and the color of these marbles that could be added to *each* hat so that the probability of picking a green marble will be one-half in each of the three hats.

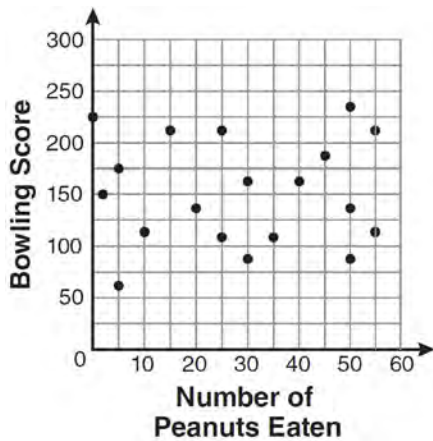
- 76 An 8-foot rope is tied from the top of a pole to a stake in the ground, as shown in the diagram below.



If the rope forms a 57° angle with the ground, what is the height of the pole, to the *nearest tenth of a foot*?

- 1) 4.4
- 2) 6.7
- 3) 9.5
- 4) 12.3

- 77 The scatter plot below represents the relationship between the number of peanuts a student eats and the student's bowling score.




- Which conclusion about the scatter plot is valid?
- 1) There is almost no relationship between eating peanuts and bowling score.
 - 2) Students who eat more peanuts have higher bowling scores.
 - 3) Students who eat more peanuts have lower bowling scores.
 - 4) No bowlers eat peanuts.

- 78 Julia went to the movies and bought one jumbo popcorn and two chocolate chip cookies for \$5.00. Marvin went to the same movie and bought one jumbo popcorn and four chocolate chip cookies for \$6.00. How much does one chocolate chip cookie cost?
- 1) \$0.50
 - 2) \$0.75
 - 3) \$1.00
 - 4) \$2.00

- 79 Ms. Hopkins recorded her students' final exam scores in the frequency table below.

Interval	Tally	Frequency
61–70	###	5
71–80		4
81–90	###	9
91–100	###	6

On the grid below, construct a frequency histogram based on the table.

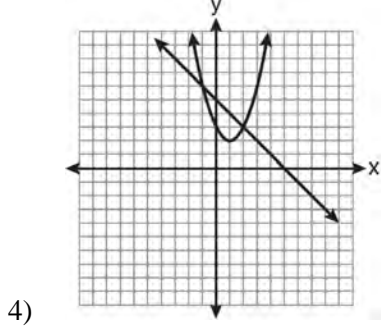
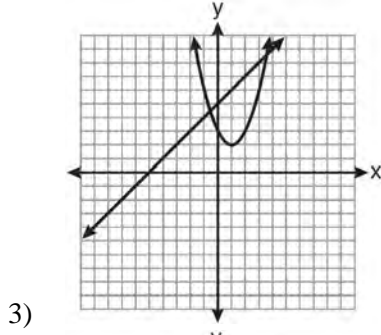
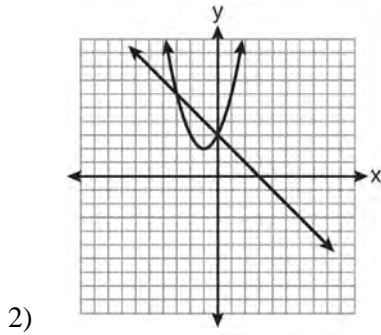
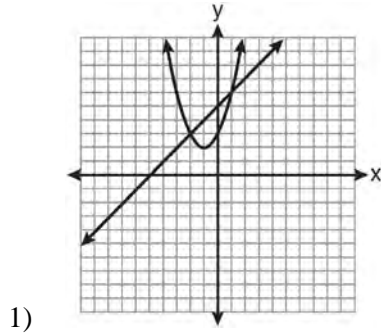


- 80 Given: Set $U = \{S, O, P, H, I, A\}$
 Set $B = \{A, I, O\}$
 If set B is a subset of set U , what is the complement of set B ?
- 1) $\{O, P, S\}$
 - 2) $\{I, P, S\}$
 - 3) $\{A, H, P\}$
 - 4) $\{H, P, S\}$

81 Which graph can be used to find the solution of the following system of equations?

$$y = x^2 + 2x + 3$$

$$2y - 2x = 10$$



82 Which point lies on the line whose equation is $2x - 3y = 9$?

- 1) $(-1, -3)$
- 2) $(-1, 3)$
- 3) $(0, 3)$
- 4) $(0, -3)$

83 Which expression is equivalent to $121 - x^2$?

- 1) $(x - 11)(x - 11)$
- 2) $(x + 11)(x - 11)$
- 3) $(11 - x)(11 + x)$
- 4) $(11 - x)(11 - x)$

84 The current student population of the Brentwood Student Center is 2,000. The enrollment at the center increases at a rate of 4% each year. To the *nearest whole number*, what will the student population be closest to in 3 years'?

- 1) 2,240
- 2) 2,250
- 3) 5,488
- 4) 6,240

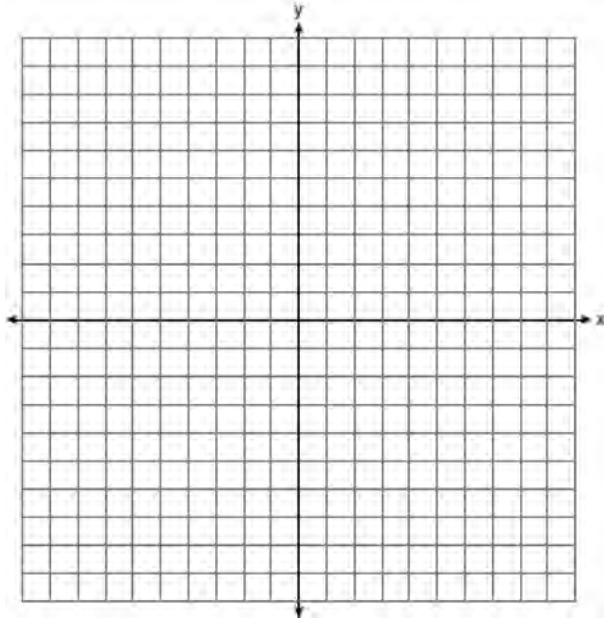
85 A study showed that a decrease in the cost of carrots led to an increase in the number of carrots sold. Which statement best describes this relationship?

- 1) positive correlation and a causal relationship
- 2) negative correlation and a causal relationship
- 3) positive correlation and not a causal relationship
- 4) negative correlation and not a causal relationship

- 86 Graph the following systems of inequalities on the set of axes shown below and label the solution set S :

$$y > -x + 2$$

$$y \leq \frac{2}{3}x + 5$$



- 87 What is the value of the y -coordinate of the solution to the system of equations $2x + y = 8$ and $x - 3y = -3$?

- 1) -2
- 2) 2
- 3) 3
- 4) -3

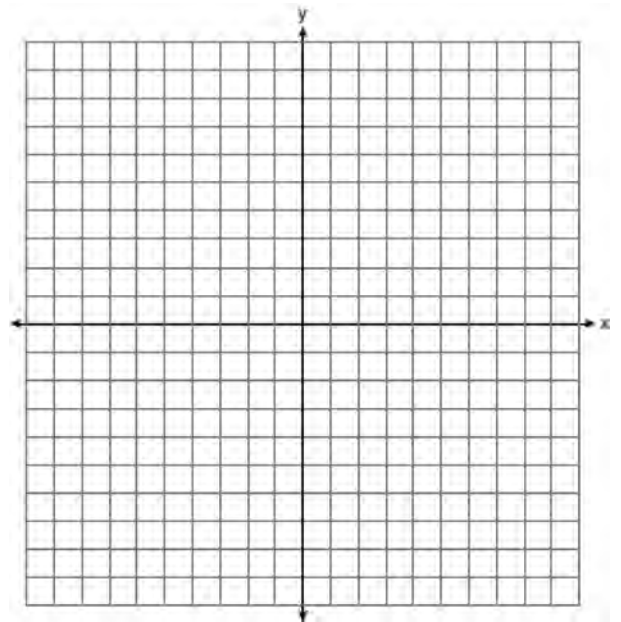
- 88 An example of an algebraic expression is

- 1) $x + 2$
- 2) $y = x + 2$
- 3) $y < x + 2$
- 4) $y = x^2 + 2x$

- 89 What is an equation of the axis of symmetry of the parabola represented by $y = -x^2 + 6x - 4$?

- 1) $x = 3$
- 2) $y = 3$
- 3) $x = 6$
- 4) $y = 6$

- 90 Graph the solution set for the inequality $4x - 3y > 9$ on the set of axes below. Determine if the point $(1, -3)$ is in the solution set. Justify your answer.



- 91 Given: $X = \{1, 2, 3, 4\}$

$$Y = \{2, 3, 4, 5\}$$

$$Z = \{3, 4, 5, 6\}$$

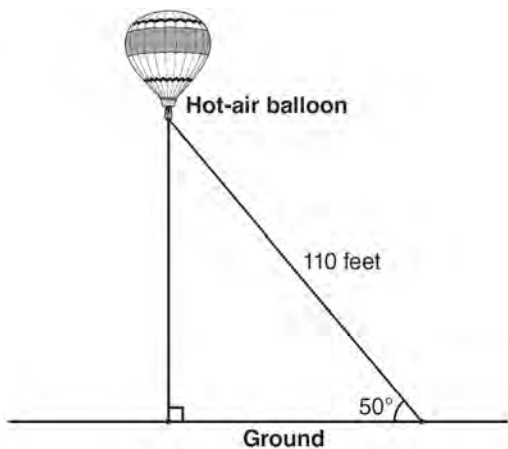
What is the intersection of sets X , Y , and Z ?

- 1) $\{3, 4\}$
- 2) $\{2, 3, 4\}$
- 3) $\{3, 4, 5\}$
- 4) $\{1, 2, 3, 4, 5, 6\}$

92 What is the slope of the line whose equation is $3x - 7y = 9$?

- 1) $-\frac{3}{7}$
- 2) $\frac{3}{7}$
- 3) $-\frac{7}{3}$
- 4) $\frac{7}{3}$

93 A hot-air balloon is tied to the ground with two taut (straight) ropes, as shown in the diagram below. One rope is directly under the balloon and makes a right angle with the ground. The other rope forms an angle of 50° with the ground.



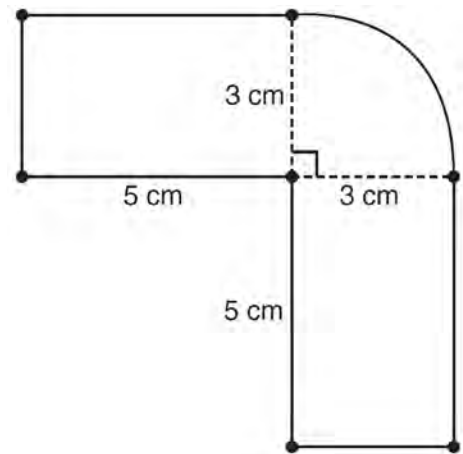
Determine the height, to the *nearest foot*, of the balloon directly above the ground. Determine the distance, to the *nearest foot*, on the ground between the two ropes.

94 In right triangle ABC , $AB = 20$, $AC = 12$, $BC = 16$, and $m\angle C = 90$. Find, to the *nearest degree*, the measure of $\angle A$.

95 The graphs of the equations $y = 2x - 7$ and $y - kx = 7$ are parallel when k equals

- 1) -2
- 2) 2
- 3) -7
- 4) 7

96 The figure shown below is composed of two rectangles and a quarter circle.



What is the area of this figure, to the *nearest square centimeter*?

- 1) 33
- 2) 37
- 3) 44
- 4) 58

97 Sam's grades on eleven chemistry tests were 90, 85, 76, 63, 94, 89, 81, 76, 78, 69, and 97. Which statement is true about the measures of central tendency?

- 1) mean $>$ mode
- 2) mean $<$ median
- 3) mode $>$ median
- 4) median = mean

98 Which verbal expression is represented by $\frac{1}{2}(n - 3)$?

- 1) one-half n decreased by 3
- 2) one-half n subtracted from 3
- 3) the difference of one-half n and 3
- 4) one-half the difference of n and 3

99 Jack wants to replace the flooring in his rectangular kitchen. He calculates the area of the floor to be 12.8 square meters. The actual area of the floor is 13.5 square meters. What is the relative error in calculating the area of the floor, to the nearest thousandth?

- 1) 0.051
- 2) 0.052
- 3) 0.054
- 4) 0.055

100 In a recent town election, 1,860 people voted for either candidate A or candidate B for the position of supervisor. If candidate A received 55% of the votes, how many votes did candidate B receive?

- 1) 186
- 2) 837
- 3) 1,023
- 4) 1,805

101 Mrs. Chen owns two pieces of property. The areas of the properties are 77,120 square feet and 33,500 square feet.

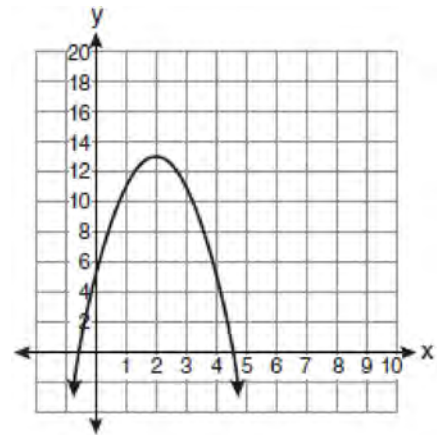
43,560 square feet = 1 acre

Find the total number of acres Mrs. Chen owns, to the nearest hundredth of an acre.

102 The probability that it will snow on Sunday is $\frac{3}{5}$. The probability that it will snow on both Sunday and Monday is $\frac{3}{10}$. What is the probability that it will snow on Monday, if it snowed on Sunday?

- 1) $\frac{9}{50}$
- 2) 2
- 3) $\frac{1}{2}$
- 4) $\frac{9}{10}$

103 What is the equation of the axis of symmetry of the parabola shown in the diagram below?



- 1) $x = -0.5$
- 2) $x = 2$
- 3) $x = 4.5$
- 4) $x = 13$

104 Given: $A = \{18, 6, -3, -12\}$

Determine all elements of set A that are in the solution of the inequality $\frac{2}{3}x + 3 < -2x - 7$.

105 If $\frac{ey}{n} + k = t$, what is y in terms of e , n , k , and t ?

1) $y = \frac{tn + k}{e}$

2) $y = \frac{tn - k}{e}$

3) $y = \frac{n(t + k)}{e}$

4) $y = \frac{n(t - k)}{e}$

106 A method for solving $5(x - 2) - 2(x - 5) = 9$ is shown below. Identify the property used to obtain each of the two indicated steps.

$$5(x - 2) - 2(x - 5) = 9$$

(1) $5x - 10 - 2x + 10 = 9$ (1) _____

(2) $5x - 2x - 10 + 10 = 9$ (2) _____

$$3x + 0 = 9$$

$$3x = 9$$

$$x = 3$$

107 The members of the senior class are planning a dance. They use the equation $r = pn$ to determine the total receipts. What is n expressed in terms of r and p ?

1) $n = r + p$

2) $n = r - p$

3) $n = \frac{p}{r}$

4) $n = \frac{r}{p}$

108 Solve algebraically for x : $\frac{x+2}{6} = \frac{3}{x-1}$

109 A spinner that is equally divided into eight numbered sectors is spun 20 times. The table below shows the number of times the arrow landed in each numbered sector.

Spinner Sector	Number of Times
1	2
2	3
3	2
4	3
5	4
6	2
7	3
8	1

Based on the table, what is the empirical probability that the spinner will land on a prime number on the next spin?

1) $\frac{9}{20}$

2) $\frac{11}{20}$

3) $\frac{12}{20}$

4) $\frac{14}{20}$

110 The number of calories burned while jogging varies directly with the number of minutes spent jogging. If George burns 150 calories by jogging for 20 minutes, how many calories does he burn by jogging for 30 minutes?

1) 100

2) 180

3) 200

4) 225

- 111 Debbie solved the linear equation $3(x + 4) - 2 = 16$ as follows:

[Line 1] $3(x + 4) - 2 = 16$

[Line 2] $3(x + 4) = 18$

[Line 3] $3x + 4 = 18$

[Line 4] $3x = 14$

[Line 5] $x = 4\frac{2}{3}$

She made an error between lines

- 1) 1 and 2
 - 2) 2 and 3
 - 3) 3 and 4
 - 4) 4 and 5
- 112 Which value of x is the solution of $\frac{x}{3} + \frac{x+1}{2} = x$?

- 1) 1
- 2) -1
- 3) 3
- 4) -3

- 113 The ninth grade class at a local high school needs to purchase a park permit for \$250.00 for their upcoming class picnic. Each ninth grader attending the picnic pays \$0.75. Each guest pays \$1.25. If 200 ninth graders attend the picnic, which inequality can be used to determine the number of guests, x , needed to cover the cost of the permit?

- 1) $0.75x - (1.25)(200) \geq 250.00$
- 2) $0.75x + (1.25)(200) \geq 250.00$
- 3) $(0.75)(200) - 1.25x \geq 250.00$
- 4) $(0.75)(200) + 1.25x \geq 250.00$

- 114 Which set of data can be classified as qualitative?
- 1) scores of students in an algebra class
 - 2) ages of students in a biology class
 - 3) numbers of students in history classes
 - 4) eye colors of students in an economics class

- 115 How many different four-letter arrangements are possible with the letters G, A, R, D, E, N if each letter may be used only once?

- 1) 15
- 2) 24
- 3) 360
- 4) 720

- 116 Ms. Mosher recorded the math test scores of six students in the table below.

Student	Student Score
Andrew	72
John	80
George	85
Amber	93
Betty	78
Roberto	80

Determine the mean of the student scores, to the *nearest tenth*. Determine the median of the student scores. Describe the effect on the mean and the median if Ms. Mosher adds 5 bonus points to each of the six students' scores.

- 117 Express $-3\sqrt{48}$ in simplest radical form.

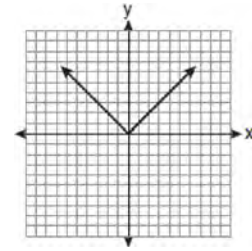
- 118 Which data set describes a situation that could be classified as quantitative?
- 1) the phone numbers in a telephone book
 - 2) the addresses for students at Hopkins High School
 - 3) the zip codes of residents in the city of Buffalo, New York
 - 4) the time it takes each of Mr. Harper's students to complete a test

- 119 Using his ruler, Howell measured the sides of a rectangular prism to be 5 cm by 8 cm by 4 cm. The actual measurements are 5.3 cm by 8.2 cm by 4.1 cm. Find Howell's relative error in calculating the volume of the prism, to the *nearest thousandth*.

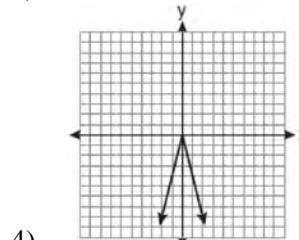
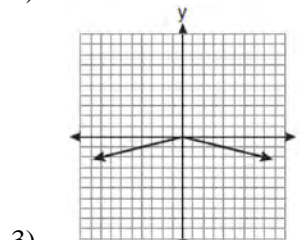
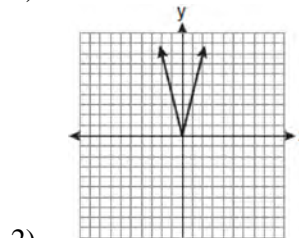
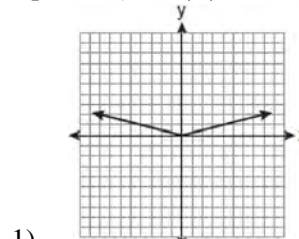
- 120 Melissa graphed the equation $y = x^2$ and Dave graphed the equation $y = -3x^2$ on the same coordinate grid. What is the relationship between the graphs that Melissa and Dave drew?
- 1) Dave's graph is wider and opens in the opposite direction from Melissa's graph.
 - 2) Dave's graph is narrower and opens in the opposite direction from Melissa's graph.
 - 3) Dave's graph is wider and is three units below Melissa's graph.
 - 4) Dave's graph is narrower and is three units to the left of Melissa's graph.

- 121 Josh and Mae work at a concession stand. They each earn \$8 per hour. Josh worked three hours more than Mae. If Josh and Mae earned a total of \$120, how many hours did Josh work?
- 1) 6
 - 2) 9
 - 3) 12
 - 4) 15

- 122 The graph of the equation $y = |x|$ is shown in the diagram below.



Which diagram could represent a graph of the equation $y = a|x|$ when $-1 < a < 0$?



123 Which table does *not* show bivariate data?

Height (inches)	Weight (pounds)
39	50
48	70
60	90

1)

Gallons	Miles Driven
15	300
20	400
25	500

2)

Quiz Average	Frequency
70	12
80	15
90	6

3)

Speed (mph)	Distance (miles)
40	80
50	120
55	150

4)

124 When $a^3 - 4a$ is factored completely, the result is

- 1) $(a - 2)(a + 2)$
- 2) $a(a - 2)(a + 2)$
- 3) $a^2(a - 4)$
- 4) $a(a - 2)^2$

125 Which set of ordered pairs represents a function?

- 1) $\{(0, 4), (2, 4), (2, 5)\}$
- 2) $\{(6, 0), (5, 0), (4, 0)\}$
- 3) $\{(4, 1), (6, 2), (6, 3), (5, 0)\}$
- 4) $\{(0, 4), (1, 4), (0, 5), (1, 5)\}$

126 Roberta needs ribbon for a craft project. The ribbon sells for \$3.75 per yard. Find the cost, in dollars, for 48 inches of the ribbon.

127 Which value of x is the solution of $\frac{2x - 3}{x - 4} = \frac{2}{3}$?

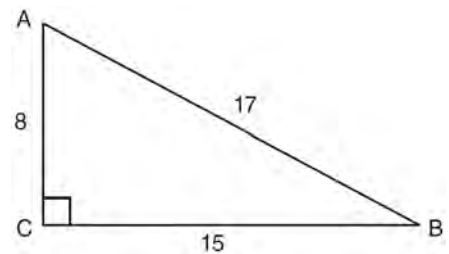
- 1) $-\frac{1}{4}$
- 2) $\frac{1}{4}$
- 3) -4
- 4) 4

128 Steve ran a distance of 150 meters in $1\frac{1}{2}$ minutes.

What is his speed in meters per hour?

- 1) 6
- 2) 60
- 3) 100
- 4) 6,000

129 Right triangle ABC has legs of 8 and 15 and a hypotenuse of 17, as shown in the diagram below.



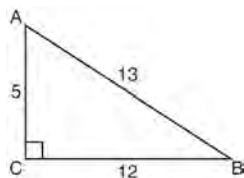
The value of the tangent of $\angle B$ is

- 1) 0.4706
- 2) 0.5333
- 3) 0.8824
- 4) 1.8750

- 130 A cylinder has a diameter of 10 inches and a height of 2.3 inches. What is the volume of this cylinder, to the *nearest tenth of a cubic inch*?
- 1) 72.3
 - 2) 83.1
 - 3) 180.6
 - 4) 722.6

- 131 A survey is being conducted to determine which school board candidate would best serve the Yonkers community. Which group, when randomly surveyed, would likely produce the most bias?
- 1) 15 employees of the Yonkers school district
 - 2) 25 people driving past Yonkers High School
 - 3) 75 people who enter a Yonkers grocery store
 - 4) 100 people who visit the local Yonkers shopping mall

- 132 The diagram below shows right triangle ABC .



Which ratio represents the tangent of $\angle ABC$?

- 1) $\frac{5}{13}$
- 2) $\frac{5}{12}$
- 3) $\frac{12}{13}$
- 4) $\frac{12}{5}$

- 133 Which equation represents a quadratic function?
- 1) $y = x + 2$
 - 2) $y = |x + 2|$
 - 3) $y = x^2$
 - 4) $y = 2^x$

- 134 The sum of $4x^3 + 6x^2 + 2x - 3$ and $3x^3 + 3x^2 - 5x - 5$ is
- 1) $7x^3 + 3x^2 - 3x - 8$
 - 2) $7x^3 + 3x^2 + 7x + 2$
 - 3) $7x^3 + 9x^2 - 3x - 8$
 - 4) $7x^6 + 9x^4 - 3x^2 - 8$

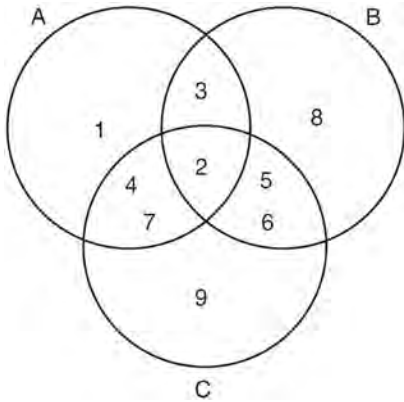
- 135 A plastic storage box in the shape of a rectangular prism has a length of $x + 3$, a width of $x - 4$, and a height of 5. Represent the surface area of the box as a trinomial in terms of x .

- 136 Which equation has roots of -3 and 5 ?
- 1) $x^2 + 2x - 15 = 0$
 - 2) $x^2 - 2x - 15 = 0$
 - 3) $x^2 + 2x + 15 = 0$
 - 4) $x^2 - 2x + 15 = 0$

- 137 Angela wants to purchase carpeting for her living room. The dimensions of her living room are 12 feet by 12 feet. If carpeting is sold by the square yard, determine how many square yards of carpeting she must purchase.

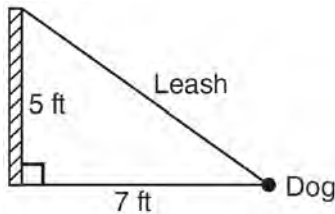
<p>3 feet = 1 yard 9 square feet = 1 square yard</p>
--

138 Which set represents the intersection of sets A, B, and C shown in the diagram below?



- 1) {3,4,5,6,7}
- 2) {2}
- 3) {2,3,4,5,6,7}
- 4) {1,2,3,4,5,6,7,8,9}

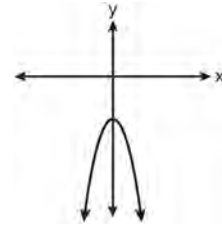
139 The end of a dog's leash is attached to the top of a 5-foot-tall fence post, as shown in the diagram below. The dog is 7 feet away from the base of the fence post.



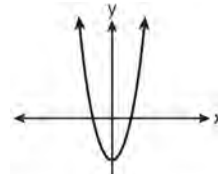
How long is the leash, to the *nearest tenth of a foot*?

- 1) 4.9
- 2) 8.6
- 3) 9.0
- 4) 12.0

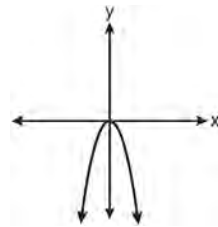
140 The diagram below shows the graph of $y = -x^2 - c$.



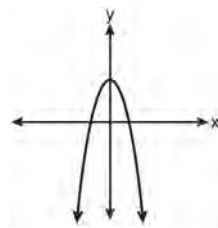
Which diagram shows the graph of $y = x^2 - c$?



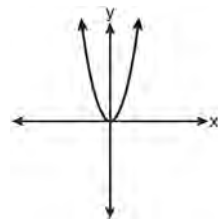
1)



2)

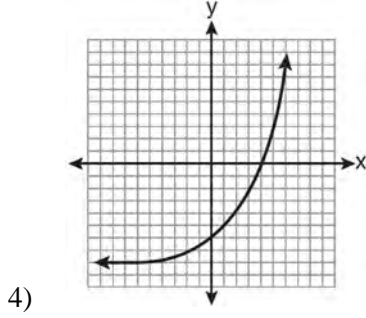
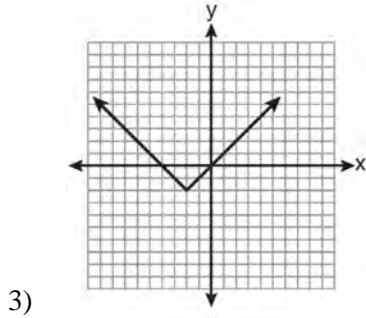
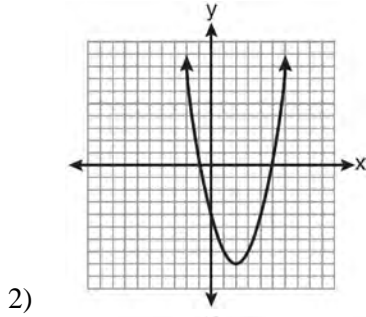
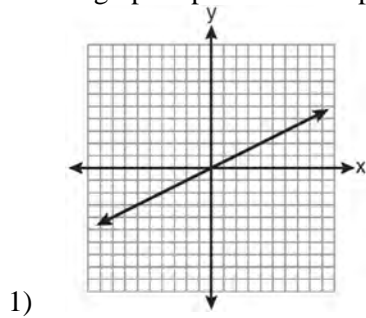


3)



4)

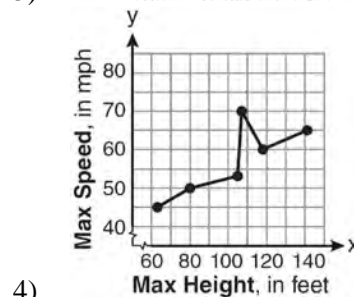
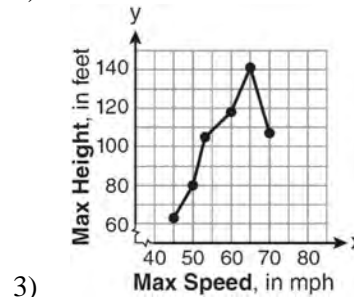
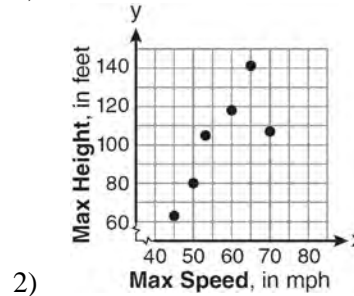
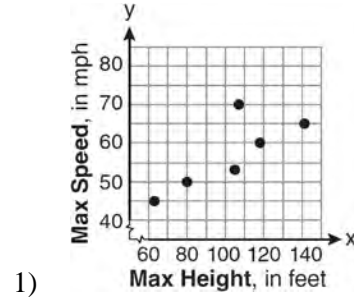
141 Which graph represents an exponential equation?



142 The maximum height and speed of various roller coasters in North America are shown in the table below.

Maximum Speed, in mph, (x)	45	50	54	60	65	70
Maximum Height, in feet, (y)	63	80	105	118	141	107

Which graph represents a correct scatter plot of the data?



143 The area of a rectangle is represented by $x^2 - 5x - 24$. If the width of the rectangle is represented by $x - 8$, express the length of the rectangle as a binomial.

144 Which expression represents $\frac{12x^3 - 6x^2 + 2x}{2x}$ in simplest form?

- 1) $6x^2 - 3x$
- 2) $10x^2 - 4x$
- 3) $6x^2 - 3x + 1$
- 4) $10x^2 - 4x + 1$

145 Given the following list of students' scores on a quiz:

5, 12, 7, 15, 20, 14, 7

Determine the median of these scores. Determine the mode of these scores. The teacher decides to adjust these scores by adding three points to each score. Explain the effect, if any, that this will have on the median and mode of these scores.

146 The value of a car purchased for \$20,000 decreases at a rate of 12% per year. What will be the value of the car after 3 years?

- 1) \$12,800.00
- 2) \$13,629.44
- 3) \$17,600.00
- 4) \$28,098.56

147 In $\triangle ABC$, the measure of $\angle B = 90^\circ$, $AC = 50$, $AB = 48$, and $BC = 14$. Which ratio represents the tangent of $\angle A$?

- 1) $\frac{14}{50}$
- 2) $\frac{14}{48}$
- 3) $\frac{48}{50}$
- 4) $\frac{48}{14}$

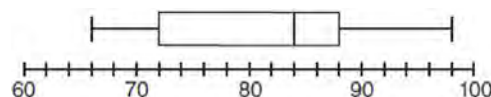
148 The algebraic expression $\frac{x-2}{x^2-9}$ is undefined when x is

- 1) 0
- 2) 2
- 3) 3
- 4) 9

149 When 36 is subtracted from the square of a number, the result is five times the number. What is the positive solution?

- 1) 9
- 2) 6
- 3) 3
- 4) 4

150 The box-and-whisker plot below represents the math test scores of 20 students.



What percentage of the test scores are *less than* 72?

- 1) 25
- 2) 50
- 3) 75
- 4) 100

151 What is $\frac{2+x}{5x} - \frac{x-2}{5x}$ expressed in simplest form?

- 1) 0
- 2) $\frac{2}{5}$
- 3) $\frac{4}{5x}$
- 4) $\frac{2x+4}{5x}$

152 Jon is buying tickets for himself for two concerts. For the jazz concert, 4 tickets are available in the front row, and 32 tickets are available in the other rows. For the orchestra concert, 3 tickets are available in the front row, and 23 tickets are available in the other rows. Jon is randomly assigned one ticket for each concert. Determine the concert for which he is more likely to get a front-row ticket. Justify your answer.

153 What is the value of x in the equation $2(x - 4) = 4(2x + 1)$?

- 1) -2
- 2) 2
- 3) $-\frac{1}{2}$
- 4) $\frac{1}{2}$

154 Ben has four more than twice as many CDs as Jake. If they have a total of 31 CDs, how many CDs does Jake have?

- 1) 9
- 2) 13
- 3) 14
- 4) 22

155 Which ordered pair is in the solution set of the following system of linear inequalities?

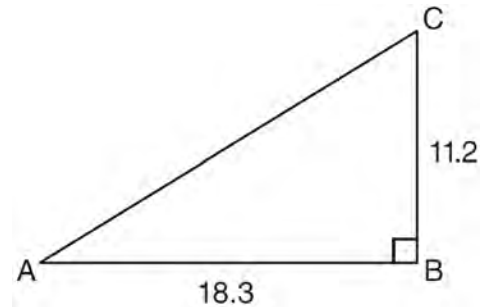
$$y < 2x + 2$$
$$y \geq -x - 1$$

- 1) $(0, 3)$
- 2) $(2, 0)$
- 3) $(-1, 0)$
- 4) $(-1, -4)$

156 Which equation represents the line that passes through the point $(1, 5)$ and has a slope of -2 ?

- 1) $y = -2x + 7$
- 2) $y = -2x + 11$
- 3) $y = 2x - 9$
- 4) $y = 2x + 3$

157 In right triangle ABC shown below, $AB = 18.3$ and $BC = 11.2$.



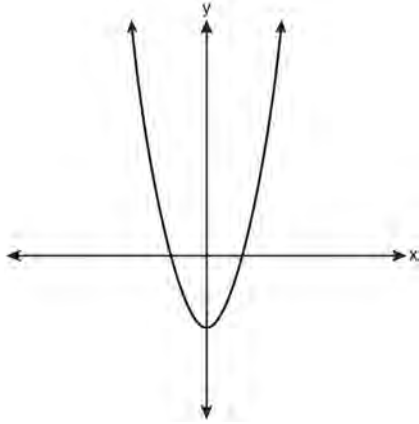
What is the measure of $\angle A$, to the nearest tenth of a degree?

- 1) 31.5
- 2) 37.7
- 3) 52.3
- 4) 58.5

158 Which relation is a function?

- 1) $\left\{ \left(\frac{3}{4}, 0 \right), (0, 1), \left(\frac{3}{4}, 2 \right) \right\}$
- 2) $\left\{ (-2, 2), \left(-\frac{1}{2}, 1 \right), (-2, 4) \right\}$
- 3) $\{(-1, 4), (0, 5), (0, 4)\}$
- 4) $\{(2, 1), (4, 3), (6, 5)\}$

- 159 Which type of function is represented by the graph shown below?

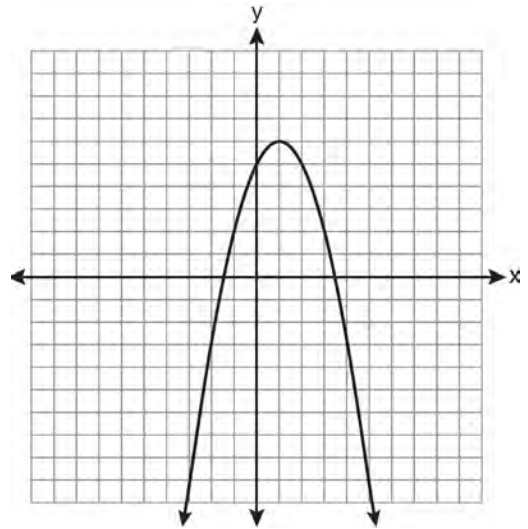


- 1) absolute value
 - 2) exponential
 - 3) linear
 - 4) quadratic
- 160 The length of a rectangle is 3 inches more than its width. The area of the rectangle is 40 square inches. What is the length, in inches, of the rectangle?
- 1) 5
 - 2) 8
 - 3) 8.5
 - 4) 11.5
- 161 The height, y , of a ball tossed into the air can be represented by the equation $y = -x^2 + 10x + 3$, where x is the elapsed time. What is the equation of the axis of symmetry of this parabola?
- 1) $y = 5$
 - 2) $y = -5$
 - 3) $x = 5$
 - 4) $x = -5$

- 162 Which equation represents a line parallel to the graph of $2x - 4y = 16$?


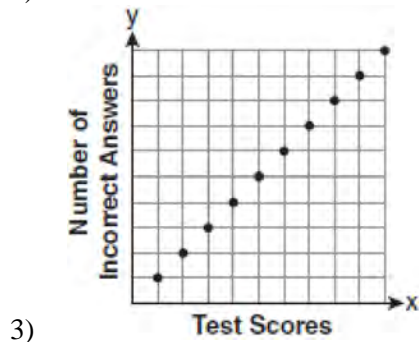
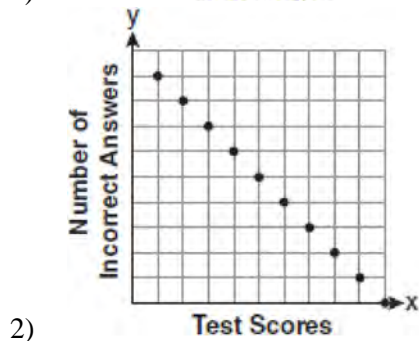
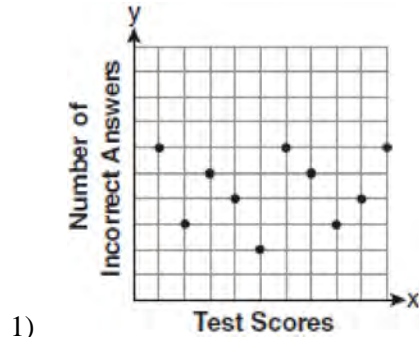
- 1) $y = \frac{1}{2}x - 5$
- 2) $y = -\frac{1}{2}x + 4$
- 3) $y = -2x + 6$
- 4) $y = 2x + 8$

- 163 What are the vertex and the axis of symmetry of the parabola shown in the graph below?



- 1) vertex: (1,6); axis of symmetry: $y = 1$
- 2) vertex: (1,6); axis of symmetry: $x = 1$
- 3) vertex: (6,1); axis of symmetry: $y = 1$
- 4) vertex: (6,1); axis of symmetry: $x = 1$

164 Which scatter plot shows the relationship between x and y if x represents a student score on a test and y represents the number of incorrect answers a student received on the same test?



165 Which algebraic expression represents 15 less than x divided by 9?

- 1) $\frac{x}{9} - 15$
- 2) $9x - 15$
- 3) $15 - \frac{x}{9}$
- 4) $15 - 9x$

166 A bag contains eight green marbles, five white marbles, and two red marbles. What is the probability of drawing a red marble from the bag?

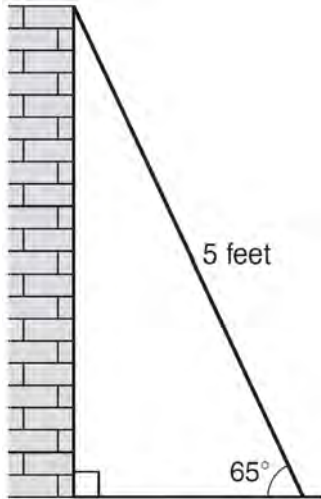
- 1) $\frac{1}{15}$
- 2) $\frac{2}{15}$
- 3) $\frac{2}{13}$
- 4) $\frac{13}{15}$

167 Michael is 25 years younger than his father. The sum of their ages is 53. What is Michael's age?

- 1) 14
- 2) 25
- 3) 28
- 4) 39

168 Chelsea has \$45 to spend at the fair. She spends \$20 on admission and \$15 on snacks. She wants to play a game that costs \$0.65 per game. Write an inequality to find the maximum number of times, x , Chelsea can play the game. Using this inequality, determine the maximum number of times she can play the game.

- 169 As shown in the diagram below, a ladder 5 feet long leans against a wall and makes an angle of 65° with the ground. Find, to the *nearest tenth of a foot*, the distance from the wall to the base of the ladder.



- 170 How many different ways can five books be arranged on a shelf?

- 1) 5
- 2) 15
- 3) 25
- 4) 120

- 171 What is $3\sqrt{2} + \sqrt{8}$ expressed in simplest radical form?

- 1) $3\sqrt{10}$
- 2) $3\sqrt{16}$
- 3) $5\sqrt{2}$
- 4) $7\sqrt{2}$

- 172 The dimensions of a rectangle are measured to be 12.2 inches by 11.8 inches. The actual dimensions are 12.3 inches by 11.9 inches. What is the relative error, to the *nearest ten-thousandth*, in calculating the area of the rectangle?

- 1) 0.0168
- 2) 0.0167
- 3) 0.0165
- 4) 0.0164

- 173 What is the solution of the system of equations $2x - 5y = 11$ and $-2x + 3y = -9$?

- 1) $(-3, -1)$
- 2) $(-1, 3)$
- 3) $(3, -1)$
- 4) $(3, 1)$

- 174 Which expression represents $\frac{-14a^2c^8}{7a^3c^2}$ in simplest form?

- 1) $-2ac^4$
- 2) $-2ac^6$
- 3) $\frac{-2c^4}{a}$
- 4) $\frac{-2c^6}{a}$

- 175 The value, y , of a \$15,000 investment over x years is represented by the equation $y = 15000(1.2)^{\frac{x}{3}}$. What is the profit (interest) on a 6-year investment?

- 1) \$6,600
- 2) \$10,799
- 3) \$21,600
- 4) \$25,799

176 What is the value of the expression $-3x^2y + 4x$ when $x = -4$ and $y = 2$?

- 1) -112
- 2) -80
- 3) 80
- 4) 272

177 Find three consecutive positive even integers such that the product of the second and third integers is twenty more than ten times the first integer. [Only an algebraic solution can receive full credit.]

178 The quotient of (9.2×10^6) and (2.3×10^2) expressed in scientific notation is

- 1) $4,000$
- 2) $40,000$
- 3) 4×10^3
- 4) 4×10^4

179 Which verbal expression can be represented by $2(x - 5)$?

- 1) 5 less than 2 times x
- 2) 2 multiplied by x less than 5
- 3) twice the difference of x and 5
- 4) the product of 2 and x , decreased by 5

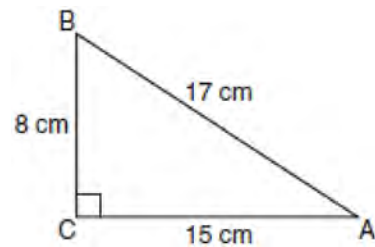
180 A hiker walked 12.8 miles from 9:00 a.m. to noon. He walked an additional 17.2 miles from 1:00 p.m. to 6:00 p.m. What is his average rate for the entire walk, in miles per hour?

- 1) 3.75
- 2) 3.86
- 3) 4.27
- 4) 7.71

181 Corinne calculated the area of a paper plate to be 50.27 square inches. If the actual area of the plate is 55.42 square inches, what is the relative error in calculating the area, to the nearest thousandth?

- 1) 0.092
- 2) 0.093
- 3) 0.102
- 4) 0.103

182 Which equation shows a correct trigonometric ratio for angle A in the right triangle below?



- 1) $\sin A = \frac{15}{17}$
- 2) $\tan A = \frac{8}{17}$
- 3) $\cos A = \frac{15}{17}$
- 4) $\tan A = \frac{5}{8}$

183 Factored completely, the expression $3x^2 - 3x - 18$ is equivalent to

- 1) $3(x^2 - x - 6)$
- 2) $3(x - 3)(x + 2)$
- 3) $(3x - 9)(x + 2)$
- 4) $(3x + 6)(x - 3)$

184 For which set of values of x is the algebraic

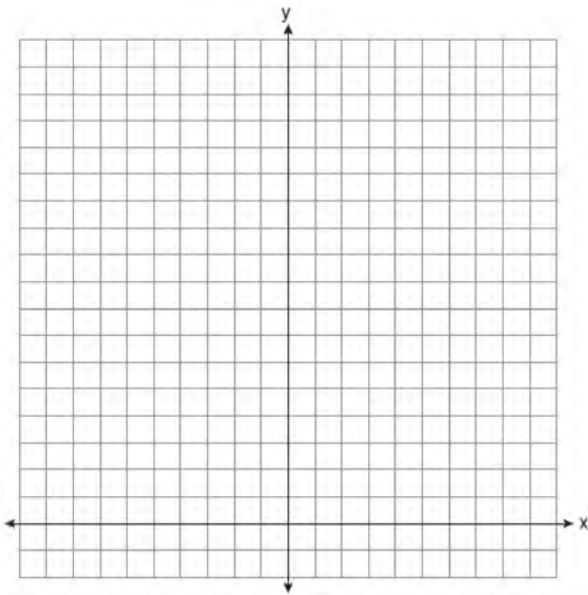
expression $\frac{x^2 - 16}{x^2 - 4x - 12}$ undefined?

- 1) $\{-6, 2\}$
- 2) $\{-4, 3\}$
- 3) $\{-4, 4\}$
- 4) $\{-2, 6\}$

185 On the set of axes below, solve the following system of equations graphically for all values of x and y .

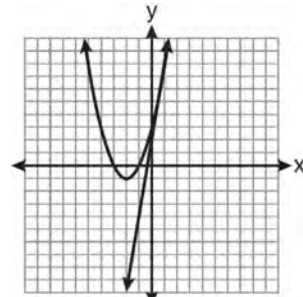
$$y = -x^2 - 4x + 12$$

$$y = -2x + 4$$

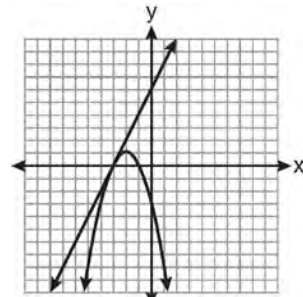


186 Express $\frac{16\sqrt{21}}{2\sqrt{7}} - 5\sqrt{12}$ in simplest radical form.

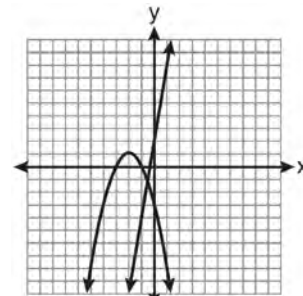
187 Which graph could be used to find the solution of the system of equations $y = 2x + 6$ and $y = x^2 + 4x + 3$?



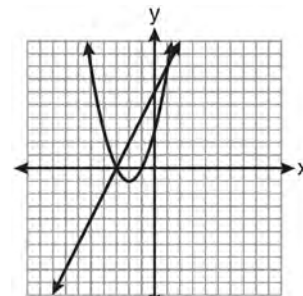
1)



2)



3)

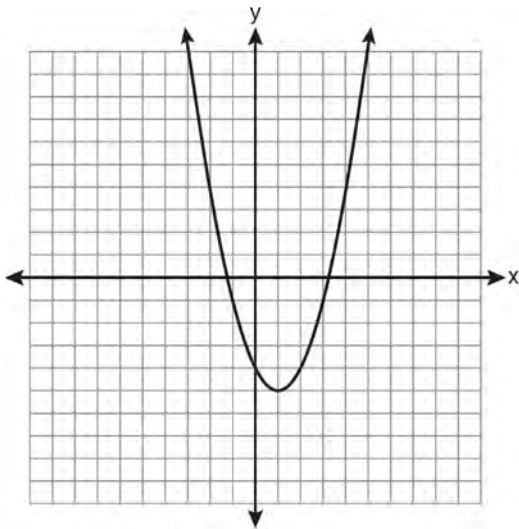


4)

- 188 Tim ate four more cookies than Alice. Bob ate twice as many cookies as Tim. If x represents the number of cookies Alice ate, which expression represents the number of cookies Bob ate?
- 1) $2 + (x + 4)$
 - 2) $2x + 4$
 - 3) $2(x + 4)$
 - 4) $4(x + 2)$

- 189 An example of an algebraic expression is
- 1) $\frac{2x + 3}{7} = \frac{13}{x}$
 - 2) $(2x + 1)(x - 7)$
 - 3) $4x - 1 = 4$
 - 4) $x = 2$

- 190 State the equation of the axis of symmetry and the coordinates of the vertex of the parabola graphed below.



- 191 What is the value of the expression $(a^3 + b^0)^2$ when $a = -2$ and $b = 4$?
- 1) 64
 - 2) 49
 - 3) -49
 - 4) -64


- 192 In a science fiction novel, the main character found a mysterious rock that decreased in size each day. The table below shows the part of the rock that remained at noon on successive days.

Day	Fractional Part of the Rock Remaining
1	1
2	$\frac{1}{2}$
3	$\frac{1}{4}$
4	$\frac{1}{8}$

Which fractional part of the rock will remain at noon on day 7?

- 1) $\frac{1}{128}$
 - 2) $\frac{1}{64}$
 - 3) $\frac{1}{14}$
 - 4) $\frac{1}{12}$
- 193 Express in simplest form:
- $$\frac{x^2 + 9x + 14}{x^2 - 49} \div \frac{3x + 6}{x^2 + x - 56}$$

- 194 A trapezoid is shown below.



Calculate the measure of angle x , to the *nearest tenth of a degree*.

- 195 Which set-builder notation describes $\{-3, -2, -1, 0, 1, 2\}$?

- 1) $\{x \mid -3 \leq x < 2, \text{ where } x \text{ is an integer}\}$
- 2) $\{x \mid -3 < x \leq 2, \text{ where } x \text{ is an integer}\}$
- 3) $\{x \mid -3 < x < 2, \text{ where } x \text{ is an integer}\}$
- 4) $\{x \mid -3 \leq x \leq 2, \text{ where } x \text{ is an integer}\}$

- 196 The expression $\frac{(10w^3)^2}{5w}$ is equivalent to

- 1) $2w^5$
- 2) $2w^8$
- 3) $20w^5$
- 4) $20w^8$

- 197 Which equation illustrates the associative property?

- 1) $x + y + z = x + y + z$
- 2) $x(y + z) = xy + xz$
- 3) $x + y + z = z + y + x$
- 4) $(x + y) + z = x + (y + z)$

- 198 Roger is having a picnic for 78 guests. He plans to serve each guest at least one hot dog. If each package, p , contains eight hot dogs, which inequality could be used to determine how many packages of hot dogs Roger will need to buy?

- 1) $p \geq 78$
- 2) $8p \geq 78$
- 3) $8 + p \geq 78$
- 4) $78 - p \geq 8$

- 199 A right triangle contains a 38° angle whose adjacent side measures 10 centimeters. What is the length of the hypotenuse, to the *nearest hundredth of a centimeter*?

- 1) 7.88
- 2) 12.69
- 3) 12.80
- 4) 16.24

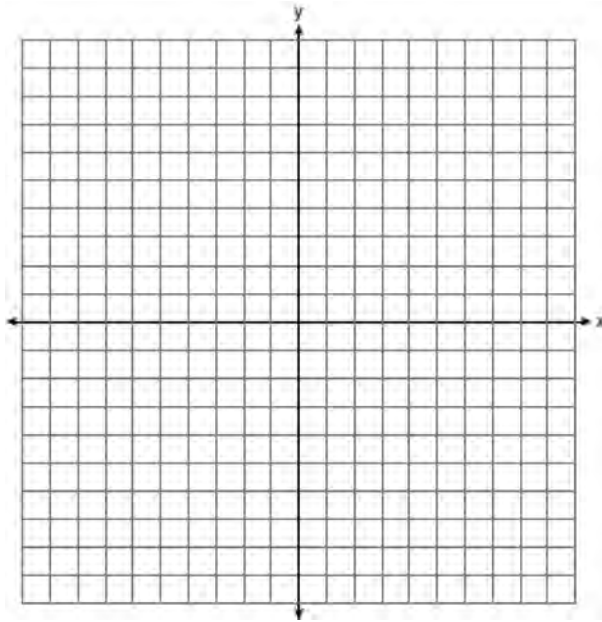
- 200 Which expression is equivalent to $-3x(x - 4) - 2x(x + 3)$?

- 1) $-x^2 - 1$
- 2) $-x^2 + 18x$
- 3) $-5x^2 - 6x$
- 4) $-5x^2 + 6x$

- 201 The expression $\sqrt{72} - 3\sqrt{2}$ written in simplest radical form is

- 1) $5\sqrt{2}$
- 2) $3\sqrt{6}$
- 3) $3\sqrt{2}$
- 4) $\sqrt{6}$

- 202 On the set of axes below, graph and label the equations $y = |x|$ and $y = 3|x|$ for the interval $-3 \leq x \leq 3$.



Explain how changing the coefficient of the absolute value from 1 to 3 affects the graph.

203 Solve for m : $\frac{m}{5} + \frac{3(m-1)}{2} = 2(m-3)$

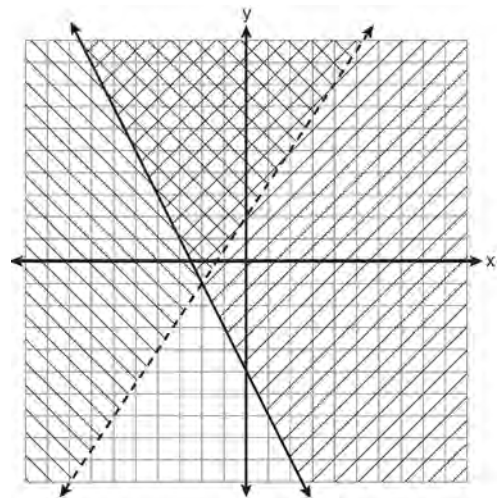
- 204 Given: $A = \{3, 6, 9, 12, 15\}$
 $B = \{2, 4, 6, 8, 10, 12\}$
 What is the union of sets A and B ?
- 1) $\{6\}$
 - 2) $\{6, 12\}$
 - 3) $\{2, 3, 4, 8, 9, 10, 15\}$
 - 4) $\{2, 3, 4, 6, 8, 9, 10, 12, 15\}$

- 205 Find the roots of the equation $x^2 = 30 - 13x$ algebraically.

- 206 Which expression represents $36x^2 - 100y^6$ factored completely?

- 1) $2(9x + 25y^3)(9x - 25y^3)$
- 2) $4(3x + 5y^3)(3x - 5y^3)$
- 3) $(6x + 10y^3)(6x - 10y^3)$
- 4) $(18x + 50y^3)(18x - 50y^3)$

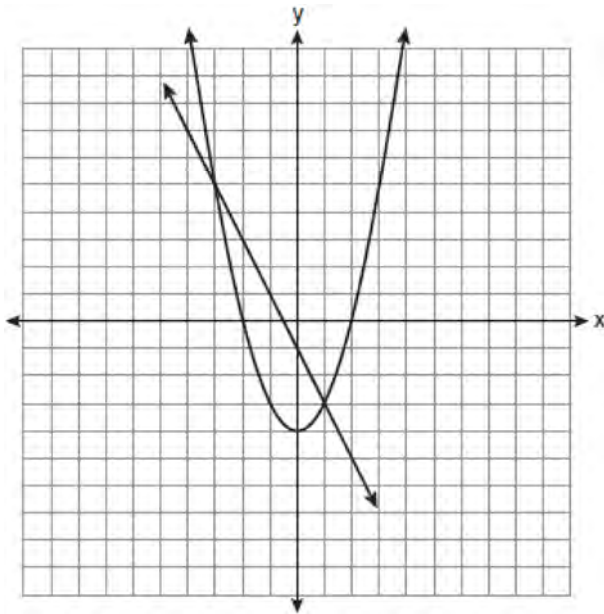
- 207 Which ordered pair is in the solution set of the system of inequalities shown in the graph below?



- 1) $(-2, -1)$
- 2) $(-2, 2)$
- 3) $(-2, -4)$
- 4) $(2, -2)$

208 An oil company distributes oil in a metal can shaped like a cylinder that has an actual radius of 5.1 cm and a height of 15.1 cm. A worker incorrectly measured the radius as 5 cm and the height as 15 cm. Determine the relative error in calculating the surface area, to the *nearest thousandth*.

209 Which ordered pair is a solution of the system of equations shown in the graph below?



- 1) (-3, 1)
- 2) (-3, 5)
- 3) (0, -1)
- 4) (0, -4)

210 The value of the expression $-|a - b|$ when $a = 7$ and $b = -3$ is

- 1) -10
- 2) 10
- 3) -4
- 4) 4

211 Solve algebraically for x : $\frac{3}{4} = \frac{-(x+11)}{4x} + \frac{1}{2x}$

212 In interval notation, the set of all real numbers greater than -6 and less than or equal to 14 is represented by

- 1) $(-6, 14)$
- 2) $[-6, 14)$
- 3) $(-6, 14]$
- 4) $[-6, 14]$

213 What is the slope of the line passing through the points $(-2, 4)$ and $(3, 6)$?

- 1) $-\frac{5}{2}$
- 2) $-\frac{2}{5}$
- 3) $\frac{2}{5}$
- 4) $\frac{5}{2}$

214 The expression $x^2 - 36y^2$ is equivalent to

- 1) $(x - 6y)(x - 6y)$
- 2) $(x - 18y)(x - 18y)$
- 3) $(x + 6y)(x - 6y)$
- 4) $(x + 18y)(x - 18y)$

215 Which relation represents a function?

- 1) $\{(0, 3), (2, 4), (0, 6)\}$
- 2) $\{(-7, 5), (-7, 1), (-10, 3), (-4, 3)\}$
- 3) $\{(2, 0), (6, 2), (6, -2)\}$
- 4) $\{(-6, 5), (-3, 2), (1, 2), (6, 5)\}$

- 216 Which interval notation represents the set of all numbers greater than or equal to 5 and less than 12?
- 1) $[5, 12)$
 - 2) $(5, 12]$
 - 3) $(5, 12)$
 - 4) $[5, 12]$

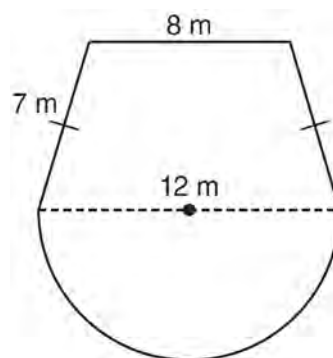
- 217 The expression $\frac{12w^9y^3}{-3w^3y^3}$ is equivalent to
- 1) $-4w^6$
 - 2) $-4w^3y$
 - 3) $9w^6$
 - 4) $9w^3y$

- 218 The legs of an isosceles right triangle each measure 10 inches. What is the length of the hypotenuse of this triangle, to the *nearest tenth of an inch*?
- 1) 6.3
 - 2) 7.1
 - 3) 14.1
 - 4) 17.1

- 219 If Ann correctly factors an expression that is the difference of two perfect squares, her factors could be
- 1) $(2x + y)(x - 2y)$
 - 2) $(2x + 3y)(2x - 3y)$
 - 3) $(x - 4)(x - 4)$
 - 4) $(2y - 5)(y - 5)$

- 220 What is the solution of the inequality $-6x - 17 \geq 8x + 25$?
- 1) $x \geq 3$
 - 2) $x \leq 3$
 - 3) $x \geq -3$
 - 4) $x \leq -3$

- 221 A garden is in the shape of an isosceles trapezoid and a semicircle, as shown in the diagram below. A fence will be put around the perimeter of the entire garden.



Which expression represents the length of fencing, in meters, that will be needed?

- 1) $22 + 6\pi$
 - 2) $22 + 12\pi$
 - 3) $15 + 6\pi$
 - 4) $15 + 12\pi$
- 222 What is the sum of $\frac{-x+7}{2x+4}$ and $\frac{2x+5}{2x+4}$?
- 1) $\frac{x+12}{2x+4}$
 - 2) $\frac{3x+12}{2x+4}$
 - 3) $\frac{x+12}{4x+8}$
 - 4) $\frac{3x+12}{4x+8}$

223 What is the quotient of $\frac{x}{x+4}$ divided by $\frac{2x}{x^2-16}$?

- 1) $\frac{2}{x-4}$
- 2) $\frac{2x^2}{x-4}$
- 3) $\frac{2x^2}{x^2-16}$
- 4) $\frac{x-4}{2}$

224 The freshman class held a canned food drive for 12 weeks. The results are summarized in the table below.

Canned Food Drive Results

Week	1	2	3	4	5	6	7	8	9	10	11	12
Number of Cans	20	35	32	45	58	46	28	23	31	79	65	62

Which number represents the second quartile of the number of cans of food collected?

- 1) 29.5
- 2) 30.5
- 3) 40
- 4) 60

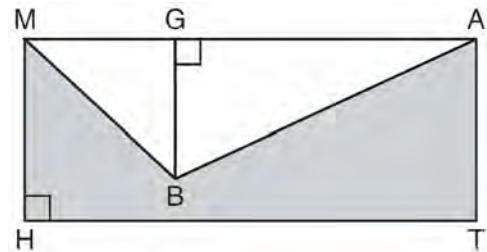
225 Which situation does *not* describe a causal relationship?

- 1) The higher the volume on a radio, the louder the sound will be.
- 2) The faster a student types a research paper, the more pages the paper will have.
- 3) The shorter the distance driven, the less gasoline that will be used.
- 4) The slower the pace of a runner, the longer it will take the runner to finish the race.

226 Which value of x is the solution of the equation $\frac{2}{3}x + \frac{1}{2} = \frac{5}{6}$?

- 1) $\frac{1}{2}$
- 2) 2
- 3) $\frac{2}{3}$
- 4) $\frac{3}{2}$

227 In the diagram below, $MATH$ is a rectangle, $GB = 4.6$, $MH = 6$, and $HT = 15$.



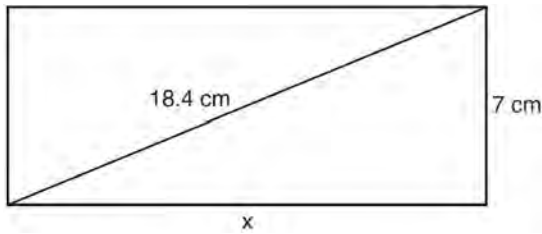
What is the area of polygon $MBATH$?

- 1) 34.5
- 2) 55.5
- 3) 90.0
- 4) 124.5

228 Which equation represents the line that passes through the points $(-3, 7)$ and $(3, 3)$?

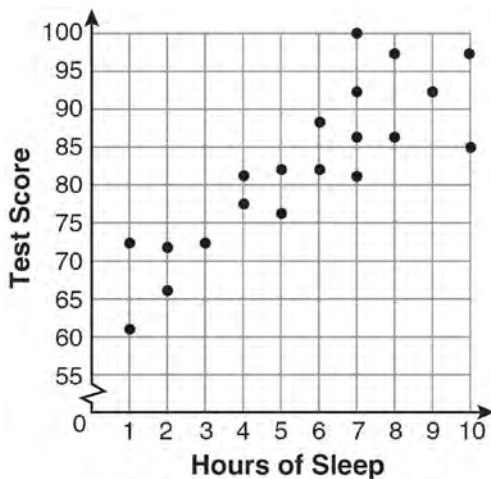
- 1) $y = \frac{2}{3}x + 1$
- 2) $y = \frac{2}{3}x + 9$
- 3) $y = -\frac{2}{3}x + 5$
- 4) $y = -\frac{2}{3}x + 9$

- 229 The rectangle shown below has a diagonal of 18.4 cm and a width of 7 cm.



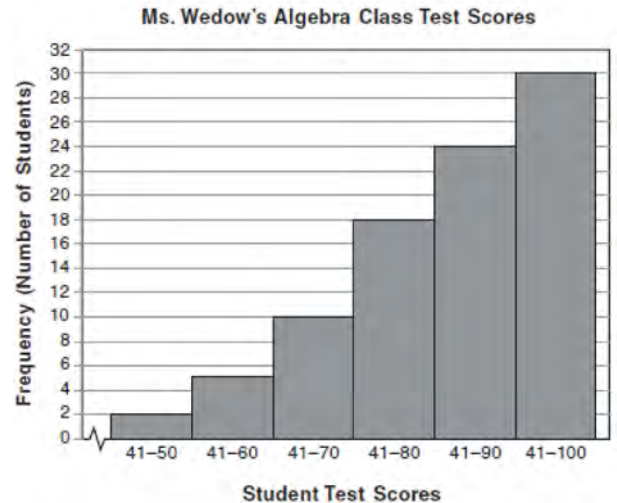
To the *nearest centimeter*, what is the length, x , of the rectangle?

- 1) 11
 - 2) 17
 - 3) 20
 - 4) 25
- 230 What is the relationship between the independent and dependent variables in the scatter plot shown below?



- 1) undefined correlation
- 2) negative correlation
- 3) positive correlation
- 4) no correlation

- 231 The diagram below shows a cumulative frequency histogram of the students' test scores in Ms. Wedow's algebra class.



Determine the total number of students in the class. Determine how many students scored higher than 70. State which *ten-point interval* contains the median. State which *two ten-point intervals* contain the same frequency.

- 232 What are the roots of the equation $x^2 - 5x + 6 = 0$?

- 1) 1 and -6
- 2) 2 and 3
- 3) -1 and 6
- 4) -2 and -3

- 233 What are the factors of the expression $x^2 + x - 20$?

- 1) $(x + 5)$ and $(x + 4)$
- 2) $(x + 5)$ and $(x - 4)$
- 3) $(x - 5)$ and $(x + 4)$
- 4) $(x - 5)$ and $(x - 4)$

Integrated Algebra Regents at Random

234 Peter walked 8,900 feet from home to school.

1 mile = 5,280 feet

How far, to the *nearest tenth of a mile*, did he walk?

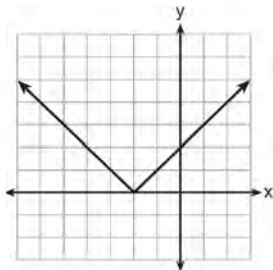
- 1) 0.5
- 2) 0.6
- 3) 1.6
- 4) 1.7

235 State the value of the expression

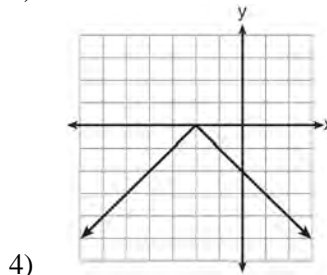
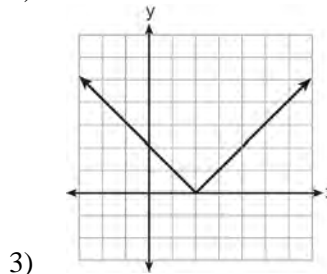
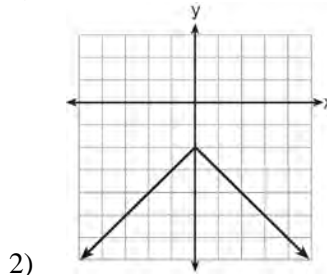
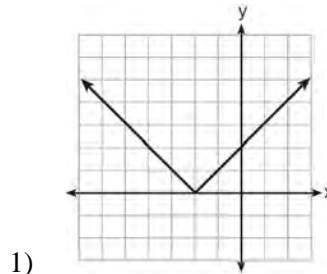
$$\frac{(4.1 \times 10^2)(2.4 \times 10^3)}{(1.5 \times 10^7)}$$

in scientific notation.

236 The graph of $y = |x + 2|$ is shown below.



Which graph represents $y = -|x + 2|$?



237 Factored completely, the expression

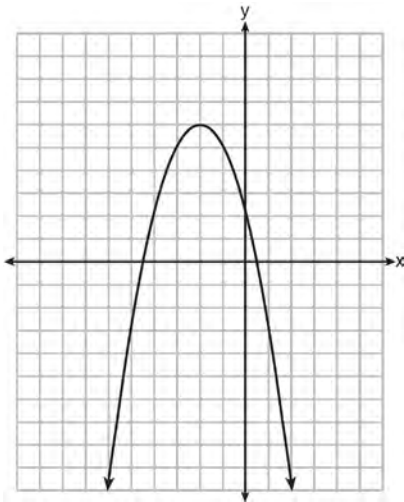
$$3x^3 - 33x^2 + 90x$$

is equivalent to

- 1) $3x(x^2 - 33x + 90)$
- 2) $3x(x^2 - 11x + 30)$
- 3) $3x(x + 5)(x + 6)$
- 4) $3x(x - 5)(x - 6)$

- 238 When $8x^2 + 3x + 2$ is subtracted from $9x^2 - 3x - 4$, the result is
- 1) $x^2 - 2$
 - 2) $17x^2 - 2$
 - 3) $-x^2 + 6x + 6$
 - 4) $x^2 - 6x - 6$
- 239 Which interval notation describes the set $S = \{x \mid 1 \leq x < 10\}$?
- 1) $[1, 10]$
 - 2) $(1, 10]$
 - 3) $[1, 10)$
 - 4) $(1, 10)$
- 240 The length and width of the base of a rectangular prism are 5.5 cm and 3 cm. The height of the prism is 6.75 cm. Find the *exact* value of the surface area of the prism, in square centimeters.
- 241 Which set of coordinates is a solution of the equation $2x - y = 11$?
- 1) $(-6, 1)$
 - 2) $(-1, 9)$
 - 3) $(0, 11)$
 - 4) $(2, -7)$
- 242 If $A = \{0, 1, 3, 4, 6, 7\}$, $B = \{0, 2, 3, 5, 6\}$, and $C = \{0, 1, 4, 6, 7\}$, then $A \cap B \cap C$ is
- 1) $\{0, 1, 2, 3, 4, 5, 6, 7\}$
 - 2) $\{0, 3, 6\}$
 - 3) $\{0, 6\}$
 - 4) $\{0\}$
- 243 The total score in a football game was 72 points. The winning team scored 12 points more than the losing team. How many points did the winning team score?
- 1) 30
 - 2) 42
 - 3) 54
 - 4) 60
- 244 A survey is being conducted to determine if a cable company should add another sports channel to their schedule. Which random survey would be the least biased?
- 1) surveying 30 men at a gym
 - 2) surveying 45 people at a mall
 - 3) surveying 50 fans at a football game
 - 4) surveying 20 members of a high school soccer team
- 245 The sum of three consecutive odd integers is 18 less than five times the middle number. Find the three integers. [Only an algebraic solution can receive full credit.]

- 246 What are the coordinates of the vertex and the equation of the axis of symmetry of the parabola shown in the graph below?



- 1) (0,2) and $y = 2$
 - 2) (0,2) and $x = 2$
 - 3) (-2,6) and $y = -2$
 - 4) (-2,6) and $x = -2$
- 247 What is the solution set of the system of equations

$$x + y = 5 \text{ and } y = x^2 - 25?$$

- 1) $\{(0,5), (11,-6)\}$
 - 2) $\{(5,0), (-6,11)\}$
 - 3) $\{(-5,0), (6,11)\}$
 - 4) $\{(-5,10), (6,-1)\}$
- 248 Express the product of $\frac{x+2}{2}$ and $\frac{4x+20}{x^2+6x+8}$ in simplest form.

- 249 A turtle and a rabbit are in a race to see who is first to reach a point 100 feet away. The turtle travels at a constant speed of 20 feet per minute for the entire 100 feet. The rabbit travels at a constant speed of 40 feet per minute for the first 50 feet, stops for 3 minutes, and then continues at a constant speed of 40 feet per minute for the last 50 feet. Determine which animal won the race and by how much time.

- 250 A sandwich consists of one type of bread, one type of meat, and one type of cheese. The possible choices are listed below.

Bread: white, rye

Meat: ham, turkey, beef

Cheese: American, Swiss

Draw a tree diagram or list a sample space of all the possible different sandwiches consisting of one type of bread, one type of meat, and one type of cheese. Determine the number of sandwiches that will *not* include turkey. Determine the number of sandwiches that will include rye bread and Swiss cheese.

- 251 What is the solution of $\frac{2}{x+1} = \frac{x+1}{2}$?

- 1) -1 and -3
- 2) -1 and 3
- 3) 1 and -3
- 4) 1 and 3

252 A company is running a contest and offering a first, second, and third prize. First prize is a choice of a car or \$15,000 cash. Second prize is a choice of a motorbike, a trip to New York City, or \$2,000 cash. Third prize is a choice of a television or \$500 cash. If each prize is equally likely to be selected, list the sample space or draw a tree diagram of *all* possible different outcomes of first, second, and third prizes. Determine the number of ways that *all* three prizes selected could be cash. Determine the number of ways that *none* of the three prizes selected could be cash.

253 Three fair coins are tossed. What is the probability that two heads and one tail appear?

- 1) $\frac{1}{8}$
- 2) $\frac{3}{8}$
- 3) $\frac{3}{6}$
- 4) $\frac{2}{3}$

254 If five times a number is less than 55, what is the greatest possible integer value of the number?

- 1) 12
- 2) 11
- 3) 10
- 4) 9

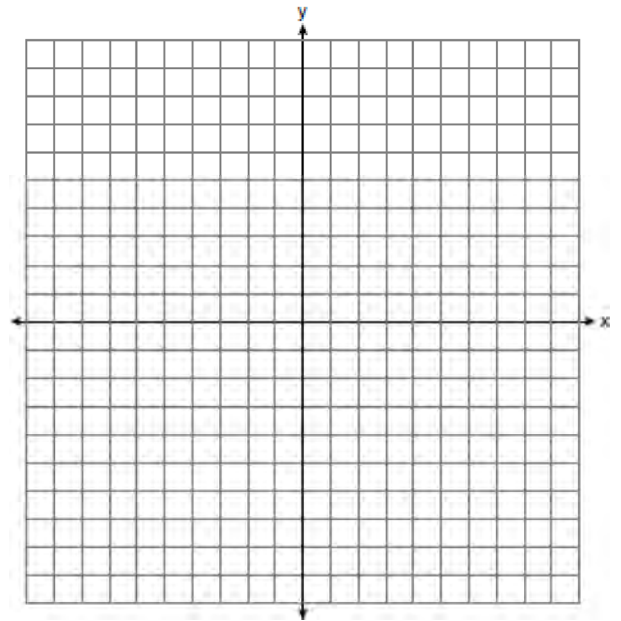
255 Brianna's score on a national math assessment exceeded the scores of 95,000 of the 125,000 students who took the assessment. What was her percentile rank?

- 1) 6
- 2) 24
- 3) 31
- 4) 76

256 On the set of axes below, solve the following system of equations graphically. State the coordinates of the solution.

$$y = 4x - 1$$

$$2x + y = 5$$



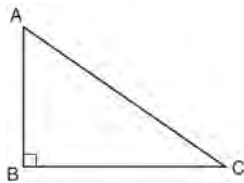
257 The sum of $3x^2 + 5x - 6$ and $-x^2 + 3x + 9$ is

- 1) $2x^2 + 8x - 15$
- 2) $2x^2 + 8x + 3$
- 3) $2x^4 + 8x^2 + 3$
- 4) $4x^2 + 2x - 15$

258 The equation of the axis of symmetry of the graph of $y = 2x^2 - 3x + 7$ is

- 1) $x = \frac{3}{4}$
- 2) $y = \frac{3}{4}$
- 3) $x = \frac{3}{2}$
- 4) $y = \frac{3}{2}$

259 In right triangle ABC shown below, $AC = 29$ inches, $AB = 17$ inches, and $m\angle ABC = 90$. Find the number of degrees in the measure of angle BAC , to the nearest degree.



Find the length of \overline{BC} to the nearest inch.

260 What is the product of $(3x + 2)$ and $(x - 7)$?

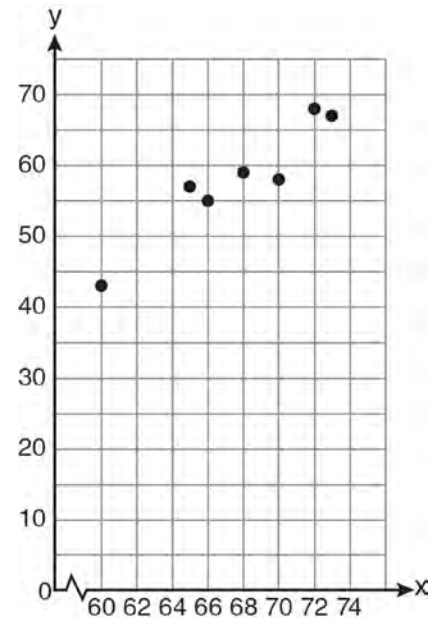
- 1) $3x^2 - 14$
- 2) $3x^2 - 5x - 14$
- 3) $3x^2 - 19x - 14$
- 4) $3x^2 - 23x - 14$

261 Solve the following system of equations algebraically for *all* values of x and y .

$$y = x^2 + 2x - 8$$

$$y = 2x + 1$$

262 A set of data is graphed on the scatter plot below.

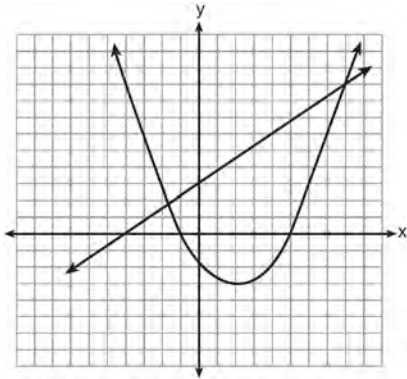


This scatter plot shows

- 1) no correlation
- 2) positive correlation
- 3) negative correlation
- 4) undefined correlation

263 A large company must choose between two types of passwords to log on to a computer. The first type is a four-letter password using any of the 26 letters of the alphabet, without repetition of letters. The second type is a six-digit password using the digits 0 through 9, with repetition of digits allowed. Determine the number of possible four-letter passwords. Determine the number of possible six-digit passwords. The company has 500,000 employees and needs a different password for each employee. State which type of password the company should choose. Explain your answer.

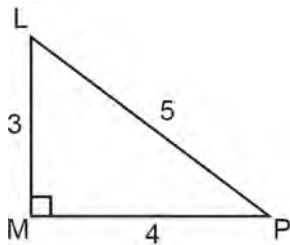
- 264 Two equations were graphed on the set of axes below.



Which point is a solution of the system of equations shown on the graph?

- 1) (8,9)
- 2) (5,0)
- 3) (0,3)
- 4) (2,-3)

- 265 The diagram below shows right triangle LMP .

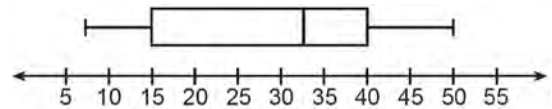


Which ratio represents the tangent of $\angle PLM$?

- 1) $\frac{3}{4}$
- 2) $\frac{3}{5}$
- 3) $\frac{4}{3}$
- 4) $\frac{5}{4}$

- 266 Which set of data can be classified as quantitative?
- 1) first names of students in a chess club
 - 2) ages of students in a government class
 - 3) hair colors of students in a debate club
 - 4) favorite sports of students in a gym class

- 267 The box-and-whisker plot below represents the ages of 12 people.



What percentage of these people are age 15 or older?

- 1) 25
- 2) 35
- 3) 75
- 4) 85

- 268 Express in simplest form: $\frac{x^2 - 1}{x^2 + 3x + 2}$

- 269 Which coordinates represent a point in the solution set of the system of inequalities shown below?

$$y \leq \frac{1}{2}x + 13$$

$$4x + 2y > 3$$

- 1) (-4,1)
- 2) (-2,2)
- 3) (1,-4)
- 4) (2,-2)

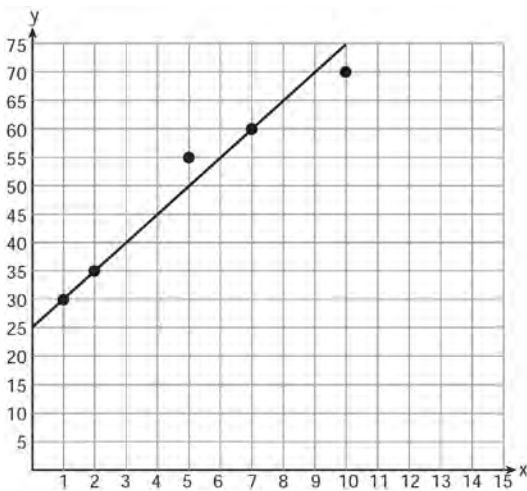
270 Given: $A = \{2, 4, 5, 7, 8\}$

$$B = \{3, 5, 8, 9\}$$

What is $A \cup B$?

- 1) $\{5\}$
- 2) $\{5, 8\}$
- 3) $\{2, 3, 4, 7, 9\}$
- 4) $\{2, 3, 4, 5, 7, 8, 9\}$

271 A scatter plot was constructed on the graph below and a line of best fit was drawn.



What is the equation of this line of best fit?

- 1) $y = x + 5$
- 2) $y = x + 25$
- 3) $y = 5x + 5$
- 4) $y = 5x + 25$

272 Which equation is an example of the use of the associative property of addition?

- 1) $x + 7 = 7 + x$
- 2) $3(x + y) = 3x + 3y$
- 3) $(x + y) + 3 = x + (y + 3)$
- 4) $3 + (x + y) = (x + y) + 3$

273 For which values of x is the fraction $\frac{x^2 + x - 6}{x^2 + 5x - 6}$ undefined?

- 1) 1 and -6
- 2) 2 and -3
- 3) 3 and -2
- 4) 6 and -1

274 Marcy determined that her father's age is four less than three times her age. If x represents Marcy's age, which expression represents her father's age?

- 1) $3x - 4$
- 2) $3(x - 4)$
- 3) $4x - 3$
- 4) $4 - 3x$

275 The expression $9a^2 - 64b^2$ is equivalent to

- 1) $(9a - 8b)(a + 8b)$
- 2) $(9a - 8b)(a - 8b)$
- 3) $(3a - 8b)(3a + 8b)$
- 4) $(3a - 8b)(3a - 8b)$

276 The quotient of $\frac{8x^5 - 2x^4 + 4x^3 - 6x^2}{2x^2}$ is

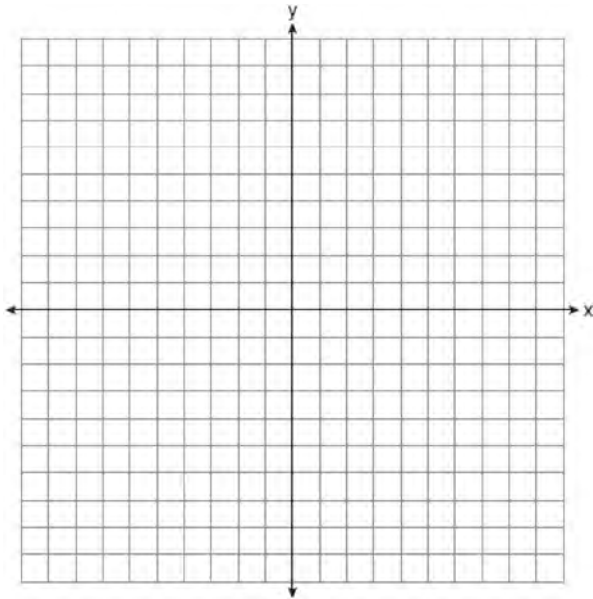
- 1) $16x^7 - 4x^6 + 8x^5 - 12x^4$
- 2) $4x^7 - x^6 + 2x^5 - 3x^4$
- 3) $4x^3 - x^2 + 2x - 3x$
- 4) $4x^3 - x^2 + 2x - 3$

277 Solve the following system of equations algebraically for y :

$$2x + 2y = 9$$

$$2x - y = 3$$

278 On the set of axes below, graph the equation $y = x^2 + 2x - 8$. Using the graph, determine and state the roots of the equation $x^2 + 2x - 8 = 0$.



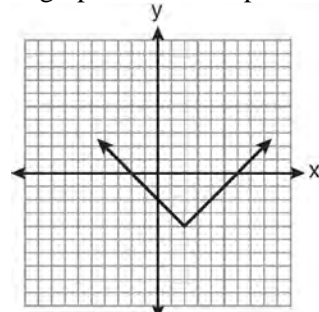
279 What is one-third of 3^6 ?

- 1) 1^2
- 2) 3^2
- 3) 3^5
- 4) 9^6

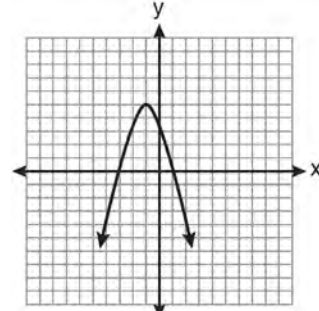
280 If n is an odd integer, which equation can be used to find three consecutive odd integers whose sum is -3 ?

- 1) $n + (n + 1) + (n + 3) = -3$
- 2) $n + (n + 1) + (n + 2) = -3$
- 3) $n + (n + 2) + (n + 4) = -3$
- 4) $n + (n + 2) + (n + 3) = -3$

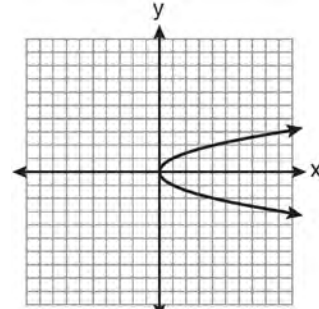
281 Which graph does *not* represent a function?



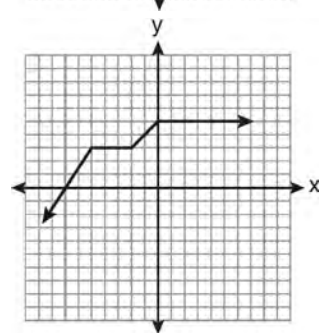
1)



2)



3)



4)

282 In a baseball game, the ball traveled 350.7 feet in 4.2 seconds. What was the average speed of the ball, in feet per second?

- 1) 83.5
- 2) 177.5
- 3) 354.9
- 4) 1,472.9

283 If $s = \frac{2x+t}{r}$, then x equals

- 1) $\frac{rs-t}{2}$
- 2) $\frac{rs+1}{2}$
- 3) $2rs-t$
- 4) $rs-2t$

284 The actual dimensions of a rectangle are 2.6 cm by 6.9 cm. Andy measures the sides as 2.5 cm by 6.8 cm. In calculating the area, what is the relative error, to the nearest thousandth?

- 1) 0.055
- 2) 0.052
- 3) 0.022
- 4) 0.021

285 Which expression is equivalent to

$$\frac{2x^6 - 18x^4 + 2x^2}{2x^2}?$$

- 1) $x^3 - 9x^2$
- 2) $x^4 - 9x^2$
- 3) $x^3 - 9x^2 + 1$
- 4) $x^4 - 9x^2 + 1$

286 The length of a rectangle is 15 and its width is w . The perimeter of the rectangle is, at most, 50. Which inequality can be used to find the longest possible width?

- 1) $30 + 2w < 50$
- 2) $30 + 2w \leq 50$
- 3) $30 + 2w > 50$
- 4) $30 + 2w \geq 50$

287 Elizabeth is baking chocolate chip cookies. A single batch uses $\frac{3}{4}$ teaspoon of vanilla. If

Elizabeth is mixing the ingredients for five batches at the same time, how many tablespoons of vanilla will she use?

$3 \text{ teaspoons} = 1 \text{ tablespoon}$
--

- 1) $1\frac{1}{4}$
- 2) $1\frac{3}{4}$
- 3) $3\frac{3}{4}$
- 4) $5\frac{3}{4}$

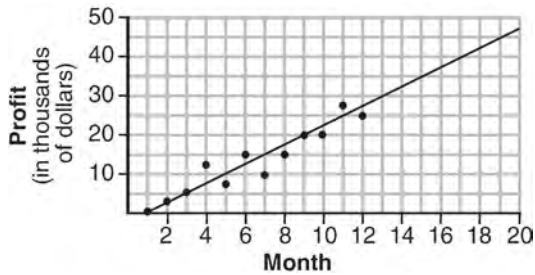
288 The volume of a cylindrical can is 32π cubic inches. If the height of the can is 2 inches, what is its radius, in inches?

- 1) 8
- 2) 2
- 3) 16
- 4) 4

- 289 What is the sum of $\frac{2y}{y+5}$ and $\frac{10}{y+5}$ expressed in simplest form?
- 1) 1
 - 2) 2
 - 3) $\frac{12y}{y+5}$
 - 4) $\frac{2y+10}{y+5}$

- 290 What is the value of $\left| \frac{4(-6) + 18}{4!} \right|$?
- 1) $\frac{1}{4}$
 - 2) $-\frac{1}{4}$
 - 3) 12
 - 4) -12

- 291 The scatter plot below shows the profit, by month, for a new company for the first year of operation. Kate drew a line of best fit, as shown in the diagram.



Using this line, what is the best estimate for profit in the 18th month?

- 1) \$35,000
- 2) \$37,750
- 3) \$42,500
- 4) \$45,000

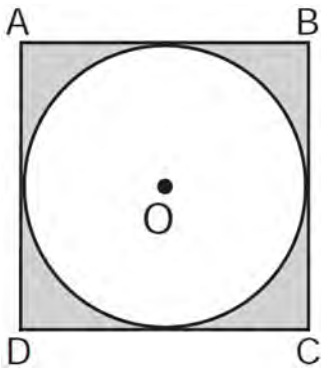
- 292 Students calculated the area of a playing field to be 8,100 square feet. The actual area of the field is 7,678.5 square feet. Find the relative error in the area, to the *nearest thousandth*.
- 293 In a given linear equation, the value of the independent variable decreases at a constant rate while the value of the dependent variable increases at a constant rate. The slope of this line is
- 1) positive
 - 2) negative
 - 3) zero
 - 4) undefined
- 294 Which situation is an example of bivariate data?
- 1) the number of pizzas Tanya eats during her years in high school
 - 2) the number of times Ezra puts air, in his bicycle tires during the summer
 - 3) the number of home runs Elias hits per game and the number of hours he practices baseball
 - 4) the number of hours Nellie studies for her mathematics tests during the first half of the school year

295 Solve algebraically for x : $2(x - 4) \geq \frac{1}{2}(5 - 3x)$

- 296 A correct translation of “six less than twice the value of x ” is
- 1) $2x < 6$
 - 2) $2x - 6$
 - 3) $6 < 2x$
 - 4) $6 - 2x$

- 297 The graph of a parabola is represented by the equation $y = ax^2$ where a is a positive integer. If a is multiplied by 2, the new parabola will become
- 1) narrower and open downward
 - 2) narrower and open upward
 - 3) wider and open downward
 - 4) wider and open upward

- 298 In the diagram below, circle O is inscribed in square $ABCD$. The square has an area of 36.



What is the area of the circle?

- 1) 9?
 - 2) 6?
 - 3) 3?
 - 4) 36?
- 299 Which set builder notation describes $\{-2, -1, 0, 1, 2, 3\}$?
- 1) $\{x \mid -3 \leq x \leq 3, \text{ where } x \text{ is an integer}\}$
 - 2) $\{x \mid -3 < x \leq 4, \text{ where } x \text{ is an integer}\}$
 - 3) $\{x \mid -2 < x < 3, \text{ where } x \text{ is an integer}\}$
 - 4) $\{x \mid -2 \leq x < 4, \text{ where } x \text{ is an integer}\}$
- 300 Solve algebraically for x :
 $3(x + 1) - 5x = 12 - (6x - 7)$

- 301 Which point lies on the graph represented by the equation $3y + 2x = 8$?

- 1) $(-2, 7)$
- 2) $(0, 4)$
- 3) $(2, 4)$
- 4) $(7, -2)$

- 302 Shana wants to buy a new bicycle that has a retail price of \$259.99. She knows that it will be on sale next week for 30% off the retail price. If the tax rate is 7%, find the total amount, to the *nearest cent*, that she will save by waiting until next week.

- 303 If $k = am + 3mx$, the value of m in terms of a , k , and x can be expressed as

- 1) $\frac{k}{a + 3x}$
- 2) $\frac{k - 3mx}{a}$
- 3) $\frac{k - am}{3x}$
- 4) $\frac{k - a}{3x}$

- 304 The line represented by the equation $2y - 3x = 4$ has a slope of

- 1) $-\frac{3}{2}$
- 2) 2
- 3) 3
- 4) $\frac{3}{2}$

- 305 Three high school juniors, Reese, Matthew, and Chris, are running for student council president. A survey is taken a week before the election asking 40 students which candidate they will vote for in the election. The results are shown in the table below.

Candidate's Name	Number of Students Supporting Candidate
Reese	15
Matthew	13
Chris	12

Based on the table, what is the probability that a student will vote for Reese?

- 1) $\frac{1}{3}$
 - 2) $\frac{3}{5}$
 - 3) $\frac{3}{8}$
 - 4) $\frac{5}{8}$
- 306 What is the vertex of the parabola represented by the equation $y = -2x^2 + 24x - 100$?
- 1) $x = -6$
 - 2) $x = 6$
 - 3) $(6, -28)$
 - 4) $(-6, -316)$

- 307 Is the equation $A = 21000(1 - 0.12)^t$ a model of exponential growth or exponential decay, and what is the rate (percent) of change per time period?
- 1) exponential growth and 12%
 - 2) exponential growth and 88%
 - 3) exponential decay and 12%
 - 4) exponential decay and 88%

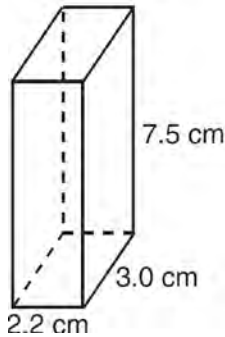
- 308 Three storage bins contain colored blocks. Bin 1 contains 15 red and 14 blue blocks. Bin 2 contains 16 white and 15 blue blocks. Bin 3 contains 15 red and 15 white blocks. All of the blocks from the three bins are placed into one box. If one block is randomly selected from the box, which color block would most likely be picked? Justify your answer.

- 309 Given: $A = \{1, 3, 5, 7, 9\}$
 $B = \{2, 4, 6, 8, 10\}$
 $C = \{2, 3, 5, 7\}$
 $D = \{1, 2, 3, 4, 5, 6, 7, 8, 9, 10\}$

What statement is *false*?

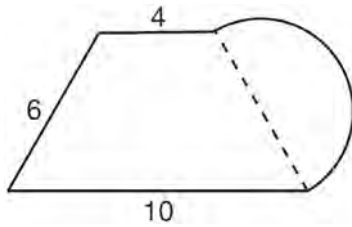
- 1) $A \cup B \cup C = D$
 - 2) $A \cap B \cap C = \{ \}$
 - 3) $A \cup C = \{1, 2, 3, 5, 7\}$
 - 4) $A \cap C = \{3, 5, 7\}$
- 310 Byron is 3 years older than Doug. The product of their ages is 40. How old is Doug?
- 1) 10
 - 2) 8
 - 3) 5
 - 4) 4

- 311 The rectangular prism shown below has a length of 3.0 cm, a width of 2.2 cm, and a height of 7.5 cm.



What is the surface area, in square centimeters?

- 1) 45.6
 - 2) 49.5
 - 3) 78.0
 - 4) 91.2
- 312 What is the perimeter of the figure shown below, which consists of an isosceles trapezoid and a semicircle?

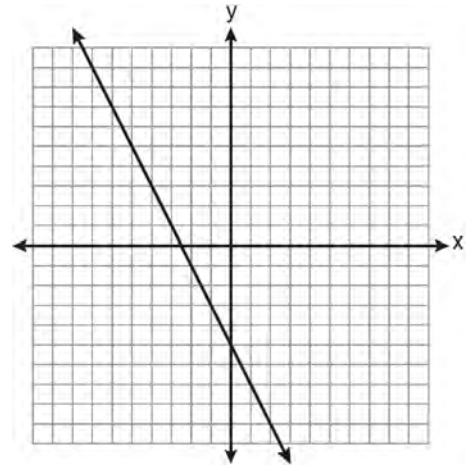


- 1) $20 + 3\pi$
 - 2) $20 + 6\pi$
 - 3) $26 + 3\pi$
 - 4) $26 + 6\pi$
- 313 Ashley measured the dimensions of a rectangular prism to be 6 cm by 10 cm by 1.5 cm. The actual dimensions are 5.9 cm by 10.3 cm by 1.7 cm. Determine the relative error, to the *nearest thousandth*, in calculating the volume of the prism.

- 314 What is the slope of the line that passes through the points $(2, -3)$ and $(5, 1)$?

- 1) $-\frac{2}{3}$
- 2) $\frac{2}{3}$
- 3) $-\frac{4}{3}$
- 4) $\frac{4}{3}$

- 315 Which equation is represented by the graph below?

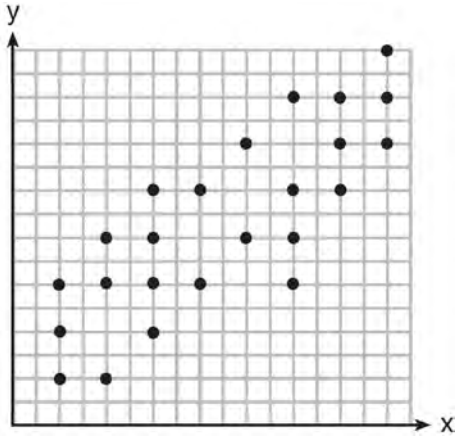


- 1) $2y + x = 10$
- 2) $y - 2x = -5$
- 3) $-2y = 10x - 4$
- 4) $2y = -4x - 10$

- 316 What is the sum of $-3x^2 - 7x + 9$ and $-5x^2 + 6x - 4$?

- 1) $-8x^2 - x + 5$
- 2) $-8x^4 - x + 5$
- 3) $-8x^2 - 13x + 13$
- 4) $-8x^4 - 13x^2 + 13$

- 317 The scatter plot shown below represents a relationship between x and y .



This type of relationship is

- 1) a positive correlation
 - 2) a negative correlation
 - 3) a zero correlation
 - 4) not able to be determined
- 318 The length of one side of a square is 13 feet. What is the length, to the *nearest foot*, of a diagonal of the square?
- 1) 13
 - 2) 18
 - 3) 19
 - 4) 26
- 319 A 28-foot ladder is leaning against a house. The bottom of the ladder is 6 feet from the base of the house. Find the measure of the angle formed by the ladder and the ground, to the *nearest degree*.

- 320 Express $\frac{3\sqrt{75} + \sqrt{27}}{3}$ in simplest radical form.

- 321 Mr. Stanton asked his students to write an algebraic expression on a piece of paper. He chose four students to go to the board and write their expression.

Robert wrote: $4(2x + 5) \geq 17$

Meredith wrote: $3y - 7 + 11z$

Steven wrote: $9w + 2 = 20$

Cynthia wrote: $8 + 10 - 4 = 14$

Which student wrote an algebraic expression?

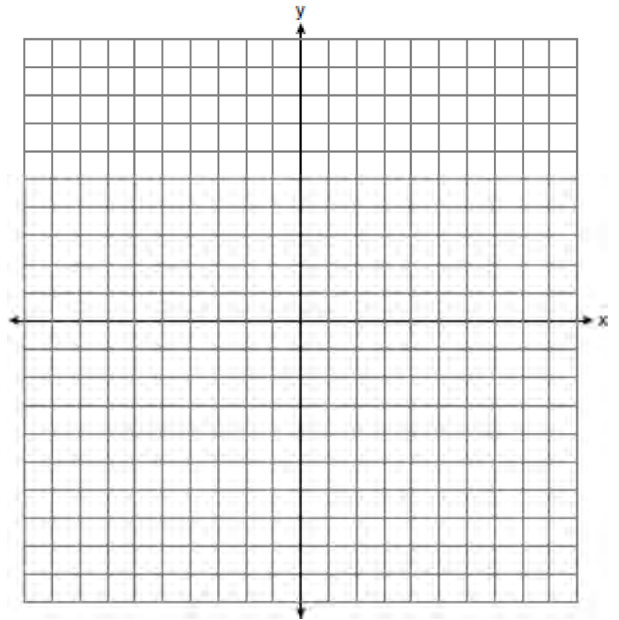
- 1) Robert
- 2) Meredith
- 3) Steven
- 4) Cynthia

- 322 On the set of axes below, graph the following system of inequalities.

$$y + x \geq 3$$

$$5x - 2y > 10$$

State the coordinates of *one* point that satisfies $y + x \geq 3$, but does *not* satisfy $5x - 2y > 10$.



- 323 The cumulative frequency table below shows the length of time that 30 students spent text messaging on a weekend.

Minutes Used	Cumulative Frequency
31–40	2
31–50	5
31–60	10
31–70	19
31–80	30

Which 10-minute interval contains the first quartile?

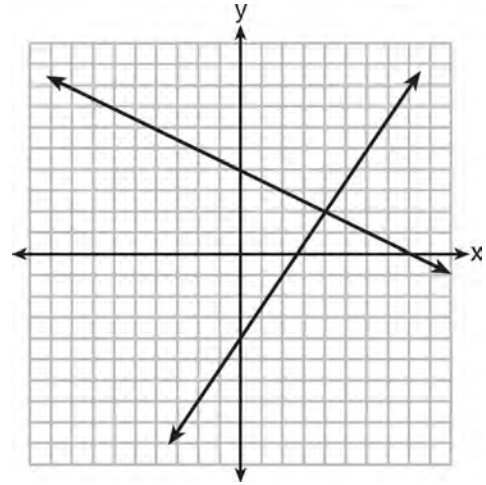
- 1) 31 – 40
 - 2) 41 – 50
 - 3) 51 – 60
 - 4) 61 – 70
- 324 What is $2\sqrt{45}$ expressed in simplest radical form?

- 1) $3\sqrt{5}$
- 2) $5\sqrt{5}$
- 3) $6\sqrt{5}$
- 4) $18\sqrt{5}$

- 325 Which expression is equivalent to $64 - x^2$?

- 1) $(8 - x)(8 - x)$
- 2) $(8 - x)(8 + x)$
- 3) $(x - 8)(x - 8)$
- 4) $(x - 8)(x + 8)$

- 326 A system of equations is graphed on the set of axes below.



The solution of this system is

- 1) (0,4)
 - 2) (2,4)
 - 3) (4,2)
 - 4) (8,0)
- 327 A car depreciates (loses value) at a rate of 4.5% annually. Greg purchased a car for \$12,500. Which equation can be used to determine the value of the car, V , after 5 years?
- 1) $V = 12,500(0.55)^5$
 - 2) $V = 12,500(0.955)^5$
 - 3) $V = 12,500(1.045)^5$
 - 4) $V = 12,500(1.45)^5$

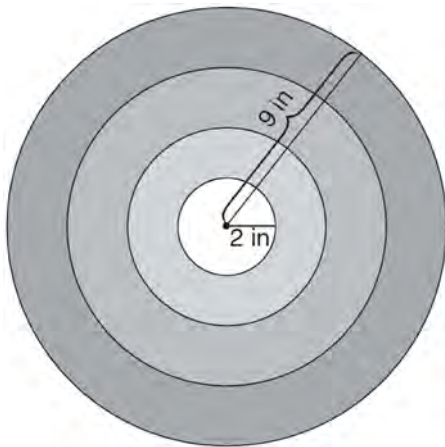
- 328 The expression $\frac{14+x}{x^2-4}$ is undefined when x is

- 1) -14, only
- 2) 2, only
- 3) -2 or 2
- 4) -14, -2, or 2

329 Mr. Smith invested \$2,500 in a savings account that earns 3% interest compounded annually. He made no additional deposits or withdrawals. Which expression can be used to determine the number of dollars in this account at the end of 4 years?

- 1) $2500(1 + 0.03)^4$
- 2) $2500(1 + 0.3)^4$
- 3) $2500(1 + 0.04)^3$
- 4) $2500(1 + 0.4)^3$

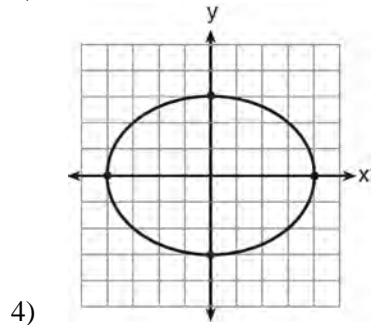
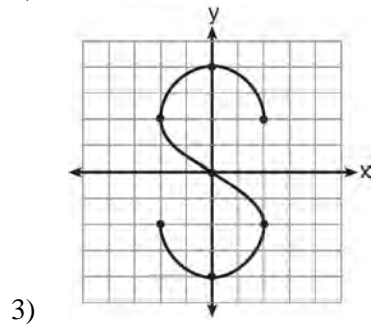
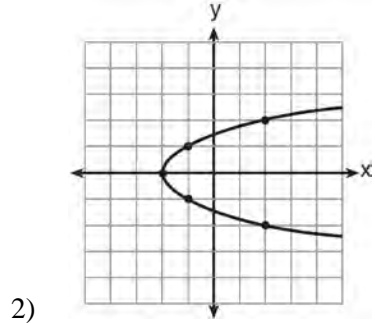
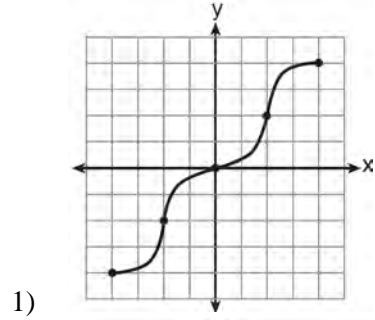
330 The bull's-eye of a dartboard has a radius of 2 inches and the entire board has a radius of 9 inches, as shown in the diagram below.



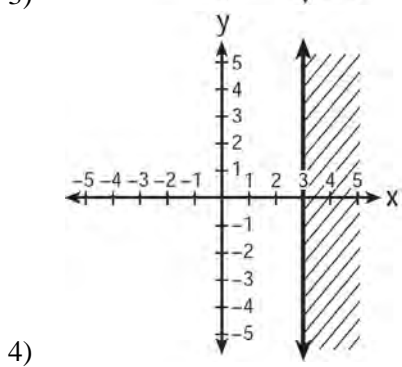
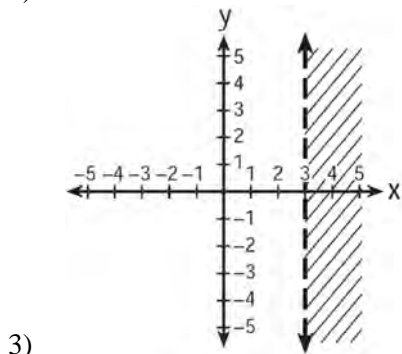
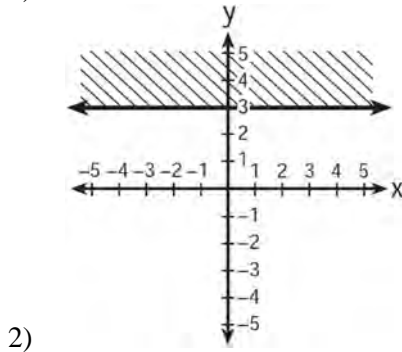
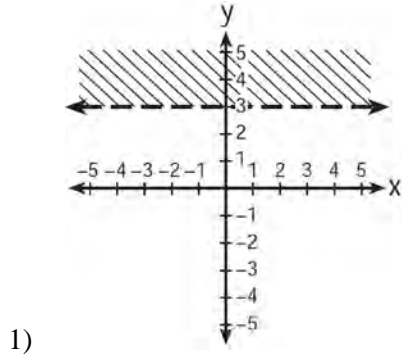
If a dart is thrown and hits the board, what is the probability that the dart will land in the bull's-eye?

- 1) $\frac{2}{9}$
- 2) $\frac{7}{9}$
- 3) $\frac{4}{81}$
- 4) $\frac{49}{81}$

331 Which graph represents a function?



332 Which graph represents the inequality $y > 3$?



333 The formula for the volume of a pyramid is

$$V = \frac{1}{3}Bh. \text{ What is } h \text{ expressed in terms of } B \text{ and } V?$$

- 1) $h = \frac{1}{3}VB$
- 2) $h = \frac{V}{3B}$
- 3) $h = \frac{3V}{B}$
- 4) $h = 3VB$

334 Mike buys his ice cream packed in a rectangular prism-shaped carton, while Carol buys hers in a cylindrical-shaped carton. The dimensions of the prism are 5 inches by 3.5 inches by 7 inches. The cylinder has a diameter of 5 inches and a height of 7 inches. Which container holds more ice cream? Justify your answer. Determine, to the *nearest tenth of a cubic inch*, how much more ice cream the larger container holds.

335 Which equation represents a line that has a slope of $\frac{3}{4}$ and passes through the point (2, 1)?

- 1) $3y = 4x - 5$
- 2) $3y = 4x + 2$
- 3) $4y = 3x - 2$
- 4) $4y = 3x + 5$

336 Which statement illustrates the additive identity property?

- 1) $6 + 0 = 6$
- 2) $-6 + 6 = 0$
- 3) $4(6 + 3) = 4(6) + 4(3)$
- 4) $(4 + 6) + 3 = 4 + (6 + 3)$

- 337 Timmy bought a skateboard and two helmets for a total of d dollars. If each helmet cost h dollars, the cost of the skateboard could be represented by
- 1) $2dh$
 - 2) $\frac{dh}{2}$
 - 3) $d - 2h$
 - 4) $d - \frac{h}{2}$

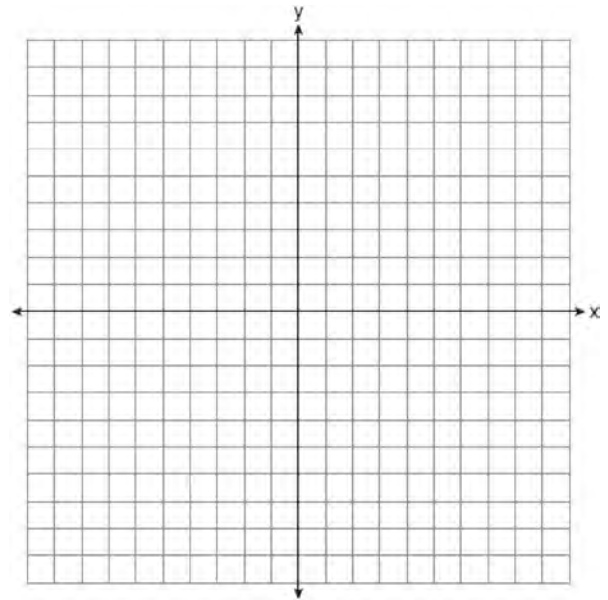
- 338 Which expression represents $\frac{x^2 - 3x - 10}{x^2 - 25}$ in simplest form?
- 1) $\frac{2}{5}$
 - 2) $\frac{x+2}{x+5}$
 - 3) $\frac{x-2}{x-5}$
 - 4) $\frac{-3x-10}{-25}$

- 339 Craig sees an advertisement for a car in a newspaper. Which information would *not* be classified as quantitative?
- 1) the cost of the car
 - 2) the car's mileage
 - 3) the model of the car
 - 4) the weight of the car

- 340 Jason's part-time job pays him \$155 a week. If he has already saved \$375, what is the minimum number of weeks he needs to work in order to have enough money to buy a dirt bike for \$900?
- 1) 8
 - 2) 9
 - 3) 3
 - 4) 4

- 341 The value of y in the equation $0.06y + 200 = 0.03y + 350$ is
- 1) 500
 - 2) $1,666.\bar{6}$
 - 3) 5,000
 - 4) $18,333.\bar{3}$

- 342 On the set of axes below, graph $y = 3^x$ over the interval $-1 \leq x \leq 2$.

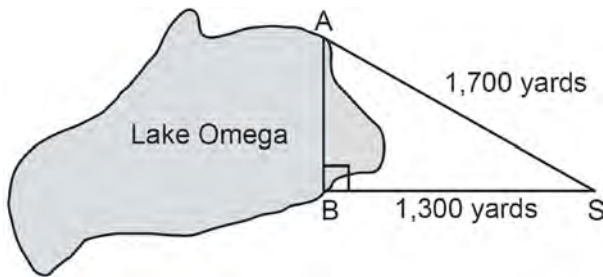


- 343 The expression $\frac{2x+13}{2x+6} - \frac{3x-6}{2x+6}$ is equivalent to
- 1) $\frac{-x+19}{2(x+3)}$
 - 2) $\frac{-x+7}{2(x+3)}$
 - 3) $\frac{5x+19}{2(x+3)}$
 - 4) $\frac{5x+7}{4x+12}$

344 The probability it will rain tomorrow is $\frac{1}{2}$. The probability that our team will win tomorrow's basketball game is $\frac{3}{5}$. Which expression represents the probability that it will rain and that our team will *not* win the game?

- 1) $\frac{1}{2} + \frac{3}{5}$
- 2) $\frac{1}{2} + \frac{2}{5}$
- 3) $\frac{1}{2} \times \frac{3}{5}$
- 4) $\frac{1}{2} \times \frac{2}{5}$

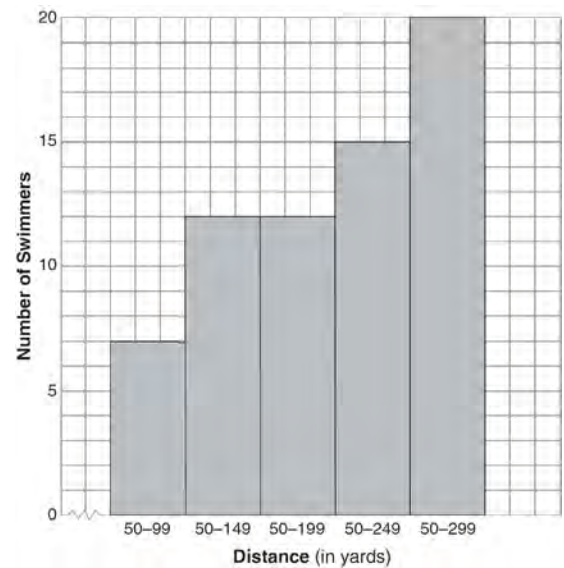
345 Campsite *A* and campsite *B* are located directly opposite each other on the shores of Lake Omega, as shown in the diagram below. The two campsites form a right triangle with Sam's position, *S*. The distance from campsite *B* to Sam's position is 1,300 yards, and campsite *A* is 1,700 yards from his position.



What is the distance from campsite *A* to campsite *B*, to the *nearest yard*?

- 1) 1,095
- 2) 1,096
- 3) 2,140
- 4) 2,141

346 The following cumulative frequency histogram shows the distances swimmers completed in a recent swim test.



Based on the cumulative frequency histogram, determine the number of swimmers who swam between 200 and 249 yards. Determine the number of swimmers who swam between 150 and 199 yards. Determine the number of swimmers who took the swim test.

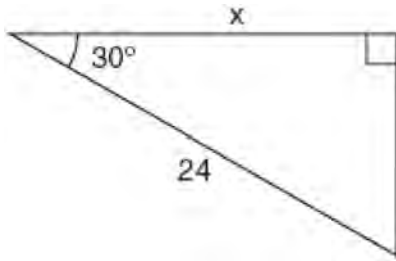
347 In $\triangle ABC$, $m\angle C = 90$. If $AB = 5$ and $AC = 4$, which statement is *not* true?

- 1) $\cos A = \frac{4}{5}$
- 2) $\tan A = \frac{3}{4}$
- 3) $\sin B = \frac{4}{5}$
- 4) $\tan B = \frac{5}{3}$

Integrated Algebra Regents at Random

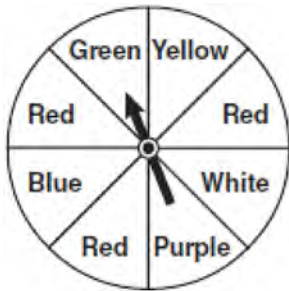
- 348 Which expression represents $\frac{x^2 - 2x - 15}{x^2 + 3x}$ in simplest form?
- 1) -5
 - 2) $\frac{x-5}{x}$
 - 3) $\frac{-2x-5}{x}$
 - 4) $\frac{-2x-15}{3x}$
- 349 What is an equation of the line that passes through the points $(3,-3)$ and $(-3,-3)$?
- 1) $y = 3$
 - 2) $x = -3$
 - 3) $y = -3$
 - 4) $x = y$
- 350 An online music club has a one-time registration fee of \$13.95 and charges \$0.49 to buy each song. If Emma has \$50.00 to join the club and buy songs, what is the maximum number of songs she can buy?
- 1) 73
 - 2) 74
 - 3) 130
 - 4) 131
- 351 What is the quotient of 8.05×10^6 and 3.5×10^2 ?
- 1) 2.3×10^3
 - 2) 2.3×10^4
 - 3) 2.3×10^8
 - 4) 2.3×10^{12}
- 352 For which value of x is $\frac{x-3}{x^2-4}$ undefined?
- 1) -2
 - 2) 0
 - 3) 3
 - 4) 4
- 353 The faces of a cube are numbered from 1 to 6. If the cube is tossed once, what is the probability that a prime number or a number divisible by 2 is obtained?
- 1) $\frac{6}{6}$
 - 2) $\frac{5}{6}$
 - 3) $\frac{4}{6}$
 - 4) $\frac{1}{6}$
- 354 The sum of two numbers is 47, and their difference is 15. What is the larger number?
- 1) 16
 - 2) 31
 - 3) 32
 - 4) 36
- 355 Twelve players make up a high school basketball team. The team jerseys are numbered 1 through 12. The players wearing the jerseys numbered 3, 6, 7, 8, and 11 are the only players who start a game. Using set notation, list the complement of this subset.

356 In the right triangle shown in the diagram below, what is the value of x to the *nearest whole number*?



- 1) 12
- 2) 14
- 3) 21
- 4) 28

357 The spinner below is divided into eight equal regions and is spun once. What is the probability of *not* getting red?

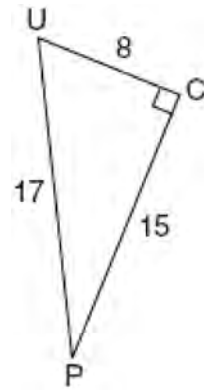


- 1) $\frac{3}{5}$
- 2) $\frac{3}{8}$
- 3) $\frac{5}{8}$
- 4) $\frac{7}{8}$

358 Which statement is true about the data set 3, 4, 5, 6, 7, 7, 10?

- 1) mean = mode
- 2) mean > mode
- 3) mean = median
- 4) mean < median

359 The diagram below shows right triangle UPC .



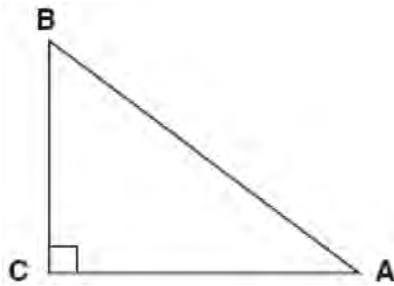
Which ratio represents the sine of $\angle U$?

- 1) $\frac{15}{8}$
- 2) $\frac{15}{17}$
- 3) $\frac{8}{15}$
- 4) $\frac{8}{17}$

360 What is the product of 8.4×10^8 and 4.2×10^3 written in scientific notation?

- 1) 2.0×10^5
- 2) 12.6×10^{11}
- 3) 35.28×10^{11}
- 4) 3.528×10^{12}

- 361 In the diagram of $\triangle ABC$ shown below, $BC = 10$ and $AB = 16$.



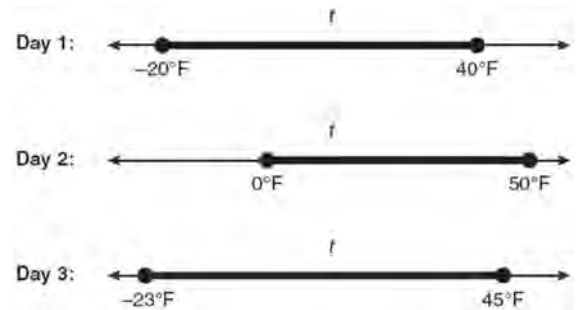
To the nearest tenth of a degree, what is the measure of the largest acute angle in the triangle?

- 1) 32.0
 2) 38.7
 3) 51.3
 4) 90.0
- 362 What are the vertex and axis of symmetry of the parabola $y = x^2 - 16x + 63$?
- 1) vertex: $(8, -1)$; axis of symmetry: $x = 8$
 2) vertex: $(8, 1)$; axis of symmetry: $x = 8$
 3) vertex: $(-8, -1)$; axis of symmetry: $x = -8$
 4) vertex: $(-8, 1)$; axis of symmetry: $x = -8$
- 363 What is the slope of the line that passes through the points $(-6, 1)$ and $(4, -4)$?
- 1) -2
 2) 2
 3) $-\frac{1}{2}$
 4) $\frac{1}{2}$

- 364 The equations $5x + 2y = 48$ and $3x + 2y = 32$ represent the money collected from school concert ticket sales during two class periods. If x represents the cost for each adult ticket and y represents the cost for each student ticket, what is the cost for each adult ticket?

- 1) \$20
 2) \$10
 3) \$8
 4) \$4

- 365 Maureen tracks the range of outdoor temperatures over three days. She records the following information.



Express the intersection of the three sets as an inequality in terms of temperature, t .

- 366 What is half of 2^6 ?
- 1) 1^3
 2) 1^6
 3) 2^3
 4) 2^5

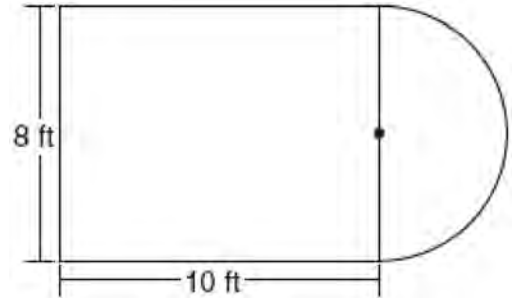
- 367 The expression $\frac{(4x^3)^2}{2x}$ is equivalent to
- 1) $4x^4$
 - 2) $4x^5$
 - 3) $8x^4$
 - 4) $8x^5$

- 368 Mrs. Ayer is painting the outside of her son's toy box, including the top and bottom. The toy box measures 3 feet long, 1.5 feet wide, and 2 feet high. What is the total surface area she will paint?
- 1) 9.0 ft^2
 - 2) 13.5 ft^2
 - 3) 22.5 ft^2
 - 4) 27.0 ft^2

- 369 Daniel's Print Shop purchased a new printer for \$35,000. Each year it depreciates (loses value) at a rate of 5%. What will its approximate value be at the end of the fourth year?
- 1) \$33,250.00
 - 2) \$30,008.13
 - 3) \$28,507.72
 - 4) \$27,082.33

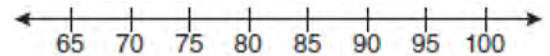
- 370 If $a + ar = b + r$, the value of a in terms of b and r can be expressed as
- 1) $\frac{b}{r} + 1$
 - 2) $\frac{1+b}{r}$
 - 3) $\frac{b+r}{1+r}$
 - 4) $\frac{1+b}{r+b}$

- 371 Luis is going to paint a basketball court on his driveway, as shown in the diagram below. This basketball court consists of a rectangle and a semicircle.



Which expression represents the area of this basketball court, in square feet?

- 1) 80
 - 2) $80 + 8\pi$
 - 3) $80 + 16\pi$
 - 4) $80 + 64\pi$
- 372 The test scores from Mrs. Gray's math class are shown below.
 72, 73, 66, 71, 82, 85, 95, 85, 86, 89, 91, 92
 Construct a box-and-whisker plot to display these data.



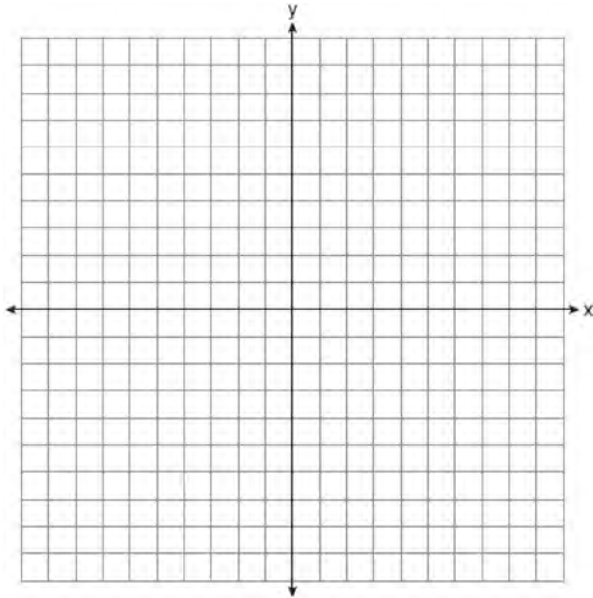
- 373 Which expression represents $\frac{2x^2 - 12x}{x - 6}$ in simplest form?
- 1) 0
 - 2) $2x$
 - 3) $4x$
 - 4) $2x + 2$

- 374 Lenny made a cube in technology class. Each edge measured 1.5 cm. What is the volume of the cube in cubic centimeters?
- 1) 2.25
 - 2) 3.375
 - 3) 9.0
 - 4) 13.5

- 375 On the set of axes below, solve the following system of equations graphically and state the coordinates of all points in the solution set.

$$y = x^2 + 4x - 5$$

$$y = x - 1$$



- 376 In a game of ice hockey, the hockey puck took 0.8 second to travel 89 feet to the goal line. Determine the average speed of the puck in feet per second.

- 377 Some books are laid on a desk. Two are English, three are mathematics, one is French, and four are social studies. Theresa selects an English book and Isabelle then selects a social studies book. Both girls take their selections to the library to read. If Truman then selects a book at random, what is the probability that he selects an English book?

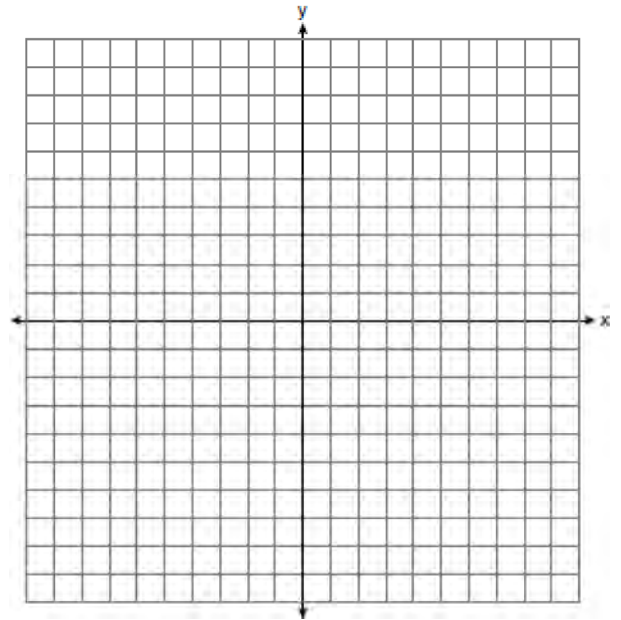
- 378 Which interval notation represents the set of all numbers from 2 through 7, inclusive?

- 1) $(2, 7)$
- 2) $(2, 7]$
- 3) $[2, 7)$
- 4) $[2, 7]$

- 379 Solve the following systems of equations graphically, on the set of axes below, and state the coordinates of the point(s) in the solution set.

$$y = x^2 - 6x + 5$$

$$2x + y = 5$$



- 380 When $3g^2 - 4g + 2$ is subtracted from $7g^2 + 5g - 1$, the difference is
- 1) $-4g^2 - 9g + 3$
 - 2) $4g^2 + g + 1$
 - 3) $4g^2 + 9g - 3$
 - 4) $10g^2 + g + 1$

- 381 Twenty students were surveyed about the number of days they played outside in one week. The results of this survey are shown below.
 {6,5,4,3,0,7,1,5,4,4,3,2,2,3,2,4,3,4,0,7}
- Complete the frequency table below for these data.


Interval	Tally	Frequency
0-1		
2-3		
4-5		
6-7		

Complete the cumulative frequency table below using these data.

Number of Days Outside

Interval	Cumulative Frequency
0-1	
0-3	
0-5	
0-7	

On the grid below, create a cumulative frequency histogram based on the table you made.



- 382 The table below represents the number of hours a student worked and the amount of money the student earned.

Number of Hours (h)	Dollars Earned (d)
8	\$50.00
15	\$93.75
19	\$118.75
30	\$187.50

Write an equation that represents the number of dollars, d , earned in terms of the number of hours, h , worked. Using this equation, determine the number of dollars the student would earn for working 40 hours.

- 383 A school wants to add a coed soccer program. To determine student interest in the program, a survey will be taken. In order to get an unbiased sample, which group should the school survey?
- 1) every third student entering the building
 - 2) every member of the varsity football team
 - 3) every member in Ms. Zimmer’s drama classes
 - 4) every student having a second-period French class

- 384 Hannah took a trip to visit her cousin. She drove 120 miles to reach her cousin’s house and the same distance back home. It took her 1.2 hours to get halfway to her cousin’s house. What was her average speed, in miles per hour, for the first 1.2 hours of the trip? Hannah’s average speed for the remainder of the trip to her cousin’s house was 40 miles per hour. How long, in hours, did it take her to drive the remaining distance? Traveling home along the same route, Hannah drove at an average rate of 55 miles per hour. After 2 hours her car broke down. How many miles was she from home?

- 385 Pam is playing with red and black marbles. The number of red marbles she has is three more than twice the number of black marbles she has. She has 42 marbles in all. How many red marbles does Pam have?
- 1) 13
 - 2) 15
 - 3) 29
 - 4) 33


- 386 The Fahrenheit temperature readings on 30 April mornings in Stormville, New York, are shown below.

41°, 58°, 61°, 54°, 49°, 46°, 52°, 58°, 67°, 43°,
 47°, 60°, 52°, 58°, 48°, 44°, 59°, 66°, 62°, 55°,
 44°, 49°, 62°, 61°, 59°, 54°, 57°, 58°, 63°, 60°

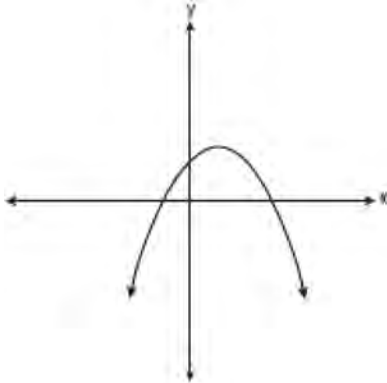
Using the data, complete the frequency table below.

Interval	Tally	Frequency
40–44		
45–49		
50–54		
55–59		
60–64		
65–69		

On the grid below, construct and label a frequency histogram based on the table.



- 387 Which type of graph is shown in the diagram below?



- 1) absolute value
- 2) exponential
- 3) linear
- 4) quadratic

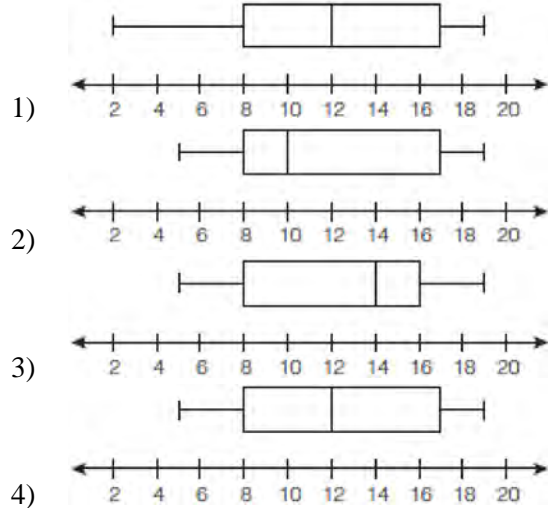
- 388 What is $\frac{\sqrt{32}}{4}$ expressed in simplest radical form?

- 1) $\sqrt{2}$
- 2) $4\sqrt{2}$
- 3) $\sqrt{8}$
- 4) $\frac{\sqrt{8}}{2}$

- 389 Which data set describes a situation that could be classified as qualitative?

- 1) the ages of the students in Ms. Marshall's Spanish class
- 2) the test scores of the students in Ms. Fitzgerald's class
- 3) the favorite ice cream flavor of each of Mr. Hayden's students
- 4) the heights of the players on the East High School basketball team

- 390 The data set 5, 6, 7, 8, 9, 9, 9, 10, 12, 14, 17, 17, 18, 19, 19 represents the number of hours spent on the Internet in a week by students in a mathematics class. Which box-and-whisker plot represents the data?



- 391 The length of a rectangular room is 7 less than three times the width, w , of the room. Which expression represents the area of the room?

- 1) $3w - 4$
- 2) $3w - 7$
- 3) $3w^2 - 4w$
- 4) $3w^2 - 7w$

- 392 In triangle MCT , the measure of $\angle T = 90^\circ$, $MC = 85$ cm, $CT = 84$ cm, and $TM = 13$ cm.

Which ratio represents the sine of $\angle C$?

- 1) $\frac{13}{85}$
- 2) $\frac{84}{85}$
- 3) $\frac{13}{84}$
- 4) $\frac{84}{13}$

393 The length of a rectangular window is 5 feet more than its width, w . The area of the window is 36 square feet. Which equation could be used to find the dimensions of the window?

- 1) $w^2 + 5w + 36 = 0$
- 2) $w^2 - 5w - 36 = 0$
- 3) $w^2 - 5w + 36 = 0$
- 4) $w^2 + 5w - 36 = 0$

394 Which expression represents $(3x^2y^4)(4xy^2)$ in simplest form?

- 1) $12x^2y^8$
- 2) $12x^2y^6$
- 3) $12x^3y^8$
- 4) $12x^3y^6$

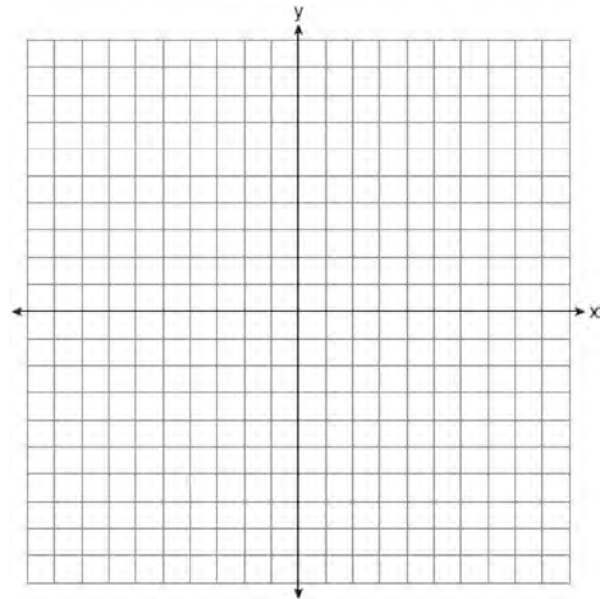
395 What is the product of $\frac{x^2 - 1}{x + 1}$ and $\frac{x + 3}{3x - 3}$ expressed in simplest form?

- 1) x
- 2) $\frac{x}{3}$
- 3) $x + 3$
- 4) $\frac{x + 3}{3}$

396 What is the product of $-3x^2y$ and $(5xy^2 + xy)$?

- 1) $-15x^3y^3 - 3x^3y^2$
- 2) $-15x^3y^3 - 3x^3y$
- 3) $-15x^2y^2 - 3x^2y$
- 4) $-15x^3y^3 + xy$

397 Graph the equation $y = x^2 - 2x - 3$ on the accompanying set of axes. Using the graph, determine the roots of the equation $x^2 - 2x - 3 = 0$.



398 What is the value of the y-coordinate of the solution to the system of equations $x + 2y = 9$ and $x - y = 3$?

- 1) 6
- 2) 2
- 3) 3
- 4) 5

399 Which value of x is in the solution set of the inequality $-4x + 2 > 10$?

- 1) -2
- 2) 2
- 3) 3
- 4) -4

- 400 When $4x^2 + 7x - 5$ is subtracted from $9x^2 - 2x + 3$, the result is
- 1) $5x^2 + 5x - 2$
 - 2) $5x^2 - 9x + 8$
 - 3) $-5x^2 + 5x - 2$
 - 4) $-5x^2 + 9x - 8$

- 401 A restaurant sells kids' meals consisting of one main course, one side dish, and one drink, as shown in the table below.

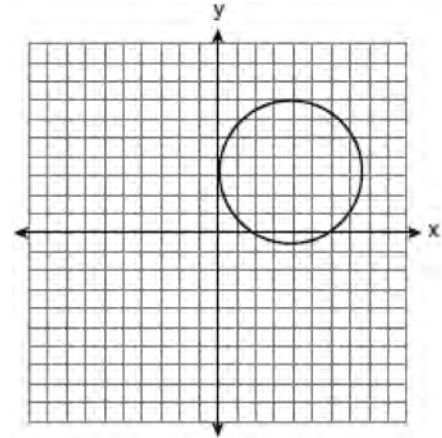
Kids' Meal Choices

Main Course	Side Dish	Drink
hamburger	French fries	milk
chicken nuggets	applesauce	juice
turkey sandwich		soda

Draw a tree diagram or list the sample space showing all possible kids' meals. How many different kids' meals can a person order? Jose does not drink juice. Determine the number of different kids' meals that do *not* include juice. Jose's sister will eat *only* chicken nuggets for her main course. Determine the number of different kids' meals that include chicken nuggets.

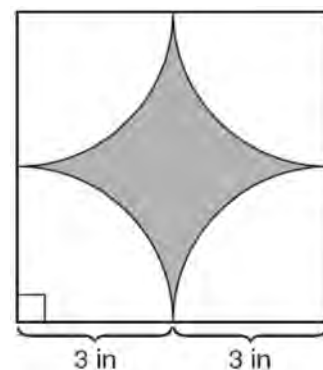
- 402 What is the speed, in meters per second, of a paper airplane that flies 24 meters in 6 seconds?
- 1) 144
 - 2) 30
 - 3) 18
 - 4) 4

- 403 Which statement is true about the relation shown on the graph below?



- 1) It is a function because there exists one x -coordinate for each y -coordinate.
- 2) It is a function because there exists one y -coordinate for each x -coordinate.
- 3) It is *not* a function because there are multiple y -values for a given x -value.
- 4) It is *not* a function because there are multiple x -values for a given y -value.

- 404 A designer created the logo shown below. The logo consists of a square and four quarter-circles of equal size.



Express, in terms of π , the exact area, in square inches, of the shaded region.

- 405 Which value of n makes the expression $\frac{5n}{2n-1}$ undefined?
- 1) 1
 - 2) 0
 - 3) $-\frac{1}{2}$
 - 4) $\frac{1}{2}$
- 406 Which value of p is the solution of $5p - 1 = 2p + 20$?
- 1) $\frac{19}{7}$
 - 2) $\frac{19}{3}$
 - 3) 3
 - 4) 7
- 407 Alex earned scores of 60, 74, 82, 87, 87, and 94 on his first six algebra tests. What is the relationship between the measures of central tendency of these scores?
- 1) median < mode < mean
 - 2) mean < mode < median
 - 3) mode < median < mean
 - 4) mean < median < mode
- 408 Mr. Laub has three children: two girls (Sue and Karen) and one boy (David). After each meal, one child is chosen at random to wash dishes. If the same child can be chosen for both lunch and dinner, construct a tree diagram or list a sample space of all the possible outcomes of who will wash dishes after lunch and dinner on Saturday. Determine the probability that one boy and one girl will wash dishes after lunch and dinner on Saturday.
- 409 What is the solution of $\frac{k+4}{2} = \frac{k+9}{3}$?
- 1) 1
 - 2) 5
 - 3) 6
 - 4) 14
- 410 Mrs. Smith wrote "Eight less than three times a number is greater than fifteen" on the board. If x represents the number, which inequality is a correct translation of this statement?
- 1) $3x - 8 > 15$
 - 2) $3x - 8 < 15$
 - 3) $8 - 3x > 15$
 - 4) $8 - 3x < 15$
- 411 What are the roots of the equation $x^2 - 7x + 6 = 0$?
- 1) 1 and 7
 - 2) -1 and 7
 - 3) -1 and -6
 - 4) 1 and 6
- 412 Which value of x is in the solution set of the inequality $-2x + 5 > 17$?
- 1) -8
 - 2) -6
 - 3) -4
 - 4) 12
- 413 Which ordered pair is in the solution set of the system of equations $y = -x + 1$ and $y = x^2 + 5x + 6$?
- 1) (-5, -1)
 - 2) (-5, 6)
 - 3) (5, -4)
 - 4) (5, 2)

414 What is the slope of the line containing the points (3,4) and (-6,10)?

- 1) $\frac{1}{2}$
- 2) 2
- 3) $-\frac{2}{3}$
- 4) $-\frac{3}{2}$

415 Cassandra bought an antique dresser for \$500. If the value of her dresser increases 6% annually, what will be the value of Cassandra's dresser at the end of 3 years to the *nearest dollar*?

- 1) \$415
- 2) \$590
- 3) \$596
- 4) \$770

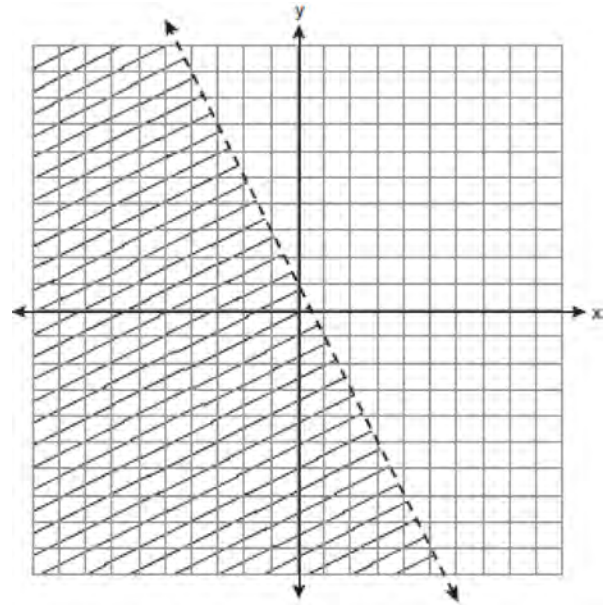
416 Which expression represents $\frac{27x^{18}y^5}{9x^6y}$ in simplest form?

- 1) $3x^{12}y^4$
- 2) $3x^3y^5$
- 3) $18x^{12}y^4$
- 4) $18x^3y^5$

417 Kathy plans to purchase a car that depreciates (loses value) at a rate of 14% per year. The initial cost of the car is \$21,000. Which equation represents the value, v , of the car after 3 years?

- 1) $v = 21,000(0.14)^3$
- 2) $v = 21,000(0.86)^3$
- 3) $v = 21,000(1.14)^3$
- 4) $v = 21,000(0.86)(3)$

418 Which inequality is represented by the graph below?



- 1) $y < 2x + 1$
- 2) $y < -2x + 1$
- 3) $y < \frac{1}{2}x + 1$
- 4) $y < -\frac{1}{2}x + 1$

419 What is the value of the y -coordinate of the solution to the system of equations $x - 2y = 1$ and $x + 4y = 7$?

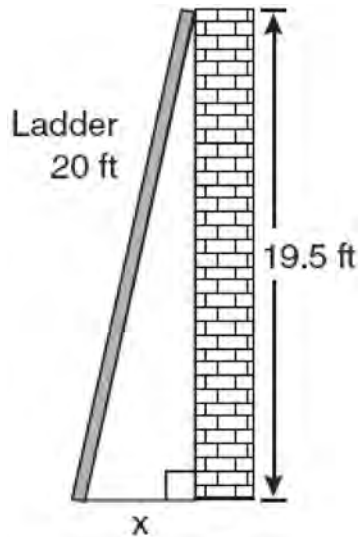
- 1) 1
- 2) -1
- 3) 3
- 4) 4

- 420 On a certain day in Toronto, Canada, the temperature was 15° Celsius (C). Using the formula $F = \frac{9}{5}C + 32$, Peter converts this temperature to degrees Fahrenheit (F). Which temperature represents 15°C in degrees Fahrenheit?
- 1) -9
 - 2) 35
 - 3) 59
 - 4) 85

- 422 The roots of the equation $3x^2 - 27x = 0$ are
- 1) 0 and 9
 - 2) 0 and -9
 - 3) 0 and 3
 - 4) 0 and -3

- 423 Clayton has three fair coins. Find the probability that he gets two tails and one head when he flips the three coins.

- 421 Don placed a ladder against the side of his house as shown in the diagram below.



Which equation could be used to find the distance, x , from the foot of the ladder to the base of the house?

- 1) $x = 20 - 19.5$
- 2) $x = 20^2 - 19.5^2$
- 3) $x = \sqrt{20^2 - 19.5^2}$
- 4) $x = \sqrt{20^2 + 19.5^2}$

- 424 Which equation most closely represents the line of best fit for the scatter plot below?



- 1) $y = x$
- 2) $y = \frac{2}{3}x + 1$
- 3) $y = \frac{3}{2}x + 4$
- 4) $y = \frac{3}{2}x + 1$

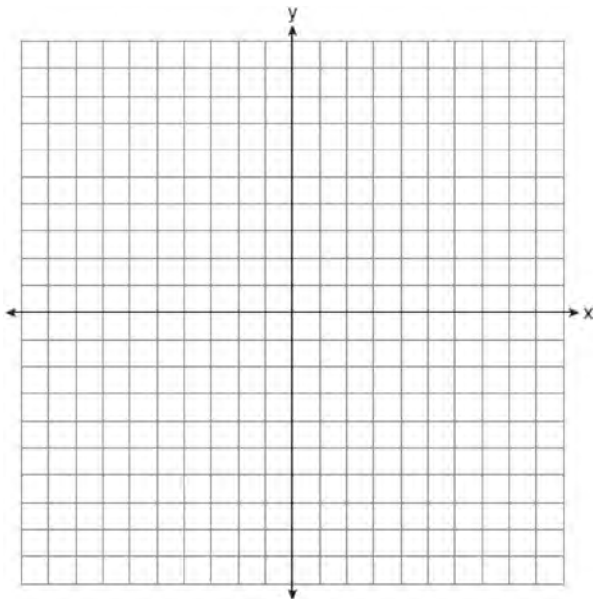
425 Which equation represents a line parallel to the x -axis?

- 1) $x = 5$
- 2) $y = 10$
- 3) $x = \frac{1}{3}y$
- 4) $y = 5x + 17$

426 On the set of axes below, solve the following system of equations graphically for all values of x and y .

$$y = x^2 - 6x + 1$$

$$y + 2x = 6$$



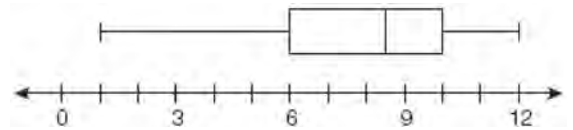
427 The set $\{11, 12\}$ is equivalent to

- 1) $\{x \mid 11 < x < 12, \text{ where } x \text{ is an integer}\}$
- 2) $\{x \mid 11 < x \leq 12, \text{ where } x \text{ is an integer}\}$
- 3) $\{x \mid 10 \leq x < 12, \text{ where } x \text{ is an integer}\}$
- 4) $\{x \mid 10 < x \leq 12, \text{ where } x \text{ is an integer}\}$

428 What is the slope of the line that passes through the points $(-5, 4)$ and $(15, -4)$?

- 1) $-\frac{2}{5}$
- 2) 0
- 3) $-\frac{5}{2}$
- 4) undefined

429 What is the value of the third quartile shown on the box-and-whisker plot below?



- 1) 6
- 2) 8.5
- 3) 10
- 4) 12

430 An electronics store sells DVD players and cordless telephones. The store makes a \$75 profit on the sale of each DVD player (d) and a \$30 profit on the sale of each cordless telephone (c). The store wants to make a profit of at least \$255.00 from its sales of DVD players and cordless phones. Which inequality describes this situation?

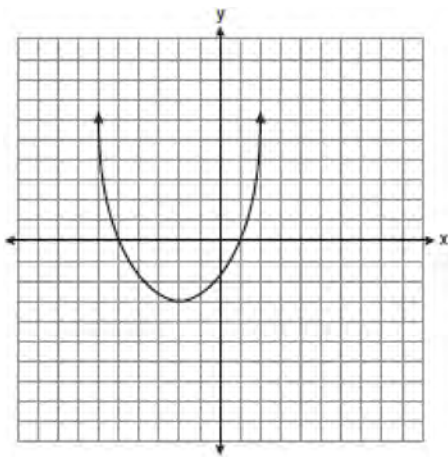
- 1) $75d + 30c < 255$
- 2) $75d + 30c \leq 255$
- 3) $75d + 30c > 255$
- 4) $75d + 30c \geq 255$

431 Write an equation that represents the line that passes through the points $(5, 4)$ and $(-5, 0)$.

432 If $3ax + b = c$, then x equals

- 1) $c - b + 3a$
- 2) $c + b - 3a$
- 3) $\frac{c-b}{3a}$
- 4) $\frac{b-c}{3a}$

433 What are the vertex and the axis of symmetry of the parabola shown in the diagram below?



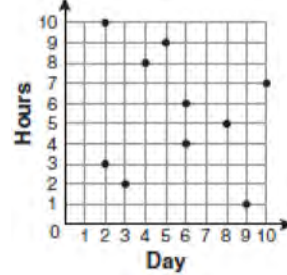
- 1) The vertex is $(-2, -3)$, and the axis of symmetry is $x = -2$.
- 2) The vertex is $(-2, -3)$, and the axis of symmetry is $y = -2$.
- 3) The vertex is $(-3, -2)$, and the axis of symmetry is $y = -2$.
- 4) The vertex is $(-3, -2)$, and the axis of symmetry is $x = -2$.

434 Determine how many three-letter arrangements are possible with the letters $A, N, G, L,$ and E if no letter may be repeated.

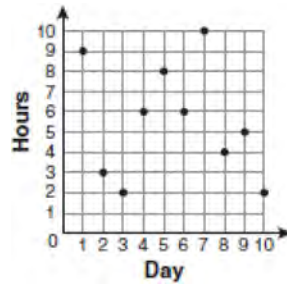
435 For 10 days, Romero kept a record of the number of hours he spent listening to music. The information is shown in the table below.

Day	1	2	3	4	5	6	7	8	9	10
Hours	9	3	2	6	8	6	10	4	5	2

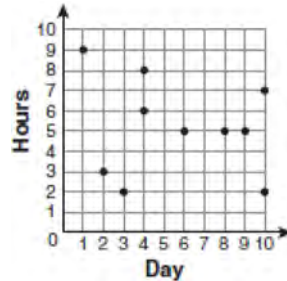
Which scatter plot shows Romero's data graphically?



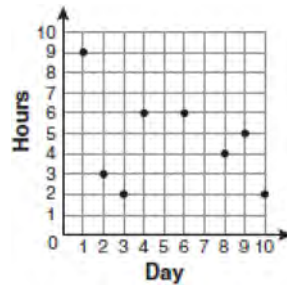
1)



2)



3)



4)

- 436 Given:
Set $A = \{(-2, -1), (-1, 0), (1, 8)\}$
Set $B = \{(-3, -4), (-2, -1), (-1, 2), (1, 8)\}$.
What is the intersection of sets A and B ?
- 1) $\{(1, 8)\}$
 - 2) $\{(-2, -1)\}$
 - 3) $\{(-2, -1), (1, 8)\}$
 - 4) $\{(-3, -4), (-2, -1), (-1, 2), (-1, 0), (1, 8)\}$
- 437 In a linear equation, the independent variable increases at a constant rate while the dependent variable decreases at a constant rate. The slope of this line is
- 1) zero
 - 2) negative
 - 3) positive
 - 4) undefined
- 438 Which expression represents $\frac{25x - 125}{x^2 - 25}$ in simplest form?
- 1) $\frac{5}{x}$
 - 2) $\frac{-5}{x}$
 - 3) $\frac{25}{x - 5}$
 - 4) $\frac{25}{x + 5}$
- 439 The function $y = \frac{x}{x^2 - 9}$ is undefined when the value of x is
- 1) 0 or 3
 - 2) 3 or -3
 - 3) 3, only
 - 4) -3 , only
- 440 Consider the graph of the equation $y = ax^2 + bx + c$, when $a \neq 0$. If a is multiplied by 3, what is true of the graph of the resulting parabola?
- 1) The vertex is 3 units above the vertex of the original parabola.
 - 2) The new parabola is 3 units to the right of the original parabola.
 - 3) The new parabola is wider than the original parabola.
 - 4) The new parabola is narrower than the original parabola.
- 441 The faces of a cube are numbered from 1 to 6. If the cube is rolled once, which outcome is *least* likely to occur?
- 1) rolling an odd number
 - 2) rolling an even number
 - 3) rolling a number less than 6
 - 4) rolling a number greater than 4
- 442 A rectangle has an area of 24 square units. The width is 5 units less than the length. What is the length, in units, of the rectangle?
- 1) 6
 - 2) 8
 - 3) 3
 - 4) 19
- 443 Sam and Odel have been selling frozen pizzas for a class fundraiser. Sam has sold half as many pizzas as Odel. Together they have sold a total of 126 pizzas. How many pizzas did Sam sell?
- 1) 21
 - 2) 42
 - 3) 63
 - 4) 84

444 What is an equation of the line that passes through the point $(3, -1)$ and has a slope of 2?

- 1) $y = 2x + 5$
- 2) $y = 2x - 1$
- 3) $y = 2x - 4$
- 4) $y = 2x - 7$

445 What is $\frac{6}{5x} - \frac{2}{3x}$ in simplest form?

- 1) $\frac{8}{15x^2}$
- 2) $\frac{8}{15x}$
- 3) $\frac{4}{15x}$
- 4) $\frac{4}{2x}$

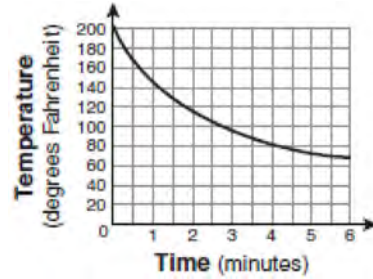
446 What is the sum of $\frac{d}{2}$ and $\frac{2d}{3}$ expressed in simplest form?

- 1) $\frac{3d}{5}$
- 2) $\frac{3d}{6}$
- 3) $\frac{7d}{5}$
- 4) $\frac{7d}{6}$

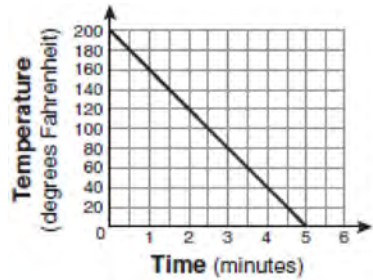
447 It takes Tammy 45 minutes to ride her bike 5 miles. At this rate, how long will it take her to ride 8 miles?

- 1) 0.89 hour
- 2) 1.125 hours
- 3) 48 minutes
- 4) 72 minutes

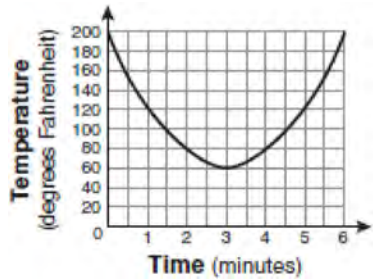
448 Antwaan leaves a cup of hot chocolate on the counter in his kitchen. Which graph is the best representation of the change in temperature of his hot chocolate over time?



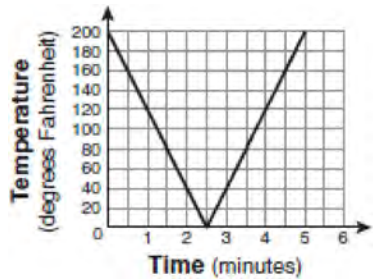
1)



2)



3)



4)

449 Find algebraically the equation of the axis of symmetry and the coordinates of the vertex of the parabola whose equation is $y = -2x^2 - 8x + 3$.

450 A contractor needs 54 square feet of brick to construct a rectangular walkway. The length of the walkway is 15 feet more than the width. Write an equation that could be used to determine the dimensions of the walkway. Solve this equation to find the length and width, in feet, of the walkway.

451 What is the product of $\frac{4x}{x-1}$ and $\frac{x^2-1}{3x+3}$ expressed in simplest form?

- 1) $\frac{4x}{3}$
- 2) $\frac{4x^2}{3}$
- 3) $\frac{4x^2}{3(x+1)}$
- 4) $\frac{4(x+1)}{3}$

452 Which equation represents a line that is parallel to the line $y = 3 - 2x$?

- 1) $4x + 2y = 5$
- 2) $2x + 4y = 1$
- 3) $y = 3 - 4x$
- 4) $y = 4x - 2$

453 A bank is advertising that new customers can open a savings account with a $3\frac{3}{4}\%$ interest rate compounded annually. Robert invests \$5,000 in an account at this rate. If he makes no additional deposits or withdrawals on his account, find the amount of money he will have, to the *nearest cent*, after three years.

454 Brianna is using the two spinners shown below to play her new board game. She spins the arrow on each spinner once. Brianna uses the first spinner to determine how many spaces to move. She uses the second spinner to determine whether her move from the first spinner will be forward or backward.



Find the probability that Brianna will move *fewer than* four spaces and *backward*.

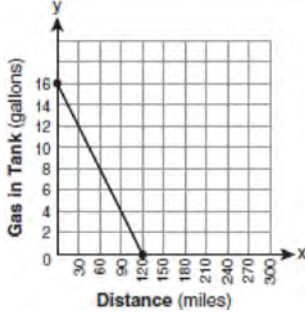
455 Students in Ms. Nazzeer's mathematics class tossed a six-sided number cube whose faces are numbered 1 to 6. The results are recorded in the table below.

Result	Frequency
1	3
2	6
3	4
4	6
5	4
6	7

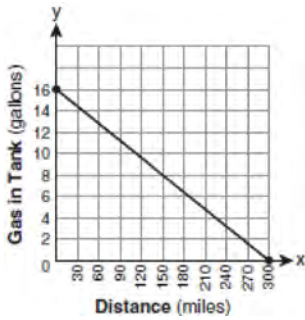
Based on these data, what is the empirical probability of tossing a 4?

- 1) $\frac{8}{30}$
- 2) $\frac{6}{30}$
- 3) $\frac{5}{30}$
- 4) $\frac{1}{30}$

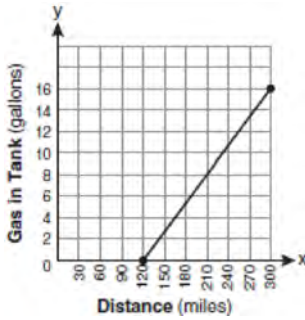
456 The gas tank in a car holds a total of 16 gallons of gas. The car travels 75 miles on 4 gallons of gas. If the gas tank is full at the beginning of a trip, which graph represents the rate of change in the amount of gas in the tank?



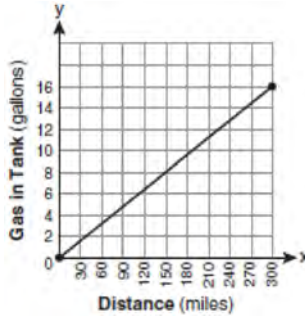
1)



2)



3)

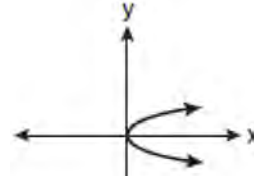


4)

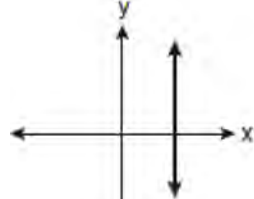
457 What is the product of 12 and 4.2×10^6 expressed in scientific notation?

- 1) 50.4×10^6
- 2) 50.4×10^7
- 3) 5.04×10^6
- 4) 5.04×10^7

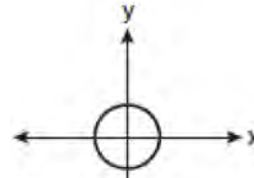
458 Which graph represents a function?



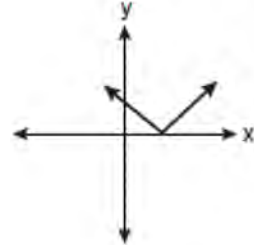
1)



2)

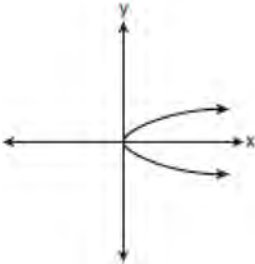
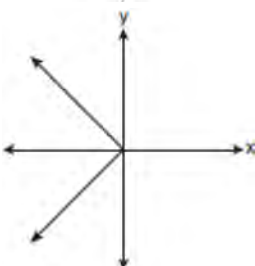
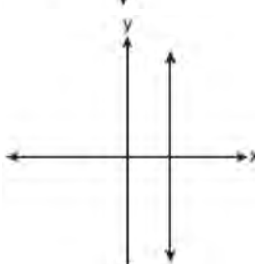
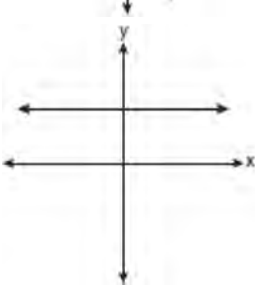


3)



4)

459 Which graph represents a function?

- 1) 
- 2) 
- 3) 
- 4) 

460 The Hudson Record Store is having a going-out-of-business sale. CDs normally sell for \$18.00. During the first week of the sale, all CDs will sell for \$15.00. Written as a fraction, what is the rate of discount? What is this rate expressed as a percent? Round your answer to the *nearest hundredth of a percent*. During the second week of the sale, the same CDs will be on sale for 25% off the *original* price. What is the price of a CD during the second week of the sale?

461 Students in a ninth grade class measured their heights, h , in centimeters. The height of the shortest student was 155 cm, and the height of the tallest student was 190 cm. Which inequality represents the range of heights?

- 1) $155 < h < 190$
- 2) $155 \leq h \leq 190$
- 3) $h \geq 155$ or $h \leq 190$
- 4) $h > 155$ or $h < 190$

462 Which relationship can best be described as causal?

- 1) height and intelligence
- 2) shoe size and running speed
- 3) number of correct answers on a test and test score
- 4) number of students in a class and number of students with brown hair

463 Which situation should be analyzed using bivariate data?

- 1) Ms. Saleem keeps a list of the amount of time her daughter spends on her social studies homework.
- 2) Mr. Benjamin tries to see if his students' shoe sizes are directly related to their heights.
- 3) Mr. DeStefan records his customers' best video game scores during the summer.
- 4) Mr. Chan keeps track of his daughter's algebra grades for the quarter.

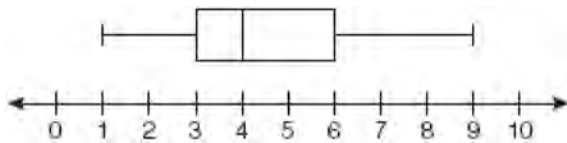
464 A prom ticket at Smith High School is \$120. Tom is going to save money for the ticket by walking his neighbor's dog for \$15 per week. If Tom already has saved \$22, what is the minimum number of weeks Tom must walk the dog to earn enough to pay for the prom ticket?

465 Which value of x is the solution of

$$\frac{2x}{5} + \frac{1}{3} = \frac{7x-2}{15}?$$

- 1) $\frac{3}{5}$
- 2) $\frac{31}{26}$
- 3) 3
- 4) 7

466 A movie theater recorded the number of tickets sold daily for a popular movie during the month of June. The box-and-whisker plot shown below represents the data for the number of tickets sold, in hundreds.



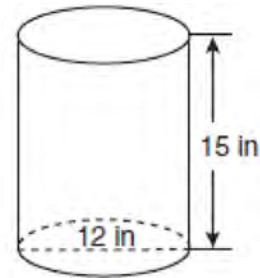
Which conclusion can be made using this plot?

- 1) The second quartile is 600.
- 2) The mean of the attendance is 400.
- 3) The range of the attendance is 300 to 600.
- 4) Twenty-five percent of the attendance is between 300 and 400.

467 If h represents a number, which equation is a correct translation of "Sixty more than 9 times a number is 375"?

- 1) $9h = 375$
- 2) $9h + 60 = 375$
- 3) $9h - 60 = 375$
- 4) $60h + 9 = 375$

468 A cylindrical container has a diameter of 12 inches and a height of 15 inches, as illustrated in the diagram below.



(Not drawn to scale)

What is the volume of this container to the *nearest tenth* of a cubic inch?

- 1) 6,785.8
- 2) 4,241.2
- 3) 2,160.0
- 4) 1,696.5

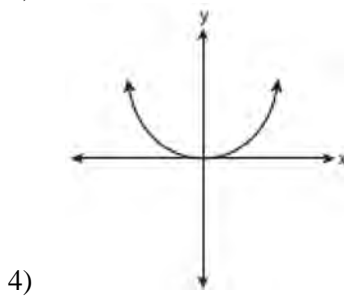
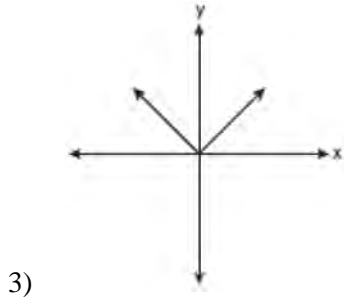
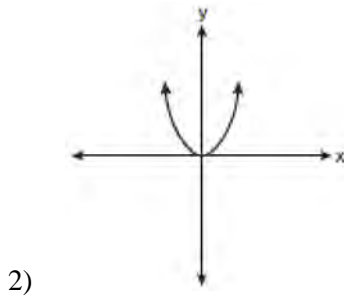
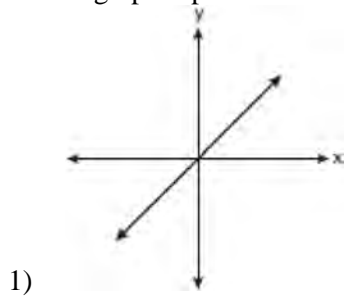
469 The expression $9x^2 - 100$ is equivalent to

- 1) $(9x - 10)(x + 10)$
- 2) $(3x - 10)(3x + 10)$
- 3) $(3x - 100)(3x - 1)$
- 4) $(9x - 100)(x + 1)$

470 At Genesee High School, the sophomore class has 60 more students than the freshman class. The junior class has 50 fewer students than twice the students in the freshman class. The senior class is three times as large as the freshman class. If there are a total of 1,424 students at Genesee High School, how many students are in the freshman class?

- 1) 202
- 2) 205
- 3) 235
- 4) 236

471 Which graph represents a linear function?



472 Which value of x is the solution of the equation

$$\frac{2x}{3} + \frac{x}{6} = 5?$$

- 1) 6
- 2) 10
- 3) 15
- 4) 30

473 Ryan estimates the measurement of the volume of a popcorn container to be 282 cubic inches. The actual volume of the popcorn container is 289 cubic inches. What is the relative error of Ryan's measurement to the *nearest thousandth*?

- 1) 0.024
- 2) 0.025
- 3) 0.096
- 4) 1.025

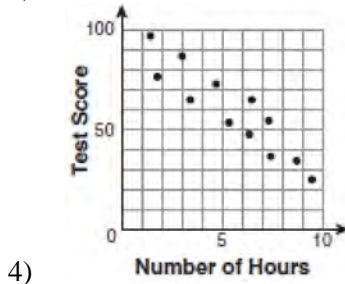
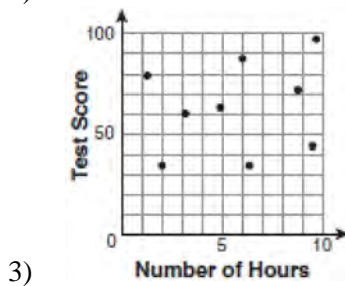
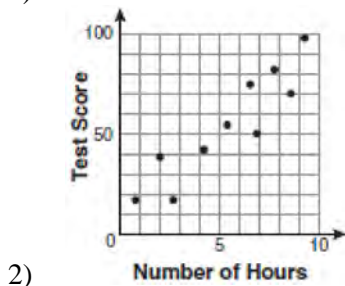
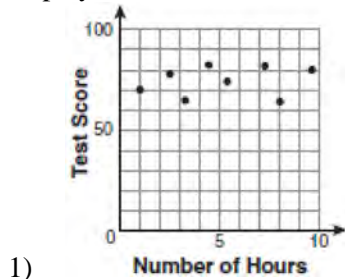
474 Throughout history, many people have contributed to the development of mathematics. These mathematicians include Pythagoras, Euclid, Hypatia, Euler, Einstein, Agnesi, Fibonacci, and Pascal. What is the probability that a mathematician's name selected at random from those listed will start with either the letter E or the letter A ?

- 1) $\frac{2}{8}$
- 2) $\frac{3}{8}$
- 3) $\frac{4}{8}$
- 4) $\frac{6}{8}$

475 If the formula for the perimeter of a rectangle is $P = 2l + 2w$, then w can be expressed as

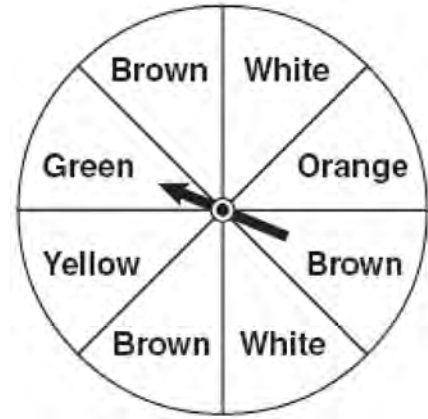
- 1) $w = \frac{2l - P}{2}$
- 2) $w = \frac{P - 2l}{2}$
- 3) $w = \frac{P - l}{2}$
- 4) $w = \frac{P - 2w}{2l}$

476 There is a negative correlation between the number of hours a student watches television and his or her social studies test score. Which scatter plot below displays this correlation?



477 Express in simplest form: $\frac{2x^2 - 8x - 42}{6x^2} \div \frac{x^2 - 9}{x^2 - 3x}$

478 Keisha is playing a game using a wheel divided into eight equal sectors, as shown in the diagram below. Each time the spinner lands on orange, she will win a prize.



If Keisha spins this wheel twice, what is the probability she will win a prize on *both* spins?

- 1) $\frac{1}{64}$
- 2) $\frac{1}{56}$
- 3) $\frac{1}{16}$
- 4) $\frac{1}{4}$


479 Given:
 $A = \{ \text{All even integers from 2 to 20, inclusive} \}$

$B = \{ 10, 12, 14, 16, 18 \}$

What is the complement of set B within the universe of set A ?

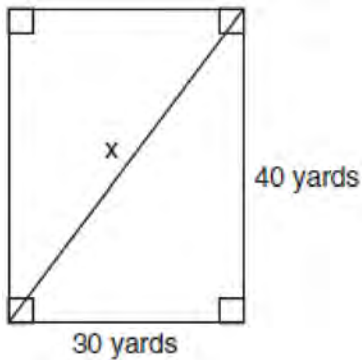
- 1) $\{ 4, 6, 8 \}$
- 2) $\{ 2, 4, 6, 8 \}$
- 3) $\{ 4, 6, 8, 20 \}$
- 4) $\{ 2, 4, 6, 8, 20 \}$

- 480 A playground in a local community consists of a rectangle and two semicircles, as shown in the diagram below.



Which expression represents the amount of fencing, in yards, that would be needed to completely enclose the playground?

- 1) $15\pi + 50$
 - 2) $15\pi + 80$
 - 3) $30\pi + 50$
 - 4) $30\pi + 80$
- 481 Tanya runs diagonally across a rectangular field that has a length of 40 yards and a width of 30 yards, as shown in the diagram below.



What is the length of the diagonal, in yards, that Tanya runs?

- 1) 50
- 2) 60
- 3) 70
- 4) 80

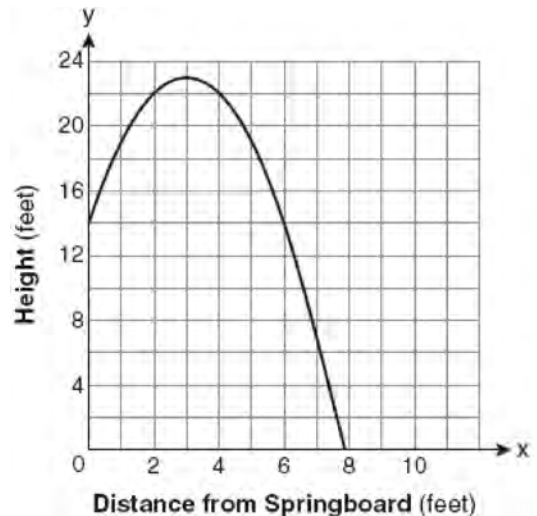
- 482 John is going to line up his four golf trophies on a shelf in his bedroom. How many different possible arrangements can he make?

- 1) 24
- 2) 16
- 3) 10
- 4) 4

- 483 When $5\sqrt{20}$ is written in simplest radical form, the result is $k\sqrt{5}$. What is the value of k ?

- 1) 20
- 2) 10
- 3) 7
- 4) 4

- 484 A swim team member performs a dive from a 14-foot-high springboard. The parabola below shows the path of her dive.



Which equation represents the axis of symmetry?

- 1) $x = 3$
- 2) $y = 3$
- 3) $x = 23$
- 4) $y = 23$

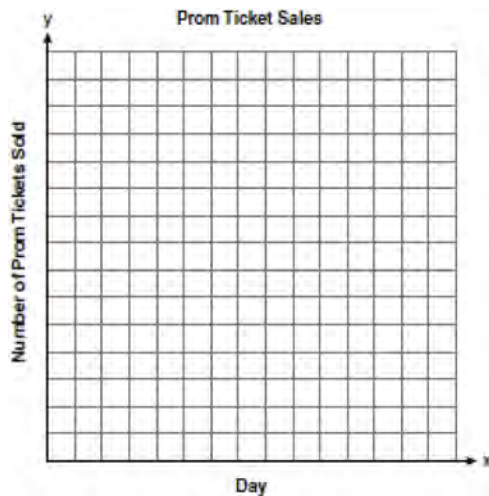
- 485 What is the value of x in the equation $\frac{2}{x} - 3 = \frac{26}{x}$?
- 1) -8
 - 2) $-\frac{1}{8}$
 - 3) $\frac{1}{8}$
 - 4) 8

- 486 The table below shows the number of prom tickets sold over a ten-day period.

Prom Ticket Sales

Day (x)	1	2	5	7	10
Number of Prom Tickets Sold (y)	30	35	55	60	70

Plot these data points on the coordinate grid below. Use a consistent and appropriate scale. Draw a reasonable line of best fit and write its equation.



- 487 Factor completely: $4x^3 - 36x$

- 488 What is an equation for the line that passes through the coordinates $(2,0)$ and $(0,3)$?

- 1) $y = -\frac{3}{2}x + 3$
- 2) $y = -\frac{3}{2}x - 3$
- 3) $y = -\frac{2}{3}x + 2$
- 4) $y = -\frac{2}{3}x - 2$

- 489 Which property is illustrated by the equation $ax + ay = a(x + y)$?

- 1) associative
- 2) commutative
- 3) distributive
- 4) identity

- 490 Solve the following system of equations algebraically:

$$3x + 2y = 4$$

$$4x + 3y = 7$$

[Only an algebraic solution can receive full credit.]

- 491 What is the slope of the line that passes through the points $(2,5)$ and $(7,3)$?

- 1) $-\frac{5}{2}$
- 2) $-\frac{2}{5}$
- 3) $\frac{8}{9}$
- 4) $\frac{9}{8}$

492 Peter begins his kindergarten year able to spell 10 words. He is going to learn to spell 2 new words every day. Write an inequality that can be used to determine how many days, d , it takes Peter to be able to spell *at least* 75 words. Use this inequality to determine the minimum number of whole days it will take for him to be able to spell *at least* 75 words.

493 Tamara has a cell phone plan that charges \$0.07 per minute plus a monthly fee of \$19.00. She budgets \$29.50 per month for total cell phone expenses without taxes. What is the maximum number of minutes Tamara could use her phone each month in order to stay within her budget?

- 1) 150
- 2) 271
- 3) 421
- 4) 692

494 What is the value of the expression $|-5x + 12|$ when $x = 5$?

- 1) -37
- 2) -13
- 3) 13
- 4) 37

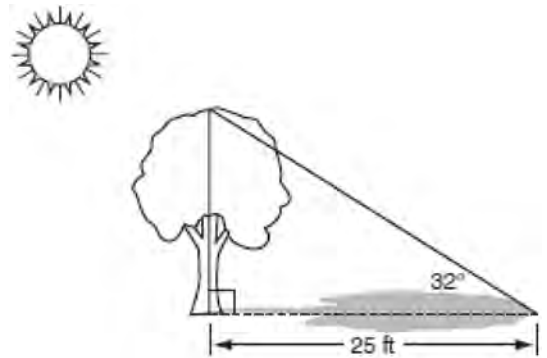
495 The bowling team at Lincoln High School must choose a president, vice president, and secretary. If the team has 10 members, which expression could be used to determine the number of ways the officers could be chosen?

- 1) ${}_3P_{10}$
- 2) ${}_7P_3$
- 3) ${}_{10}P_3$
- 4) ${}_{10}P_7$

496 Which expression represents $\frac{(2x^3)(8x^5)}{4x^6}$ in simplest form?

- 1) x^2
- 2) x^9
- 3) $4x^2$
- 4) $4x^9$

497 A tree casts a 25-foot shadow on a sunny day, as shown in the diagram below.



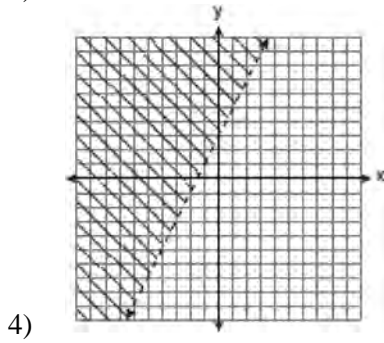
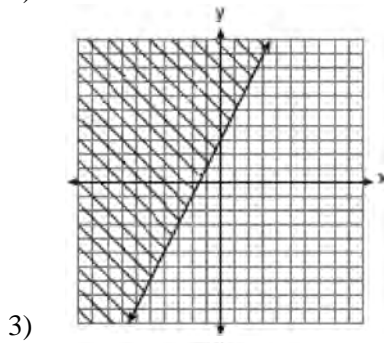
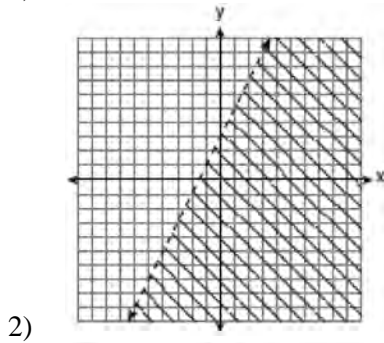
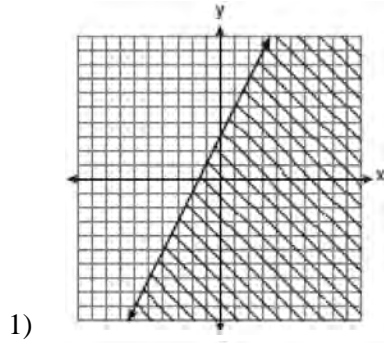
If the angle of elevation from the tip of the shadow to the top of the tree is 32° , what is the height of the tree to the *nearest tenth of a foot*?

- 1) 13.2
- 2) 15.6
- 3) 21.2
- 4) 40.0

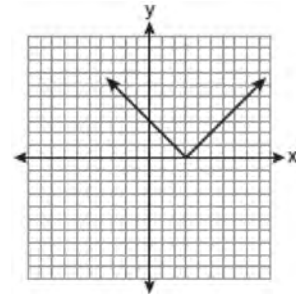
498 Consider the set of integers greater than -2 and less than 6 . A subset of this set is the positive factors of 5 . What is the complement of this subset?

- 1) $\{0, 2, 3, 4\}$
- 2) $\{-1, 0, 2, 3, 4\}$
- 3) $\{-2, -1, 0, 2, 3, 4, 6\}$
- 4) $\{-2, -1, 0, 1, 2, 3, 4, 5, 6\}$

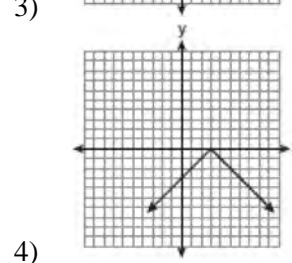
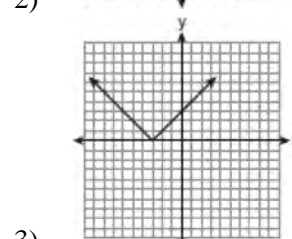
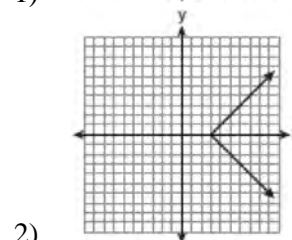
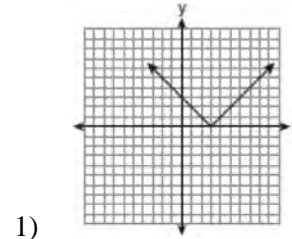
499 Which graph represents the solution of $3y - 9 \leq 6x$?



501 The diagram below shows the graph of $y = |x - 3|$.

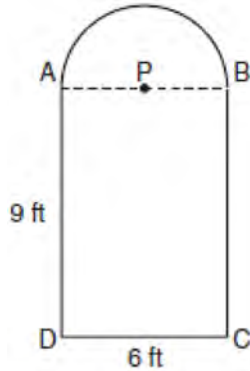


Which diagram shows the graph of $y = -|x - 3|$?



500 Express $5\sqrt{72}$ in simplest radical form.

- 502 Serena's garden is a rectangle joined with a semicircle, as shown in the diagram below. Line segment AB is the diameter of semicircle P . Serena wants to put a fence around her garden.



Calculate the length of fence Serena needs to the nearest tenth of a foot.

- 503 What is $\sqrt{32}$ expressed in simplest radical form?

- 1) $16\sqrt{2}$
- 2) $4\sqrt{2}$
- 3) $4\sqrt{8}$
- 4) $2\sqrt{8}$

- 504 Erica is conducting a survey about the proposed increase in the sports budget in the Hometown School District. Which survey method would likely contain the most bias?
- 1) Erica asks every third person entering the Hometown Grocery Store.
 - 2) Erica asks every third person leaving the Hometown Shopping Mall this weekend.
 - 3) Erica asks every fifth student entering Hometown High School on Monday morning.
 - 4) Erica asks every fifth person leaving Saturday's Hometown High School football game.

- 505 Which verbal expression represents $2(n - 6)$?
- 1) two times n minus six
 - 2) two times six minus n
 - 3) two times the quantity n less than six
 - 4) two times the quantity six less than n

- 506 What are the roots of the equation

$$x^2 - 10x + 21 = 0?$$

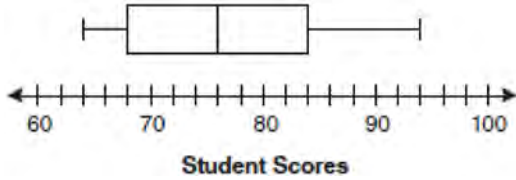
- 1) 1 and 21
- 2) -5 and -5
- 3) 3 and 7
- 4) -3 and -7

- 507 Carrie bought new carpet for her living room. She calculated the area of the living room to be 174.2 square feet. The actual area was 149.6 square feet. What is the relative error of the area to the nearest ten-thousandth?

- 1) 0.1412
- 2) 0.1644
- 3) 1.8588
- 4) 2.1644

- 508 At the end of week one, a stock had increased in value from \$5.75 a share to \$7.50 a share. Find the percent of increase at the end of week one to the nearest tenth of a percent. At the end of week two, the same stock had decreased in value from \$7.50 to \$5.75. Is the percent of decrease at the end of week two the same as the percent of increase at the end of week one? Justify your answer.

- 509 The box-and-whisker plot below represents students' scores on a recent English test.

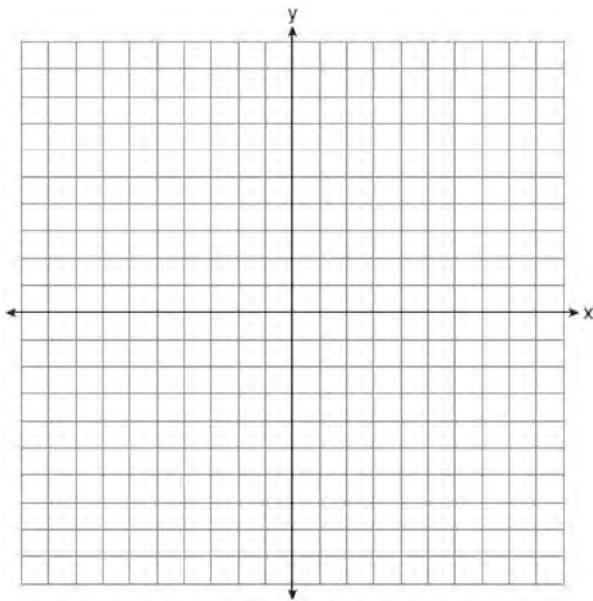


What is the value of the upper quartile?

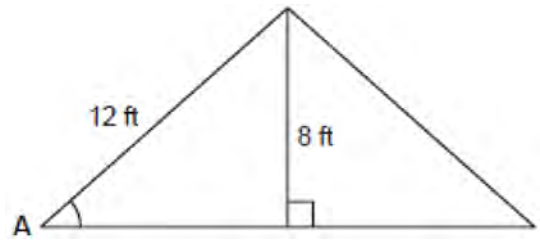
- 1) 68
 - 2) 76
 - 3) 84
 - 4) 94
- 510 On the set of axes below, graph the following system of inequalities and state the coordinates of a point in the solution set.

$$2x - y \geq 6$$

$$x > 2$$



- 511 The center pole of a tent is 8 feet long, and a side of the tent is 12 feet long as shown in the diagram below.



If a right angle is formed where the center pole meets the ground, what is the measure of angle A to the nearest degree?

- 1) 34
 - 2) 42
 - 3) 48
 - 4) 56
- 512 Which value of x makes the expression

$$\frac{x^2 - 9}{x^2 + 7x + 10} \text{ undefined?}$$

- 1) -5
 - 2) 2
 - 3) 3
 - 4) -3
- 513 The expression $\frac{9x^4 - 27x^6}{3x^3}$ is equivalent to

- 1) $3x(1 - 3x)$
- 2) $3x(1 - 3x^2)$
- 3) $3x(1 - 9x^5)$
- 4) $9x^3(1 - x)$

514 The chart below compares two runners.

Runner	Distance, in miles	Time, in hours
Greg	11	2
Dave	16	3

Based on the information in this chart, state which runner has the faster rate. Justify your answer.

515 The table below shows a cumulative frequency distribution of runners' ages.

Cumulative Frequency Distribution of Runners' Ages

Age Group	Total
20-29	8
20-39	18
20-49	25
20-59	31
20-69	35

According to the table, how many runners are in their forties?

- 1) 25
- 2) 10
- 3) 7
- 4) 6

516 Which equation represents a line parallel to the x -axis?

- 1) $y = -5$
- 2) $y = -5x$
- 3) $x = 3$
- 4) $x = 3y$

517 Which equation represents a line that is parallel to the line $y = -4x + 5$?

- 1) $y = -4x + 3$
- 2) $y = -\frac{1}{4}x + 5$
- 3) $y = \frac{1}{4}x + 3$
- 4) $y = 4x + 5$

518 Factored, the expression $16x^2 - 25y^2$ is equivalent to

- 1) $(4x - 5y)(4x + 5y)$
- 2) $(4x - 5y)(4x - 5y)$
- 3) $(8x - 5y)(8x + 5y)$
- 4) $(8x - 5y)(8x - 5y)$

519 Which value of x is a solution of $\frac{5}{x} = \frac{x+13}{6}$?

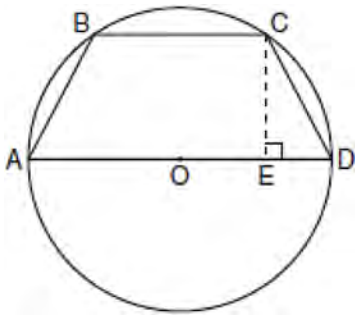
- 1) -2
- 2) -3
- 3) -10
- 4) -15

520 The groundskeeper is replacing the turf on a football field. His measurements of the field are 130 yards by 60 yards. The actual measurements are 120 yards by 54 yards. Which expression represents the relative error in the measurement?

- 1) $\frac{(130)(60) - (120)(54)}{(120)(54)}$
- 2) $\frac{(120)(54)}{(130)(60) - (120)(54)}$
- 3) $\frac{(130)(60) - (120)(54)}{(130)(60)}$
- 4) $\frac{(130)(60)}{(130)(60) - (120)(54)}$

- 521 Which ordered pair is a solution to the system of equations $y = x$ and $y = x^2 - 2$?
- 1) $(-2, -2)$
 - 2) $(-1, 1)$
 - 3) $(0, 0)$
 - 4) $(2, 2)$

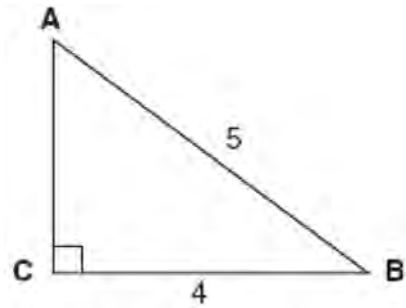
- 522 In the diagram below, the circumference of circle O is 16π inches. The length of \overline{BC} is three-quarters of the length of diameter \overline{AD} and $CE = 4$ inches. Calculate the area, in square inches, of trapezoid $ABCD$.



- 523 Solve for x : $\frac{3}{5}(x + 2) = x - 4$
- 1) 8
 - 2) 13
 - 3) 15
 - 4) 23

- 524 Factored completely, the expression $2x^2 + 10x - 12$ is equivalent to
- 1) $2(x - 6)(x + 1)$
 - 2) $2(x + 6)(x - 1)$
 - 3) $2(x + 2)(x + 3)$
 - 4) $2(x - 2)(x - 3)$

- 525 Which equation could be used to find the measure of one acute angle in the right triangle shown below?



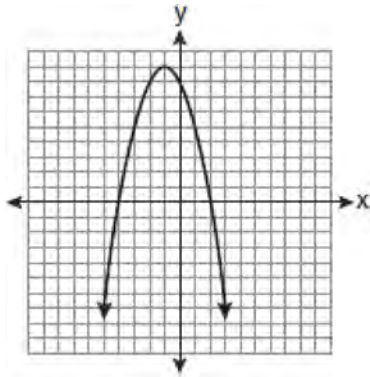
- 1) $\sin A = \frac{4}{5}$
- 2) $\tan A = \frac{5}{4}$
- 3) $\cos B = \frac{5}{4}$
- 4) $\tan B = \frac{4}{5}$

- 526 The New York Volleyball Association invited 64 teams to compete in a tournament. After each round, half of the teams were eliminated. Which equation represents the number of teams, t , that remained in the tournament after r rounds?
- 1) $t = 64(r)^{0.5}$
 - 2) $t = 64(-0.5)^r$
 - 3) $t = 64(1.5)^r$
 - 4) $t = 64(0.5)^r$

- 527 Which value of x is in the solution set of the inequality $-2(x - 5) < 4$?
- 1) 0
 - 2) 2
 - 3) 3
 - 4) 5

- 528 Mr. Turner bought x boxes of pencils. Each box holds 25 pencils. He left 3 boxes of pencils at home and took the rest to school. Which expression represents the total number of pencils he took to school?
- 1) $22x$
 - 2) $25x - 3$
 - 3) $25 - 3x$
 - 4) $25x - 75$

- 529 The equation $y = -x^2 - 2x + 8$ is graphed on the set of axes below.



Based on this graph, what are the roots of the equation $-x^2 - 2x + 8 = 0$?

- 1) 8 and 0
 - 2) 2 and -4
 - 3) 9 and -1
 - 4) 4 and -2
- 530 Jack bought 3 slices of cheese pizza and 4 slices of mushroom pizza for a total cost of \$12.50. Grace bought 3 slices of cheese pizza and 2 slices of mushroom pizza for a total cost of \$8.50. What is the cost of one slice of mushroom pizza?
- 1) \$1.50
 - 2) \$2.00
 - 3) \$3.00
 - 4) \$3.50

- 531 Nicole's aerobics class exercises to fast-paced music. If the rate of the music is 120 beats per minute, how many beats would there be in a class that is 0.75 hour long?
- 1) 90
 - 2) 160
 - 3) 5,400
 - 4) 7,200

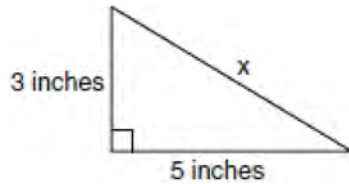
- 532 The ages of three brothers are consecutive even integers. Three times the age of the youngest brother exceeds the oldest brother's age by 48 years. What is the age of the youngest brother?
- 1) 14
 - 2) 18
 - 3) 22
 - 4) 26

- 533 Which ordered pair is a solution of the system of equations $y = x^2 - x - 20$ and $y = 3x - 15$?
- 1) $(-5, -30)$
 - 2) $(-1, -18)$
 - 3) $(0, 5)$
 - 4) $(5, -1)$

- 534 Which expression is equivalent to $9x^2 - 16$?
- 1) $(3x + 4)(3x - 4)$
 - 2) $(3x - 4)(3x - 4)$
 - 3) $(3x + 8)(3x - 8)$
 - 4) $(3x - 8)(3x - 8)$

- 535 Perform the indicated operation and simplify:
- $$\frac{3x + 6}{4x + 12} \div \frac{x^2 - 4}{x + 3}$$

- 536 What is the value of x , in inches, in the right triangle below?



- 1) $\sqrt{15}$
2) 8
3) $\sqrt{34}$
4) 4
- 537 The statement $2 + 0 = 2$ is an example of the use of which property of real numbers?
1) associative
2) additive identity
3) additive inverse
4) distributive
- 538 A cell phone can receive 120 messages per minute. At this rate, how many messages can the phone receive in 150 seconds?
1) 48
2) 75
3) 300
4) 18,000
- 539 A soup can is in the shape of a cylinder. The can has a volume of 342 cm^3 and a diameter of 6 cm. Express the height of the can in terms of π . Determine the maximum number of soup cans that can be stacked on their base between two shelves if the distance between the shelves is exactly 36 cm. Explain your answer.

- 540 The length of the hypotenuse of a right triangle is 34 inches and the length of one of its legs is 16 inches. What is the length, in inches, of the other leg of this right triangle?
1) 16
2) 18
3) 25
4) 30

- 541 Which value of x is in the solution set of $\frac{4}{3}x + 5 < 17$?
1) 8
2) 9
3) 12
4) 16

- 542 Which value of x makes the expression $\frac{x+4}{x-3}$ undefined?
1) -4
2) -3
3) 3
4) 0

- 543 Express the product of $3\sqrt{20}(2\sqrt{5} - 7)$ in simplest radical form.

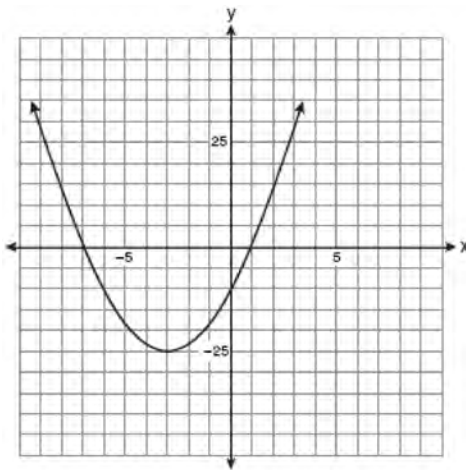
- 544 The set $\{1, 2, 3, 4\}$ is equivalent to
1) $\{x \mid 1 < x < 4, \text{ where } x \text{ is a whole number}\}$
2) $\{x \mid 0 < x < 4, \text{ where } x \text{ is a whole number}\}$
3) $\{x \mid 0 < x \leq 4, \text{ where } x \text{ is a whole number}\}$
4) $\{x \mid 1 < x \leq 4, \text{ where } x \text{ is a whole number}\}$

- 545 The values of 11 houses on Washington St. are shown in the table below.

Value per House	Number of Houses
\$100,000	1
\$175,000	5
\$200,000	4
\$700,000	1

Find the mean value of these houses in dollars.
 Find the median value of these houses in dollars.
 State which measure of central tendency, the mean or the median, *best* represents the values of these 11 houses. Justify your answer.

- 546 Which equation represents the axis of symmetry of the graph of the parabola below?



- 1) $y = -3$
- 2) $x = -3$
- 3) $y = -25$
- 4) $x = -25$

- 547 The prices of seven race cars sold last week are listed in the table below.

Price per Race Car	Number of Race Cars
\$126,000	1
\$140,000	2
\$180,000	1
\$400,000	2
\$819,000	1

What is the mean value of these race cars, in dollars? What is the median value of these race cars, in dollars? State which of these measures of central tendency best represents the value of the seven race cars. Justify your answer.

- 548 What is the sum of $\frac{3}{2x}$ and $\frac{4}{3x}$ expressed in simplest form?


- 1) $\frac{12}{6x^2}$
- 2) $\frac{17}{6x}$
- 3) $\frac{7}{5x}$
- 4) $\frac{17}{12x}$

- 549 Marie currently has a collection of 58 stamps. If she buys s stamps each week for w weeks, which expression represents the total number of stamps she will have?
- 1) $58sw$
 - 2) $58 + sw$
 - 3) $58s + w$
 - 4) $58 + s + w$

- 550 On the grid below, solve the system of equations graphically for x and y .

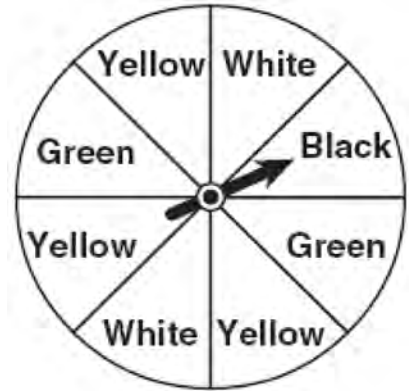
$$4x - 2y = 10$$

$$y = -2x - 1$$



- 551 Which expression is equivalent to $(3x^2)^3$?
- 1) $9x^5$
 - 2) $9x^6$
 - 3) $27x^5$
 - 4) $27x^6$

- 552 A spinner is divided into eight equal regions as shown in the diagram below.



- Which event is most likely to occur in one spin?
- 1) The arrow will land in a green or white area.
 - 2) The arrow will land in a green or black area.
 - 3) The arrow will land in a yellow or black area.
 - 4) The arrow will land in a yellow or green area.

- 553 Sarah measures her rectangular bedroom window for a new shade. Her measurements are 36 inches by 42 inches. The actual measurements of the window are 36.5 inches and 42.5 inches. Using the measurements that Sarah took, determine the number of square inches in the area of the window. Determine the number of square inches in the actual area of the window. Determine the relative error in calculating the area. Express your answer as a decimal to the *nearest thousandth*.

- 554 Tom drove 290 miles from his college to home and used 23.2 gallons of gasoline. His sister, Ann, drove 225 miles from her college to home and used 15 gallons of gasoline. Whose vehicle had better gas mileage? Justify your answer.

555 Which ordered pair is in the solution set of the following system of inequalities?

$$y < \frac{1}{2}x + 4$$

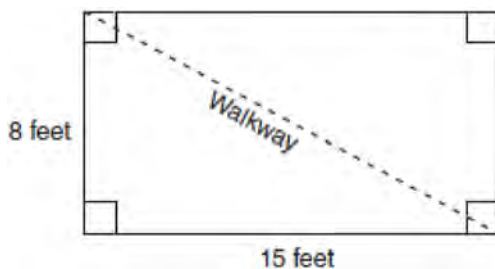
$$y \geq -x + 1$$

- 1) (-5,3)
- 2) (0,4)
- 3) (3,-5)
- 4) (4,0)

556 Which data set describes a situation that could be classified as qualitative?

- 1) the elevations of the five highest mountains in the world
- 2) the ages of presidents at the time of their inauguration
- 3) the opinions of students regarding school lunches
- 4) the shoe sizes of players on the basketball team

557 Nancy's rectangular garden is represented in the diagram below.



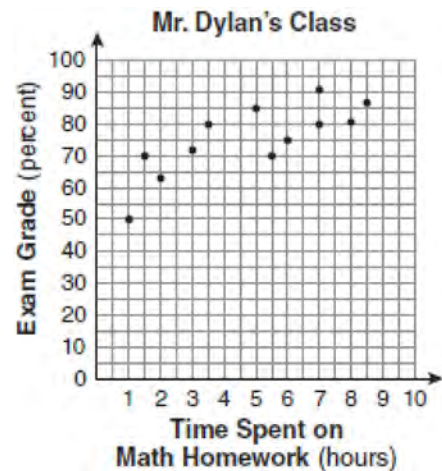
If a diagonal walkway crosses her garden, what is its length, in feet?

- 1) 17
- 2) 22
- 3) $\sqrt{161}$
- 4) $\sqrt{529}$

558 What is an equation of the line that passes through the point (4,-6) and has a slope of -3?

- 1) $y = -3x + 6$
- 2) $y = -3x - 6$
- 3) $y = -3x + 10$
- 4) $y = -3x + 14$

559 The number of hours spent on math homework each week and the final exam grades for twelve students in Mr. Dylan's algebra class are plotted below.



Based on a line of best fit, which exam grade is the best prediction for a student who spends about 4 hours on math homework each week?

- 1) 62
- 2) 72
- 3) 82
- 4) 92

560 Casey purchased a pack of assorted flower seeds and planted them in her garden. When the first 25 flowers bloomed, 11 were white, 5 were red, 3 were blue, and the rest were yellow. Find the empirical probability that a flower that blooms will be yellow.

561 A survey is being conducted to determine which types of television programs people watch. Which survey and location combination would likely contain the most bias?

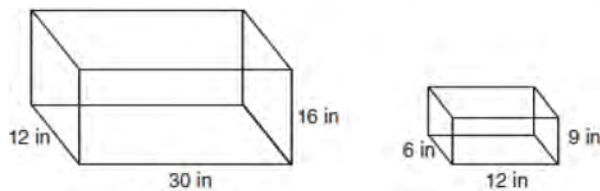
- 1) surveying 10 people who work in a sporting goods store
- 2) surveying the first 25 people who enter a grocery store
- 3) randomly surveying 50 people during the day in a mall
- 4) randomly surveying 75 people during the day in a clothing store

562 If the speed of sound is 344 meters per second, what is the approximate speed of sound, in meters per hour?

60 seconds = 1 minute
 60 minutes = 1 hour

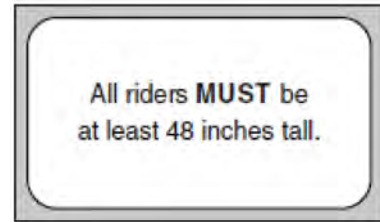
- 1) 20,640
- 2) 41,280
- 3) 123,840
- 4) 1,238,400

563 The diagram below represents Joe's two fish tanks.



Joe's larger tank is completely filled with water. He takes water from it to completely fill the small tank. Determine how many cubic inches of water will remain in the larger tank.

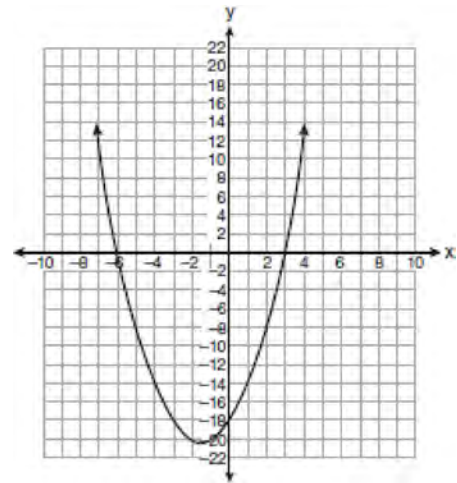
564 The sign shown below is posted in front of a roller coaster ride at the Wadsworth County Fairgrounds.



If h represents the height of a rider in inches, what is a correct translation of the statement on this sign?

- 1) $h < 48$
- 2) $h > 48$
- 3) $h \leq 48$
- 4) $h \geq 48$

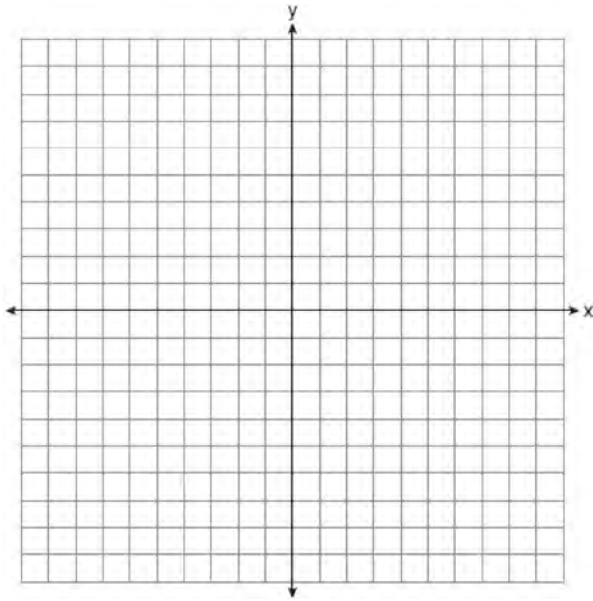
565 The equation $y = x^2 + 3x - 18$ is graphed on the set of axes below.



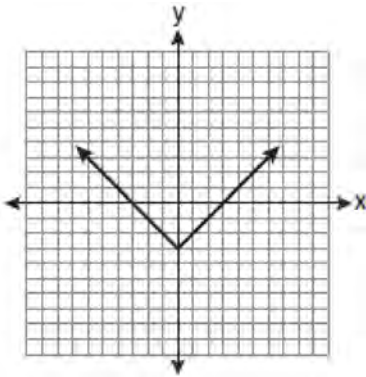
Based on this graph, what are the roots of the equation $x^2 + 3x - 18 = 0$?

- 1) -3 and 6
- 2) 0 and -18
- 3) 3 and -6
- 4) 3 and -18

566 On the set of axes below, draw the graph of $y = 2^x$ over the interval $-1 \leq x \leq 3$. Will this graph ever intersect the x -axis? Justify your answer.



567 Which equation is represented by the graph below?



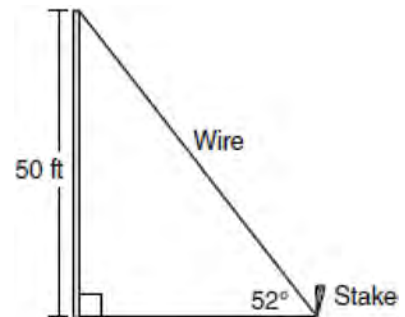
- 1) $y = x^2 - 3$
- 2) $y = (x - 3)^2$
- 3) $y = |x| - 3$
- 4) $y = |x - 3|$

- 568 The expression $x^2 - 16$ is equivalent to
- 1) $(x + 2)(x - 8)$
 - 2) $(x - 2)(x + 8)$
 - 3) $(x + 4)(x - 4)$
 - 4) $(x + 8)(x - 8)$

569 Simplify: $\frac{27k^5m^8}{(4k^3)(9m^2)}$

- 570 The solution to the equation $x^2 - 6x = 0$ is
- 1) 0, only
 - 2) 6, only
 - 3) 0 and 6
 - 4) $\pm\sqrt{6}$

571 A stake is to be driven into the ground away from the base of a 50-foot pole, as shown in the diagram below. A wire from the stake on the ground to the top of the pole is to be installed at an angle of elevation of 52° .



How far away from the base of the pole should the stake be driven in, to the *nearest foot*? What will be the length of the wire from the stake to the top of the pole, to the *nearest foot*?

- 572 Chad complained to his friend that he had five equations to solve for homework. Are all of the homework problems equations? Justify your answer.

Math Homework	
1.	$3x^2 \cdot 2x^4$
2.	$5 - 2x = 3x$
3.	$3(2x + 7)$
4.	$7x^2 + 2x - 3x^2 - 9$
5.	$\frac{2}{3} = \frac{x+2}{6}$
Name <u>Chad</u>	

- 573 Solve for g : $3 + 2g = 5g - 9$

- 574 The local ice cream stand offers three flavors of soft-serve ice cream: vanilla, chocolate, and strawberry; two types of cone: sugar and wafer; and three toppings: sprinkles, nuts, and cookie crumbs. If Dawn does not order vanilla ice cream, how many different choices can she make that have one flavor of ice cream, one type of cone, and one topping?
- 1) 7
 - 2) 8
 - 3) 12
 - 4) 18

- 575 Rhonda has \$1.35 in nickels and dimes in her pocket. If she has six more dimes than nickels, which equation can be used to determine x , the number of nickels she has?
- 1) $0.05(x + 6) + 0.10x = 1.35$
 - 2) $0.05x + 0.10(x + 6) = 1.35$
 - 3) $0.05 + 0.10(6x) = 1.35$
 - 4) $0.15(x + 6) = 1.35$

- 576 Which relation is *not* a function?
- 1) $\{(1,5), (2,6), (3,6), (4,7)\}$
 - 2) $\{(4,7), (2,1), (-3,6), (3,4)\}$
 - 3) $\{(-1,6), (1,3), (2,5), (1,7)\}$
 - 4) $\{(-1,2), (0,5), (5,0), (2,-1)\}$

- 577 What is $\sqrt{72}$ expressed in simplest radical form?
- 1) $2\sqrt{18}$
 - 2) $3\sqrt{8}$
 - 3) $6\sqrt{2}$
 - 4) $8\sqrt{3}$

- 578 What is $\frac{6}{4a} - \frac{2}{3a}$ expressed in simplest form?
- 1) $\frac{4}{a}$
 - 2) $\frac{5}{6a}$
 - 3) $\frac{8}{7a}$
 - 4) $\frac{10}{12a}$

- 579 Which situation describes a correlation that is *not* a causal relationship?
- 1) The rooster crows, and the Sun rises.
 - 2) The more miles driven, the more gasoline needed
 - 3) The more powerful the microwave, the faster the food cooks.
 - 4) The faster the pace of a runner, the quicker the runner finishes.

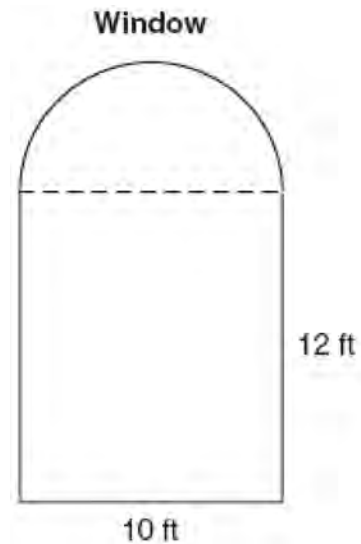
- 580 To calculate the volume of a small wooden cube, Ezra measured an edge of the cube as 2 cm. The actual length of the edge of Ezra's cube is 2.1 cm. What is the relative error in his volume calculation to the *nearest hundredth*?
- 1) 0.13
 - 2) 0.14
 - 3) 0.15
 - 4) 0.16

- 581 Sophie measured a piece of paper to be 21.7 cm by 28.5 cm. The piece of paper is actually 21.6 cm by 28.4 cm. Determine the number of square centimeters in the area of the piece of paper using Sophie's measurements. Determine the number of square centimeters in the actual area of the piece of paper. Determine the relative error in calculating the area. Express your answer as a decimal to the *nearest thousandth*. Sophie does not think there is a significant amount of error. Do you agree or disagree? Justify your answer.

- 582 The cost of 3 markers and 2 pencils is \$1.80. The cost of 4 markers and 6 pencils is \$2.90. What is the cost of *each* item? Include appropriate units in your answer.

583 Solve for x : $\frac{x+1}{x} = \frac{-7}{x-12}$

- 584 A window is made up of a single piece of glass in the shape of a semicircle and a rectangle, as shown in the diagram below. Tess is decorating for a party and wants to put a string of lights all the way around the outside edge of the window.

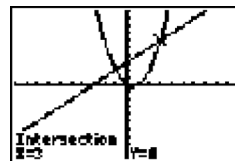


To the *nearest foot*, what is the length of the string of lights that Tess will need to decorate the window?

- 585 What is the additive inverse of the expression $a - b$?
- 1) $a + b$
 - 2) $a - b$
 - 3) $-a + b$
 - 4) $-a - b$

Integrated Algebra Regents at Random Answer Section

1 ANS: 2



$x^2 - x = x + 3$. Since $y = x + 3$, the solutions are (3,6) and (-1,2).

$$x^2 - 2x - 3 = 0$$

$$(x - 3)(x + 1) = 0$$

$$x = 3 \text{ or } -1$$

PTS: 2 REF: 061118ia STA: A.A.11 TOP: Quadratic-Linear Systems

2 ANS: 1

$$\sin x = \frac{\text{opposite}}{\text{hypotenuse}} = \frac{28}{53}$$

PTS: 2 REF: 011109ia STA: A.A.42 TOP: Trigonometric Ratios

3 ANS: 3

PTS: 2

REF: 081103ia

STA: A.A.30

TOP: Set Theory

4 ANS:

$$bc + ac = ab$$

$$c(b + a) = ab$$

$$c = \frac{ab}{b + a}$$

PTS: 2 REF: 081131ia STA: A.A.23 TOP: Transforming Formulas

5 ANS: 2

PTS: 2

REF: 061127ia

STA: A.N.4

TOP: Operations with Scientific Notation

6 ANS: 3

$$P(O) = \frac{5}{10}, P(P) = \frac{4}{10}, P(\leq 5) = \frac{6}{10}, P(3) = \frac{4}{10}$$

PTS: 2 REF: 081125ia STA: A.S.22 TOP: Theoretical Probability

7 ANS: 2

$$m = \frac{5 - 2}{3 - (-2)} = \frac{3}{5}$$

PTS: 2 REF: 061004ia STA: A.A.33 TOP: Slope

8 ANS:

$$3a^2b^2 - 6a \cdot \frac{45a^4b^3 - 90a^3b}{15a^2b} = \frac{45a^4b^3}{15a^2b} - \frac{90a^3b}{15a^2b} = 3a^2b^2 - 6a$$

PTS: 2 REF: 081031ia STA: A.A.14 TOP: Division of Polynomials

9 ANS: 4 PTS: 2 REF: 011111ia STA: A.G.8

TOP: Solving Quadratics by Graphing

10 ANS: 2 PTS: 2 REF: 081106ia STA: A.S.6

TOP: Box-and-Whisker Plots

11 ANS: 1

$$3(2m - 1) \leq 4m + 7$$

$$6m - 3 \leq 4m + 7$$

$$2m \leq 10$$

$$m \leq 5$$

PTS: 2 REF: 081002ia STA: A.A.24 TOP: Solving Inequalities

12 ANS: 1

$$4y - 2x = 0$$

$$4(-1) - 2(-2) = 0$$

$$-4 + 4 = 0$$

PTS: 2 REF: 011021ia STA: A.A.39 TOP: Identifying Points on a Line

13 ANS: 3

$$2(1) + 3 = 5$$

PTS: 2 REF: 061007ia STA: A.A.39 TOP: Linear Equations

14 ANS: 1 PTS: 2 REF: 011126ia STA: A.A.13

TOP: Addition and Subtraction of Polynomials KEY: subtraction

15 ANS: 3 PTS: 2 REF: 081017a STA: A.S.14

TOP: Analysis of Data

16 ANS:

$$\frac{600 - 592}{592} \approx 0.014$$

PTS: 2 REF: 061031ia STA: A.M.3 TOP: Error

KEY: volume and surface area

17 ANS:

$$2,160 \frac{1,200}{25} = \frac{x}{45}$$

$$25x = 54,000$$

$$x = 2,160$$

PTS: 2 REF: 081032ia STA: A.M.1 TOP: Using Rate

18 ANS: 4

$$A(-3,4) \text{ and } B(5,8). \quad m = \frac{4-8}{-3-5} = \frac{-4}{-8} = \frac{1}{2}$$

PTS: 2

REF: 011007ia

STA: A.A.33

TOP: Slope

19 ANS: 3

$$c + 3d = 8 \quad c = 4d - 6$$

$$4d - 6 + 3d = 8 \quad c = 4(2) - 6$$

$$7d = 14 \quad c = 2$$

$$d = 2$$

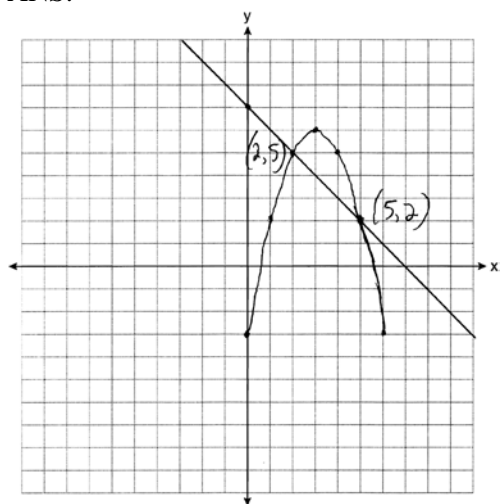
PTS: 2

REF: 061012ia

STA: A.A.10

TOP: Solving Linear Systems

20 ANS:



PTS: 4

REF: 081138ia

STA: A.G.9

TOP: Quadratic-Linear Systems

21 ANS: 4

$${}_8P_3 = 336$$

PTS: 2

REF: 061026ia

STA: A.N.8

TOP: Permutations

22 ANS:

$$\frac{1375}{1600} \cdot \frac{40^2 - 15^2}{40^2} = \frac{1375}{1600}$$

PTS: 2

REF: 011132ia

STA: A.S.20

TOP: Geometric Probability

23 ANS: 4

$$5(x+4) = 5x + 20$$

PTS: 2

REF: 081013ia

STA: A.A.1

TOP: Expressions

24 ANS: 4

$$\frac{2+3+0+1+3+2+4+0+2+3}{10} = \frac{20}{10} = 2 \quad \frac{x}{10} = 2 + 0.5$$

$$x = 25$$

PTS: 2

REF: 081020ia

STA: A.S.16

TOP: Average Known with Missing Data

25 ANS: 1

PTS: 2

REF: 061005ia

STA: A.G.10

TOP: Identifying the Vertex of a Quadratic Given Graph

26 ANS:

$$15,600,000, 4,368,000. \quad 10 \times 10 \times 10 \times 26 \times 25 \times 24 = 15,600,000. \quad 10 \times 9 \times 8 \times 26 \times 25 \times 24 = 11,232,000.$$

$$15,600,000 - 11,232,000 = 4,368,000.$$

PTS: 4

REF: 011037ia

STA: A.N.8

TOP: Permutations

27 ANS:

$$y = \frac{3}{4}x + 10. \quad y = mx + b$$

$$4 = \frac{3}{4}(-8) + b$$

$$4 = -6 + b$$

$$10 = b$$

PTS: 3

REF: 011134ia

STA: A.A.34

TOP: Writing Linear Equations

28 ANS: 1

PTS: 2

REF: 061010ia

STA: A.A.40

TOP: Systems of Linear Inequalities

29 ANS: 1

PTS: 2

REF: 011004ia

STA: A.A.31

TOP: Set Theory

30 ANS: 4

PTS: 2

REF: 061022ia

STA: A.S.3

TOP: Analysis of Data

31 ANS: 2

$$m = \frac{5-3}{8-1} = \frac{2}{7} \quad y - y_1 = m(x - x_1)$$

$$y - 5 = \frac{2}{7}(x - 8)$$

PTS: 2

REF: 081029ia

STA: A.A.35

TOP: Writing Linear Equations

32 ANS: 4

$$\frac{7}{12x} - \frac{y}{6x^2} = \frac{42x^2 - 12xy}{72x^3} = \frac{6x(7x - 2y)}{72x^3} = \frac{7x - 2y}{12x^2}$$

PTS: 2

REF: 061129ia

STA: A.A.17

TOP: Addition and Subtraction of Rationals

33 ANS: 3

$$75 - 15 = 60$$

PTS: 2

REF: 011113ia

STA: A.S.6

TOP: Box-and-Whisker Plots

34 ANS: 2

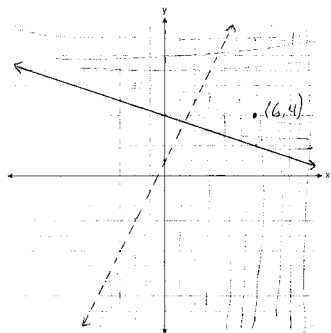
$$\frac{3}{2x} + \frac{7}{4x} = \frac{12x + 14x}{8x^2} = \frac{26x}{8x^2} = \frac{13}{4x}$$

PTS: 2 REF: 011120ia STA: A.A.17 TOP: Addition and Subtraction of Rationals

35 ANS: 4 PTS: 2 REF: 011020ia STA: A.A.12

TOP: Multiplication of Powers

36 ANS:



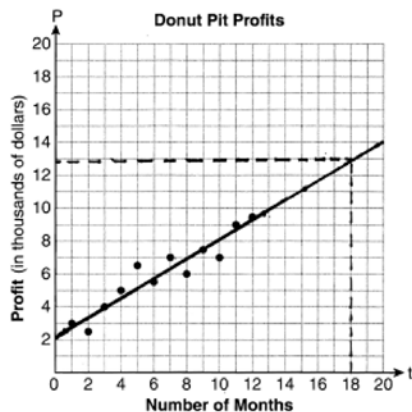
PTS: 4 REF: 081037ia STA: A.G.7 TOP: Systems of Linear Inequalities

37 ANS: 3

The age of a child does not cause the number of siblings he has, or vice versa.

PTS: 2 REF: 011030ia STA: A.S.14 TOP: Analysis of Data

38 ANS:



They will not reach their goal in 18 months.

PTS: 3 REF: 061036ia STA: A.S.17 TOP: Scatter Plots

39 ANS: 3

Frequency is not a variable.

PTS: 2 REF: 011014ia STA: A.S.2 TOP: Analysis of Data

40 ANS: 3

$$3\sqrt{250} = 3\sqrt{25}\sqrt{10} = 15\sqrt{10}$$

PTS: 2 REF: 061106ia STA: A.N.2 TOP: Simplifying Radicals

41 ANS: 2 PTS: 2 REF: 011119ia STA: A.A.29
TOP: Set Theory

42 ANS: 3

$$P(\text{odd}) = \frac{3}{6}, P(\text{prime}) = \frac{3}{6}, P(\text{perfect square}) = \frac{2}{6}, P(\text{even}) = \frac{3}{6}$$

PTS: 2 REF: 061104ia STA: A.S.22 TOP: Geometric Probability

43 ANS: 4 PTS: 2 REF: 061112ia STA: A.A.36
TOP: Parallel and Perpendicular Lines

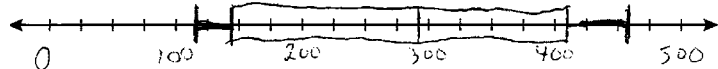
44 ANS: 2

$$A = lw + \frac{\pi r^2}{2} = 6 \cdot 5 + \frac{\pi \cdot 3^2}{2} \approx 44.1$$

PTS: 2 REF: 061029ia STA: A.G.1 TOP: Compositions of Polygons and Circles
KEY: area

45 ANS:

minimum is 120, 1st quartile is 145, median is 292, 3rd quartile is 407, and maximum is 452



PTS: 3 REF: 081034ia STA: A.S.5 TOP: Box-and-Whisker Plots

46 ANS: 3 PTS: 2 REF: 011117ia STA: A.G.4
TOP: Graphing Absolute Value Functions

47 ANS: 4

$$SA = 2lw + 2hw + 2lh = 2(2)(3) + 2(4)(3) + 2(2)(4) = 52$$

PTS: 2 REF: 011029ia STA: A.G.2 TOP: Surface Area

48 ANS: 1

$$\frac{x^2 - x - 6}{x^2 - 5x + 6} = \frac{(x-3)(x+2)}{(x-3)(x+2)} = \frac{x+2}{x-2}$$

PTS: 2 REF: 011130ia STA: A.A.16 TOP: Rational Expressions

KEY: $a > 0$

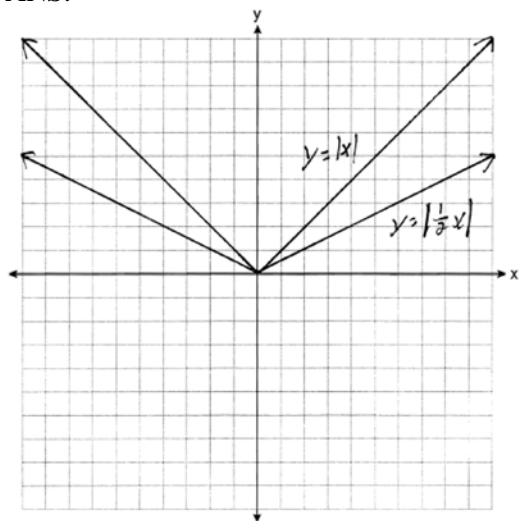
49 ANS: 4 PTS: 2 REF: 011025ia STA: A.A.17
TOP: Addition and Subtraction of Rationals

50 ANS: 4

$$5 \times 2 \times 3 = 30$$

PTS: 2 REF: 061002ia STA: A.N.7 TOP: Multiplication Counting Principle

51 ANS:



. Graph becomes wider as the coefficient approaches 0.

PTS: 3

REF: 061035ia

STA: A.G.5

TOP: Graphing Absolute Value Functions

52 ANS: 2

PTS: 2

REF: 061023ia

STA: A.A.23

TOP: Transforming Formulas

53 ANS: 3

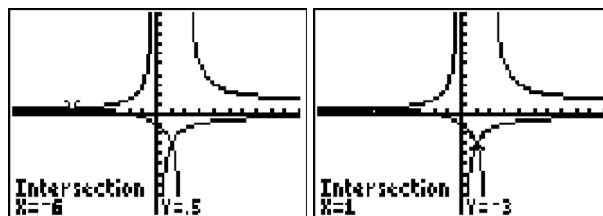
PTS: 2

REF: 081009ia

STA: A.A.30

TOP: Set Theory

54 ANS: 4



$$\frac{x+2}{x-2} = \frac{-3}{x}$$

$$x(x+2) = -3(x-2)$$

$$x^2 + 2x = -3x + 6$$

$$x^2 + 5x - 6 = 0$$

$$(x+6)(x-1) = 0$$

$$x = -6 \text{ or } 1$$

PTS: 2

REF: 011028ia

STA: A.A.26

TOP: Solving Rationals

55 ANS: 2

$$A(-3,8) \text{ and } B(3,6). \quad m = \frac{8-6}{-3-3} = \frac{2}{-6} = -\frac{1}{3}$$

PTS: 2

REF: 081005ia

STA: A.A.33

TOP: Slope

56 ANS: 4

PTS: 2

REF: 061013ia

STA: A.G.3

TOP: Defining Functions

57 ANS:

$$-2, 3. \quad x^2 - x = 6$$

$$x^2 - x - 6 = 0$$

$$(x - 3)(x + 2) = 0$$

$$x = 3 \text{ or } -2$$

PTS: 3

REF: 011034ia

STA: A.A.28

TOP: Roots of Quadratics

58 ANS: 2

PTS: 2

REF: 061128ia

STA: A.A.29

TOP: Set Theory

59 ANS: 4

$$6\sqrt{50} + 6\sqrt{2} = 6\sqrt{25 \cdot 2} \sqrt{2} + 6\sqrt{2} = 30\sqrt{2} + 6\sqrt{2} = 36\sqrt{2}$$

PTS: 2

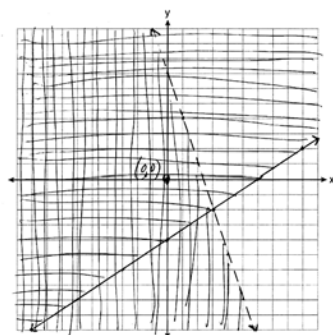
REF: 011024ia

STA: A.N.3

TOP: Operations with Radicals

KEY: addition

60 ANS:



PTS: 4

REF: 061139ia

STA: A.G.7

TOP: Systems of Linear Inequalities

61 ANS: 3

PTS: 2

REF: 081001ia

STA: A.S.7

TOP: Scatter Plots

62 ANS: 1

PTS: 2

REF: 081115ia

STA: A.A.32

TOP: Slope

63 ANS: 4

PTS: 2

REF: 061028ia

STA: A.G.6

TOP: Linear Inequalities

64 ANS:

$$-6a + 42. \text{ distributive}$$

PTS: 2

REF: 061032ia

STA: A.N.1

TOP: Properties of Reals

65 ANS:

$$24,435.19. \quad 30000(.95)^4 \approx 24435.19$$

PTS: 4

REF: 011138ia

STA: A.A.9

TOP: Exponential Functions

66 ANS:

$$80, 136 \quad V = lwh = 10 \cdot 2 \cdot 4 = 80 \quad SA = 2lw + 2hw + 2lh = 2 \cdot 10 \cdot 2 + 2 \cdot 4 \cdot 2 + 2 \cdot 10 \cdot 4 = 136$$

PTS: 3

REF: 081035ia

STA: A.G.2

TOP: Surface Area

67 ANS: 2 PTS: 2 REF: 081014ia STA: A.A.36
 TOP: Parallel and Perpendicular Lines

68 ANS: 4 PTS: 2 REF: 081011ia STA: A.A.5
 TOP: Modeling Equations

69 ANS:

$$\frac{4}{12} \times \frac{2}{11} \times \frac{1}{10} = \frac{8}{1320} \quad \frac{6}{12} \times \frac{5}{11} \times \frac{4}{10} + \frac{4}{12} \times \frac{3}{11} \times \frac{2}{10} = \frac{120}{1320} + \frac{24}{1320} = \frac{144}{1320}$$

PTS: 4 REF: 081137ia STA: A.S.23 TOP: Theoretical Probability
 KEY: dependent events

70 ANS:
 (T,J,F), (T,J,N), (T,K,F), (T,K,N), (T,C,F), (T,C,N), (B,J,F), (B,J,N), (B,K,F), (B,K,N), (B,C,F), (B,C,N), (S,J,F), (S,J,N), (S,K,F), (S,K,N), (S,C,F), (S,C,N). 3, 12.

PTS: 4 REF: 061138ia STA: A.S.19 TOP: Sample Space

71 ANS:

$$\sin x = \frac{30}{50}$$

$$x = \sin^{-1} \frac{3}{5}$$

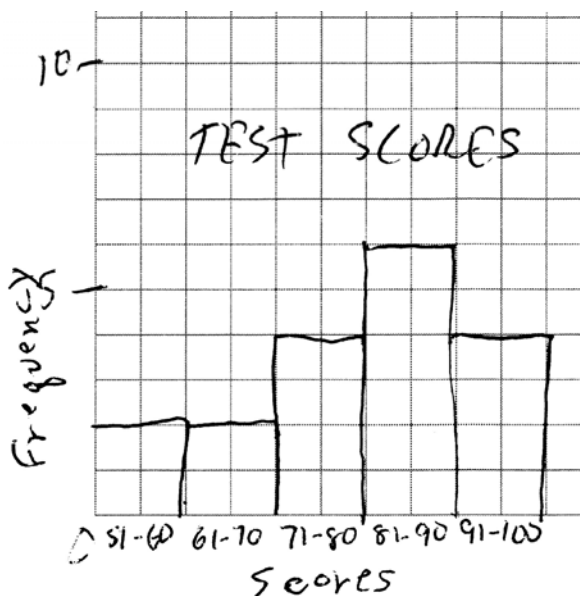
$$x \approx 37$$

PTS: 2 REF: 061033ia STA: A.A.43 TOP: Using Trigonometry to Find an Angle

72 ANS: 2 PTS: 2 REF: 061121ia STA: A.A.3
 TOP: Expressions

73 ANS:

Interval	Tally	Frequency
51-60		2
61-70		2
71-80		4
81-90		6
91-100		4



PTS: 3 REF: 011135ia STA: A.S.5
 TOP: Frequency Histograms, Bar Graphs and Tables

KEY: frequency histograms

74 ANS: 4 PTS: 2 REF: 061130ia STA: A.A.13
TOP: Addition and Subtraction of Polynomials KEY: subtraction

75 ANS:
Hat A, add 1 not green to Hat A, add 11 green to Hat B, and add none to Hat C.

PTS: 4 REF: 081038ia STA: A.S.22 TOP: Theoretical Probability

76 ANS: 2

$$\sin 57 = \frac{x}{8}$$

$$x \approx 6.7$$

PTS: 2 REF: 061108ia STA: A.A.44 TOP: Using Trigonometry to Find a Side

77 ANS: 1 PTS: 2 REF: 081102ia STA: A.S.12
TOP: Scatter Plots

78 ANS: 1

$$1P + 2C = 5$$

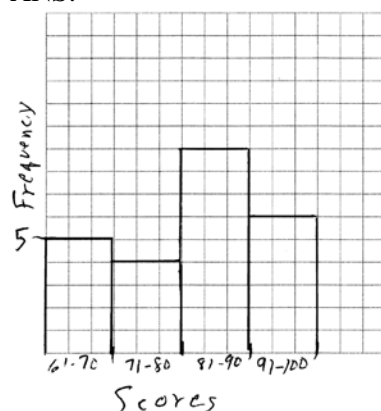
$$1P + 4C = 6$$

$$2C = 1$$

$$C = 0.5$$

PTS: 2 REF: 011003ia STA: A.A.7 TOP: Writing Linear Systems

79 ANS:



PTS: 2 REF: 081132ia STA: A.S.5

TOP: Frequency Histograms, Bar Graphs and Tables KEY: frequency histograms

80 ANS: 4 PTS: 2 REF: 061001ia STA: A.A.30
TOP: Set Theory

81 ANS: 1

$$2y - 2x = 10 \quad \text{axis of symmetry: } x = \frac{-b}{2a} = \frac{-2}{2(1)} = -1$$

$$2y = 2x + 10$$

$$y = x + 5$$

PTS: 2 REF: 081010ia STA: A.G.9 TOP: Quadratic-Linear Systems

82 ANS: 4

$$2x - 3y = 9$$

$$2(0) - 3(-3) = 9$$

$$0 + 9 = 9$$

PTS: 2

REF: 081016ia

STA: A.A.39

TOP: Identifying Points on a Line

83 ANS: 3

PTS: 2

REF: 081008ia

STA: A.A.19

TOP: Factoring the Difference of Perfect Squares

84 ANS: 2

$$2000(1 + 0.04)^3 \approx 2249$$

PTS: 2

REF: 081124ia

STA: A.A.9

TOP: Exponential Functions

85 ANS: 2

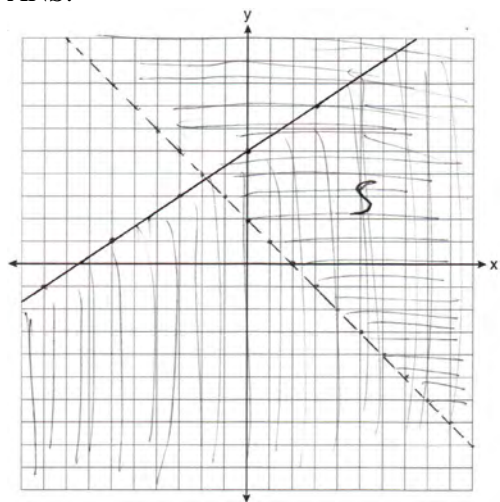
PTS: 2

REF: 061122ia

STA: A.S.14

TOP: Analysis of Data

86 ANS:



PTS: 4

REF: 011139ia

STA: A.G.7

TOP: Systems of Linear Inequalities

87 ANS: 2

$$2(x - 3y = -3)$$

$$2x + y = 8$$

$$2x - 6y = -6$$

$$7y = 14$$

$$y = 2$$

PTS: 2

REF: 081021ia

STA: A.A.10

TOP: Solving Linear Systems

88 ANS: 1

PTS: 2

REF: 081030ia

STA: A.A.3

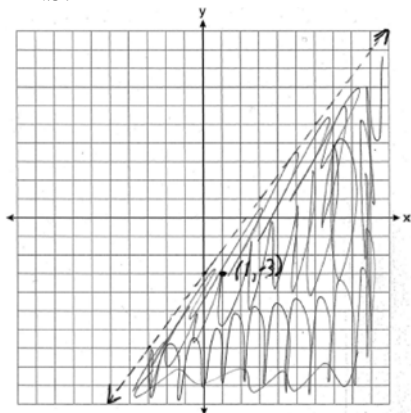
TOP: Expressions

89 ANS: 1

$$x = \frac{-b}{2a} = \frac{-6}{2(-1)} = 3.$$

PTS: 2 REF: 011127ia STA: A.A.41
TOP: Identifying the Vertex of a Quadratic Given Equation

90 ANS:



(1,-3) is in the solution set. $4(1) - 3(-3) > 9$
 $4 + 9 > 9$

PTS: 4 REF: 011038ia STA: A.G.6 TOP: Linear Inequalities

91 ANS: 1 PTS: 2 REF: 011101ia STA: A.A.31

TOP: Set Theory

92 ANS: 2

$$m = \frac{-A}{B} = \frac{-3}{-7} = \frac{3}{7}$$

PTS: 2 REF: 011122ia STA: A.A.37 TOP: Slope

93 ANS:

$$84, 71 \quad \sin 50 = \frac{x}{110} \quad \cos 50 = \frac{y}{110}$$

$$x \approx 84 \quad y \approx 71$$

PTS: 4 REF: 081039ia STA: A.A.44 TOP: Using Trigonometry to Find a Side

94 ANS:

$$53. \sin A = \frac{16}{20}$$

$$A \approx 53$$

PTS: 2 REF: 011032ia STA: A.A.43 TOP: Using Trigonometry to Find an Angle

95 ANS: 2

$y - kx = 7$ may be rewritten as $y = kx + 7$

PTS: 2 REF: 061015ia STA: A.A.38 TOP: Parallel and Perpendicular Lines

96 ANS: 2

$$A = lw + lw + \frac{\pi r^2}{4} = 5 \cdot 3 + 5 \cdot 3 + \frac{\pi \cdot 3^2}{4} \approx 37$$

PTS: 2 REF: 011123ia STA: A.G.1 TOP: Compositions of Polygons and Circles
KEY: area

97 ANS: 3

$$\text{mean} = 81 \frac{7}{11}, \text{median} = 81 \text{ and mode} = 76$$

PTS: 2 REF: 011118ia STA: A.S.4 TOP: Central Tendency

98 ANS: 4 PTS: 2 REF: 061016ia STA: A.A.2

TOP: Expressions

99 ANS: 2

$$\left| \frac{13.5 - 12.8}{13.5} \right| \approx 0.093$$

PTS: 2 REF: 081123ia STA: A.M.3 TOP: Error
KEY: area

100 ANS: 2

Candidate *B* received 45%. $45\% \times 1860 = 837$

PTS: 2 REF: 081007ia STA: A.N.5 TOP: Percents

101 ANS:

$$77120 + 33500 = 110620 \text{ sq. ft.} \times \frac{1 \text{ acre}}{43560 \text{ sq. ft.}} \approx 2.54 \text{ acres}$$

PTS: 2 REF: 081133ia STA: A.M.2 TOP: Conversions
KEY: dimensional analysis

102 ANS: 3

$$P(S) \cdot P(M) = P(S \text{ and } M)$$

$$\frac{3}{5} \cdot P(M) = \frac{3}{10}$$

$$P(M) = \frac{1}{2}$$

PTS: 2 REF: 081024ia STA: A.S.23 TOP: Theoretical Probability
KEY: independent events

103 ANS: 2 PTS: 2 REF: 011015ia STA: A.G.10

TOP: Identifying the Vertex of a Quadratic Given Graph

104 ANS:

$$-12. 3 \left(\frac{2}{3}x + 3 < -2x - 7 \right)$$

$$x + 9 < -6x - 21$$

$$7x < -30$$

$$x < \frac{-30}{7}$$

PTS: 3

REF: 061034ia

STA: A.A.21

TOP: Interpreting Solutions

105 ANS: 4

$$\frac{ey}{n} + k = t$$

$$\frac{ey}{n} = t - k$$

$$y = \frac{n(t-k)}{e}$$

PTS: 2

REF: 011125ia

STA: A.A.23

TOP: Transforming Formulas

106 ANS:

(1) Distributive; (2) Commutative

PTS: 2

REF: 061132ia

STA: A.N.1

TOP: Identifying Properties

107 ANS: 4

PTS: 2

REF: 011016ia

STA: A.A.23

TOP: Transforming Formulas

108 ANS:

$$4, -5. \quad \frac{x+2}{6} = \frac{3}{x-1}$$

$$(x+2)(x-1) = 18$$

$$x^2 - x + 2x - 2 = 18$$

$$x^2 + x - 20 = 0$$

$$(x+5)(x-4) = 0$$

$$x = -5 \text{ or } 4$$

PTS: 3

REF: 011136ia

STA: A.A.26

TOP: Solving Rationals

109 ANS: 3

$$\frac{3+2+4+3}{20} = \frac{12}{20}$$

PTS: 2

REF: 011129ia

STA: A.S.21

TOP: Experimental Probability

- 110 ANS: 4

$$\frac{150}{20} = \frac{x}{30}$$

$$20x = 4500$$

$$x = 225$$

 PTS: 2 REF: 081101ia STA: A.N.5 TOP: Direct Variation
- 111 ANS: 2
 Debbie failed to distribute the 3 properly.

 PTS: 2 REF: 011009ia STA: A.A.22 TOP: Solving Equations
- 112 ANS: 3

$$\frac{x}{3} + \frac{x+1}{2} = x$$

$$\frac{2x + 3(x+1)}{6} = x$$

$$5x + 3 = 6x$$

$$3 = x$$

 PTS: 2 REF: 061019ia STA: A.A.25
 TOP: Solving Equations with Fractional Expressions
- 113 ANS: 4 PTS: 2 REF: 081107ia STA: A.A.5
 TOP: Modeling Inequalities
- 114 ANS: 4
 The other situations are quantitative.

 PTS: 2 REF: 081122ia STA: A.S.1 TOP: Analysis of Data
- 115 ANS: 3

$${}_6P_4 = 360$$

 PTS: 2 REF: 081028ia STA: A.N.8 TOP: Permutations
- 116 ANS:
 81.3, 80, both increase

 PTS: 3 REF: 011035ia STA: A.S.16 TOP: Central Tendency
- 117 ANS:

$$-3\sqrt{48} = -3\sqrt{16}\sqrt{3} = -12\sqrt{3}$$

 PTS: 2 REF: 081033ia STA: A.N.2 TOP: Simplifying Radicals
- 118 ANS: 4
 The other sets of data are qualitative.

 PTS: 2 REF: 011116ia STA: A.S.1 TOP: Analysis of Data

119 ANS:

$$0.102. \frac{(5.3 \times 8.2 \times 4.1) - (5 \times 8 \times 4)}{5.3 \times 8.2 \times 4.1} = \frac{178.16 - 160}{178.16} = 0.102$$

PTS: 3 REF: 011036ia STA: A.M.3 TOP: Error
KEY: volume and surface area

120 ANS: 2 PTS: 2 REF: 061113ia STA: A.G.5
TOP: Graphing Quadratic Functions

121 ANS: 2

$$J - M = 3$$

$$8J + 8M = 120$$

$$8J - 8M = 24$$

$$16J = 144$$

$$J = 9$$

PTS: 2 REF: 011115ia STA: A.A.7 TOP: Writing Linear Systems

122 ANS: 3 PTS: 2 REF: 011017ia STA: A.G.5
TOP: Graphing Absolute Value Functions

123 ANS: 3 PTS: 2 REF: 061011ia STA: A.S.2
TOP: Analysis of Data

124 ANS: 2

$$a^3 - 4a = a(a^2 - 4) = a(a - 2)(a + 2)$$

PTS: 2 REF: 011108ia STA: A.A.19
TOP: Factoring the Difference of Perfect Squares

125 ANS: 2

In (2), each element in the domain corresponds to a unique element in the range.

PTS: 2 REF: 061116ia STA: A.G.3 TOP: Defining Functions

126 ANS:

$$5. 48 \text{ inches} \times \frac{1 \text{ yard}}{36 \text{ inches}} = \frac{4}{3} \text{ yards} \times \$3.75 = \$5.00$$

PTS: 2 REF: 011131ia STA: A.M.2 TOP: Conversions
KEY: dimensional analysis

127 ANS: 2

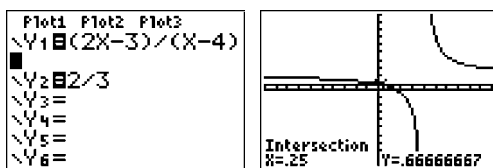
$$\frac{2x-3}{x-4} = \frac{2}{3}$$

$$3(2x-3) = 2(x-4)$$

$$6x-9 = 2x-8$$

$$4x = 1$$

$$x = \frac{1}{4}$$



PTS: 2 REF: 081012ia STA: A.A.26 TOP: Solving Rationals

128 ANS: 4

$$s = \frac{d}{t} = \frac{150 \text{ m}}{1.5 \text{ min}} \cdot \frac{60 \text{ min}}{1 \text{ hr}} = 6,000 \frac{\text{m}}{\text{hr}}$$

PTS: 2 REF: 061025ia STA: A.M.1 TOP: Speed

129 ANS: 2

$$\tan B = \frac{\text{opposite}}{\text{adjacent}} = \frac{8}{15} = 0.5\bar{3}$$

PTS: 2 REF: 081026ia STA: A.A.42 TOP: Trigonometric Ratios

130 ANS: 3

$$V = \pi r^2 h = \pi \cdot 5^2 \cdot 2.3 \approx 180.6$$

PTS: 2 REF: 081105ia STA: A.G.2 TOP: Volume

131 ANS: 1

Asking school district employees about a school board candidate produces the most bias.

PTS: 2 REF: 061107ia STA: A.S.3 TOP: Analysis of Data

132 ANS: 2

$$\tan ABC = \frac{\text{opposite}}{\text{adjacent}} = \frac{5}{12}$$

PTS: 2 REF: 081112ia STA: A.A.42 TOP: Trigonometric Ratios

133 ANS: 3

PTS: 2

TOP: Families of Functions

REF: 081118ia

STA: A.G.4

134 ANS: 3

PTS: 2 REF: 061003ia

STA: A.A.13

TOP: Addition and Subtraction of Polynomials

KEY: addition

135 ANS:

$$2(x+3)(x-4) + 2(5)(x-4) + 2(x+3)(5)$$

$$2(x^2 - 4x + 3x - 12) + 10(x-4) + 10(x+3)$$

$$2x^2 - 2x - 24 + 10x - 40 + 10x + 30$$

$$2x^2 + 18x - 34$$

PTS: 3 REF: 061136ia STA: A.G.2 TOP: Surface Area

136 ANS: 2

$$x^2 - 2x - 15 = 0$$

$$(x-5)(x+3) = 0$$

$$x = 5 \quad x = -3$$

PTS: 2 REF: 011128ia STA: A.A.28 TOP: Roots of Quadratics

137 ANS:

16. 12 feet equals 4 yards. $4 \times 4 = 16$.

PTS: 2 REF: 011031ia STA: A.M.2 TOP: Conversions

KEY: dimensional analysis

138 ANS: 2 PTS: 2 REF: 081003ia STA: A.A.31

TOP: Set Theory

139 ANS: 2

$$\sqrt{5^2 + 7^2} \approx 8.6$$

PTS: 2 REF: 081004ia STA: A.A.45 TOP: Pythagorean Theorem

140 ANS: 1 PTS: 2 REF: 081015ia STA: A.G.5

TOP: Graphing Quadratic Functions

141 ANS: 4 PTS: 2 REF: 081025ia STA: A.G.4

TOP: Families of Functions

142 ANS: 2 PTS: 2 REF: 061115ia STA: A.S.7

TOP: Scatter Plots

143 ANS:

$$\frac{x^2 - 5x - 24}{x - 8} = \frac{(x-8)(x+3)}{x-8} = x+3$$

PTS: 2 REF: 061131ia STA: A.A.16 TOP: Rational Expressions

KEY: $a > 0$

144 ANS: 3

$$\frac{12x^3 - 6x^2 + 2x}{2x} = \frac{2x(6x^2 - 3x + 1)}{2x} = 6x^2 - 3x + 1$$

PTS: 2 REF: 011011ia STA: A.A.14 TOP: Division of Polynomials

- 145 ANS:
12, 7. Both the median and the mode will increase.
- PTS: 3 REF: 061134ia STA: A.S.16 TOP: Central Tendency
- 146 ANS: 2
 $20000(.88)^3 = 13629.44$
- PTS: 2 REF: 061124ia STA: A.A.9 TOP: Exponential Functions
- 147 ANS: 2
 $\tan A = \frac{\text{opposite}}{\text{adjacent}} = \frac{14}{48}$
- PTS: 2 REF: 061009ia STA: A.A.42 TOP: Trigonometric Ratios
- 148 ANS: 3
 $x^2 - 9 = 0$
 $(x + 3)(x - 3) = 0$
 $x = \pm 3$
- PTS: 2 REF: 061014ia STA: A.A.15 TOP: Undefined Rationals
- 149 ANS: 1
 $x^2 - 36 = 5x$
 $x^2 - 5x - 36 = 0$
 $(x - 9)(x + 4) = 0$
 $x = 9$
- PTS: 2 REF: 061020ia STA: A.A.8 TOP: Writing Quadratics
- 150 ANS: 1 PTS: 2 REF: 011001ia STA: A.S.6
TOP: Box-and-Whisker Plots
- 151 ANS: 3
 $\frac{2+x}{5x} - \frac{x-2}{5x} = \frac{2+x-x+2}{5x} = \frac{4}{5x}$
- PTS: 2 REF: 081027ia STA: A.A.17 TOP: Addition and Subtraction of Rationals
- 152 ANS:
orchestra: $\frac{3}{26} > \frac{4}{36}$
- PTS: 2 REF: 011033ia STA: A.S.22 TOP: Theoretical Probability

153 ANS: 1
 $2(x - 4) = 4(2x + 1)$
 $2x - 8 = 8x + 4$
 $-12 = 6x$
 $-2 = x$

PTS: 2 REF: 011106ia STA: A.A.22 TOP: Solving Equations

154 ANS: 1
 $b = 2j + 4$ $2j + 4 = 31 - j$
 $b + j = 31$ $3j = 27$
 $b = 31 - j$ $j = 9$

PTS: 2 REF: 081119ia STA: A.A.7 TOP: Writing Linear Systems

155 ANS: 2 PTS: 2 REF: 011023ia STA: A.A.40
 TOP: Systems of Linear Inequalities

156 ANS: 1
 $y = mx + b$
 $5 = (-2)(1) + b$
 $b = 7$

PTS: 2 REF: 081108ia STA: A.A.34 TOP: Writing Linear Equations

157 ANS: 1 PTS: 2 REF: 061114ia STA: A.A.43
 TOP: Using Trigonometry to Find an Angle

158 ANS: 4
 In (4), each element in the domain corresponds to a unique element in the range.

PTS: 2 REF: 011105ia STA: A.G.3 TOP: Defining Functions

159 ANS: 4 PTS: 2 REF: 061111ia STA: A.G.4
 TOP: Families of Functions

160 ANS: 2
 $l(l - 3) = 40$
 $l^2 - 3l - 40 = 0$
 $(l - 8)(l + 5) = 0$
 $l = 8$

PTS: 2 REF: 081116ia STA: A.A.8 TOP: Geometric Applications of Quadratics

161 ANS: 3
 $x = \frac{-b}{2a} = \frac{-10}{2(-1)} = 5.$

PTS: 2 REF: 081018ia STA: A.A.41
 TOP: Identifying the Vertex of a Quadratic Given Equation

162 ANS: 1

The slope of $2x - 4y = 16$ is $\frac{-A}{B} = \frac{-2}{-4} = \frac{1}{2}$

PTS: 2 REF: 011026ia STA: A.A.38 TOP: Parallel and Perpendicular Lines

163 ANS: 2 PTS: 2 REF: 081111ia STA: A.G.10

TOP: Identifying the Vertex of a Quadratic Given Graph

164 ANS: 2 PTS: 2 REF: 011019ia STA: A.S.12

TOP: Scatter Plots

165 ANS: 1 PTS: 2 REF: 081110ia STA: A.A.1

TOP: Expressions

166 ANS: 2 PTS: 2 REF: 011002ia STA: A.S.20

TOP: Theoretical Probability

167 ANS: 1

$$f + m = 53$$

$$f - m = 25$$

$$2m = 28$$

$$m = 14$$

PTS: 2 REF: 061126ia STA: A.A.7 TOP: Writing Linear Systems

168 ANS:

$$0.65x + 35 \leq 45$$

$$0.65x \leq 10$$

$$x \leq 15$$

PTS: 3 REF: 061135ia STA: A.A.6 TOP: Modeling Inequalities

169 ANS:

$$2.1. \cos 65 = \frac{x}{5}$$

$$x \approx 2.1$$

PTS: 2 REF: 011133ia STA: A.A.44 TOP: Using Trigonometry to Find a Side

170 ANS: 4

$${}_5P_5 = 5 \times 4 \times 3 \times 2 \times 1 = 120$$

PTS: 2 REF: 061109ia STA: A.N.8 TOP: Permutations

171 ANS: 3

$$3\sqrt{2} + \sqrt{8} = 3\sqrt{2} + \sqrt{4}\sqrt{2} = 3\sqrt{2} + 2\sqrt{2} = 5\sqrt{2}$$

PTS: 2 REF: 011121ia STA: A.N.3 TOP: Operations with Radicals

KEY: addition

172 ANS: 3

$$\frac{(12.3 \times 11.9) - (12.2 \times 11.8)}{12.3 \times 11.9} \approx 0.0165$$

PTS: 2 REF: 061120ia STA: A.M.3 TOP: Error
KEY: area

173 ANS: 3

$$2x - 5y = 11 \quad 2x - 5(-1) = 11$$

$$-2x + 3y = -9 \quad 2x = 6$$

$$-2y = 2 \quad x = 3$$

$$y = -1$$

PTS: 2 REF: 081109ia STA: A.A.10 TOP: Solving Linear Systems

174 ANS: 4

TOP: Division of Powers

PTS: 2

REF: 061018ia

STA: A.A.12

175 ANS: 1

$$15000(1.2)^{\frac{6}{3}} = 21,600. \quad 21,600 - 15,000 = 6,600$$

PTS: 2 REF: 061030ia STA: A.A.9 TOP: Exponential Functions

176 ANS: 1

$$-3(-4)^2(2) + 4(-4) = -96 - 16 = -112$$

PTS: 2 REF: 081113ia STA: A.N.6 TOP: Evaluating Expressions

177 ANS:

6, 8, 10. Three consecutive even integers are x , $x + 2$ and $x + 4$. $(x + 2)(x + 4) = 10x + 20$

$$x^2 + 6x + 8 = 10x + 20$$

$$x^2 - 4x - 12 = 0$$

$$(x - 6)(x + 2) = 0$$

$$x = 6$$

PTS: 4 REF: 011039ia STA: A.A.8 TOP: Writing Quadratics

178 ANS: 4

$$\frac{9.2 \times 10^6}{2.3 \times 10^2} = 4 \times 10^4$$

PTS: 2 REF: 081006ia STA: A.N.4 TOP: Operations with Scientific Notation

179 ANS: 3

TOP: Expressions

PTS: 2

REF: 061119ia

STA: A.A.2

180 ANS: 1

$$\frac{12.8+17.2}{3+5} = 3.75$$

PTS: 2 REF: 061117ia STA: A.M.1 TOP: Speed

181 ANS: 2

$$\left| \frac{55.42 - 50.27}{55.42} \right| \approx 0.093$$

PTS: 2 REF: 081023ia STA: A.M.3 TOP: Error
 KEY: area

182 ANS: 3

$$\cos A = \frac{\text{adjacent}}{\text{hypotenuse}} = \frac{15}{17}$$

PTS: 2 REF: 011008ia STA: A.A.42 TOP: Trigonometric Ratios
 183 ANS: 2 PTS: 2 REF: 061027ia STA: A.A.20
 TOP: Factoring Polynomials

184 ANS: 4

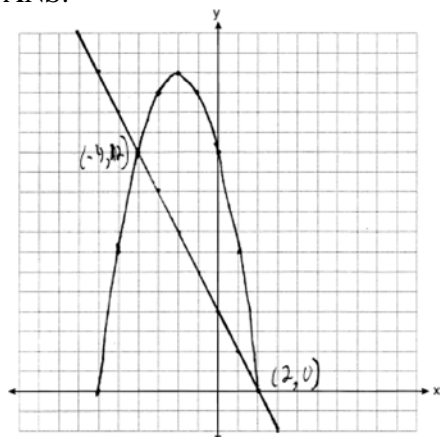
$$x^2 - 4x - 12 = 0$$

$$(x - 6)(x + 2) = 0$$

$$x = 6 \quad x = -2$$

PTS: 2 REF: 061125ia STA: A.A.15 TOP: Undefined Rationals

185 ANS:



PTS: 4 REF: 061039ia STA: A.G.9 TOP: Quadratic-Linear Systems

186 ANS:

$$-2\sqrt{3} \frac{16\sqrt{21}}{2\sqrt{7}} - 5\sqrt{12} = 8\sqrt{3} - 5\sqrt{4}\sqrt{3} = 8\sqrt{3} - 10\sqrt{3} = -2\sqrt{3}$$

PTS: 3 REF: 081136ia STA: A.N.3 TOP: Operations with Radicals

- 187 ANS: 4 PTS: 2 REF: 011102ia STA: A.G.9
TOP: Quadratic-Linear Systems
- 188 ANS: 3 PTS: 2 REF: 011104ia STA: A.A.1
TOP: Expressions
- 189 ANS: 2 PTS: 2 REF: 011027ia STA: A.A.3
TOP: Expressions
- 190 ANS:
 $x = 1; (1, -5)$
- PTS: 2 REF: 061133ia STA: A.G.10
TOP: Identifying the Vertex of a Quadratic Given Graph
- 191 ANS: 2 PTS: 2 REF: 011110ia STA: A.N.6
TOP: Evaluating Expressions
- 192 ANS: 2
 $R = 0.5^{d-1}$
- PTS: 2 REF: 011006ia STA: A.A.9 TOP: Exponential Functions
- 193 ANS:
$$\frac{x^2 + 9x + 14}{x^2 - 49} \div \frac{3x + 6}{x^2 + x - 56} = \frac{(x+7)(x+2)}{(x+7)(x-7)} \cdot \frac{(x+8)(x-7)}{3(x+2)} = \frac{x+8}{3}$$
- PTS: 4 REF: 061037ia STA: A.A.18 TOP: Multiplication and Division of Rationals
KEY: division
- 194 ANS:
41.8. $\sin x = \frac{8}{12}$
 $A \approx 41.8$
- PTS: 3 REF: 081135ia STA: A.A.43 TOP: Using Trigonometry to Find an Angle
- 195 ANS: 4 PTS: 2 REF: 081022ia STA: A.A.29
TOP: Set Theory
- 196 ANS: 3
$$\frac{(10w^3)^2}{5w} = \frac{100w^6}{5w} = 20w^5$$
- PTS: 2 REF: 011124ia STA: A.A.12 TOP: Powers of Powers
- 197 ANS: 4 PTS: 2 REF: 011114ia STA: A.N.1
TOP: Properties of Reals
- 198 ANS: 2 PTS: 2 REF: 011005ia STA: A.A.5
TOP: Modeling Inequalities

199 ANS: 2

$$\cos 38 = \frac{10}{x}$$

$$x = \frac{10}{\cos 38} \approx 12.69$$

PTS: 2

REF: 081126ia

STA: A.A.44

TOP: Using Trigonometry to Find a Side

200 ANS: 4

$$-3x(x-4) - 2x(x+3) = -3x^2 + 12x - 2x^2 - 6x = -5x^2 + 6x$$

PTS: 2

REF: 081114ia

STA: A.A.13

TOP: Addition and Subtraction of Monomials

201 ANS: 3

$$\sqrt{72} - 3\sqrt{2} = \sqrt{36}\sqrt{2} - 3\sqrt{2} = 6\sqrt{2} - 3\sqrt{2} = 3\sqrt{2}$$

PTS: 2

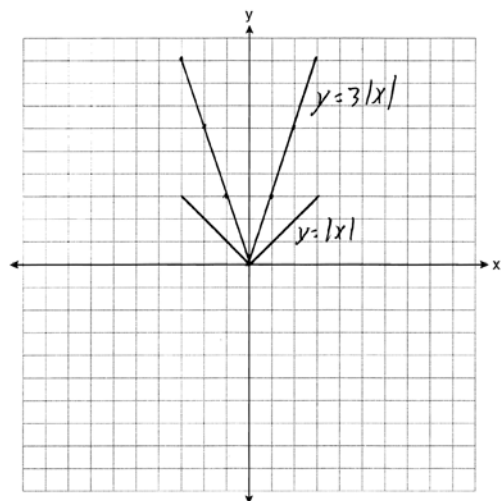
REF: 061008ia

STA: A.N.3

TOP: Operations with Radicals

KEY: subtraction

202 ANS:



The graph becomes steeper.

PTS: 3

REF: 081134ia

STA: A.G.5

TOP: Graphing Absolute Value Functions

203 ANS:

$$\frac{m}{5} + \frac{3(m-1)}{2} = 2(m-3)$$

$$\frac{2m}{10} + \frac{15(m-1)}{10} = 2m - 6$$

$$\frac{17m-15}{10} = 2m-6$$

$$17m-15 = 20m-60$$

$$45 = 3m$$

$$15 = m$$

PTS: 4 REF: 081139ia STA: A.A.25

TOP: Solving Equations with Fractional Expressions

204 ANS: 4 PTS: 2 REF: 061123ia STA: A.A.31

TOP: Set Theory

205 ANS:

$$-15, 2 \quad x^2 + 13x - 30 = 0$$

$$(x+15)(x-2) = 0$$

$$x = -15, 2$$

PTS: 3 REF: 081036ia STA: A.A.28 TOP: Roots of Quadratics

206 ANS: 2

$$36x^2 - 100y^6 = 4(9x^2 - 25y^6) = 4(3x + 5y^3)(3x - 5y^3)$$

PTS: 2 REF: 081129ia STA: A.A.19

TOP: Factoring the Difference of Perfect Squares

207 ANS: 2 PTS: 2 REF: 081127ia STA: A.A.40

TOP: Systems of Linear Inequalities

208 ANS:

$$0.029 \cdot \frac{[2\pi(5.1)^2 + 2\pi(5.1)(15.1)] - [2\pi(5)^2 + 2\pi(5)(15)]}{2\pi(5.1)^2 + 2\pi(5.1)(15.1)} \approx \frac{647.294 - 628.319}{647.294} \approx 0.029$$

PTS: 4 REF: 011137ia STA: A.M.3 TOP: Error

KEY: volume and surface area

209 ANS: 2 PTS: 2 REF: 011012ia STA: A.G.9

TOP: Quadratic-Linear Systems

210 ANS: 1

$$-|a-b| = -|7-(-3)| = -|-10| = -10$$

PTS: 2 REF: 011010ia STA: A.N.6 TOP: Evaluating Expressions

211 ANS:

$$-\frac{9}{4} \cdot \frac{3}{4} = \frac{-(x+11)}{4x} + \frac{1}{2x}$$

$$\frac{3}{4} = \frac{-x-11}{4x} + \frac{2}{4x}$$

$$\frac{3}{4} = \frac{-x-9}{4x}$$

$$12x = -4x - 36$$

$$16x = -36$$

$$x = -\frac{9}{4}$$

PTS: 4 REF: 061137ia STA: A.A.26 TOP: Solving Rationals

212 ANS: 3 PTS: 2 REF: 081117ia STA: A.A.29

TOP: Set Theory

213 ANS: 3

$$m = \frac{6-4}{3-(-2)} = \frac{2}{5}$$

PTS: 2 REF: 061110ia STA: A.A.33 TOP: Slope

214 ANS: 3 PTS: 2 REF: 061101ia STA: A.A.19

TOP: Factoring the Difference of Perfect Squares

215 ANS: 4

In (4), each element in the domain corresponds to a unique element in the range.

PTS: 2 REF: 011018ia STA: A.G.3 TOP: Defining Functions

216 ANS: 1 PTS: 2 REF: 061021ia STA: A.A.29

TOP: Set Theory

217 ANS: 1 PTS: 2 REF: 061103ia STA: A.A.12

TOP: Division of Powers

218 ANS: 3

$$10^2 + 10^2 = c^2$$

$$c^2 = 200$$

$$c \approx 14.1$$

PTS: 2 REF: 061102ia STA: A.A.45 TOP: Pythagorean Theorem

219 ANS: 2 PTS: 2 REF: 011022ia STA: A.A.19

TOP: Factoring the Difference of Perfect Squares

220 ANS: 4
 $-6x - 17 \geq 8x + 25$
 $-42 \geq 14x$
 $-3 \geq x$

PTS: 2 REF: 081121ia STA: A.A.24 TOP: Solving Inequalities

221 ANS: 1
 $7 + 8 + 7 + \frac{12\pi}{2} = 22 + 6\pi$

PTS: 2 REF: 081128ia STA: A.G.1 TOP: Compositions of Polygons and Circles
 KEY: perimeter

222 ANS: 1 PTS: 2 REF: 061024ia STA: A.A.17
 TOP: Addition and Subtraction of Rationals

223 ANS: 4
 $\frac{x}{x+4} \div \frac{2x}{x^2-16} = \frac{x}{x+4} \cdot \frac{x^2-16}{2x} = \frac{1}{x+4} \cdot \frac{(x+4)(x-4)}{2} = \frac{x-4}{2}$

PTS: 2 REF: 081130ia STA: A.A.18 TOP: Multiplication and Division of Rationals
 KEY: division

224 ANS: 3 PTS: 2 REF: 061017ia STA: A.S.11
 TOP: Quartiles and Percentiles

225 ANS: 2 PTS: 2 REF: 081104ia STA: A.S.14
 TOP: Analysis of Data

226 ANS: 1
 $\frac{2x}{3} + \frac{1}{2} = \frac{5}{6}$

$$\frac{2x}{3} = \frac{1}{3}$$

$$6x = 3$$

$$x = \frac{1}{2}$$

PTS: 2 REF: 011112ia STA: A.A.25
 TOP: Solving Equations with Fractional Expressions

227 ANS: 2

shaded = whole – unshaded

= rectangle-triangle

$$= lw - \frac{1}{2}bh$$

$$= 15 \times 6 - \frac{1}{2} \times 15 \times 4.6$$

$$= 90 - 34.5$$

$$= 55.5$$

PTS: 2

REF: 081019ia

STA: A.G.1

TOP: Compositions of Polygons and Circles

KEY: area

228 ANS: 3

$$m = \frac{7-3}{-3-3} = \frac{4}{-6} = -\frac{2}{3} \quad y = mx + b$$

$$3 = -\frac{2}{3}(3) + b$$

$$3 = -2 + b$$

$$5 = b$$

PTS: 2

REF: 011013ia

STA: A.A.35

TOP: Writing Linear Equations

229 ANS: 2

$$\sqrt{18.4^2 - 7^2} \approx 17$$

PTS: 2

REF: 011107ia

STA: A.A.45

TOP: Pythagorean Theorem

230 ANS: 3

PTS: 2

REF: 011103ia

STA: A.S.12

TOP: Scatter Plots

231 ANS:

30, 20, 71-80, 81-90 and 91-100

PTS: 4

REF: 061038ia

STA: A.S.9

TOP: Frequency Histograms, Bar Graphs and Tables

232 ANS: 2

$$x^2 - 5x + 6 = 0$$

$$(x-3)(x-2) = 0$$

$$x = 3 \quad x = 2$$

PTS: 2

REF: 081120ia

STA: A.A.28

TOP: Roots of Quadratics

233 ANS: 2

PTS: 2

REF: 061105ia

STA: A.A.20

TOP: Factoring Polynomials

Integrated Algebra Regents at Random Answer Section

234 ANS: 4

$$8900 \text{ ft} \times \frac{1 \text{ mi}}{5280 \text{ ft}} \approx 1.7 \text{ mi}$$

PTS: 2 REF: 081210ia STA: A.M.2 TOP: Conversions
KEY: dimensional analysis

235 ANS:

$$6.56 \times 10^{-2}$$

PTS: 2 REF: 081231ia STA: A.N.4 TOP: Operations with Scientific Notation

236 ANS: 4

The transformation is a reflection in the x -axis.

PTS: 2 REF: 011206ia STA: A.G.5 TOP: Graphing Absolute Value Functions

237 ANS: 4

$$3x^3 - 33x^2 + 90x = 3x(x^2 - 11x + 30) = 3x(x - 5)(x - 6)$$

PTS: 2 REF: 061227ia STA: A.A.20 TOP: Factoring Polynomials

238 ANS: 4

PTS: 2 REF: 061226ia STA: A.A.13
TOP: Addition and Subtraction of Polynomials KEY: subtraction

239 ANS: 3

PTS: 2 REF: 061217ia STA: A.A.29
TOP: Set Theory

240 ANS:

$$147.75 \quad 2 \times 5.5 \times 3 + 2 \times 6.75 \times 3 + 2 \times 5.5 \times 6.75 = 147.75$$

PTS: 2 REF: 011231ia STA: A.G.2 TOP: Surface Area

241 ANS: 4

$$2(2) - (-7) = 11$$

PTS: 2 REF: 081217ia STA: A.A.39 TOP: Identifying Points on a Line

242 ANS: 3

PTS: 2 REF: 061208ia STA: A.A.31
TOP: Set Theory

243 ANS: 2

$$W + L = 72$$

$$W - L = 12$$

$$2W = 84$$

$$W = 42$$

PTS: 2 REF: 081227ia STA: A.A.7 TOP: Writing Linear Systems

244 ANS: 2

People at a gym or football game and members of a soccer team are more biased towards sports.

PTS: 2 REF: 061202ia STA: A.S.3 TOP: Analysis of Data

245 ANS:

$$7, 9, 11. \quad x + (x + 2) + (x + 4) = 5(x + 2) - 18$$

$$3x + 6 = 5x - 8$$

$$14 = 2x$$

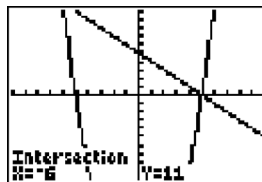
$$7 = x$$

PTS: 4 REF: 011237ia STA: A.A.6 TOP: Modeling Equations

246 ANS: 4 PTS: 2 REF: 081214ia STA: A.G.10

TOP: Identifying the Vertex of a Quadratic Given Graph

247 ANS: 2



$$y = -x + 5. \quad -x + 5 = x^2 - 25 \quad . \quad y = -(-6) + 5 = 11.$$

$$0 = x^2 + x - 30 \quad y = -5 + 5 = 0$$

$$0 = (x + 6)(x - 5)$$

$$x = -6, 5$$

PTS: 2 REF: 061213ia STA: A.A.11 TOP: Quadratic-Linear Systems

248 ANS:

$$\frac{x+2}{2} \times \frac{4(x+5)}{(x+4)(x+2)} = \frac{2(x+5)}{x+4}$$

PTS: 2 REF: 081232ia STA: A.A.18 TOP: Multiplication and Division of Rationals

KEY: multiplication

249 ANS:

$$\text{The turtle won by .5 minutes. Turtle: } \frac{d}{s} = \frac{100}{20} = 5. \quad \text{Rabbit: } \frac{d}{s} = \frac{100}{40} = 2.5 + 3 = 5.5$$

PTS: 3 REF: 011236ia STA: A.M.1 TOP: Speed

250 ANS:

(W,H,A), (W,H,S), (W,T,A), (W,T,S), (W,B,A), (W,B,S), (R,H,A), (R,H,S), (R,T,A), (R,T,S), (R,B,A), (R,B,S).
8, 3

PTS: 4 REF: 011238ia STA: A.S.19 TOP: Sample Space

251 ANS: 3

$$\frac{2}{x+1} = \frac{x+1}{2}$$

$$x^2 + 2x + 1 = 4$$

$$x^2 + 2x - 3 = 0$$

$$(x+3)(x-1) = 3$$

$$x = -3, 1$$

PTS: 2

REF: 081226ia

STA: A.A.26

TOP: Solving Rationals

252 ANS:

(C,B,T), (C,B,5), (C,N,T), (C,N,5), (C,2,T), (C,2,5), (F,B,T), (F,B,5), (F,N,T), (F,N,5), (F,2,T), (F,2,5). 1, 2.

PTS: 4

REF: 081237ia

STA: A.S.19

TOP: Sample Space

253 ANS: 2

PTS: 2

REF: 011212ia

STA: A.S.23

TOP: Theoretical Probability

KEY: independent events

254 ANS: 3

$$5x < 55$$

$$x < 11$$

PTS: 2

REF: 061211ia

STA: A.A.6

TOP: Modeling Inequalities

255 ANS: 4

$$\frac{95000}{125000} = .76$$

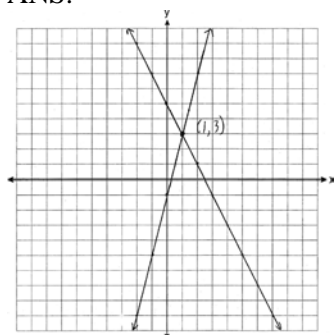
PTS: 2

REF: 061207ia

STA: A.S.11

TOP: Quartiles and Percentiles

256 ANS:



PTS: 3

REF: 011235ia

STA: A.G.7

TOP: Solving Linear Systems

257 ANS: 2

PTS: 2

REF: 081205ia

STA: A.A.13

TOP: Addition and Subtraction of Polynomials

KEY: addition

258 ANS: 1

$$x = \frac{-b}{2a} = \frac{-(-3)}{2(2)} = \frac{3}{4}$$

PTS: 2 REF: 011219ia STA: A.A.41
TOP: Identifying the Vertex of a Quadratic Given Equation

259 ANS:

$$54, 23. \cos A = \frac{17}{29} \cdot \sqrt{29^2 - 17^2} \approx 23$$

$$x \approx 54$$

PTS: 4 REF: 081238ia STA: A.A.43 TOP: Using Trigonometry to Find an Angle

260 ANS: 3

$$(3x+2)(x-7) = 3x^2 - 21x + 2x - 14 = 3x^2 - 19x - 14$$

PTS: 2 REF: 061210ia STA: A.A.13 TOP: Multiplication of Polynomials

261 ANS:

$$(-3, -5), (3, 7). x^2 + 2x - 8 = 2x + 1. y = 2(3) + 1 = 7$$

$$x^2 - 9 = 0 \quad y = 2(-3) + 1 = -5$$

$$x = \pm 3$$

PTS: 3 REF: 081236ia STA: A.A.11 TOP: Quadratic-Linear Systems

262 ANS: 2

TOP: Scatter Plots

PTS: 2

REF: 061205ia

STA: A.S.12

263 ANS:

$26 \times 25 \times 24 \times 23 = 358,800$. $10^6 = 1,000,000$. Use the numeric password since there are over 500,000 employees

PTS: 4 REF: 061239ia STA: A.N.8 TOP: Permutations

264 ANS: 1

TOP: Quadratic-Linear Systems

PTS: 2

REF: 011207ia

STA: A.G.9

265 ANS: 3

$$\tan PLM = \frac{\text{opposite}}{\text{adjacent}} = \frac{4}{3}$$

PTS: 2 REF: 011226ia STA: A.A.42 TOP: Trigonometric Ratios

266 ANS: 2

The other sets of data are qualitative.

PTS: 2 REF: 011211ia STA: A.S.1 TOP: Analysis of Data

267 ANS: 3

TOP: Box-and-Whisker Plots

PTS: 2

REF: 011220ia

STA: A.S.6

268 ANS:

$$\frac{x-1}{x+2} \cdot \frac{x^2-1}{x^2+3x+2} = \frac{(x+1)(x-1)}{(x+2)(x+1)}$$

PTS: 2 REF: 011233ia STA: A.A.16 TOP: Rational Expressions

KEY: $a > 0$

269 ANS: 4 PTS: 2 REF: 061222ia STA: A.A.40

TOP: Systems of Linear Inequalities

270 ANS: 4 PTS: 2 REF: 011225ia STA: A.A.31

TOP: Set Theory

271 ANS: 4 PTS: 2 REF: 011229ia STA: A.S.8

TOP: Scatter Plots

272 ANS: 3 PTS: 2 REF: 011224ia STA: A.N.1

TOP: Properties of Reals

273 ANS: 1

$$x^2 + 5x - 6 = 0$$

$$(x+6)(x-1) = 0$$

$$x = -6, 1$$

PTS: 2 REF: 011214ia STA: A.A.15 TOP: Undefined Rationals

274 ANS: 1 PTS: 2 REF: 061204ia STA: A.A.1

TOP: Expressions

275 ANS: 3 PTS: 2 REF: 081207ia STA: A.A.19

TOP: Factoring the Difference of Perfect Squares

276 ANS: 4 PTS: 2 REF: 061203ia STA: A.A.14

TOP: Division of Polynomials

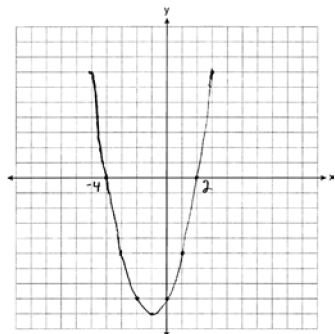
277 ANS:

2. Subtracting the equations: $3y = 6$

$$y = 2$$

PTS: 2 REF: 061231ia STA: A.A.10 TOP: Solving Linear Systems

278 ANS:



PTS: 3 REF: 061234ia STA: A.G.8 TOP: Solving Quadratics by Graphing

279 ANS: 3

$$\frac{3^6}{3^1} = 3^5$$

PTS: 2 REF: 061219ia STA: A.A.12 TOP: Division of Powers

280 ANS: 3 PTS: 2 REF: 061225ia STA: A.A.5
TOP: Modeling Equations281 ANS: 3 PTS: 2 REF: 011204ia STA: A.G.3
TOP: Defining Functions

282 ANS: 1

$$\frac{\text{distance}}{\text{time}} = \frac{350.7}{4.2} = 83.5$$

PTS: 2 REF: 061201ia STA: A.M.1 TOP: Speed

283 ANS: 1

$$s = \frac{2x + t}{r}$$

$$rs = 2x + t$$

$$rs - t = 2x$$

$$\frac{rs - t}{2} = x$$

PTS: 2 REF: 011228ia STA: A.A.23 TOP: Transforming Formulas

284 ANS: 2

$$\left| \frac{(2.6 \times 6.9) - (2.5 \times 6.8)}{(2.6 \times 6.9)} \right| \approx 0.052$$

PTS: 2 REF: 011209ia STA: A.M.3 TOP: Error
KEY: area

285 ANS: 4

$$\frac{2x^2(x^4 - 9x^2 + 1)}{2x^2}$$

PTS: 2 REF: 081222ia STA: A.A.16 TOP: Rational Expressions
KEY: $a > 0$ 286 ANS: 2 PTS: 2 REF: 081212ia STA: A.A.5
TOP: Modeling Inequalities

287 ANS: 1

$$\frac{3}{4} \times 5 = \frac{15}{4} \text{ teaspoons} \times \frac{1 \text{ tablespoon}}{3 \text{ teaspoons}} = \frac{5}{4} = 1 \frac{1}{4} \text{ tablespoon}$$

PTS: 2 REF: 061228ia STA: A.M.2 TOP: Conversions
KEY: dimensional analysis

288 ANS: 4

$$V = \pi r^2 h$$

$$32\pi = \pi r^2 (2)$$

$$16 = r^2$$

$$4 = r$$

PTS: 2 REF: 081224ia STA: A.G.2 TOP: Volume

289 ANS: 2

$$\frac{2y}{y+5} + \frac{10}{y+5} = \frac{2y+10}{y+5} = \frac{2(y+5)}{y+5} = 2$$

PTS: 2 REF: 011230ia STA: A.A.17 TOP: Addition and Subtraction of Rationals

290 ANS: 1

$$\left| \frac{4(-6) + 18}{4!} \right| = \left| \frac{-6}{24} \right| = \frac{1}{4}$$

PTS: 2 REF: 081220ia STA: A.N.6 TOP: Evaluating Expressions

291 ANS: 3

TOP: Scatter Plots

PTS: 2

REF: 081208ia

STA: A.S.17

292 ANS:

$$\frac{8100 - 7678.5}{7678.5} \approx 0.055$$

PTS: 2 REF: 061233ia STA: A.M.3 TOP: Error

KEY: area

293 ANS: 2

TOP: Slope

PTS: 2

REF: 081223ia

STA: A.A.32

294 ANS: 3

TOP: Analysis of Data

PTS: 2

REF: 061206ia

STA: A.S.2

295 ANS:

$$2(x-4) \geq \frac{1}{2}(5-3x)$$

$$4(x-4) \geq 5-3x$$

$$4x-16 \geq 5-3x$$

$$7x \geq 21$$

$$x \geq 3$$

PTS: 3 REF: 011234ia STA: A.A.24 TOP: Solving Inequalities

296 ANS: 2

TOP: Expressions

PTS: 2

REF: 081215ia

STA: A.A.1

297 ANS: 2

TOP: Graphing Quadratic Functions

PTS: 2

REF: 081218ia

STA: A.G.5

298 ANS: 1

If the area of the square is 36, a side is 6, the diameter of the circle is 6, and its radius is 3. $A = \pi r^2 = 3^2 \pi = 9\pi$

PTS: 2 REF: 011217ia STA: A.G.1 TOP: Compositions of Polygons and Circles
KEY: area

299 ANS: 4 PTS: 2 REF: 011222ia STA: A.A.29

TOP: Set Theory

300 ANS:

4. $3(x+1) - 5x = 12 - (6x - 7)$

$$3x + 3 - 5x = 12 - 6x + 7$$

$$-2x + 3 = -6x + 19$$

$$4x = 16$$

$$x = 4$$

PTS: 4 REF: 061238ia STA: A.A.22 TOP: Solving Equations

301 ANS: 4

$$3y + 2x = 8$$

$$3(-2) + 2(7) = 8$$

$$-6 + 14 = 8$$

PTS: 2 REF: 011218ia STA: A.A.39 TOP: Identifying Points on a Line

302 ANS:

$$259.99 \times 1.07 - 259.99(1 - 0.3) \times 1.07 = 83.46$$

PTS: 4 REF: 011239ia STA: A.N.5 TOP: Percents

303 ANS: 1

$$k = am + 3mx$$

$$k = m(a + 3x)$$

$$\frac{k}{a + 3x} = m$$

PTS: 2 REF: 061215ia STA: A.A.23 TOP: Transforming Formulas

304 ANS: 4

$$m = \frac{-A}{B} = \frac{-(-3)}{2} = \frac{3}{2}$$

PTS: 2 REF: 061212ia STA: A.A.37 TOP: Slope

305 ANS: 3

$$\frac{15}{15 + 13 + 12} = \frac{15}{40} = \frac{3}{8}$$

PTS: 2 REF: 061006ia STA: A.S.21 TOP: Experimental Probability

306 ANS: 3

$$x = \frac{-b}{2a} = \frac{-24}{2(-2)} = 6. \quad y = -2(6)^2 + 24(6) - 100 = -28$$

PTS: 2 REF: 061214ia STA: A.A.41
TOP: Identifying the Vertex of a Quadratic Given Equation

307 ANS: 3 PTS: 2 REF: 081211ia STA: A.A.9

TOP: Exponential Functions

308 ANS:

White. There are 31 white blocks, 30 red blocks and 29 blue blocks.

PTS: 2 REF: 061232ia STA: A.S.22 TOP: Theoretical Probability

309 ANS: 3

$$A \cup C = \{1, 2, 3, 5, 7, 9\}$$

PTS: 2 REF: 081221ia STA: A.A.31 TOP: Set Theory

310 ANS: 3

$$b = 3 + d \quad (3 + d)d = 40$$

$$bd = 40 \quad d^2 + 3d - 40 = 0$$

$$(d + 8)(d - 5) = 0$$

$$d = 5$$

PTS: 2 REF: 011208ia STA: A.A.8 TOP: Writing Quadratics

311 ANS: 4

$$SA = 2lw + 2hw + 2lh = 2(3)(2.2) + 2(7.5)(2.2) + 2(3)(7.5) = 91.2$$

PTS: 2 REF: 081216ia STA: A.G.2 TOP: Surface Area

312 ANS: 1

$$4 + 6 + 10 + \frac{6\pi}{2} = 20 + 3\pi$$

PTS: 2 REF: 081228ia STA: A.G.1 TOP: Compositions of Polygons and Circles

KEY: perimeter

313 ANS:

$$\frac{(5.9 \times 10.3 \times 1.7) - (6 \times 10 \times 1.5)}{5.9 \times 10.3 \times 1.7} \approx 0.129$$

PTS: 3 REF: 081235ia STA: A.M.3 TOP: Error

KEY: volume and surface area

314 ANS: 4

$$m = \frac{-3 - 1}{2 - 5} = \frac{-4}{-3} = \frac{4}{3}$$

PTS: 2 REF: 011215ia STA: A.A.33 TOP: Slope

315 ANS: 4 PTS: 2 REF: 061221ia STA: A.G.4

TOP: Identifying the Equation of a Graph

316 ANS: 1 PTS: 2 REF: 011213ia STA: A.A.13
TOP: Addition and Subtraction of Polynomials KEY: addition

317 ANS: 1 PTS: 2 REF: 081204ia STA: A.S.12
TOP: Scatter Plots

318 ANS: 2
 $13^2 + 13^2 = x^2$

$$338 = x^2$$

$$\sqrt{338} = x$$

$$18 \approx x$$

PTS: 2 REF: 061223ia STA: A.A.45 TOP: Pythagorean Theorem

319 ANS:
78. $\cos x = \frac{6}{28}$

$$x \approx 78$$

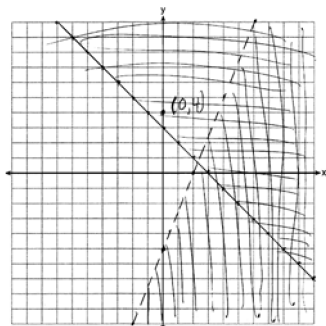
PTS: 3 REF: 061235ia STA: A.A.43 TOP: Using Trigonometry to Find an Angle

320 ANS:
 $6\sqrt{3} \frac{3\sqrt{75} + \sqrt{27}}{3} = \frac{3\sqrt{25}\sqrt{3} + \sqrt{9}\sqrt{3}}{3} = \frac{15\sqrt{3} + 3\sqrt{3}}{3} = \frac{18\sqrt{3}}{3} = 6\sqrt{3}$

PTS: 3 REF: 061236ia STA: A.N.3 TOP: Operations with Radicals

321 ANS: 2 PTS: 2 REF: 011227ia STA: A.A.3
TOP: Expressions

322 ANS:



PTS: 4 REF: 081239ia STA: A.G.7 TOP: Systems of Linear Inequalities

323 ANS: 3 PTS: 2 REF: 061230ia STA: A.S.9
TOP: Frequency Histograms, Bar Graphs and Tables

324 ANS: 3
 $2\sqrt{45} = 2\sqrt{9}\sqrt{5} = 6\sqrt{5}$

PTS: 2 REF: 011203ia STA: A.N.2 TOP: Simplifying Radicals

325 ANS: 2 PTS: 2 REF: 011201ia STA: A.A.19
TOP: Factoring the Difference of Perfect Squares

- 326 ANS: 3 PTS: 2 REF: 081201ia STA: A.G.7
TOP: Solving Linear Systems
- 327 ANS: 2 PTS: 2 REF: 061229ia STA: A.A.9
TOP: Exponential Functions
- 328 ANS: 3
 $x^2 - 4 = 0$
 $(x + 2)(x - 2) = 0$
 $x = \pm 2$
- PTS: 2 REF: 081225ia STA: A.A.15 TOP: Undefined Rationals
- 329 ANS: 1 PTS: 2 REF: 011202ia STA: A.A.9
TOP: Exponential Functions
- 330 ANS: 3 PTS: 2 REF: 061218ia STA: A.S.20
TOP: Geometric Probability
- 331 ANS: 1 PTS: 2 REF: 061209ia STA: A.G.3
TOP: Defining Functions
- 332 ANS: 1 PTS: 2 REF: 011210ia STA: A.G.6
TOP: Linear Inequalities
- 333 ANS: 3 PTS: 2 REF: 081230ia STA: A.A.23
TOP: Transforming Formulas
- 334 ANS:
Carol's, by 14.9. $V_M = 5 \times 3.5 \times 7 = 122.5$. $V_C = \pi \times 2.5^2 \times 7 \approx 137.4$. $137.4 - 122.5 = 14.9$
- PTS: 4 REF: 061237ia STA: A.G.2 TOP: Volume
- 335 ANS: 3
 $y = mx + b$ $y = \frac{3}{4}x - \frac{1}{2}$
 $1 = \left(\frac{3}{4}\right)(2) + b$ $4y = 3x - 2$
 $1 = \frac{3}{2} + b$
 $b = -\frac{1}{2}$
- PTS: 2 REF: 081219ia STA: A.A.34 TOP: Writing Linear Equations
- 336 ANS: 1 PTS: 2 REF: 081209ia STA: A.N.1
TOP: Properties of Reals
- 337 ANS: 3 PTS: 2 REF: 011205ia STA: A.A.1
TOP: Expressions

338 ANS: 2

$$\frac{x^2 - 3x - 10}{x^2 - 25} = \frac{(x-5)(x+2)}{(x+5)(x-5)} = \frac{x+2}{x+5}$$

PTS: 2 REF: 061216ia STA: A.A.16 TOP: Rational Expressions
 KEY: $a > 0$

339 ANS: 3

The other situations are qualitative.

PTS: 2 REF: 081213ia STA: A.S.1 TOP: Analysis of Data

340 ANS: 4

$$375 + 155w \geq 900$$

$$155w \geq 525$$

$$w \geq 3.4$$

PTS: 2 REF: 081206ia STA: A.A.6 TOP: Modeling Inequalities

341 ANS: 3

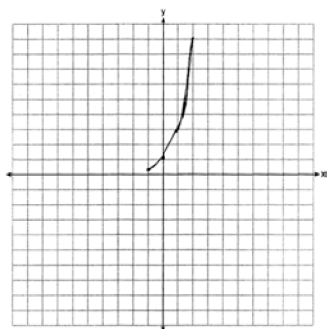
$$0.06y + 200 = 0.03y + 350$$

$$0.03y = 150$$

$$y = 5,000$$

PTS: 2 REF: 081203ia STA: A.A.25 TOP: Solving Equations with Decimals

342 ANS:



PTS: 2 REF: 081233ia STA: A.G.4 TOP: Graphing Exponential Functions

343 ANS: 1

PTS: 2 REF: 061220ia STA: A.A.17
 TOP: Addition and Subtraction of Rationals

344 ANS: 4

PTS: 2 REF: 081229ia STA: A.S.23
 TOP: Theoretical Probability KEY: independent events

345 ANS: 1

$$\sqrt{1700^2 - 1300^2} \approx 1095$$

PTS: 2 REF: 011221ia STA: A.A.45 TOP: Pythagorean Theorem

346 ANS:

3, 0, 20. $15 - 12 = 3$. $12 - 12 = 0$

PTS: 3

REF: 081234ia

STA: A.S.9

TOP: Analysis of Data

347 ANS: 4

If $m\angle C = 90$, then \overline{AB} is the hypotenuse, and the triangle is a 3-4-5 triangle.

PTS: 2

REF: 061224ia

STA: A.A.42

TOP: Trigonometric Ratios

Integrated Algebra Regents at Random Answer Section

348 ANS: 2

$$\frac{x^2 - 2x - 15}{x^2 + 3x} = \frac{(x-5)(x+3)}{x(x+3)} = \frac{x-5}{x}$$

PTS: 2 REF: 060921ia STA: A.A.16 TOP: Rational Expressions
KEY: $a > 0$

349 ANS: 3 PTS: 2 REF: 010910ia STA: A.A.35
TOP: Writing Linear Equations

350 ANS: 1
 $13.95 + 0.49s \leq 50.00$
 $0.49s \leq 36.05$
 $s \leq 73.57$

PTS: 2 REF: 080904ia STA: A.A.6 TOP: Modeling Inequalities
351 ANS: 2 PTS: 2 REF: fall0725ia STA: A.N.4
TOP: Operations with Scientific Notation

352 ANS: 1 PTS: 2 REF: fall0728ia STA: A.A.15
TOP: Undefined Rationals

353 ANS: 2

The events are not mutually exclusive: $P(\text{prime}) = \frac{3}{6}$, $P(\text{even}) = \frac{3}{6}$, $P(\text{prime AND even}) = \frac{1}{6}$

$$P(\text{prime OR even}) = \frac{3}{6} + \frac{3}{6} - \frac{1}{6} = \frac{5}{6}$$

PTS: 2 REF: 080830ia STA: A.S.23 TOP: Theoretical Probability
KEY: not mutually exclusive events

354 ANS: 2
 $L + S = 47$
 $L - S = 15$
 $2L = 62$
 $L = 31$

PTS: 2 REF: 060912ia STA: A.A.7 TOP: Writing Linear Systems
355 ANS:
{1,2,4,5,9,10,12}

PTS: 2 REF: 080833ia STA: A.A.30 TOP: Set Theory

356 ANS: 3

$$\cos 30 = \frac{x}{24}$$

$$x \approx 21$$

PTS: 2 REF: 010912ia STA: A.A.44 TOP: Using Trigonometry to Find a Side

357 ANS: 3 PTS: 2 REF: 080907ia STA: A.S.20

TOP: Geometric Probability

358 ANS: 3

mean = 6, median = 6 and mode = 7

PTS: 2 REF: 080804ia STA: A.S.4 TOP: Central Tendency

359 ANS: 2

$$\sin U = \frac{\text{opposite}}{\text{hypotenuse}} = \frac{15}{17}$$

PTS: 2 REF: 010919ia STA: A.A.42 TOP: Trigonometric Ratios

360 ANS: 4 PTS: 2 REF: 010927ia STA: A.N.4

TOP: Operations with Scientific Notation

361 ANS: 3

$$\sin A = \frac{10}{16} \quad B = 180 - (90 + 38.7) = 51.3. \quad \text{A } 90^\circ \text{ angle is not acute.}$$

$$A \approx 38.7$$

PTS: 2 REF: 080829ia STA: A.A.43 TOP: Using Trigonometry to Find an Angle

362 ANS: 1

$$x = \frac{-b}{2a} = \frac{-(-16)}{2(1)} = 8. \quad y = (8)^2 - 16(8) + 63 = -1$$

PTS: 2 REF: 060918ia STA: A.A.41
TOP: Identifying the Vertex of a Quadratic Given Equation

363 ANS: 3

$$m = \frac{1 - (-4)}{-6 - 4} = -\frac{1}{2}$$

PTS: 2 REF: 060820ia STA: A.A.33 TOP: Slope

364 ANS: 3

$$5x + 2y = 48$$

$$3x + 2y = 32$$

$$2x = 16$$

$$x = 8$$

PTS: 2 REF: fall0708ia STA: A.A.10 TOP: Solving Linear Systems

365 ANS:
 $0 \leq t \leq 40$

PTS: 2 REF: 060833ia STA: A.A.31 TOP: Set Theory

366 ANS: 4

$$\frac{2^6}{2^1} = 2^5$$

PTS: 2 REF: 060813ia STA: A.A.12 TOP: Division of Powers

367 ANS: 4

$$\frac{(4x^3)^2}{2x} = \frac{16x^6}{2x} = 8x^5$$

PTS: 2 REF: 011216ia STA: A.A.12 TOP: Powers of Powers

368 ANS: 4

$$SA = 2lw + 2hw + 2lh = 2(3)(1.5) + 2(2)(1.5) + 2(3)(2) = 27$$

PTS: 2 REF: 060827ia STA: A.G.2 TOP: Surface Area

369 ANS: 3

$$35000(1 - 0.05)^4 \approx 28507.72$$

PTS: 2 REF: fall0719ia STA: A.A.9 TOP: Exponential Functions

370 ANS: 3

$$a + ar = b + r$$

$$a(1 + r) = b + r$$

$$a = \frac{b + r}{1 + r}$$

PTS: 2 REF: 060913ia STA: A.A.23 TOP: Transforming Formulas

371 ANS: 2

PTS: 2


REF: 080815ia

STA: A.G.1

TOP: Compositions of Polygons and Circles

KEY: area

372 ANS:



PTS: 4 REF: 080939ia STA: A.S.5 TOP: Box-and-Whisker Plots

373 ANS: 2

$$\frac{2x^2 - 12x}{x - 6} = \frac{2x(x - 6)}{x - 6} = 2x$$

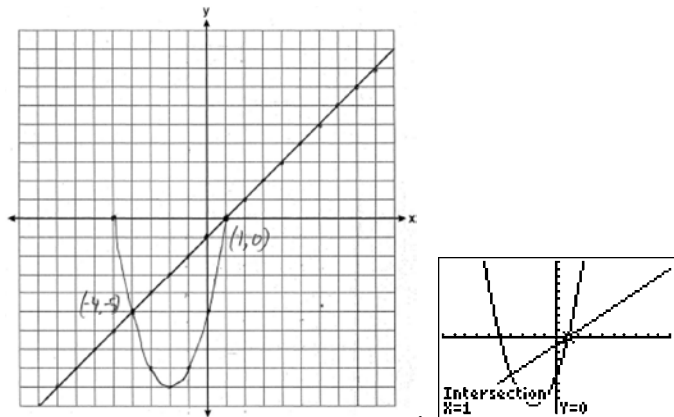
PTS: 2 REF: 060824ia STA: A.A.16 TOP: Rational Expressions

KEY: $a > 0$

374 ANS: 2
 $1.5^3 = 3.375$

PTS: 2 REF: 060809ia STA: A.G.2 TOP: Volume

375 ANS:



PTS: 4 REF: 080839ia STA: A.G.9 TOP: Quadratic-Linear Systems

376 ANS:

$$111.25 \cdot \frac{\text{distance}}{\text{time}} = \frac{89}{0.8} = 111.25$$

PTS: 2 REF: 080831ia STA: A.M.1 TOP: Speed

377 ANS:

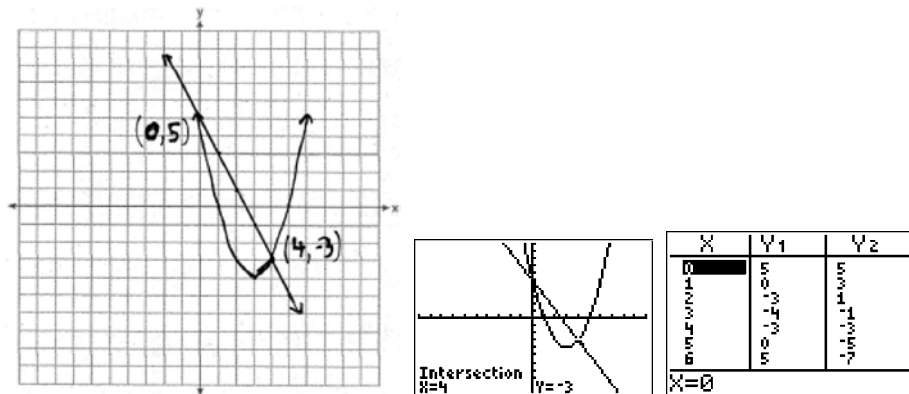
$\frac{1}{8}$. After the English and social studies books are taken, 8 books are left and 1 is an English book.

PTS: 2 REF: 060933ia STA: A.S.18 TOP: Conditional Probability

378 ANS: 4 PTS: 2 REF: fall0704ia STA: A.A.29

TOP: Set Theory

379 ANS:




PTS: 4 REF: fall0738ia STA: A.G.9 TOP: Quadratic-Linear Systems

380 ANS: 3 PTS: 2 REF: 080819ia STA: A.A.13

TOP: Addition and Subtraction of Polynomials KEY: subtraction

381 ANS:

Number of Days Outside			Number of Days Outside	
Interval	Tally	Frequency	Interval	Cumulative Frequency
0-1		3	0-1	3
2-3		7	0-3	10
4-5		7	0-5	17
6-7		3	0-7	20



PTS: 4 REF: 080838ia STA: A.S.5

TOP: Frequency Histograms, Bar Graphs and Tables

KEY: cumulative frequency histograms

382 ANS:

$$d = 6.25h, 250. \quad d = 6.25(40) = 250$$

PTS: 2 REF: 010933ia STA: A.N.5

TOP: Direct Variation

383 ANS: 1

To determine student interest, survey the widest range of students.

PTS: 2 REF: 060803ia STA: A.S.3

TOP: Analysis of Data

384 ANS:

$$50, 1.5, 10. \quad \frac{\text{distance}}{\text{time}} = \frac{60}{1.2} = 50. \quad \frac{\text{distance}}{\text{time}} = \frac{60}{40} = 1.5. \quad \text{speed} \times \text{time} = 55 \times 2 = 110. \quad 120 - 110 = 10$$

PTS: 3 REF: fall0734ia STA: A.M.1

TOP: Speed

385 ANS: 3

$$b = 42 - r \quad r = 2b + 3$$

$$r = 2b + 3 \quad r = 2(42 - r) + 3$$

$$r = 84 - 2r + 3$$

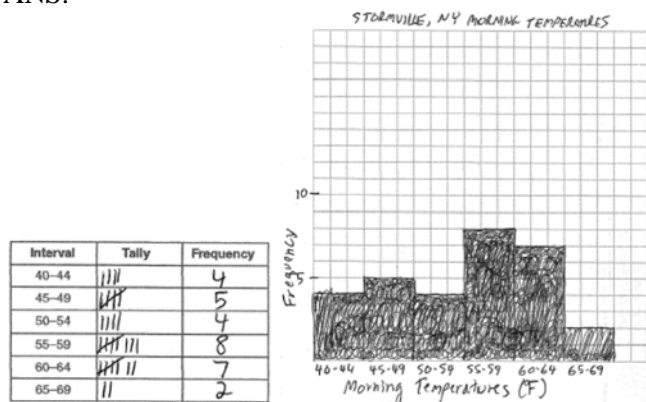
$$3r = 87$$

$$r = 29$$

PTS: 2 REF: 060812ia STA: A.A.7

TOP: Writing Linear Systems

386 ANS:



PTS: 4 REF: 060938ia STA: A.S.5

TOP: Frequency Histograms, Bar Graphs and Tables

KEY: frequency histograms

387 ANS: 4 PTS: 2 REF: fall0717ia

STA: A.G.4

TOP: Families of Functions

388 ANS: 1

$$\frac{\sqrt{32}}{4} = \frac{\sqrt{16}\sqrt{2}}{4} = \sqrt{2}$$

PTS: 2 REF: 060828ia STA: A.N.2

TOP: Simplifying Radicals

389 ANS: 3

The other situations are quantitative.

PTS: 2 REF: 060905ia STA: A.S.1

TOP: Analysis of Data

390 ANS: 2

The median score, 10, is the vertical line in the center of the box.

PTS: 2 REF: fall0709ia STA: A.S.5

TOP: Box-and-Whisker Plots

391 ANS: 4

$$A = lw = (3w - 7)(w) = 3w^2 - 7w$$

PTS: 2 REF: 010924ia STA: A.A.1

TOP: Expressions

392 ANS: 1

$$\sin C = \frac{\text{opposite}}{\text{hypotenuse}} = \frac{13}{85}$$

PTS: 2 REF: fall0721ia STA: A.A.42

TOP: Trigonometric Ratios

393 ANS: 4

$$w(w + 5) = 36$$

$$w^2 + 5w - 36 = 0$$

PTS: 2 REF: fall0726ia STA: A.A.5

TOP: Modeling Equations

394 ANS: 4 PTS: 2 REF: 080903ia

STA: A.A.12

TOP: Multiplication of Powers

395 ANS: 4

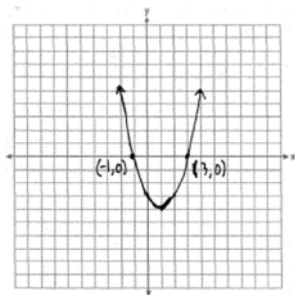
$$\frac{x^2 - 1}{x + 1} \cdot \frac{x + 3}{3x - 3} = \frac{(x + 1)(x - 1)}{x + 1} \cdot \frac{x + 3}{3(x - 1)} = \frac{x + 3}{3}$$

PTS: 2 REF: 060815ia STA: A.A.18 TOP: Multiplication and Division of Rationals
KEY: multiplication

396 ANS: 1 PTS: 2 REF: 060807ia STA: A.A.13

TOP: Multiplication of Polynomials

397 ANS:



PTS: 3 REF: 060836ia STA: A.G.8 TOP: Solving Quadratics by Graphing

398 ANS: 2

$$x + 2y = 9$$

$$x - y = 3$$

$$3y = 6$$

$$y = 2$$

PTS: 2 REF: 060925ia STA: A.A.10 TOP: Solving Linear Systems

399 ANS: 4

$$-4x + 2 > 10$$

$$-4x > 8$$

$$x < -2$$

PTS: 2 REF: 080805ia STA: A.A.21 TOP: Interpreting Solutions

400 ANS: 2 PTS: 2 REF: 060923ia

TOP: Addition and Subtraction of Polynomials

STA: A.A.13

KEY: subtraction

401 ANS:

(H,F,M), (H,F,J), (H,F,S), (H,A,M), (H,A,J), (H,A,S), (C,F,M), (C,F,J), (C,F,S), (C,A,M), (C,A,J), (C,A,S), (T,F,M), (T,F,J), (T,F,S), (T,A,M), (T,A,J), (T,A,S). There are 18 different kids' meals, 12 do not include juice and 6 include chicken nuggets.

PTS: 4 REF: 010939ia STA: A.S.19 TOP: Sample Space

402 ANS: 4

$$\frac{\text{distance}}{\text{time}} = \frac{24}{6} = 4$$

PTS: 2 REF: 010902ia STA: A.M.1 TOP: Speed

403 ANS: 3 PTS: 2 REF: 060919ia STA: A.G.3
TOP: Defining Functions

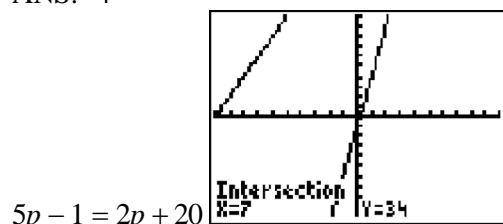
404 ANS:

$36 - 9\pi$. 15.6. Area of square–area of 4 quarter circles. $(3 + 3)^2 - 3^2\pi = 36 - 9\pi$

PTS: 2 REF: 060832ia STA: A.G.1 TOP: Compositions of Polygons and Circles
KEY: area

405 ANS: 4 PTS: 2 REF: 060916ia STA: A.A.15
TOP: Undefined Rationals

406 ANS: 4



PTS: 2 REF: 080801ia STA: A.A.22 TOP: Solving Equations

407 ANS: 4

The mean is $80.\bar{6}$, the median is 84.5 and the mode is 87.

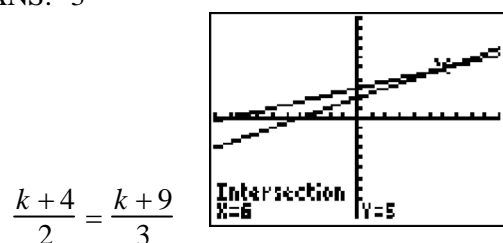
PTS: 2 REF: 010907ia STA: A.S.4 TOP: Central Tendency

408 ANS:

(S,S), (S,K), (**S,D**), (K,S), (K,K), (**K,D**), (**D,S**), (**D,K**), (D,D), $\frac{4}{9}$

PTS: 3 REF: fall0736ia STA: A.S.19 TOP: Sample Space

409 ANS: 3



$$3(k+4) = 2(k+9)$$

$$3k + 12 = 2k + 18$$

$$k = 6$$

PTS: 2 REF: 010906ia STA: A.A.26 TOP: Solving Rationals

410 ANS: 1 PTS: 2 REF: 080803ia STA: A.A.4
TOP: Modeling Inequalities

411 ANS: 4

$$x^2 - 7x + 6 = 0$$

$$(x - 6)(x - 1) = 0$$

$$x = 6 \quad x = 1$$

PTS: 2

REF: 060902ia

STA: A.A.28

TOP: Roots of Quadratics

412 ANS: 1

$$-2x + 5 > 17$$

$$-2x > 12$$

$$x < -6$$

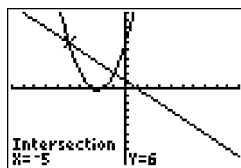
PTS: 2

REF: fall0724ia

STA: A.A.21

TOP: Interpreting Solutions

413 ANS: 2



$$x^2 + 5x + 6 = -x + 1 \quad y = -x + 1$$

$$x^2 + 6x + 5 = 0 \quad = -(-5) + 1$$

$$(x + 5)(x + 1) = 0 \quad = 6$$

$$x = -5 \text{ or } -1$$

PTS: 2

REF: 080812ia

STA: A.A.11

TOP: Quadratic-Linear Systems

414 ANS: 3

$$m = \frac{4 - 10}{3 - (-6)} = -\frac{2}{3}$$

PTS: 2

REF: fall0716ia

STA: A.A.33

TOP: Slope

415 ANS: 3

$$500(1 + 0.06)^3 \approx 596$$

PTS: 2

REF: 080929ia

STA: A.A.9

TOP: Exponential Functions

416 ANS: 1

PTS: 2

REF: 060903ia

STA: A.A.12

TOP: Division of Powers

417 ANS: 2

PTS: 2

REF: 060830ia

STA: A.A.9

TOP: Exponential Functions

418 ANS: 2

The slope of the inequality is $-\frac{1}{2}$.

PTS: 2

REF: fall0720ia

STA: A.G.6

TOP: Linear Inequalities

419 ANS: 1
 $x - 2y = 1$

$$x + 4y = 7$$

$$-6y = -6$$

$$y = 1$$

PTS: 2 REF: 080920ia STA: A.A.10 TOP: Solving Linear Systems

420 ANS: 3

$$F = \frac{9}{5}C + 32 = \frac{9}{5}(15) + 32 = 59$$

PTS: 2 REF: 010901ia STA: A.M.2 TOP: Conversions

KEY: formula

421 ANS: 3 PTS: 2 REF: 060825ia STA: A.A.45

TOP: Pythagorean Theorem

422 ANS: 1

$$3x^2 - 27x = 0$$

$$3x(x - 9) = 0$$

$$x = 0, 9$$

PTS: 2 REF: 011223ia STA: A.A.28 TOP: Roots of Quadratics

423 ANS:

$\frac{3}{8}$: (H,H,H), (H,H,T), (H,T,H), (**H,T,T**), (T,H,H), (**T,H,T**), (**T,T,H**), (T,T,T)

PTS: 2 REF: 080933ia STA: A.S.19 TOP: Sample Space

424 ANS: 4

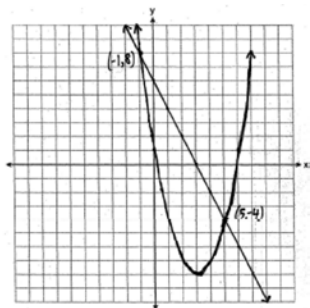


PTS: 2 REF: 080822ia STA: A.S.8 TOP: Scatter Plots

425 ANS: 2 PTS: 2 REF: 080810ia STA: A.A.36

TOP: Parallel and Perpendicular Lines

426 ANS:



PTS: 4 REF: 060939ia STA: A.G.9 TOP: Quadratic-Linear Systems

427 ANS: 4 PTS: 2 REF: 060930ia STA: A.A.29
TOP: Set Theory

428 ANS: 1

$$m = \frac{4 - (-4)}{-5 - 15} = -\frac{2}{5}$$

PTS: 2 REF: 080915ia STA: A.A.33 TOP: Slope

429 ANS: 3
The value of the third quartile is the last vertical line of the box.

PTS: 2 REF: 080818ia STA: A.S.6 TOP: Box-and-Whisker Plots

430 ANS: 4 PTS: 2 REF: fall0715ia STA: A.A.5
TOP: Modeling Inequalities

431 ANS:

$$y = \frac{2}{5}x + 2. \quad m = \frac{4 - 0}{5 - (-5)} = \frac{2}{5}. \quad y = mx + b$$

$$4 = \frac{2}{5}(5) + b$$

$$b = 2$$

PTS: 3 REF: 080836ia STA: A.A.35 TOP: Writing Linear Equations

432 ANS: 3
 $3ax + b = c$

$$3ax = c - b$$

$$x = \frac{c - b}{3a}$$

PTS: 2 REF: 080808ia STA: A.A.23 TOP: Transforming Formulas

433 ANS: 1 PTS: 2 REF: 060811ia STA: A.G.10
TOP: Identifying the Vertex of a Quadratic Given Graph

434 ANS:

$$60. \quad {}_5P_3 = 60$$

PTS: 2 REF: 060931ia STA: A.N.8 TOP: Permutations

- 435 ANS: 2 PTS: 2 REF: fall0701ia STA: A.S.7
TOP: Scatter Plots
- 436 ANS: 3 PTS: 2 REF: fall0710ia STA: A.A.31
TOP: Set Theory
- 437 ANS: 2 PTS: 2 REF: 080823ia STA: A.A.32
TOP: Slope
- 438 ANS: 4
$$\frac{25x - 125}{x^2 - 25} = \frac{25(x - 5)}{(x + 5)(x - 5)} = \frac{25}{x + 5}$$
- PTS: 2 REF: 080821ia STA: A.A.16 TOP: Rational Expressions
KEY: $a > 0$
- 439 ANS: 2 PTS: 2 REF: 010925ia STA: A.A.15
TOP: Undefined Rationals
- 440 ANS: 4 PTS: 2 REF: 060829ia STA: A.G.5
TOP: Graphing Quadratic Functions
- 441 ANS: 4
$$P(O) = \frac{3}{6}, P(E) = \frac{3}{6}, P(< 6) = \frac{5}{6}, P(> 4) = \frac{2}{6}$$
- PTS: 2 REF: 010903ia STA: A.S.22 TOP: Theoretical Probability
- 442 ANS: 2
$$l(l - 5) = 24$$

$$l^2 - 5l - 24 = 0$$

$$(l - 8)(l + 3) = 0$$

$$l = 8$$
- PTS: 2 REF: 080817ia STA: A.A.8 TOP: Geometric Applications of Quadratics
- 443 ANS: 2
$$s + o = 126. s + 2s = 126$$

$$o = 2s \quad s = 42$$
- PTS: 2 REF: 080811ia STA: A.A.7 TOP: Writing Linear Systems
- 444 ANS: 4
$$y = mx + b$$

$$-1 = (2)(3) + b$$

$$b = -7$$
- PTS: 2 REF: 080927ia STA: A.A.34 TOP: Writing Linear Equations
- 445 ANS: 2
$$\frac{6}{5x} - \frac{2}{3x} = \frac{18x - 10x}{15x^2} = \frac{8x}{15x^2} = \frac{8}{15x}$$
- PTS: 2 REF: 010921ia STA: A.A.17 TOP: Addition and Subtraction of Rationals

446 ANS: 4

$$\frac{(d \times 3) + (2 \times 2d)}{2 \times 3} = \frac{3d + 4d}{6} = \frac{7d}{6}$$

PTS: 2

REF: fall0727ia

STA: A.A.17

TOP: Addition and Subtraction of Rationals

447 ANS: 4

$$\frac{5}{45} = \frac{8}{x}$$

$$5x = 360$$

$$x = 72$$

PTS: 2

REF: 060901ia

STA: A.M.1

TOP: Speed

448 ANS: 1

PTS: 2

REF: 010905ia

STA: A.G.4

TOP: Families of Functions

449 ANS:

$$(-2, 11). \quad x = \frac{-b}{2a} = \frac{-(-8)}{2(-2)} = -2$$

$$y = -2(-2)^2 - 8(-2) + 3 = 11$$

PTS: 3

REF: 080934ia

STA: A.A.41

TOP: Identifying the Vertex of a Quadratic Given Equation

450 ANS:

$$w(w + 15) = 54, 3, 18. \quad w(w + 15) = 54$$

$$w^2 + 15w - 54 = 0$$

$$(w + 18)(w - 3) = 0$$

$$w = 3$$

PTS: 4

REF: 060837ia

STA: A.A.8

TOP: Geometric Applications of Quadratics

451 ANS: 1

$$\frac{4x}{x-1} \cdot \frac{x^2-1}{3x+3} = \frac{4x}{x-1} \cdot \frac{(x+1)(x-1)}{3(x+1)} = \frac{4x}{3}$$

PTS: 2

REF: 080826ia

STA: A.A.18

TOP: Multiplication and Division of Rationals

KEY: multiplication

452 ANS: 1

The slope of $y = 3 - 2x$ is -2 . Using $m = -\frac{A}{B}$, the slope of $4x + 2y = 5$ is $-\frac{4}{2} = -2$.

PTS: 2

REF: 010926ia

STA: A.A.38

TOP: Parallel and Perpendicular Lines

453 ANS:

$$5,583.86. \quad A = P(1 + R)^t = 5000(1 + 0.0375)^3 \approx 5583.86$$

PTS: 3

REF: 060935ia

STA: A.A.9

TOP: Exponential Functions

454 ANS:

$$\frac{3}{8} \cdot P(s_1 < 4) \times P(s_2 = \text{back}) = \frac{3}{4} \times \frac{1}{2} = \frac{3}{8}$$

PTS: 2 REF: 080832ia STA: A.S.23 TOP: Geometric Probability

455 ANS: 2 PTS: 2 REF: 060908ia STA: A.S.21

TOP: Empirical Probability

456 ANS: 2

If the car can travel 75 miles on 4 gallons, it can travel 300 miles on 16 gallons. $\frac{75}{4} = \frac{x}{16}$.

$$x = 300$$

PTS: 2 REF: 080807ia STA: A.G.4 TOP: Graphing Linear Functions

457 ANS: 4 PTS: 2 REF: 060927ia STA: A.N.4

TOP: Operations with Scientific Notation

458 ANS: 4 PTS: 2 REF: 010930ia STA: A.G.3

TOP: Defining Functions

459 ANS: 4 PTS: 2 REF: fall0730ia STA: A.G.3

TOP: Defining Functions

460 ANS:

$$\frac{1}{6}, 16.67\%, \$13.50. \frac{18 - 15}{18} = \frac{1}{6}. 18 \times 0.75 = 13.5$$

PTS: 3 REF: 060835ia STA: A.N.5 TOP: Percents

461 ANS: 2 PTS: 2 REF: 060821ia STA: A.A.5

TOP: Modeling Inequalities

462 ANS: 3

The number of correct answers on a test causes the test score.

PTS: 2 REF: 080908ia STA: A.S.13 TOP: Analysis of Data

463 ANS: 2

The two values are shoe size and height.

PTS: 2 REF: fall0714ia STA: A.S.2 TOP: Analysis of Data

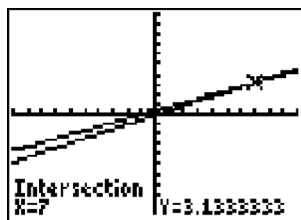
464 ANS:

$$7. 15x + 22 \geq 120$$

$$x \geq 6.5\bar{3}$$

PTS: 3 REF: fall0735ia STA: A.A.6 TOP: Modeling Inequalities

465 ANS: 4



$$\frac{2x}{5} + \frac{1}{3} = \frac{7x-2}{15}$$

$$\frac{(2x \times 3) + (5 \times 1)}{5 \times 3} = \frac{7x-2}{15}$$

$$\frac{6x+5}{15} = \frac{7x-2}{15}$$

$$6x+5 = 7x-2$$

$$x = 7$$

PTS: 2 REF: 080820ia STA: A.A.25

TOP: Solving Equations with Fractional Expressions

466 ANS: 4 PTS: 2 REF: 010929ia STA: A.S.6

TOP: Box-and-Whisker Plots

467 ANS: 2 PTS: 2 REF: 080901ia STA: A.A.4

TOP: Modeling Equations

468 ANS: 4

$$V = \pi r^2 h = \pi \cdot 6^2 \cdot 15 \approx 1696.5$$

PTS: 2 REF: fall0712ia STA: A.G.2 TOP: Volume

469 ANS: 2 PTS: 2 REF: 010909ia STA: A.A.19

TOP: Factoring the Difference of Perfect Squares

470 ANS: 1

$$s = f + 60 \quad j = 2f - 50 \quad se = 3f. \quad f + (f + 60) + (2f - 50) + 3f = 1424$$

$$7f + 10 = 1424$$

$$f = 202$$

PTS: 2 REF: 060917ia STA: A.A.7 TOP: Writing Linear Systems

471 ANS: 1 PTS: 2 REF: 060801ia STA: A.G.4

TOP: Families of Functions

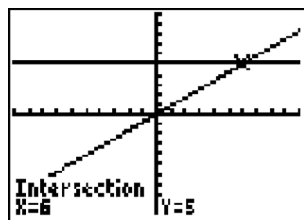
472 ANS: 1

$$\frac{(2x \times 6) + (3 \times x)}{3 \times 6} = 5$$

$$\frac{12x + 3x}{18} = 5$$

$$15x = 90$$

$$x = 6$$



PTS: 2 REF: 060907ia STA: A.A.25

TOP: Solving Equations with Fractional Expressions

473 ANS: 1

$$\left| \frac{289 - 282}{289} \right| \approx 0.024$$

PTS: 2 REF: 080828ia STA: A.M.3 TOP: Error

KEY: volume and surface area

474 ANS: 3 PTS: 2 REF: fall0702ia STA: A.S.23

TOP: Theoretical Probability KEY: mutually exclusive events

475 ANS: 2

$$P = 2l + 2w$$

$$P - 2l = 2w$$

$$\frac{P - 2l}{2} = w$$

PTS: 2 REF: 010911ia STA: A.A.23 TOP: Transforming Formulas

476 ANS: 4 PTS: 2 REF: 060805ia STA: A.S.12

TOP: Scatter Plots

477 ANS:

$$\frac{x-7}{3x} \cdot \frac{2x^2 - 8x - 42}{6x^2} \div \frac{x^2 - 9}{x^2 - 3x} = \frac{2(x^2 - 4x - 21)}{6x^2} \cdot \frac{x(x-3)}{(x+3)(x-3)} = \frac{(x-7)(x+3)}{3x} \cdot \frac{1}{x+3} = \frac{x-7}{3x}$$

PTS: 4 REF: 080937ia STA: A.A.18 TOP: Multiplication and Division of Rationals

KEY: division

478 ANS: 1

$$\frac{1}{8} \times \frac{1}{8} = \frac{1}{64}$$

PTS: 2 REF: 010928ia STA: A.S.23 TOP: Geometric Probability

479 ANS: 4

$$A = \{2, 4, 6, 8, 10, 12, 14, 16, 18, 20\}$$

PTS: 2

REF: 080912ia

STA: A.A.30

TOP: Set Theory

480 ANS: 1

PTS: 2

REF: 080924ia

STA: A.G.1

TOP: Compositions of Polygons and Circles

KEY: perimeter

481 ANS: 1

 $30^2 + 40^2 = c^2$. 30, 40, 50 is a multiple of 3, 4, 5.

$$2500 = c^2$$

$$50 = c$$

PTS: 2

REF: fall0711ia

STA: A.A.45

TOP: Pythagorean Theorem

482 ANS: 1

$${}_4P_4 = 4 \times 3 \times 2 \times 1 = 24$$

PTS: 2

REF: 080816ia

STA: A.N.8

TOP: Permutations

483 ANS: 2

$$5\sqrt{20} = 5\sqrt{4}\sqrt{5} = 10\sqrt{5}$$

PTS: 2

REF: 080922ia

STA: A.N.2

TOP: Simplifying Radicals

484 ANS: 1

PTS: 2

REF: 080813ia

STA: A.G.10

TOP: Identifying the Vertex of a Quadratic Given Graph

485 ANS: 1

$$\frac{2}{x} - 3 = \frac{26}{x}$$

$$-3 = \frac{24}{x}$$

$$x = -8$$

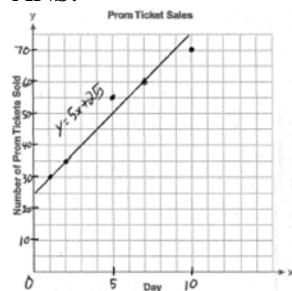
PTS: 2

REF: 010918ia

STA: A.A.26

TOP: Solving Rationals

486 ANS:



PTS: 3

REF: 060936ia

STA: A.S.8

TOP: Scatter Plots

487 ANS:

$$4x(x+3)(x-3). \quad 4x^3 - 36x = 4x(x^2 - 9) = 4x(x+3)(x-3)$$

PTS: 2 REF: 060932ia STA: A.A.19

TOP: Factoring the Difference of Perfect Squares

488 ANS: 1

$$m = \frac{3-0}{0-2} = -\frac{3}{2}. \text{ Using the given y-intercept } (0,3) \text{ to write the equation of the line } y = -\frac{3}{2}x + 3.$$

PTS: 2 REF: fall0713ia STA: A.A.35 TOP: Writing Linear Equations

489 ANS: 3 PTS: 2 REF: fall0705ia STA: A.N.1

TOP: Identifying Properties

490 ANS:

$$(-2,5). \quad 3x + 2y = 4 \quad 12x + 8y = 16. \quad 3x + 2y = 4$$

$$4x + 3y = 7 \quad 12x + 9y = 21 \quad 3x + 2(5) = 4$$

$$y = 5 \quad 3x = -6$$

$$x = -2$$

PTS: 4 REF: 010937ia STA: A.A.10 TOP: Solving Linear Systems

491 ANS: 2

$$m = \frac{5-3}{2-7} = -\frac{2}{5}$$

PTS: 2 REF: 010913ia STA: A.A.33 TOP: Slope

492 ANS:

$$10 + 2d \geq 75, 33. \quad 10 + 2d \geq 75$$

$$d \geq 32.5$$

PTS: 3 REF: 060834ia STA: A.A.6 TOP: Modeling Inequalities

493 ANS: 1

$$0.07m + 19 \leq 29.50$$

$$0.07m \leq 10.50$$

$$m \leq 150$$

PTS: 2 REF: 010904ia STA: A.A.6 TOP: Modeling Inequalities

494 ANS: 3

$$|-5(5) + 12| = |-13| = 13$$

PTS: 2 REF: 080923ia STA: A.N.6 TOP: Evaluating Expressions

495 ANS: 3 PTS: 2 REF: 060808ia STA: A.N.8

TOP: Permutations

496 ANS: 3

$$\frac{(2x^3)(8x^5)}{4x^6} = \frac{16x^8}{4x^6} = 4x^2$$

PTS: 2 REF: fall0703ia STA: A.A.12 TOP: Division of Powers

497 ANS: 2

$$\tan 32 = \frac{x}{25}$$

$$x \approx 15.6$$

PTS: 2 REF: 080914ia STA: A.A.44 TOP: Using Trigonometry to Find a Side

498 ANS: 2

The set of integers greater than -2 and less than 6 is $\{-1, 0, 1, 2, 3, 4, 5\}$. The subset of this set that is the positive factors of 5 is $\{1, 5\}$. The complement of this subset is $\{-1, 0, 2, 3, 4\}$.

PTS: 2 REF: 060818ia STA: A.A.30 TOP: Set Theory

499 ANS: 1

PTS: 2 TOP: Linear Inequalities

REF: 060920ia STA: A.G.6

500 ANS:

$$30\sqrt{2}. \quad 5\sqrt{72} = 5\sqrt{36}\sqrt{2} = 30\sqrt{2}$$

PTS: 2 REF: fall0731ia STA: A.N.2 TOP: Simplifying Radicals

501 ANS: 4

The transformation is a reflection in the x -axis.

PTS: 2 REF: fall0722ia STA: A.G.5 TOP: Graphing Absolute Value Functions

502 ANS:

33.4. Serena needs 24 $(9 + 6 + 9)$ feet of fencing to surround the rectangular portion of the garden. The length of the fencing needed for the semicircular portion of the garden is $\frac{1}{2}\pi d = 3\pi \approx 9.4$ feet.

PTS: 2 REF: fall0733ia STA: A.G.1 TOP: Compositions of Polygons and Circles

KEY: perimeter

503 ANS: 2

$$\sqrt{32} = \sqrt{16}\sqrt{2} = 4\sqrt{2}$$

PTS: 2 REF: 060910ia STA: A.N.2 TOP: Simplifying Radicals

504 ANS: 4

Surveying persons leaving a football game about a sports budget contains the most bias.

PTS: 2 REF: 080910ia STA: A.S.3 TOP: Analysis of Data

505 ANS: 4

PTS: 2 TOP: Expressions

REF: fall0729ia STA: A.A.2

506 ANS: 3

$$x^2 - 10x + 21 = 0$$

$$(x - 7)(x - 3) = 0$$

$$x = 7 \quad x = 3$$

PTS: 2

REF: 010914ia

STA: A.A.28

TOP: Roots of Quadratics

507 ANS: 2

$$\left| \frac{149.6 - 174.2}{149.6} \right| \approx 0.1644$$

PTS: 2

REF: 080926ia

STA: A.M.3

TOP: Error

KEY: area

508 ANS:

$$30.4\%; \text{ no, } 23.3\%. \quad \frac{7.50 - 5.75}{5.75} = 30.4\%. \quad \frac{7.50 - 5.75}{7.50} = 23.3\%$$

PTS: 3

REF: 080935ia

STA: A.N.5

TOP: Percents

509 ANS: 3

The value of the upper quartile is the last vertical line of the box.

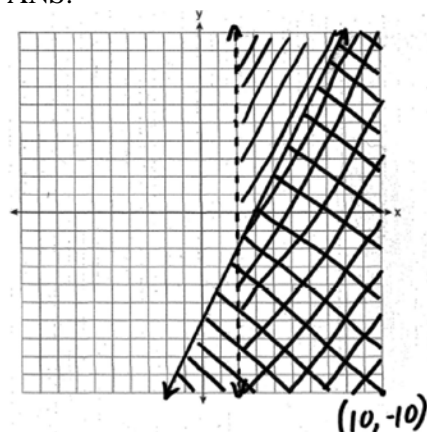
PTS: 2

REF: 060915ia

STA: A.S.6

TOP: Box-and-Whisker Plots

510 ANS:



PTS: 4

REF: 010938ia

STA: A.G.7

TOP: Systems of Linear Inequalities

511 ANS: 2

$$\sin A = \frac{8}{12}$$

$$A \approx 42$$

PTS: 2

REF: 060816ia

STA: A.A.43

TOP: Using Trigonometry to Find an Angle

512 ANS: 1

$$x^2 + 7x + 10 = 0$$

$$(x + 5)(x + 2) = 0$$

$$x = -5 \text{ or } -2$$

PTS: 2 REF: 080918ia STA: A.A.15 TOP: Undefined Rationals

513 ANS: 2

$$\frac{9x^4 - 27x^6}{3x^3} = \frac{9x^4(1 - 3x^2)}{3x^3} = 3x(1 - 3x^2)$$

PTS: 2 REF: fall0718ia STA: A.A.16 TOP: Rational Expressions

KEY: $a > 0$

514 ANS:

Greg's rate of 5.5 is faster than Dave's rate of 5.3. $\frac{\text{distance}}{\text{time}} = \frac{11}{2} = 5.5$. $\frac{16}{3} = 5.\bar{3}$

PTS: 3 REF: 080936ia STA: A.M.1 TOP: Speed

515 ANS: 3

$$25 - 18 = 7$$

PTS: 2 REF: 060822ia STA: A.S.9

TOP: Frequency Histograms, Bar Graphs and Tables

516 ANS: 1 PTS: 2 REF: 080911ia STA: A.A.36

TOP: Parallel and Perpendicular Lines

517 ANS: 1

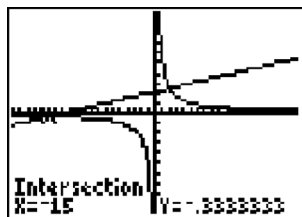
The slope of both is -4 .

PTS: 2 REF: 060814ia STA: A.A.38 TOP: Parallel and Perpendicular Lines

518 ANS: 1 PTS: 2 REF: 060804ia STA: A.A.19

TOP: Factoring the Difference of Perfect Squares

519 ANS: 4



$$\frac{5}{x} = \frac{x + 13}{6}$$

$$x^2 + 13x = 30$$

$$x^2 + 13x - 30 = 0$$

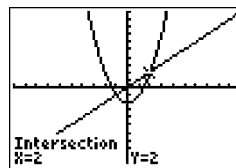
$$(x + 15)(x - 2) = 0$$

$$x = -15 \text{ or } 2$$

PTS: 2 REF: 060826ia STA: A.A.26 TOP: Solving Rationals

520 ANS: 1 PTS: 2 REF: fall0723ia STA: A.M.3
 TOP: Error KEY: area

521 ANS: 4



$x^2 - 2 = x$ Since $y = x$, the solutions are $(2, 2)$ and $(-1, -1)$.

$$x^2 - x - 2 = 0$$

$$(x - 2)(x + 1) = 0$$

$$x = 2 \text{ or } -1$$

PTS: 2 REF: 060810ia STA: A.A.11 TOP: Quadratic-Linear Systems
 522 ANS:

56. If the circumference of circle O is 16π inches, the diameter, \overline{AD} , is 16 inches and the length of \overline{BC} is 12 inches $\frac{3}{4} \times 16$. The area of trapezoid $ABCD$ is $\frac{1}{2} \times 4(12 + 16) = 56$.

PTS: 3 REF: 060934ia STA: A.G.1 TOP: Compositions of Polygons and Circles
 KEY: area

523 ANS: 2

$$\frac{3}{5}(x + 2) = x - 4$$

$$3(x + 2) = 5(x - 4)$$

$$3x + 6 = 5x - 20$$

$$26 = 2x$$

$$x = 13$$

PTS: 2 REF: 080909ia STA: A.A.25
 TOP: Solving Equations with Fractional Expressions

524 ANS: 2

$$2x^2 + 10x - 12 = 2(x^2 + 5x - 6) = 2(x + 6)(x - 1)$$

PTS: 2 REF: 080806ia STA: A.A.20 TOP: Factoring Polynomials
 525 ANS: 1 PTS: 2 REF: 080824ia STA: A.A.43
 TOP: Using Trigonometry to Find an Angle

526 ANS: 4 PTS: 2 REF: 010908ia STA: A.A.9
 TOP: Exponential Functions

527 ANS: 4

$$-2(x - 5) < 4$$

$$-2x + 10 < 4$$

$$-2x < -6$$

$$x > 3$$

PTS: 2

REF: 080913ia

STA: A.A.21

TOP: Interpreting Solutions

528 ANS: 4

$$25(x - 3) = 25x - 75$$

PTS: 2

REF: 060823ia

STA: A.A.1

TOP: Expressions

529 ANS: 2

PTS: 2

REF: 080916ia

STA: A.G.8

TOP: Solving Quadratics by Graphing

530 ANS: 2

$$3c + 4m = 12.50$$

$$3c + 2m = 8.50$$

$$2m = 4.00$$

$$m = 2.00$$

PTS: 2

REF: 060806ia

STA: A.A.7

TOP: Writing Linear Systems

531 ANS: 3

$$0.75 \text{ hours} = 45 \text{ minutes. } \frac{120}{1} = \frac{x}{45}$$

$$x = 5400$$

PTS: 2

REF: 080814ia

STA: A.M.1

TOP: Using Rate

532 ANS: 4

Let x = youngest brother and $x + 4$ = oldest brother. $3x - (x + 4) = 48$.

$$2x - 4 = 48$$

$$x = 26$$

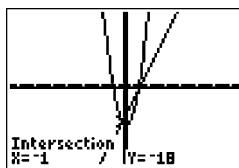
PTS: 2

REF: 080928ia

STA: A.A.6

TOP: Modeling Equations

533 ANS: 2



$$x^2 - x - 20 = 3x - 15 \quad y = 3x - 15$$

$$x^2 - 4x - 6 = 0 \quad = 3(-1) - 15$$

$$(x - 5)(x + 1) = 0 \quad = -18$$

$$x = 5 \text{ or } -1$$

PTS: 2

REF: 010922ia

STA: A.A.11

TOP: Quadratic-Linear Systems

534 ANS: 1

PTS: 2

REF: 080902ia

STA: A.A.19

TOP: Factoring the Difference of Perfect Squares

535 ANS:

$$\frac{3}{4x-8} \cdot \frac{3x+6}{4x+12} \div \frac{x^2-4}{x+3} = \frac{3(x+2)}{4(x+3)} \cdot \frac{x+3}{(x+2)(x-2)} = \frac{3}{4(x-2)}$$

PTS: 3

REF: 010935ia

STA: A.A.18

TOP: Multiplication and Division of Rationals

KEY: division

536 ANS: 3

$$3^2 + 5^2 = x^2$$

$$34 = x^2$$

$$\sqrt{34} = x$$

PTS: 2

REF: 060909ia

STA: A.A.45

TOP: Pythagorean Theorem

537 ANS: 2

PTS: 2

REF: 080802ia

STA: A.N.1

TOP: Identifying Properties

538 ANS: 3

$$\frac{120}{60} = \frac{m}{150}$$

$$m = 300$$

PTS: 2

REF: 081202ia

STA: A.M.1

TOP: Using Rate

539 ANS:

$\frac{38}{\pi}, 2.$ $V = \pi r^2 h$. $\frac{36}{\left(\frac{38}{\pi}\right)} \approx 2.97$. Three cans will not fit. The maximum number is 2.

$$342 = \pi \left(\frac{6}{2}\right)^2 h$$

$$\frac{342}{9\pi} = h$$

$$\frac{38}{\pi} = h$$

PTS: 3 REF: 010936ia STA: A.G.2 TOP: Volume

540 ANS: 4

$$16^2 + b^2 = 34^2$$

$$b^2 = 900$$

$$b = 30$$

PTS: 2 REF: 080809ia STA: A.A.45 TOP: Pythagorean Theorem

541 ANS: 1

$$\frac{4}{3}x + 5 < 17$$

$$\frac{4}{3}x < 12$$

$$4x < 36$$

$$x < 9$$

PTS: 2 REF: 060914ia STA: A.A.21 TOP: Interpreting Solutions

542 ANS: 3 PTS: 2 REF: 060817ia STA: A.A.15

TOP: Undefined Rationals

543 ANS:

$$60 - 42\sqrt{5}. \quad 3\sqrt{20}(2\sqrt{5} - 7) = 6\sqrt{100} - 21\sqrt{20} = 60 - 21\sqrt{4}\sqrt{5} = 60 - 42\sqrt{5}$$

PTS: 3 REF: 080834ia STA: A.N.3 TOP: Operations with Radicals

KEY: multiplication

544 ANS: 3 PTS: 2 REF: 010917ia STA: A.A.29

TOP: Set Theory

545 ANS:

225000, 175000, the median better represents the value since it is closer to more values than the mean.

PTS: 4 REF: fall0737ia STA: A.S.4

TOP: Frequency Histograms, Bar Graphs and Tables

546 ANS: 2 PTS: 2 REF: 010916ia STA: A.G.10

TOP: Identifying the Vertex of a Quadratic Given Graph

547 ANS:
315,000, 180,000, the median better represents value since it is closer to more prices than the mean.

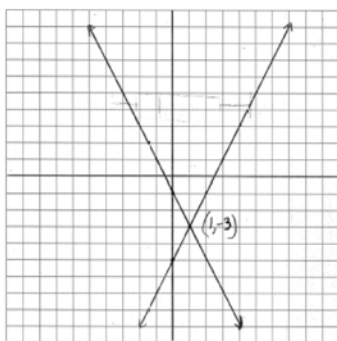
PTS: 4 REF: 060839ia STA: A.S.4
TOP: Frequency Histograms, Bar Graphs and Tables

548 ANS: 2

$$\frac{3}{2x} + \frac{4}{3x} = \frac{9x + 8x}{6x^2} = \frac{17x}{6x^2} = \frac{17}{6x}$$

PTS: 2 REF: 080917ia STA: A.A.17 TOP: Addition and Subtraction of Rationals
549 ANS: 2 PTS: 2 REF: 060904ia STA: A.A.1
TOP: Expressions

550 ANS:



PTS: 4 REF: 080938ia STA: A.G.7 TOP: Solving Linear Systems
551 ANS: 4 PTS: 2 REF: 080827ia STA: A.A.12
TOP: Powers of Powers

552 ANS: 4

$$P(G \text{ or } W) = \frac{4}{8}, P(G \text{ or } B) = \frac{3}{8}, P(Y \text{ or } B) = \frac{4}{8}, P(Y \text{ or } G) = \frac{5}{8}$$

PTS: 2 REF: 060802ia STA: A.S.22 TOP: Geometric Probability
553 ANS:

$$1,512, 1,551.25, 0.025. \quad 36 \times 42 = 1512. \quad 36.5 \times 42.5 = 1551.25. \quad RE = \left| \frac{1512 - 1551.25}{1551.25} \right| \approx 0.025.$$

PTS: 3 REF: 010934ia STA: A.M.3 TOP: Error
KEY: area

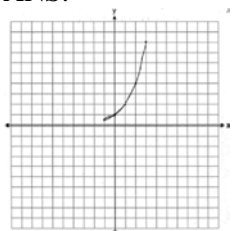
554 ANS:

$$\text{Ann's. } \frac{225}{15} = 15 \text{ mpg is greater than } \frac{290}{23.2} = 12.5 \text{ mpg}$$

PTS: 2 REF: 060831ia STA: A.M.1 TOP: Using Rate
555 ANS: 4 PTS: 2 REF: 080825ia STA: A.A.40
TOP: Systems of Linear Inequalities

- 556 ANS: 3
The other situations are quantitative.
- PTS: 2 REF: 060819ia STA: A.S.1 TOP: Analysis of Data
- 557 ANS: 1
 $8^2 + 15^2 = c^2$
 $c^2 = 289$
 $c = 17$
- PTS: 2 REF: 080906ia STA: A.A.45 TOP: Pythagorean Theorem
- 558 ANS: 1
 $y = mx + b$
 $-6 = (-3)(4) + b$
 $b = 6$
- PTS: 2 REF: 060922ia STA: A.A.34 TOP: Writing Linear Equations
- 559 ANS: 2 PTS: 2 REF: 080930ia STA: A.S.17
TOP: Scatter Plots
- 560 ANS:
 $\frac{6}{25} \cdot \frac{25 - (11 + 5 + 3)}{25}$
- PTS: 2 REF: 011232ia STA: A.S.21 TOP: Experimental Probability
- 561 ANS: 1
Everyone eats, can shop in malls and wear clothes. People who work in a sporting goods store probably watch more sports television than most.
- PTS: 2 REF: 010923ia STA: A.S.3 TOP: Analysis of Data
- 562 ANS: 4
 $\frac{344 \text{ m}}{\text{sec}} \times \frac{60 \text{ sec}}{1 \text{ min}} \times \frac{60 \text{ min}}{1 \text{ hr}} = 1,238,400 \frac{\text{m}}{\text{hr}}$
- PTS: 2 REF: 060911ia STA: A.M.2 TOP: Conversions
KEY: dimensional analysis
- 563 ANS:
5,112. $(12 \times 30 \times 16) - (6 \times 12 \times 9) = 5112$
- PTS: 2 REF: 080932ia STA: A.G.2 TOP: Volume
- 564 ANS: 4 PTS: 2 REF: 060906ia STA: A.A.4
TOP: Modeling Inequalities
- 565 ANS: 3 PTS: 2 REF: 060924ia STA: A.G.8
TOP: Solving Quadratics by Graphing

566 ANS:



. The graph will never intersect the x -axis as $2^x > 0$ for all values of x .

PTS: 3 REF: 080835ia STA: A.G.4 TOP: Graphing Exponential Functions

567 ANS: 3 PTS: 2 REF: 080925ia STA: A.G.4

TOP: Identifying the Equation of a Graph

568 ANS: 3 PTS: 2 REF: fall0706ia STA: A.A.19

TOP: Factoring the Difference of Perfect Squares

569 ANS:

$$\frac{3k^2m^6}{4}$$

PTS: 2 REF: 010932ia STA: A.A.12 TOP: Division of Powers

570 ANS: 3

$$x^2 - 6x = 0$$

$$x(x - 6) = 0$$

$$x = 0 \quad x = 6$$

PTS: 2 REF: 080921ia STA: A.A.27 TOP: Solving Quadratics by Factoring

571 ANS:

$$39, 63. \quad \tan 52 = \frac{50}{x}, \quad \sin 52 = \frac{50}{x}$$

$$x \approx 39 \quad x \approx 63$$

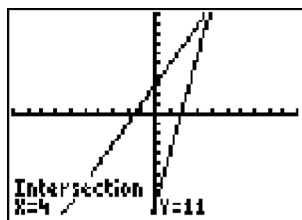
PTS: 4 REF: 060937ia STA: A.A.44 TOP: Using Trigonometry to Find a Side

572 ANS:

Not all of the homework problems are equations. The first problem is an expression.

PTS: 2 REF: 080931ia STA: A.A.3 TOP: Expressions

573 ANS:



4. $3 + 2g = 5g - 9$

$$12 = 3g$$

$$g = 4$$

PTS: 2 REF: fall0732ia STA: A.A.22 TOP: Solving Equations

574 ANS: 3

$$(3 - 1) \times 2 \times 3 = 12$$

PTS: 2 REF: 080905ia STA: A.N.7 TOP: Conditional Probability

575 ANS: 2 PTS: 2 REF: 010915ia STA: A.A.5

TOP: Modeling Equations

576 ANS: 3

An element of the domain, 1, is paired with two different elements of the range, 3 and 7.

PTS: 2 REF: 080919ia STA: A.G.3 TOP: Defining Functions

577 ANS: 3

$$\sqrt{72} = \sqrt{36} \sqrt{2} = 6\sqrt{2}$$

PTS: 2 REF: 010920ia STA: A.N.2 TOP: Simplifying Radicals

578 ANS: 2

$$\frac{6}{4a} - \frac{2}{3a} = \frac{18a - 8a}{12a^2} = \frac{10a}{12a^2} = \frac{5}{6a}$$

PTS: 2 REF: 060929ia STA: A.A.17 TOP: Addition and Subtraction of Rationals

579 ANS: 1

A rooster crows before sunrise, not because of the sun.

PTS: 2 REF: fall0707ia STA: A.S.14 TOP: Analysis of Data

580 ANS: 2

The volume of the cube using Ezra's measurements is $8 (2^3)$. The actual volume is $9.261 (2.1^3)$. The relative error

is $\left| \frac{9.261 - 8}{9.261} \right| \approx 0.14$.

PTS: 2 REF: 060928ia STA: A.M.3 TOP: Error

KEY: volume and surface area

581 ANS:

618.45, 613.44, 0.008. $21.7 \times 28.5 = 618.45$. $21.6 \times 28.4 = 613.44$. $\left| \frac{618.45 - 613.44}{613.44} \right| \approx 0.008$. An error of less than 1% would seem to be insignificant.

PTS: 4 REF: 060838ia STA: A.M.3 TOP: Error

KEY: area

582 ANS:

$$m = 50\text{¢}, p = 15\text{¢}. \quad 3m + 2p = 1.80. \quad 9m + 6p = 5.40 \quad . \quad 4(.50) + 6p = 2.90$$

$$4m + 6p = 2.90 \quad 4m + 6p = 2.90 \quad 6p = .90$$

$$5m = 2.50 \quad p = \$0.15$$

$$m = \$0.50$$

PTS: 4 REF: 080837ia STA: A.A.7 TOP: Writing Linear Systems

583 ANS:

$$6, -2. \quad \frac{x+1}{x} = \frac{-7}{x-12}$$

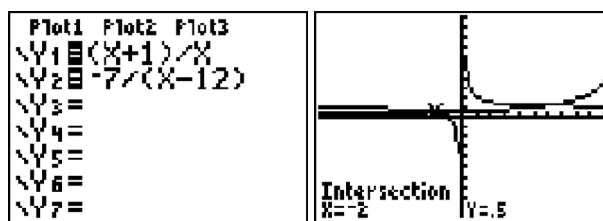
$$(x+1)(x-12) = -7x$$

$$x^2 - 11x - 12 = -7x$$

$$x^2 - 4x - 12 = 0$$

$$(x-6)(x+2) = 0$$

$$x = 6 \text{ or } -2$$



PTS: 4 REF: fall0739ia STA: A.A.26 TOP: Solving Rationals

584 ANS:

$$50. \quad 12 + 10 + 12 + \frac{1}{2}(10\pi) \approx 50$$

PTS: 2 REF: 010931ia STA: A.G.1 TOP: Compositions of Polygons and Circles

KEY: perimeter

585 ANS: 3 PTS: 2 REF: 060926ia STA: A.N.1

TOP: Properties of Reals