

JMAP
REGENTS BY STATE
STANDARD: TOPIC

NY Algebra II Regents Exam Questions from
Spring 2015 to January 2018 sorted by State Standard:
Topic

www.jmap.org

TABLE OF CONTENTS

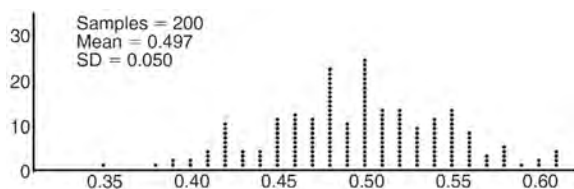
<u>TOPIC</u>	<u>CCSS: SUBTOPIC</u>	<u>QUESTION NUMBER</u>
GRAPHS AND STATISTICS	S.IC.A.2, S.IC.B.3-6: Analysis of Data	1-22
	S.ID.B.6: Regression	23-25
	S.ID.A.4: Normal Distributions	26-32
PROBABILITY	S.CP.A.2, S.CP.B.7: Theoretical Probability.....	33-36
	S.CP.A.3-4, S.CP.B.6: Conditional Probability.....	37-44
RATE	F.IF.B.6: Rate of Change	45-50
QUADRATICS	A.REI.B.4: Solving Quadratics.....	51-55
	A.REI.B.4: Complex Conjugate Root Theorem	56
	G.GPE.A.2: Graphing Quadratic Functions	57-62
SYSTEMS	A.REI.C.6: Solving Linear Systems	63-66
	A.REI.C.7, A.REI.D.11: Quadratic-Linear Systems	67-71
	A.REI.D.11: Other Systems.....	72-81
POWERS	A.SSE.B.3, F.IF.C.8, F.BF.A.1, F.LE.A.2, F.LE.B.5: Modeling Exponential Functions.....	82-95
	F.IF.B.4: Evaluating Logarithmic Expressions	96
	F.IF.C.7: Graphing Exponential and Logarithmic Functions	97-100
	A.CED.A.1, F.LE.A.4: Exponential Equations	101-110
POLYNOMIALS	A.SSE.A.2: Factoring Polynomials	111-118
	A.APR.B.3: Zeros of Polynomials.....	119-122
	F.BF.B.4, F.IF.C.7: Graphing Polynomial Functions.....	123-131
	A.APR.B.2: Remainder Theorem	132-140
	A.APR.C.4: Polynomial Identities.....	141-146
RADICALS	N.RN.A.2: Operations with Radicals.....	147
	A.REI.A.2: Solving Radicals.....	148-154
	N.RN.A.1-2: Radicals and Rational Exponents.....	155-164
	N.CN.A.2: Operations with Complex Numbers	165-171
RATIONALS	A.APR.D.6: Undefined Rationals.....	172
	A.APR.D.6: Expressions with Negative Expressions.....	173
	A.APR.D.6: Rational Expressions	174-180
	A.CED.A.1: Modeling Rationals	181-183
	A.REI.A.2: Solving Rationals	184-190
FUNCTIONS	F.BF.A.1: Operations with Functions.....	191-194
	F.IF.C.9: Comparing Functions	195-197
	F.BF.A.2: Even and Odd Functions.....	198-200
	F.BF.B.4: Inverse of Functions.....	201-205
SEQUENCES AND SERIES	F.LE.A.2, F.IF.A.3, F.BF.A.2: Sequences.....	206-218
	F.BF.B.6: Sigma Notation	219
	A.SSE.B.4: Series	220-225
TRIGONOMETRY	F.TF.A.1-2: Unit Circle	226-227
	F.TF.A.2: Reciprocal Trigonometric Functions	228
	F.TF.A.2: Reference Angles	229
	F.TF.A.2, F.TF.C.8: Determining Trigonometric Functions	230-234
	F.TF.C.8: Simplifying Trigonometric Identities.....	235
	F.TF.B.5: Modeling Trigonometric Functions	236
F.IF.B.4, F.IF.C.7: Graphing Trigonometric Functions.....	237-252	
CONICS	G.GPE.A.1: Equations of Conics.....	253

Algebra II Regents Exam Questions by Common Core State Standard: Topic

GRAPHS AND STATISTICS

S.IC.A.2, S.IC.B.3-6: ANALYSIS OF DATA

- Anne has a coin. She does not know if it is a fair coin. She flipped the coin 100 times and obtained 73 heads and 27 tails. She ran a computer simulation of 200 samples of 100 fair coin flips. The output of the proportion of heads is shown below.



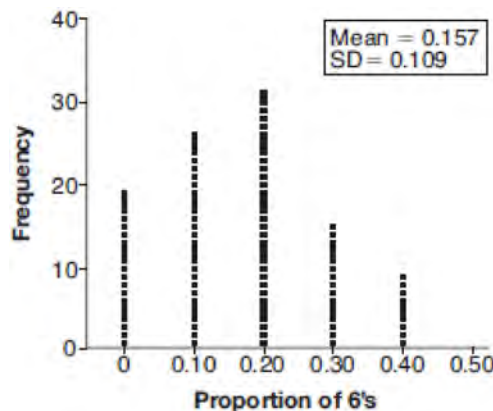
Given the results of her coin flips and of her computer simulation, which statement is most accurate?

- 73 of the computer's next 100 coin flips will be heads.
 - 50 of her next 100 coin flips will be heads.
 - Her coin is not fair.
 - Her coin is fair.
- A game spinner is divided into 6 equally sized regions, as shown in the diagram below.



For Miles to win, the spinner must land on the number 6. After spinning the spinner 10 times, and losing all 10 times, Miles complained that the spinner is unfair. At home, his dad ran 100 simulations of spinning the spinner 10 times, assuming the probability of winning each spin is $\frac{1}{6}$.

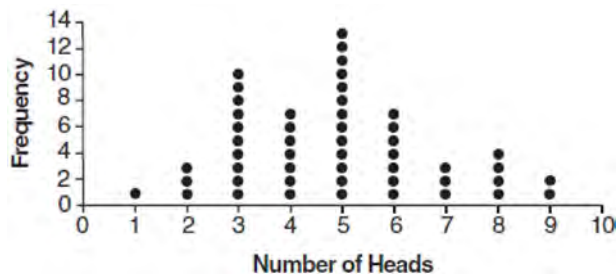
The output of the simulation is shown in the diagram below.



Which explanation is appropriate for Miles and his dad to make?

- The spinner was likely unfair, since the number 6 failed to occur in about 20% of the simulations.
- The spinner was likely unfair, since the spinner should have landed on the number 6 by the sixth spin.
- The spinner was likely not unfair, since the number 6 failed to occur in about 20% of the simulations.
- The spinner was likely not unfair, since in the output the player wins once or twice in the majority of the simulations.

- 3 The results of simulating tossing a coin 10 times, recording the number of heads, and repeating this 50 times are shown in the graph below.

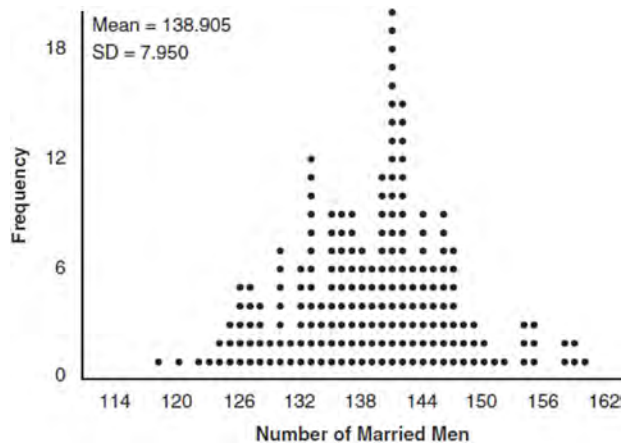


Based on the results of the simulation, which statement is *false*?

- 1 Five heads occurred most often, which is consistent with the theoretical probability of obtaining a heads.
 - 2 Eight heads is unusual, as it falls outside the middle 95% of the data.
 - 3 Obtaining three heads or fewer occurred 28% of the time.
 - 4 Seven heads is not unusual, as it falls within the middle 95% of the data.
- 4 An orange-juice processing plant receives a truckload of oranges. The quality control team randomly chooses three pails of oranges, each containing 50 oranges, from the truckload. Identify the sample and the population in the given scenario. State *one* conclusion that the quality control team could make about the population if 5% of the sample was found to be unsatisfactory.

- 5 Mrs. Jones had hundreds of jelly beans in a bag that contained equal numbers of six different flavors. Her student randomly selected four jelly beans and they were all black licorice. Her student complained and said "What are the odds I got all of that kind?" Mrs. Jones replied, "simulate rolling a die 250 times and tell me if four black licorice jelly beans is unusual." Explain how this simulation could be used to solve the problem.

- 6 In a random sample of 250 men in the United States, age 21 or older, 139 are married. The graph below simulated samples of 250 men, 200 times, assuming that 139 of the men are married.



- a) Based on the simulation, create an interval in which the middle 95% of the number of married men may fall. Round your answer to the *nearest integer*.
 - b) A study claims "50 percent of men 21 and older in the United States are married." Do your results from part a contradict this claim? Explain.
- 7 Describe how a controlled experiment can be created to examine the effect of ingredient X in a toothpaste.

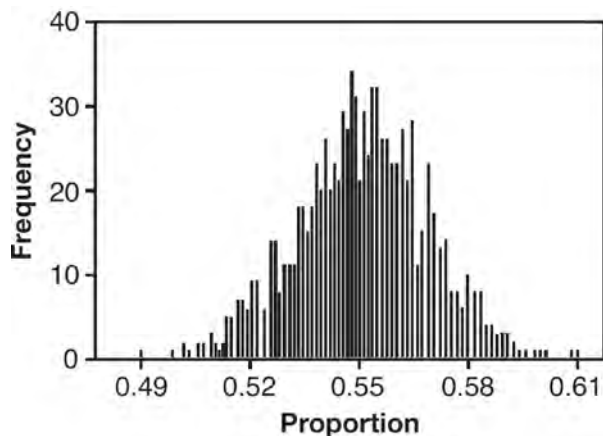
Algebra II Regents Exam Questions by State Standard: Topic

www.jmap.org

- 8 Which statement(s) about statistical studies is true?
- I. A survey of all English classes in a high school would be a good sample to determine the number of hours students throughout the school spend studying.
 - II. A survey of all ninth graders in a high school would be a good sample to determine the number of student parking spaces needed at that high school.
 - III. A survey of all students in one lunch period in a high school would be a good sample to determine the number of hours adults spend on social media websites.
 - IV. A survey of all Calculus students in a high school would be a good sample to determine the number of students throughout the school who don't like math.
- 1 I, only
 - 2 II, only
 - 3 I and III
 - 4 III and IV
- 9 Which statement about statistical analysis is *false*?
- 1 Experiments can suggest patterns and relationships in data.
 - 2 Experiments can determine cause and effect relationships.
 - 3 Observational studies can determine cause and effect relationships.
 - 4 Observational studies can suggest patterns and relationships in data.
- 10 Cheap and Fast gas station is conducting a consumer satisfaction survey. Which method of collecting data would most likely lead to a biased sample?
- 1 interviewing every 5th customer to come into the station
 - 2 interviewing customers chosen at random by a computer at the checkout
 - 3 interviewing customers who call an 800 number posted on the customers' receipts
 - 4 interviewing every customer who comes into the station on a day of the week chosen at random out of a hat
- 11 Which scenario is best described as an observational study?
- 1 For a class project, students in Health class ask every tenth student entering the school if they eat breakfast in the morning.
 - 2 A social researcher wants to learn whether or not there is a link between attendance and grades. She gathers data from 15 school districts.
 - 3 A researcher wants to learn whether or not there is a link between children's daily amount of physical activity and their overall energy level. During lunch at the local high school, she distributed a short questionnaire to students in the cafeteria.
 - 4 Sixty seniors taking a course in Advanced Algebra Concepts are randomly divided into two classes. One class uses a graphing calculator all the time, and the other class never uses graphing calculators. A guidance counselor wants to determine whether there is a link between graphing calculator use and students' final exam grades.

- 12 The operator of the local mall wants to find out how many of the mall's employees make purchases in the food court when they are working. She hopes to use these data to increase the rent and attract new food vendors. In total, there are 1023 employees who work at the mall. The best method to obtain a random sample of the employees would be to survey
- 1 all 170 employees at each of the larger stores
 - 2 50% of the 90 employees of the food court
 - 3 every employee
 - 4 every 30th employee entering each mall entrance for one week

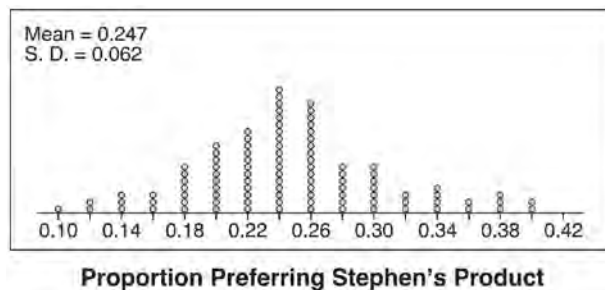
- 13 A candidate for political office commissioned a poll. His staff received responses from 900 likely voters and 55% of them said they would vote for the candidate. The staff then conducted a simulation of 1000 more polls of 900 voters, assuming that 55% of voters would vote for their candidate. The output of the simulation is shown in the diagram below.



Given this output, and assuming a 95% confidence level, the margin of error for the poll is closest to

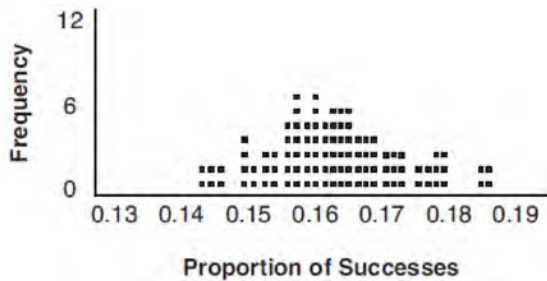
- 1 0.01
- 2 0.03
- 3 0.06
- 4 0.12

- 14 Stephen's Beverage Company is considering whether to produce a new brand of cola. The company will launch the product if at least 25% of cola drinkers will buy the product. Fifty cola drinkers are randomly selected to take a blind taste-test of products *A*, *B*, and the new product. Nine out of fifty participants preferred Stephen's new cola to products *A* and *B*. The company then devised a simulation based on the requirement that 25% of cola drinkers will buy the product. Each dot in the graph shown below represents the proportion of people who preferred Stephen's new product, each of sample size 50, simulated 100 times.



Assume the set of data is approximately normal and the company wants to be 95% confident of its results. Does the sample proportion obtained from the blind taste-test, nine out of fifty, fall within the margin of error developed from the simulation? Justify your answer. The company decides to continue developing the product even though only nine out of fifty participants preferred its brand of cola in the taste-test. Describe how the simulation data could be used to support this decision.

- 15 A study conducted in 2004 in New York City found that 212 out of 1334 participants had hypertension. Kim ran a simulation of 100 studies based on these data. The output of the simulation is shown in the diagram below.



At a 95% confidence level, the proportion of New York City residents with hypertension and the margin of error are closest to

- 1 proportion $\approx .16$; margin of error $\approx .01$
- 2 proportion $\approx .16$; margin of error $\approx .02$
- 3 proportion $\approx .01$; margin of error $\approx .16$
- 4 proportion $\approx .02$; margin of error $\approx .16$

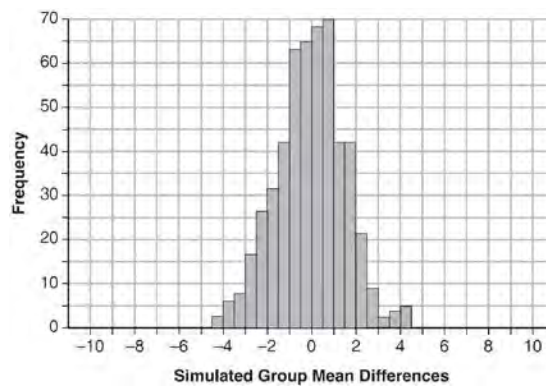
Algebra II Regents Exam Questions by State Standard: Topic

www.jmap.org

- 16 Seventy-two students are randomly divided into two equally-sized study groups. Each member of the first group (group 1) is to meet with a tutor after school twice each week for one hour. The second group (group 2), is given an online subscription to a tutorial account that they can access for a maximum of two hours each week. Students in both groups are given the same tests during the year. A summary of the two groups' final grades is shown below:

	Group 1	Group 2
\bar{x}	80.16	83.8
S_x	6.9	5.2

Calculate the mean difference in the final grades (group 1 – group 2) and explain its meaning in the context of the problem. A simulation was conducted in which the students' final grades were rerandomized 500 times. The results are shown below.

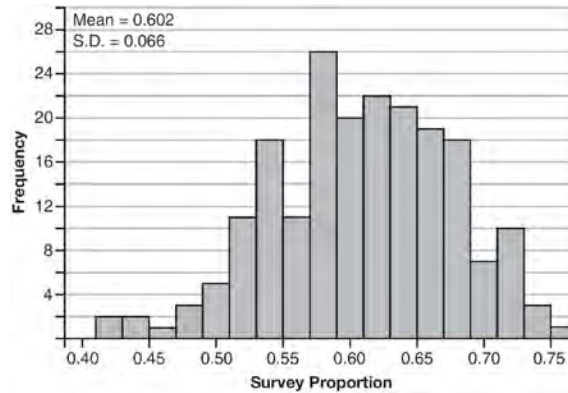


Use the simulation to determine if there is a significant difference in the final grades. Explain your answer.

Algebra II Regents Exam Questions by State Standard: Topic

www.jmap.org

- 17 Fifty-five students attending the prom were randomly selected to participate in a survey about the music choice at the prom. Sixty percent responded that a DJ would be preferred over a band. Members of the prom committee thought that the vote would have 50% for the DJ and 50% for the band. A simulation was run 200 times, each of sample size 55, based on the premise that 60% of the students would prefer a DJ. The approximate normal simulation results are shown below.



Using the results of the simulation, determine a plausible interval containing the middle 95% of the data. Round all values to the *nearest hundredth*. Members of the prom committee are concerned that a vote of all students attending the prom may produce a 50% – 50% split. Explain what statistical evidence supports this concern.

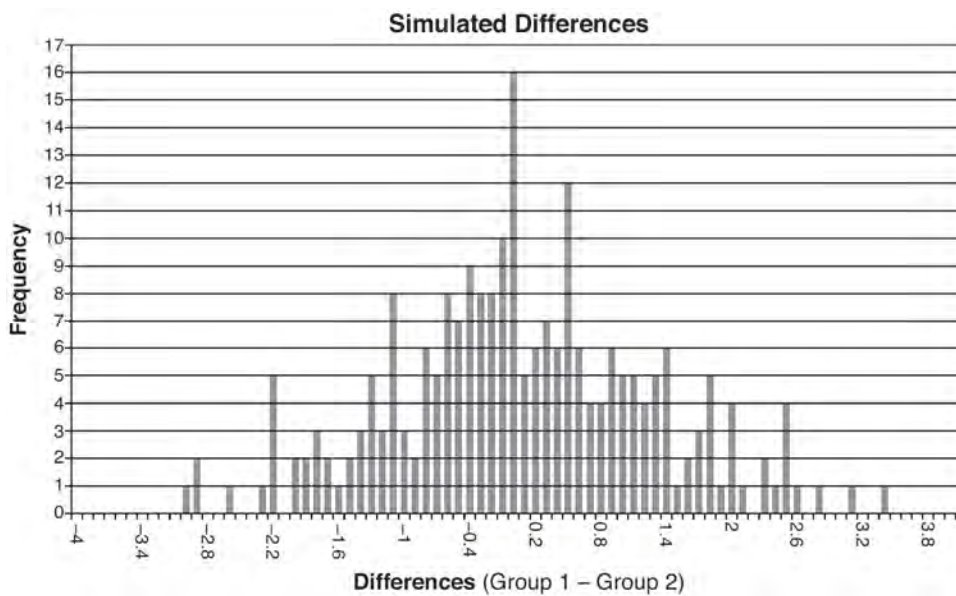
Algebra II Regents Exam Questions by State Standard: Topic

www.jmap.org

- 18 Ayva designed an experiment to determine the effect of a new energy drink on a group of 20 volunteer students. Ten students were randomly selected to form group 1 while the remaining 10 made up group 2. Each student in group 1 drank one energy drink, and each student in group 2 drank one cola drink. Ten minutes later, their times were recorded for reading the same paragraph of a novel. The results of the experiment are shown below.

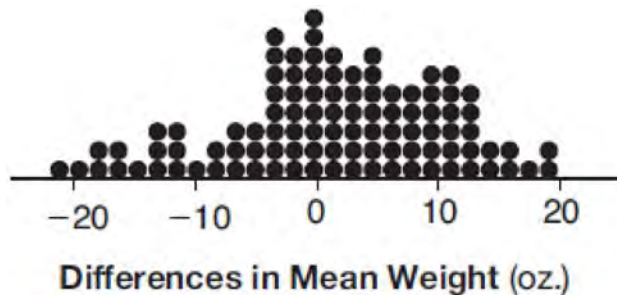
Group 1 (seconds)	Group 2 (seconds)
17.4	23.3
18.1	18.8
18.2	22.1
19.6	12.7
18.6	16.9
16.2	24.4
16.1	21.2
15.3	21.2
17.8	16.3
19.7	14.5
Mean = 17.7	Mean = 19.1

Ayva thinks drinking energy drinks makes students read faster. Using information from the experimental design or the results, explain why Ayva's hypothesis may be *incorrect*. Using the given results, Ayva randomly mixes the 20 reading times, splits them into two groups of 10, and simulates the difference of the means 232 times.



Ayva has decided that the difference in mean reading times is not an unusual occurrence. Support her decision using the results of the simulation. Explain your reasoning.

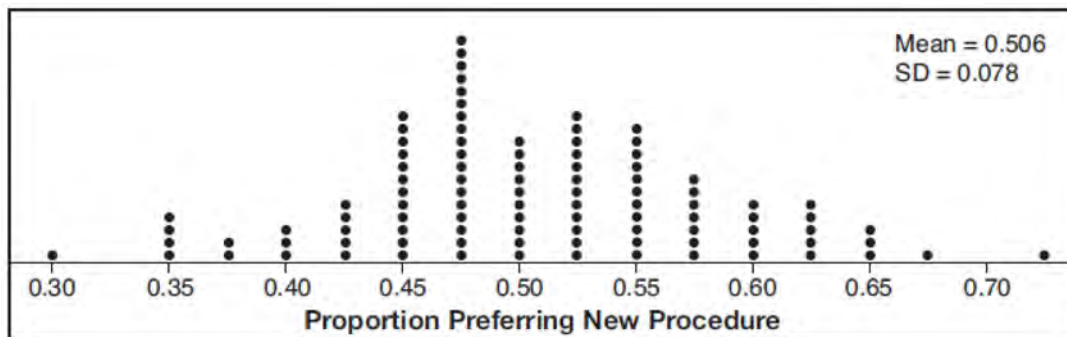
- 19 Gabriel performed an experiment to see if planting 13 tomato plants in black plastic mulch leads to larger tomatoes than if 13 plants are planted without mulch. He observed that the average weight of the tomatoes from tomato plants grown in black plastic mulch was 5 ounces greater than those from the plants planted without mulch. To determine if the observed difference is statistically significant, he rerandomized the tomato groups 100 times to study these random differences in the mean weights. The output of his simulation is summarized in the dotplot below.



Given these results, what is an appropriate inference that can be drawn?

- | | |
|---|---|
| <p>1 There was no effect observed between the two groups.</p> <p>2 There was an effect observed that could be due to the random assignment of plants to the groups.</p> | <p>3 There is strong evidence to support the hypothesis that tomatoes from plants planted in black plastic mulch are larger than those planted without mulch.</p> <p>4 There is strong evidence to support the hypothesis that tomatoes from plants planted without mulch are larger than those planted in black plastic mulch.</p> |
|---|---|

- 20 Charlie's Automotive Dealership is considering implementing a new check-in procedure for customers who are bringing their vehicles for routine maintenance. The dealership will launch the procedure if 50% or more of the customers give the new procedure a favorable rating when compared to the current procedure. The dealership devises a simulation based on the minimal requirement that 50% of the customers prefer the new procedure. Each dot on the graph below represents the proportion of the customers who preferred the new check-in procedure, each of sample size 40, simulated 100 times.



Assume the set of data is approximately normal and the dealership wants to be 95% confident of its results. Determine an interval containing the plausible sample values for which the dealership will launch the new procedure. Round your answer to the *nearest hundredth*. Forty customers are selected randomly to undergo the new check-in procedure and the proportion of customers who prefer the new procedure is 32.5%. The dealership decides *not* to implement the new check-in procedure based on the results of the study. Use statistical evidence to explain this decision.

- 21 Elizabeth waited for 6 minutes at the drive thru at her favorite fast-food restaurant the last time she visited. She was upset about having to wait that long and notified the manager. The manager assured her that her experience was very unusual and that it would not happen again. A study of customers commissioned by this restaurant found an approximately normal distribution of results. The mean wait time was 226 seconds and the standard deviation was 38 seconds. Given these data, and using a 95% level of confidence, was Elizabeth's wait time unusual? Justify your answer.
- 22 A public opinion poll was conducted on behalf of Mayor Ortega's reelection campaign shortly before the election. 264 out of 550 likely voters said they would vote for Mayor Ortega; the rest said they would vote for his opponent. Which statement is *least* appropriate to make, according to the results of the poll?
- 1 There is a 48% chance that Mayor Ortega will win the election.
 - 2 The point estimate (\hat{p}) of voters who will vote for Mayor Ortega is 48%.
 - 3 It is most likely that between 44% and 52% of voters will vote for Mayor Ortega.
 - 4 Due to the margin of error, an inference cannot be made regarding whether Mayor Ortega or his opponent is most likely to win the election.

S.ID.B.6: REGRESSION

- 23 Using a microscope, a researcher observed and recorded the number of bacteria spores on a large sample of uniformly sized pieces of meat kept at room temperature. A summary of the data she recorded is shown in the table below.

Hours (x)	Average Number of Spores (y)
0	4
0.5	10
1	15
2	60
3	260
4	1130
6	16,380

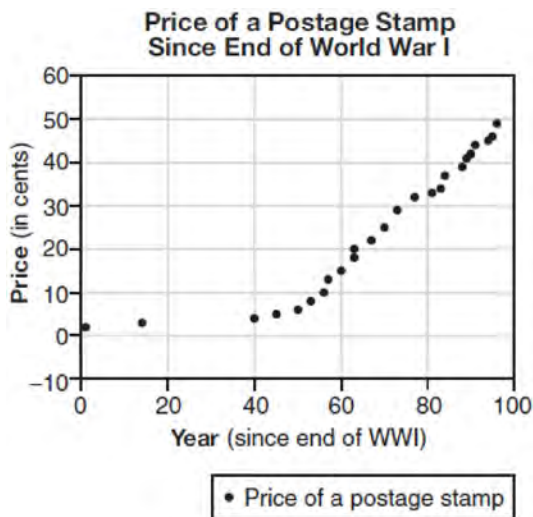
Using these data, write an exponential regression equation, rounding all values to the *nearest thousandth*. The researcher knows that people are likely to suffer from food-borne illness if the number of spores exceeds 100. Using the exponential regression equation, determine the maximum amount of time, to the *nearest quarter hour*, that the meat can be kept at room temperature safely.

- 24 A runner is using a nine-week training app to prepare for a "fun run." The table below represents the amount of the program completed, A , and the distance covered in a session, D , in miles.

A	$\frac{4}{9}$	$\frac{5}{9}$	$\frac{6}{9}$	$\frac{8}{9}$	1
D	2	2	2.25	3	3.25

Based on these data, write an exponential regression equation, rounded to the *nearest thousandth*, to model the distance the runner is able to complete in a session as she continues through the nine-week program.

- 25 The price of a postage stamp in the years since the end of World War I is shown in the scatterplot below.



The equation that best models the price, in cents, of a postage stamp based on these data is

- 1 $y = 0.59x - 14.82$
- 2 $y = 1.04(1.43)^x$
- 3 $y = 1.43(1.04)^x$
- 4 $y = 24 \sin(14x) + 25$

S.ID.A.4: NORMAL DISTRIBUTIONS

- 26 Two versions of a standardized test are given, an April version and a May version. The statistics for the April version show a mean score of 480 and a standard deviation of 24. The statistics for the May version show a mean score of 510 and a standard deviation of 20. Assume the scores are normally distributed. Joanne took the April version and scored in the interval 510-540. What is the probability, to the *nearest ten thousandth*, that a test paper selected at random from the April version scored in the same interval? Maria took the May version. In what interval must Maria score to claim she scored as well as Joanne?

- 27 The heights of women in the United States are normally distributed with a mean of 64 inches and a standard deviation of 2.75 inches. The percent of women whose heights are between 64 and 69.5 inches, to the *nearest whole percent*, is

- 1 6
- 2 48
- 3 68
- 4 95

- 28 The lifespan of a 60-watt lightbulb produced by a company is normally distributed with a mean of 1450 hours and a standard deviation of 8.5 hours. If a 60-watt lightbulb produced by this company is selected at random, what is the probability that its lifespan will be between 1440 and 1465 hours?

- 1 0.3803
- 2 0.4612
- 3 0.8415
- 4 0.9612

- 29 In 2013, approximately 1.6 million students took the Critical Reading portion of the SAT exam. The mean score, the modal score, and the standard deviation were calculated to be 496, 430, and 115, respectively. Which interval reflects 95% of the Critical Reading scores?

- 1 430 ± 115
- 2 430 ± 230
- 3 496 ± 115
- 4 496 ± 230

- 30 The weight of a bag of pears at the local market averages 8 pounds with a standard deviation of 0.5 pound. The weights of all the bags of pears at the market closely follow a normal distribution. Determine what percentage of bags, to the *nearest integer*, weighed *less* than 8.25 pounds.

- 31 The distribution of the diameters of ball bearings made under a given manufacturing process is normally distributed with a mean of 4 cm and a standard deviation of 0.2 cm. What proportion of the ball bearings will have a diameter less than 3.7 cm?
- 1 0.0668
 - 2 0.4332
 - 3 0.8664
 - 4 0.9500
- 32 There are 440 students at Thomas Paine High School enrolled in U.S. History. On the April report card, the students' grades are approximately normally distributed with a mean of 79 and a standard deviation of 7. Students who earn a grade less than or equal to 64.9 must attend summer school. The number of students who must attend summer school for U.S. History is closest to
- 1 3
 - 2 5
 - 3 10
 - 4 22
- 33 In contract negotiations between a local government agency and its workers, it is estimated that there is a 50% chance that an agreement will be reached on the salaries of the workers. It is estimated that there is a 70% chance that there will be an agreement on the insurance benefits. There is a 20% chance that no agreement will be reached on either issue. Find the probability that an agreement will be reached on *both* issues. Based on this answer, determine whether the agreement on salaries and the agreement on insurance are independent events. Justify your answer.
- 34 Given events A and B , such that $P(A) = 0.6$, $P(B) = 0.5$, and $P(A \cup B) = 0.8$, determine whether A and B are independent or dependent.
- 35 A suburban high school has a population of 1376 students. The number of students who participate in sports is 649. The number of students who participate in music is 433. If the probability that a student participates in either sports or music is $\frac{974}{1376}$, what is the probability that a student participates in both sports and music?
- 36 The probability that Gary and Jane have a child with blue eyes is 0.25, and the probability that they have a child with blond hair is 0.5. The probability that they have a child with both blue eyes and blond hair is 0.125. Given this information, the events blue eyes and blond hair are
- I: dependent
 - II: independent
 - III: mutually exclusive
- 1 I, only
 - 2 II, only
 - 3 I and III
 - 4 II and III

PROBABILITY

S.CP.A.2, S.CP.B.7: THEORETICAL PROBABILITY

- 33 In contract negotiations between a local government agency and its workers, it is estimated that there is a 50% chance that an agreement will be reached on the salaries of the workers. It is estimated that there is a 70% chance that there will be an agreement on the insurance benefits. There is a 20% chance that no agreement will be reached on either issue. Find the probability that an agreement will be reached on *both* issues. Based on this answer, determine whether the agreement on salaries and the agreement on insurance are independent events. Justify your answer.

S.CP.A.3-4, S.CP.B.6: CONDITIONAL PROBABILITY

- 37 Sean's team has a baseball game tomorrow. He pitches 50% of the games. There is a 40% chance of rain during the game tomorrow. If the probability that it rains given that Sean pitches is 40%, it can be concluded that these two events are
- 1 independent
 - 2 dependent
 - 3 mutually exclusive
 - 4 complements
- 38 A student is chosen at random from the student body at a given high school. The probability that the student selects Math as the favorite subject is $\frac{1}{4}$. The probability that the student chosen is a junior is $\frac{116}{459}$. If the probability that the student selected is a junior or that the student chooses Math as the favorite subject is $\frac{47}{108}$, what is the exact probability that the student selected is a junior whose favorite subject is Math? Are the events "the student is a junior" and "the student's favorite subject is Math" independent of each other? Explain your answer.

- 39 The set of data in the table below shows the results of a survey on the number of messages that people of different ages text on their cell phones each month.

Age Group	Text Messages per Month		
	0-10	11-50	Over 50
15-18	4	37	68
19-22	6	25	87
23-60	25	47	157

If a person from this survey is selected at random, what is the probability that the person texts over 50 messages per month given that the person is between the ages of 23 and 60?

- 1 $\frac{157}{229}$
- 2 $\frac{157}{312}$
- 3 $\frac{157}{384}$
- 4 $\frac{157}{456}$

- 40 The results of a poll of 200 students are shown in the table below:

	Preferred Music Style		
	Techno	Rap	Country
Female	54	25	27
Male	36	40	18

For this group of students, do these data suggest that gender and preferred music styles are independent of each other? Justify your answer.

- 41 The results of a survey of the student body at Central High School about television viewing preferences are shown below.

	Comedy Series	Drama Series	Reality Series	Total
Males	95	65	70	230
Females	80	70	110	260
Total	175	135	180	490

Are the events “student is a male” and “student prefers reality series” independent of each other? Justify your answer.

- 42 Data collected about jogging from students with two older siblings are shown in the table below.

	Neither Sibling Jogs	One Sibling Jogs	Both Siblings Jogs
Student Does Not Jog	1168	1823	1380
Student Jogs	188	416	400

Using these data, determine whether a student with two older siblings is more likely to jog if one sibling jogs or if both siblings jog. Justify your answer.

- 43 The guidance department has reported that of the senior class, 2.3% are members of key club, K , 8.6% are enrolled in AP Physics, P , and 1.9% are in both. Determine the probability of P given K , to the nearest tenth of a percent. The principal would like a basic interpretation of these results. Write a statement relating your calculated probabilities to student enrollment in the given situation.
- 44 A study was designed to test the effectiveness of a new drug. Half of the volunteers received the drug. The other half received a sugar pill. The probability of a volunteer receiving the drug and getting well was 40%. What is the probability of a volunteer getting well, given that the volunteer received the drug?

RATE**F.IF.B.6: RATE OF CHANGE**

- 45 Which function shown below has a greater average rate of change on the interval $[-2,4]$? Justify your answer.

x	f(x)
-4	0.3125
-3	0.625
-2	1.25
-1	2.5
0	5
1	10
2	20
3	40
4	80
5	160
6	320

$$g(x) = 4x^3 - 5x^2 + 3$$

- 46 Joelle has a credit card that has a 19.2% annual interest rate compounded monthly. She owes a total balance of B dollars after m months. Assuming she makes no payments on her account, the table below illustrates the balance she owes after m months.

m	B
0	100.00
10	1172.00
19	1352.00
36	1770.80
60	2591.90
69	2990.00
72	3135.80
73	3186.00

Over which interval of time is her average rate of change for the balance on her credit card account the greatest?

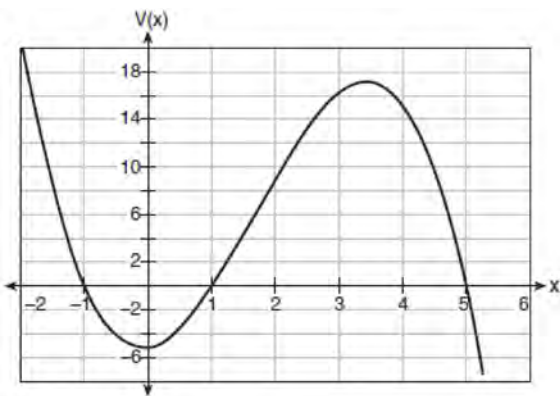
- | | | | |
|---|----------------------|---|----------------------|
| 1 | month 10 to month 60 | 3 | month 36 to month 72 |
| 2 | month 19 to month 69 | 4 | month 60 to month 73 |

- 47 The distance needed to stop a car after applying the brakes varies directly with the square of the car's speed. The table below shows stopping distances for various speeds.

Speed (mph)	10	20	30	40	50	60	70
Distance (ft)	6.25	25	56.25	100	156.25	225	306.25

Determine the average rate of change in braking distance, in ft/mph, between one car traveling at 50 mph and one traveling at 70 mph. Explain what this rate of change means as it relates to braking distance.

- 48 A cardboard box manufacturing company is building boxes with length represented by $x + 1$, width by $5 - x$, and height by $x - 1$. The volume of the box is modeled by the function below.



Over which interval is the volume of the box changing at the fastest average rate?

- 1 [1,2]
- 2 [1,3.5]
- 3 [1,5]
- 4 [0,3.5]

- 49 The function $f(x) = 2^{-0.25x} \cdot \sin\left(\frac{\pi}{2}x\right)$ represents a damped sound wave function. What is the average rate of change for this function on the interval $[-7,7]$, to the nearest hundredth?

- 1 -3.66
- 2 -0.30
- 3 -0.26
- 4 3.36

- 50 The value of a new car depreciates over time. Greg purchased a new car in June 2011. The value, V , of his car after t years can be modeled by the equation

$$\log_{0.8}\left(\frac{V}{17000}\right) = t.$$

What is the average decreasing rate of change per year of the value of the car from June 2012 to June 2014, to the nearest ten dollars per year?

- 1 1960
- 2 2180
- 3 2450
- 4 2770

QUADRATICS

A.REI.B.4: SOLVING QUADRATICS

51 The solutions to the equation $-\frac{1}{2}x^2 = -6x + 20$ are

- 1 $-6 \pm 2i$
- 2 $-6 \pm 2\sqrt{19}$
- 3 $6 \pm 2i$
- 4 $6 \pm 2\sqrt{19}$

52 A solution of the equation $2x^2 + 3x + 2 = 0$ is

- 1 $-\frac{3}{4} + \frac{1}{4}i\sqrt{7}$
- 2 $-\frac{3}{4} + \frac{1}{4}i$
- 3 $-\frac{3}{4} + \frac{1}{4}\sqrt{7}$
- 4 $\frac{1}{2}$

53 The solution to the equation $18x^2 - 24x + 87 = 0$ is

- 1 $-\frac{2}{3} \pm 6i\sqrt{158}$
- 2 $-\frac{2}{3} \pm \frac{1}{6}i\sqrt{158}$
- 3 $\frac{2}{3} \pm 6i\sqrt{158}$
- 4 $\frac{2}{3} \pm \frac{1}{6}i\sqrt{158}$

54 The roots of the equation $x^2 + 2x + 5 = 0$ are

- 1 -3 and 1
- 2 -1 , only
- 3 $-1 + 2i$ and $-1 - 2i$
- 4 $-1 + 4i$ and $-1 - 4i$

55 The solution to the equation $4x^2 + 98 = 0$ is

- 1 ± 7
- 2 $\pm 7i$
- 3 $\pm \frac{7\sqrt{2}}{2}$
- 4 $\pm \frac{7i\sqrt{2}}{2}$

A.REI.B.4: COMPLEX CONJUGATE ROOT THEOREM

56 Which equation has $1 - i$ as a solution?

- 1 $x^2 + 2x - 2 = 0$
- 2 $x^2 + 2x + 2 = 0$
- 3 $x^2 - 2x - 2 = 0$
- 4 $x^2 - 2x + 2 = 0$

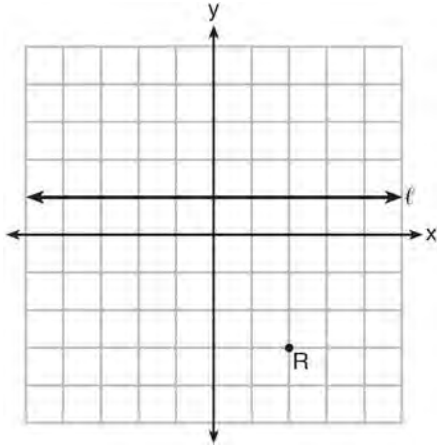
G.GPE.A.2: GRAPHING QUADRATIC FUNCTIONS

57 Which equation represents a parabola with a focus of $(0, 4)$ and a directrix of $y = 2$?

- 1 $y = x^2 + 3$
- 2 $y = -x^2 + 1$
- 3 $y = \frac{x^2}{2} + 3$
- 4 $y = \frac{x^2}{4} + 3$

58 The directrix of the parabola $12(y + 3) = (x - 4)^2$ has the equation $y = -6$. Find the coordinates of the focus of the parabola.

- 59 Which equation represents the set of points equidistant from line ℓ and point R shown on the graph below?



- 1 $y = -\frac{1}{8}(x+2)^2 + 1$
 - 2 $y = -\frac{1}{8}(x+2)^2 - 1$
 - 3 $y = -\frac{1}{8}(x-2)^2 + 1$
 - 4 $y = -\frac{1}{8}(x-2)^2 - 1$
- 60 A parabola has its focus at $(1,2)$ and its directrix is $y = -2$. The equation of this parabola could be

- 1 $y = 8(x+1)^2$
- 2 $y = \frac{1}{8}(x+1)^2$
- 3 $y = 8(x-1)^2$
- 4 $y = \frac{1}{8}(x-1)^2$

- 61 Which equation represents a parabola with the focus at $(0,-1)$ and the directrix of $y = 1$?

- 1 $x^2 = -8y$
- 2 $x^2 = -4y$
- 3 $x^2 = 8y$
- 4 $x^2 = 4y$

- 62 What is the equation of the directrix for the parabola $-8(y-3) = (x+4)^2$?

- 1 $y = 5$
- 2 $y = 1$
- 3 $y = -2$
- 4 $y = -6$

SYSTEMS

A.REI.C.6: SOLVING LINEAR SYSTEMS

- 63 Solve the following system of equations algebraically for all values of x , y , and z :

$$x + 3y + 5z = 45$$

$$6x - 3y + 2z = -10$$

$$-2x + 3y + 8z = 72$$

- 64 Which value is *not* contained in the solution of the system shown below?

$$a + 5b - c = -20$$

$$4a - 5b + 4c = 19$$

$$-a - 5b - 5c = 2$$

- 1 -2
- 2 2
- 3 3
- 4 -3

- 65 Solve the following system of equations algebraically for all values of x , y , and z :

$$x + y + z = 1$$

$$2x + 4y + 6z = 2$$

$$-x + 3y - 5z = 11$$

- 66 For the system shown below, what is the value of z ?

$$y = -2x + 14$$

$$3x - 4z = 2$$

$$3x - y = 16$$

- 1 5
- 2 2
- 3 6
- 4 4

A.REI.C.7, A.REI.D.11: QUADRATIC-LINEAR SYSTEMS

- 67 Algebraically determine the values of x that satisfy the system of equations below.

$$y = -2x + 1$$

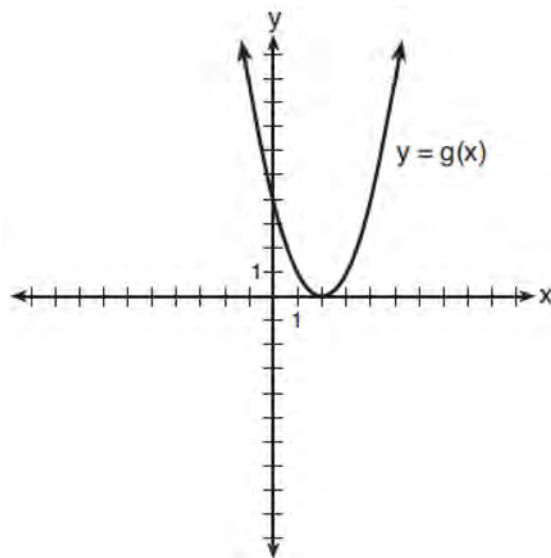
$$y = -2x^2 + 3x + 1$$

- 68 Solve the system of equations shown below algebraically.

$$(x - 3)^2 + (y + 2)^2 = 16$$

$$2x + 2y = 10$$

- 69 What is the solution to the system of equations $y = 3x - 2$ and $y = g(x)$ where $g(x)$ is defined by the function below?



- 1 $\{(0, -2)\}$
- 2 $\{(0, -2), (1, 6)\}$
- 3 $\{(1, 6)\}$
- 4 $\{(1, 1), (6, 16)\}$

- 70 Consider the system shown below.

$$2x - y = 4$$

$$(x + 3)^2 + y^2 = 8$$

The two solutions of the system can be described as

- 1 both imaginary
- 2 both irrational
- 3 both rational
- 4 one rational and one irrational

- 71 Sally’s high school is planning their spring musical. The revenue, R , generated can be determined by the function $R(t) = -33t^2 + 360t$, where t represents the price of a ticket. The production cost, C , of the musical is represented by the function $C(t) = 700 + 5t$. What is the highest ticket price, to the *nearest dollar*, they can charge in order to *not* lose money on the event?
- 1 $t = 3$
 - 2 $t = 5$
 - 3 $t = 8$
 - 4 $t = 11$

A.REI.D.11: OTHER SYSTEMS


72 Given: $h(x) = \frac{2}{9}x^3 + \frac{8}{9}x^2 - \frac{16}{13}x + 2$

$$k(x) = -|0.7x| + 5$$

State the solutions to the equation $h(x) = k(x)$, rounded to the *nearest hundredth*.

- 73 Which value, to the *nearest tenth*, is *not* a solution of $p(x) = q(x)$ if $p(x) = x^3 + 3x^2 - 3x - 1$ and $q(x) = 3x + 8$?
- 1 -3.9
 - 2 -1.1
 - 3 2.1
 - 4 4.7

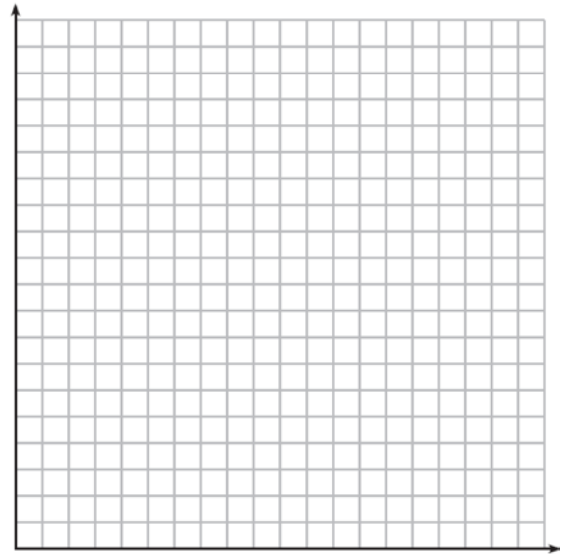
- 74 Drugs break down in the human body at different rates and therefore must be prescribed by doctors carefully to prevent complications, such as overdosing. The breakdown of a drug is represented by the function $N(t) = N_0(e)^{-rt}$, where $N(t)$ is the amount left in the body, N_0 is the initial dosage, r is the decay rate, and t is time in hours. Patient A, $A(t)$, is given 800 milligrams of a drug with a decay rate of 0.347. Patient B, $B(t)$, is given 400 milligrams of another drug with a decay rate of 0.231. Write two functions, $A(t)$ and $B(t)$, to represent the breakdown of the respective drug given to each patient. Graph each function on the set of axes below.



To the *nearest hour*, t , when does the amount of the given drug remaining in patient B begin to exceed the amount of the given drug remaining in patient A? The doctor will allow patient A to take another 800 milligram dose of the drug once only 15% of the original dose is left in the body. Determine, to the *nearest tenth of an hour*, how long patient A will have to wait to take another 800 milligram dose of the drug.

- 75 To the *nearest tenth*, the value of x that satisfies $2^x = -2x + 11$ is
- 1 2.5
 - 2 2.6
 - 3 5.8
 - 4 5.9
- 76 When $g(x) = \frac{2}{x+2}$ and $h(x) = \log(x+1) + 3$ are graphed on the same set of axes, which coordinates best approximate their point of intersection?
- 1 $(-0.9, 1.8)$
 - 2 $(-0.9, 1.9)$
 - 3 $(1.4, 3.3)$
 - 4 $(1.4, 3.4)$
- 77 Pedro and Bobby each own an ant farm. Pedro starts with 100 ants and says his farm is growing exponentially at a rate of 15% per month. Bobby starts with 350 ants and says his farm is steadily decreasing by 5 ants per month. Assuming both boys are accurate in describing the population of their ant farms, after how many months will they both have approximately the same number of ants?
- 1 7
 - 2 8
 - 3 13
 - 4 36
- 78 If $f(x) = 3|x| - 1$ and $g(x) = 0.03x^3 - x + 1$, an approximate solution for the equation $f(x) = g(x)$ is
- 1 1.96
 - 2 11.29
 - 3 $(-0.99, 1.96)$
 - 4 $(11.29, 32.87)$

- 79 The value of a certain small passenger car based on its use in years is modeled by $V(t) = 28482.698(0.684)^t$, where $V(t)$ is the value in dollars and t is the time in years. Zach had to take out a loan to purchase the small passenger car. The function $Z(t) = 22151.327(0.778)^t$, where $Z(t)$ is measured in dollars, and t is the time in years, models the unpaid amount of Zach's loan over time. Graph $V(t)$ and $Z(t)$ over the interval $0 \leq t \leq 5$, on the set of axes below.



State when $V(t) = Z(t)$, to the *nearest hundredth*, and interpret its meaning in the context of the problem. Zach takes out an insurance policy that requires him to pay a \$3000 deductible in case of a collision. Zach will cancel the collision policy when the value of his car equals his deductible. To the *nearest year*, how long will it take Zach to cancel this policy? Justify your answer.

- 80 For which values of x , rounded to the *nearest hundredth*, will $|x^2 - 9| - 3 = \log_3 x$?
- 2.29 and 3.63
 - 2.37 and 3.54
 - 2.84 and 3.17
 - 2.92 and 3.06
- 81 Researchers in a local area found that the population of rabbits with an initial population of 20 grew continuously at the rate of 5% per month. The fox population had an initial value of 30 and grew continuously at the rate of 3% per month. Find, to the *nearest tenth of a month*, how long it takes for these populations to be equal.

POWERS

A.SSE.B.3, F.IF.C.8, F.BF.A.1, F.LE.A.2,

F.LE.B.5: MODELING EXPONENTIAL

FUNCTIONS

- 82 A study of the annual population of the red-winged blackbird in Ft. Mill, South Carolina, shows the population, $B(t)$, can be represented by the function $B(t) = 750(1.16)^t$, where the t represents the number of years since the study began. In terms of the monthly rate of growth, the population of red-winged blackbirds can be best approximated by the function
- $B(t) = 750(1.012)^t$
 - $B(t) = 750(1.012)^{12t}$
 - $B(t) = 750(1.16)^{12t}$
 - $B(t) = 750(1.16)^{\frac{t}{12}}$

- 83 A student studying public policy created a model for the population of Detroit, where the population decreased 25% over a decade. He used the model $P = 714(0.75)^d$, where P is the population, in thousands, d decades after 2010. Another student, Suzanne, wants to use a model that would predict the population after y years. Suzanne's model is best represented by

- $P = 714(0.6500)^y$
- $P = 714(0.8500)^y$
- $P = 714(0.9716)^y$
- $P = 714(0.9750)^y$

- 84 Iridium-192 is an isotope of iridium and has a half-life of 73.83 days. If a laboratory experiment begins with 100 grams of Iridium-192, the number of grams, A , of Iridium-192 present after t days

would be $A = 100\left(\frac{1}{2}\right)^{\frac{t}{73.83}}$. Which equation

approximates the amount of Iridium-192 present after t days?

- $A = 100\left(\frac{73.83}{2}\right)^t$
- $A = 100\left(\frac{1}{147.66}\right)^t$
- $A = 100(0.990656)^t$
- $A = 100(0.116381)^t$

- 85 For a given time, x , in seconds, an electric current, y , can be represented by $y = 2.5(1 - 2.7^{-.10x})$.

Which equation is *not* equivalent?

- 1 $y = 2.5 - 2.5(2.7^{-.10x})$
- 2 $y = 2.5 - 2.5\left((2.7^2)^{-.05x}\right)$
- 3 $y = 2.5 - 2.5\left(\frac{1}{2.7^{.10x}}\right)$
- 4 $y = 2.5 - 2.5(2.7^{-2})(2.7^{.05x})$

- 86 Which function represents exponential decay?

- 1 $y = 2^{0.3t}$
- 2 $y = 1.2^{3t}$
- 3 $y = \left(\frac{1}{2}\right)^{-t}$
- 4 $y = 5^{-t}$

- 87 The function $M(t)$ represents the mass of radium over time, t , in years.

$$M(t) = 100e^{\frac{\left(\ln \frac{1}{2}\right)t}{1590}}$$

Determine if the function $M(t)$ represents growth or decay. Explain your reasoning.

- 88 Last year, the total revenue for Home Style, a national restaurant chain, increased 5.25% over the previous year. If this trend were to continue, which expression could the company's chief financial officer use to approximate their monthly percent increase in revenue? [Let m represent months.]

- 1 $(1.0525)^m$
- 2 $(1.0525)^{\frac{12}{m}}$
- 3 $(1.00427)^m$
- 4 $(1.00427)^{\frac{m}{12}}$

- 89 A payday loan company makes loans between \$100 and \$1000 available to customers. Every 14 days, customers are charged 30% interest with compounding. In 2013, Remi took out a \$300 payday loan. Which expression can be used to calculate the amount she would owe, in dollars, after one year if she did not make payments?

- 1 $300(.30)^{\frac{14}{365}}$
- 2 $300(1.30)^{\frac{14}{365}}$
- 3 $300(.30)^{\frac{365}{14}}$
- 4 $300(1.30)^{\frac{365}{14}}$

- 90 According to a pricing website, Indroid phones lose 58% of their cash value over 1.5 years. Which expression can be used to estimate the value of a \$300 Indroid phone in 1.5 years?

- 1 $300e^{-0.87}$
- 2 $300e^{-0.63}$
- 3 $300e^{-0.58}$
- 4 $300e^{-0.42}$

- 91 Titanium-44 is a radioactive isotope such that every 63 years, its mass decreases by half. For a sample of titanium-44 with an initial mass of 100 grams, write a function that will give the mass of the sample remaining after any amount of time. Define all variables. Scientists sometimes use the average yearly decrease in mass for estimation purposes. Use the average yearly decrease in mass of the sample between year 0 and year 10 to predict the amount of the sample remaining after 40 years. Round your answer to the *nearest tenth*. Is the actual mass of the sample or the estimated mass greater after 40 years? Justify your answer.
- 92 A rabbit population doubles every 4 weeks. There are currently five rabbits in a restricted area. If t represents the time, in weeks, and $P(t)$ is the population of rabbits with respect to time, about how many rabbits will there be in 98 days?
- 1 56
 - 2 152
 - 3 3688
 - 4 81,920
- 93 An equation to represent the value of a car after t months of ownership is $v = 32,000(0.81)^{\frac{t}{12}}$. Which statement is *not* correct?
- 1 The car lost approximately 19% of its value each month.
 - 2 The car maintained approximately 98% of its value each month.
 - 3 The value of the car when it was purchased was \$32,000.
 - 4 The value of the car 1 year after it was purchased was \$25,920.
- 94 The function $p(t) = 110e^{0.03922t}$ models the population of a city, in millions, t years after 2010. As of today, consider the following two statements:
- I. The current population is 110 million.
 - II. The population increases continuously by approximately 3.9% per year.
- This model supports
- 1 I, only
 - 2 II, only
 - 3 both I and II
 - 4 neither I nor II
- 95 A certain pain reliever is taken in 220 mg dosages and has a half-life of 12 hours. The function $A = 220\left(\frac{1}{2}\right)^{\frac{t}{12}}$ can be used to model this situation, where A is the amount of pain reliever in milligrams remaining in the body after t hours. According to this function, which statement is true?
- 1 Every hour, the amount of pain reliever remaining is cut in half.
 - 2 In 12 hours, there is no pain reliever remaining in the body.
 - 3 In 24 hours, there is no pain reliever remaining in the body.
 - 4 In 12 hours, 110 mg of pain reliever is remaining.

F.IF.B.4: EVALUATING LOGARITHMIC EXPRESSIONS

- 96 The loudness of sound is measured in units called decibels (dB). These units are measured by first assigning an intensity I_0 to a very soft sound that is called the threshold sound. The sound to be measured is assigned an intensity, I , and the decibel rating, d , of this sound is found using $d = 10 \log \frac{I}{I_0}$. The threshold sound audible to the average person is 1.0×10^{-12} W/m² (watts per square meter). Consider the following sound level classifications:

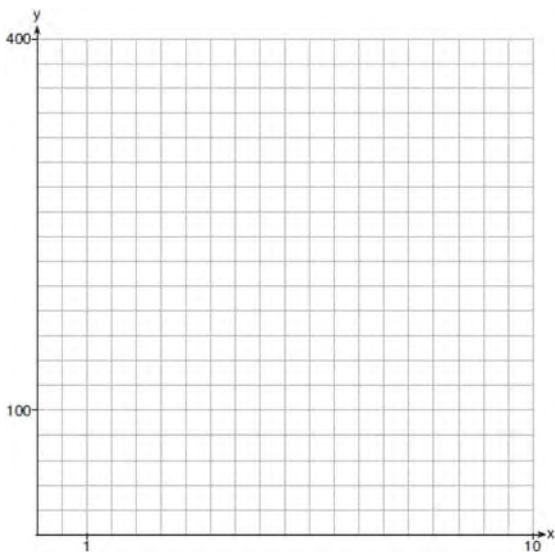
Moderate	45-69 dB
Loud	70-89 dB
Very loud	90-109 dB
Deafening	>110 dB

How would a sound with intensity 6.3×10^{-3} W/m² be classified?

- | | |
|------------|-------------|
| 1 moderate | 3 very loud |
| 2 loud | 4 deafening |

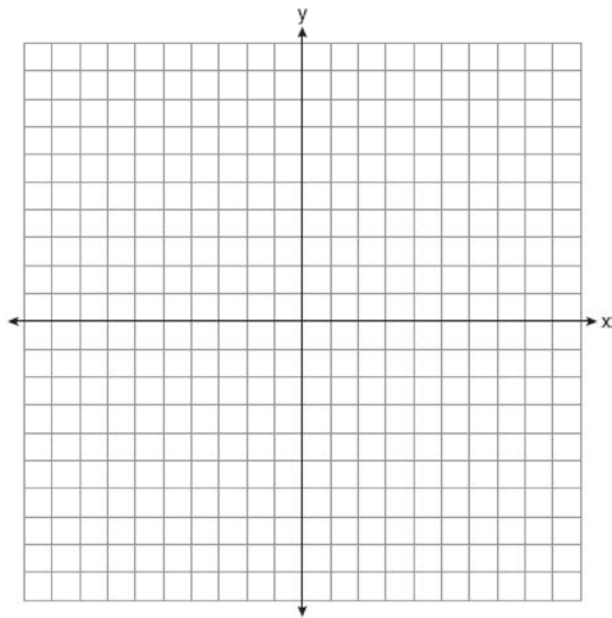
F.IF.C.7: GRAPHING EXPONENTIAL AND LOGARITHMIC FUNCTIONS

- 97 Graph $y = 400(.85)^{2x} - 6$ on the set of axes below.



- 98 If the function $g(x) = ab^x$ represents exponential growth, which statement about $g(x)$ is *false*?
- $a > 0$ and $b > 1$
 - The y -intercept is $(0, a)$.
 - The asymptote is $y = 0$.
 - The x -intercept is $(b, 0)$.
- 99 Which statement about the graph of $c(x) = \log_6 x$ is *false*?
- The asymptote has equation $y = 0$.
 - The graph has no y -intercept.
 - The domain is the set of positive reals.
 - The range is the set of all real numbers.

- 100 Graph $y = \log_2(x + 3) - 5$ on the set of axes below. Use an appropriate scale to include *both* intercepts.



Describe the behavior of the given function as x approaches -3 and as x approaches positive infinity.

A.CED.A.1, F.LE.A.4: EXPONENTIAL EQUATIONS

- 101 Seth's parents gave him \$5000 to invest for his 16th birthday. He is considering two investment options. Option *A* will pay him 4.5% interest compounded annually. Option *B* will pay him 4.6% compounded quarterly. Write a function of option *A* and option *B* that calculates the value of each account after n years. Seth plans to use the money after he graduates from college in 6 years. Determine how much more money option *B* will earn than option *A* to the *nearest cent*. Algebraically determine, to the *nearest tenth of a year*, how long it would take for option *B* to double Seth's initial investment.

- 102 Monthly mortgage payments can be found using the formula below:

$$M = \frac{P \left(\frac{r}{12} \right) \left(1 + \frac{r}{12} \right)^n}{\left(1 + \frac{r}{12} \right)^n - 1}$$

M = monthly payment

P = amount borrowed

r = annual interest rate

n = number of monthly payments

The Banks family would like to borrow \$120,000 to purchase a home. They qualified for an annual interest rate of 4.8%. Algebraically determine the *fewest* number of whole years the Banks family would need to include in the mortgage agreement in order to have a monthly payment of no more than \$720.

- 103 What is the solution to $8(2^{x+3}) = 48$?

1 $x = \frac{\ln 6}{\ln 2} - 3$

2 $x = 0$

3 $x = \frac{\ln 48}{\ln 16} - 3$

4 $x = \ln 4 - 3$

- 104 After sitting out of the refrigerator for a while, a turkey at room temperature (68°F) is placed into an oven at 8 a.m., when the oven temperature is 325°F . Newton's Law of Heating explains that the temperature of the turkey will increase proportionally to the difference between the temperature of the turkey and the temperature of the oven, as given by the formula below:

$$T = T_a + (T_0 - T_a)e^{-kt}$$

T_a = the temperature surrounding the object

T_0 = the initial temperature of the object

t = the time in hours

T = the temperature of the object after t hours

k = decay constant

The turkey reaches the temperature of approximately 100°F after 2 hours. Find the value of k , to the *nearest thousandth*, and write an equation to determine the temperature of the turkey after t hours. Determine the Fahrenheit temperature of the turkey, to the *nearest degree*, at 3 p.m.

- 105 A house purchased 5 years ago for \$100,000 was just sold for \$135,000. Assuming exponential growth, approximate the annual growth rate, to the *nearest percent*.
- 106 In New York State, the minimum wage has grown exponentially. In 1966, the minimum wage was \$1.25 an hour and in 2015, it was \$8.75. Algebraically determine the rate of growth to the *nearest percent*.

- 107 Judith puts \$5000 into an investment account with interest compounded continuously. Which approximate annual rate is needed for the account to grow to \$9110 after 30 years?

- 1 2%
- 2 2.2%
- 3 0.02%
- 4 0.022%

- 108 If $ae^{bt} = c$, where a , b , and c are positive, then t equals

- 1 $\ln\left(\frac{c}{ab}\right)$

- 2 $\ln\left(\frac{cb}{a}\right)$

- 3 $\frac{\ln\left(\frac{c}{a}\right)}{b}$

- 4 $\frac{\ln\left(\frac{c}{a}\right)}{\ln b}$

- 109 One of the medical uses of Iodine-131 (I-131), a radioactive isotope of iodine, is to enhance x-ray images. The half-life of I-131 is approximately 8.02 days. A patient is injected with 20 milligrams of I-131. Determine, to the *nearest day*, the amount of time needed before the amount of I-131 in the patient's body is approximately 7 milligrams.

- 110 A radioactive substance has a mass of 140 g at 3 p.m. and 100 g at 8 p.m. Write an equation in the

form $A = A_0 \left(\frac{1}{2} \right)^{\frac{t}{h}}$ that models this situation,

where h is the constant representing the number of hours in the half-life, A_0 is the initial mass, and A is the mass t hours after 3 p.m. Using this equation, solve for h , to the *nearest ten thousandth*. Determine when the mass of the radioactive substance will be 40 g. Round your answer to the *nearest tenth of an hour*.

- 114 The completely factored form of $2d^4 + 6d^3 - 18d^2 - 54d$ is

- 1 $2d(d^2 - 9)(d + 3)$
- 2 $2d(d^2 + 9)(d + 3)$
- 3 $2d(d + 3)^2(d - 3)$
- 4 $2d(d - 3)^2(d + 3)$

- 115 Factored completely, $m^5 + m^3 - 6m$ is equivalent to

- 1 $(m + 3)(m - 2)$
- 2 $(m^2 + 3m)(m^2 - 2)$
- 3 $m(m^4 + m^2 - 6)$
- 4 $m(m^2 + 3)(m^2 - 2)$

POLYNOMIALS

A.SSE.A.2: FACTORING POLYNOMIALS

- 111 What is the completely factored form of

$$k^4 - 4k^2 + 8k^3 - 32k + 12k^2 - 48?$$

- 1 $(k - 2)(k - 2)(k + 3)(k + 4)$
- 2 $(k - 2)(k - 2)(k + 6)(k + 2)$
- 3 $(k + 2)(k - 2)(k + 3)(k + 4)$
- 4 $(k + 2)(k - 2)(k + 6)(k + 2)$

- 112 Rewrite the expression

$(4x^2 + 5x)^2 - 5(4x^2 + 5x) - 6$ as a product of four linear factors.

- 116 Over the set of integers, factor the expression $4x^3 - x^2 + 16x - 4$ completely.

- 117 Which expression has been rewritten correctly to form a true statement?

- 1 $(x + 2)^2 + 2(x + 2) - 8 = (x + 6)x$
- 2 $x^4 + 4x^2 + 9x^2y^2 - 36y^2 = (x + 3y)^2(x - 2)^2$
- 3 $x^3 + 3x^2 - 4xy^2 - 12y^2 = (x - 2y)(x + 3)^2$
- 4 $(x^2 - 4)^2 - 5(x^2 - 4) - 6 = (x^2 - 7)(x^2 - 6)$

- 113 Which factorization is *incorrect*?

- 1 $4k^2 - 49 = (2k + 7)(2k - 7)$
- 2 $a^3 - 8b^3 = (a - 2b)(a^2 + 2ab + 4b^2)$
- 3 $m^3 + 3m^2 - 4m + 12 = (m - 2)^2(m + 3)$
- 4 $t^3 + 5t^2 + 6t + t^2 + 5t + 6 = (t + 1)(t + 2)(t + 3)$

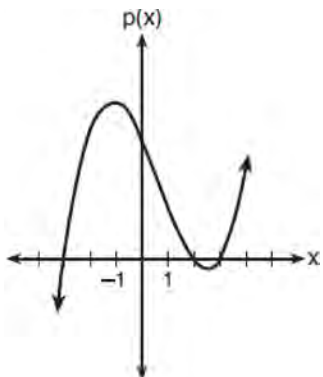
- 118 Completely factor the following expression:

$$x^2 + 3xy + 3x^3 + y$$

A.APR.B.3: ZEROS OF POLYNOMIALS

- 119 The zeros for $f(x) = x^4 - 4x^3 - 9x^2 + 36x$ are
- 1 $\{0, \pm 3, 4\}$
 - 2 $\{0, 3, 4\}$
 - 3 $\{0, \pm 3, -4\}$
 - 4 $\{0, 3, -4\}$

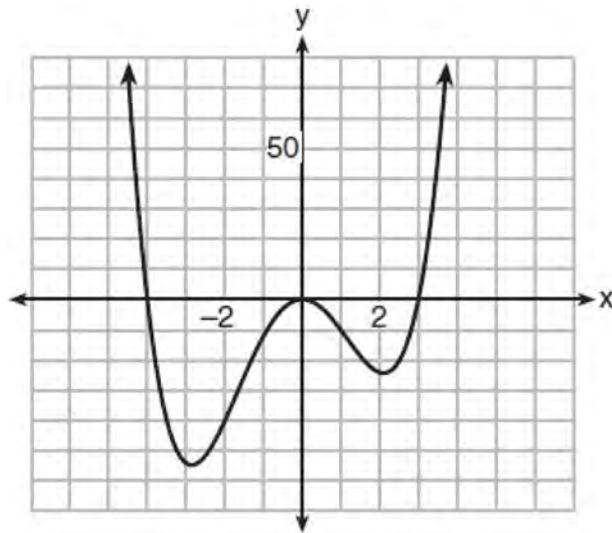
- 120 The graph of the function $p(x)$ is sketched below.



Which equation could represent $p(x)$?

- 1 $p(x) = (x^2 - 9)(x - 2)$
 - 2 $p(x) = x^3 - 2x^2 + 9x + 18$
 - 3 $p(x) = (x^2 + 9)(x - 2)$
 - 4 $p(x) = x^3 + 2x^2 - 9x - 18$
- 121 What are the zeros of $P(m) = (m^2 - 4)(m^2 + 1)$?
- 1 2 and -2 , only
 - 2 2, -2 , and -4
 - 3 $-4, i$, and $-i$
 - 4 2, $-2, i$, and $-i$

- 122 The graph of $y = f(x)$ is shown below. The function has a leading coefficient of 1.

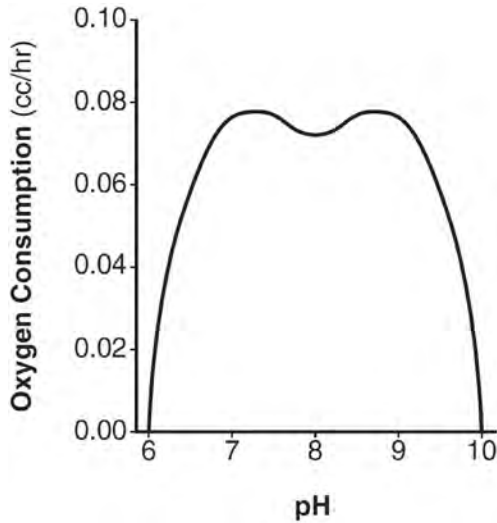


Write an equation for $f(x)$. The function g is formed by translating function f left 2 units. Write an equation for $g(x)$.

F.IF.B.4, F.IF.C.7: GRAPHING POLYNOMIAL FUNCTIONS

- 123 A polynomial equation of degree three, $p(x)$, is used to model the volume of a rectangular box. The graph of $p(x)$ has x intercepts at $-2, 10,$ and 14 . Which statements regarding $p(x)$ could be true?
- A. The equation of $p(x) = (x - 2)(x + 10)(x + 14)$.
 - B. The equation of $p(x) = -(x + 2)(x - 10)(x - 14)$.
 - C. The maximum volume occurs when $x = 10$.
 - D. The maximum volume of the box is approximately 56.
- 1 A and C
 - 2 A and D
 - 3 B and C
 - 4 B and D

124 There was a study done on oxygen consumption of snails as a function of pH, and the result was a degree 4 polynomial function whose graph is shown below.



- Which statement about this function is *incorrect*?
- 1 The degree of the polynomial is even.
 - 2 There is a positive leading coefficient.
 - 3 At two pH values, there is a relative maximum value.
 - 4 There are two intervals where the function is decreasing.

125 The function below models the average price of gas in a small town since January 1st.

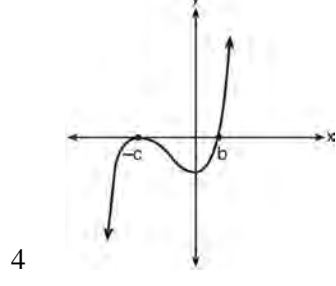
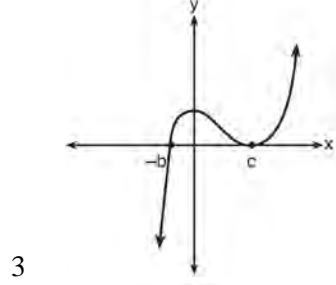
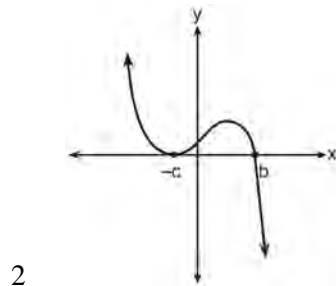
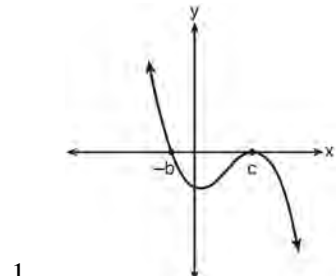
$$G(t) = -0.0049t^4 + 0.0923t^3 - 0.56t^2 + 1.166t + 3.23,$$

where $0 \leq t \leq 10$.

If $G(t)$ is the average price of gas in dollars and t represents the number of months since January 1st, the absolute maximum $G(t)$ reaches over the given domain is about

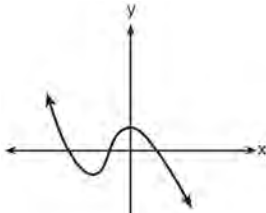
- 1 \$1.60
- 2 \$3.92
- 3 \$4.01
- 4 \$7.73

126 If $a, b,$ and c are all positive real numbers, which graph could represent the sketch of the graph of $p(x) = -a(x + b)(x^2 - 2cx + c^2)$?

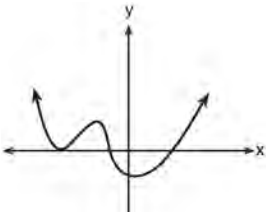


127 Which graph has the following characteristics?

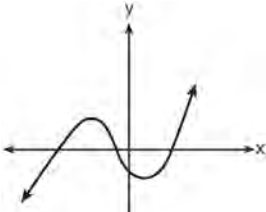
- three real zeros
- as $x \rightarrow -\infty$, $f(x) \rightarrow -\infty$
- as $x \rightarrow \infty$, $f(x) \rightarrow \infty$



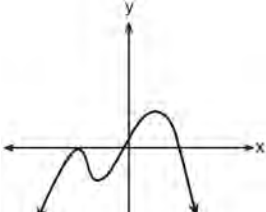
1



2



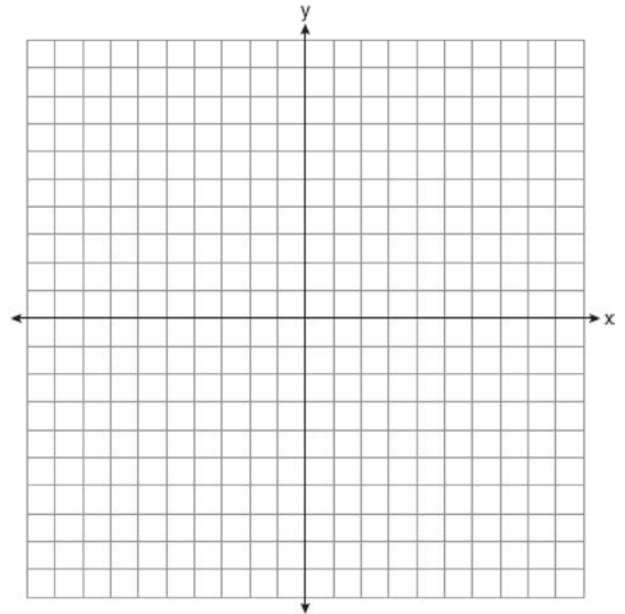
3



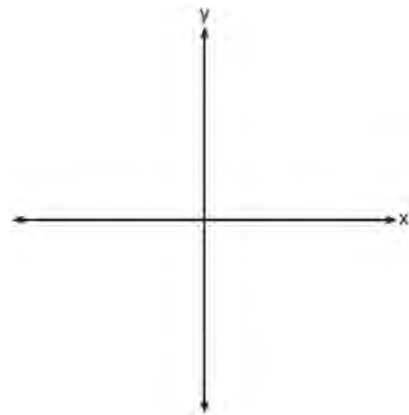
4

128 Find algebraically the zeros for


$p(x) = x^3 + x^2 - 4x - 4$. On the set of axes below, graph $y = p(x)$.




129 On the axes below, sketch a possible function $p(x) = (x - a)(x - b)(x + c)$, where a , b , and c are positive, $a > b$, and $p(x)$ has a positive y -intercept of d . Label all intercepts.



- 130 On the grid below, sketch a cubic polynomial whose zeros are 1, 3, and -2.

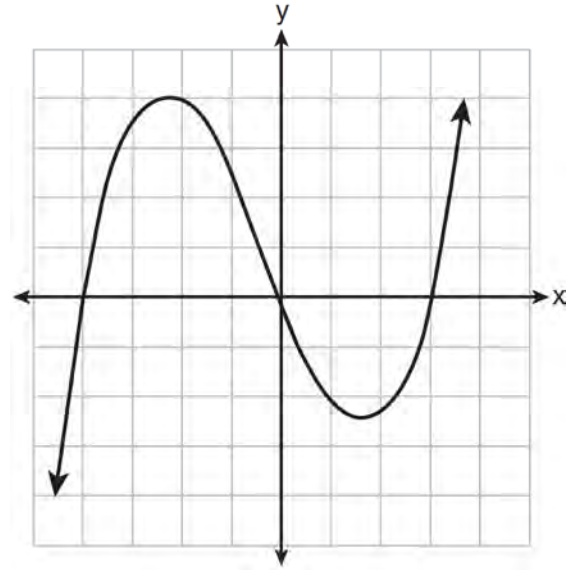


- 131 The zeros of a quartic polynomial function h are $-1, \pm 2,$ and 3 . Sketch a graph of $y = h(x)$ on the grid below.



A.APR.B.2: REMAINDER THEOREM

- 132 The graph of $p(x)$ is shown below.



What is the remainder when $p(x)$ is divided by $x + 4$?

- 1 $x - 4$
- 2 -4
- 3 0
- 4 4

- 133 Use an appropriate procedure to show that $x - 4$ is a factor of the function $f(x) = 2x^3 - 5x^2 - 11x - 4$. Explain your answer.

- 134 Given $z(x) = 6x^3 + bx^2 - 52x + 15$, $z(2) = 35$, and $z(-5) = 0$, algebraically determine all the zeros of $z(x)$.

- 135 Determine if $x - 5$ is a factor of $2x^3 - 4x^2 - 7x - 10$. Explain your answer.
- 136 When $g(x)$ is divided by $x + 4$, the remainder is 0. Given $g(x) = x^4 + 3x^3 - 6x^2 - 6x + 8$, which conclusion about $g(x)$ is true?
- 1 $g(4) = 0$
 - 2 $g(-4) = 0$
 - 3 $x - 4$ is a factor of $g(x)$.
 - 4 No conclusion can be made regarding $g(x)$.
- 137 Which binomial is a factor of $x^4 - 4x^2 - 4x + 8$?
- 1 $x - 2$
 - 2 $x + 2$
 - 3 $x - 4$
 - 4 $x + 4$
- 138 Given $r(x) = x^3 - 4x^2 + 4x - 6$, find the value of $r(2)$. What does your answer tell you about $x - 2$ as a factor of $r(x)$? Explain.
- 139 Which binomial is *not* a factor of the expression $x^3 - 11x^2 + 16x + 84$?
- 1 $x + 2$
 - 2 $x + 4$
 - 3 $x - 6$
 - 4 $x - 7$
- 140 If $p(x) = 2x^3 - 3x + 5$, what is the remainder of $p(x) \div (x - 5)$?
- 1 -230
 - 2 0
 - 3 40
 - 4 240
- A.APR.C.4: POLYNOMIAL IDENTITIES
- 141 Algebraically prove that the difference of the squares of any two consecutive integers is an odd integer.
- 142 Algebraically prove that $\frac{x^3 + 9}{x^3 + 8} = 1 + \frac{1}{x^3 + 8}$, where $x \neq -2$.
- 143 Mr. Farison gave his class the three mathematical rules shown below to either prove or disprove. Which rules can be proved for all real numbers?
- I $(m + p)^2 = m^2 + 2mp + p^2$
 - II $(x + y)^3 = x^3 + 3xy + y^3$
 - III $(a^2 + b^2)^2 = (a^2 - b^2)^2 + (2ab)^2$
- 1 I, only
 - 2 I and II
 - 3 II and III
 - 4 I and III
- 144 Algebraically determine the values of h and k to correctly complete the identity stated below.
- $$2x^3 - 10x^2 + 11x - 7 = (x - 4)(2x^2 + hx + 3) + k$$

- 145 Verify the following Pythagorean identity for all values of x and y :

$$(x^2 + y^2)^2 = (x^2 - y^2)^2 + (2xy)^2$$

- 146 The expression $(x + a)(x + b)$ can *not* be written as

1 $a(x + b) + x(x + b)$

2 $x^2 + abx + ab$

3 $x^2 + (a + b)x + ab$

4 $x(x + a) + b(x + a)$

- 151 The speed of a tidal wave, s , in hundreds of miles per hour, can be modeled by the equation

$s = \sqrt{t} - 2t + 6$, where t represents the time from its origin in hours. Algebraically determine the time when $s = 0$. How much faster was the tidal wave traveling after 1 hour than 3 hours, to the *nearest mile per hour*? Justify your answer.

- 152 Solve algebraically for all values of x :

$$\sqrt{x - 4} + x = 6$$

RADICALS

N.RN.A.2: OPERATIONS WITH RADICALS

- 147 Write $\sqrt[3]{x} \cdot \sqrt{x}$ as a single term with a rational exponent.

- 153 The solution set for the equation

$$\sqrt{x + 14} - \sqrt{2x + 5} = 1$$
 is

1 $\{-6\}$

2 $\{2\}$

3 $\{18\}$

4 $\{2, 22\}$

A.REI.A.2: SOLVING RADICALS

- 148 Solve algebraically for all values of x :

$$\sqrt{x - 5} + x = 7$$

- 154 What is the solution set for x in the equation below?

$$\sqrt{x + 1} - 1 = x$$

1 $\{1\}$

2 $\{0\}$

3 $\{-1, 0\}$

4 $\{0, 1\}$

- 149 The solution set for the equation $\sqrt{56 - x} = x$ is

1 $\{-8, 7\}$

2 $\{-7, 8\}$

3 $\{7\}$

4 $\{ \}$

- 150 Solve the equation $\sqrt{2x - 7} + x = 5$ algebraically, and justify the solution set.

N.RN.A.1-2: RADICALS AND RATIONAL EXPONENTS

155 Explain how $\left(3^{\frac{1}{5}}\right)^2$ can be written as the equivalent radical expression $\sqrt[5]{9}$.

156 Explain how $(-8)^{\frac{4}{3}}$ can be evaluated using properties of rational exponents to result in an integer answer.

157 Explain why $81^{\frac{3}{4}}$ equals 27.

158 When $b > 0$ and d is a positive integer, the expression $(3b)^{\frac{2}{d}}$ is equivalent to

- 1 $\frac{1}{\left(\sqrt[d]{3b}\right)^2}$
- 2 $\left(\sqrt{3b}\right)^d$
- 3 $\frac{1}{\sqrt{3b^d}}$
- 4 $\left(\sqrt[d]{3b}\right)^2$

159 Given the equal terms $\sqrt[3]{x^5}$ and $y^{\frac{5}{6}}$, determine and state y , in terms of x .

160 Use the properties of rational exponents to determine the value of y for the equation:

$$\frac{\sqrt[3]{x^8}}{\left(x^4\right)^{\frac{1}{3}}} = x^y, x > 1$$

161 The expression $\left(\frac{m^2}{m^{\frac{1}{3}}}\right)^{-\frac{1}{2}}$ is equivalent to

- 1 $-\sqrt[6]{m^5}$
- 2 $\frac{1}{\sqrt[6]{m^5}}$
- 3 $-\sqrt[5]{m}$
- 4 $\frac{1}{\sqrt[5]{m}}$

162 For $x \neq 0$, which expressions are equivalent to one divided by the sixth root of x ?

$$\text{I. } \frac{\sqrt[6]{x}}{\sqrt[3]{x}} \quad \text{II. } \frac{x^{\frac{1}{6}}}{x^{\frac{1}{3}}} \quad \text{III. } x^{-\frac{1}{6}}$$

- 1 I and II, only
- 2 I and III, only
- 3 II and III, only
- 4 I, II, and III

163 What does $\left(\frac{-54x^9}{y^4}\right)^{\frac{2}{3}}$ equal?

1 $\frac{9ix^6\sqrt[3]{4}}{y^2\sqrt[3]{y^2}}$

2 $\frac{9ix^6\sqrt[3]{4}}{y^2\sqrt[3]{y^2}}$

3 $\frac{9x^6\sqrt[3]{4}}{y^2\sqrt[3]{y}}$

4 $\frac{9x^6\sqrt[3]{4}}{y^2\sqrt[3]{y^2}}$

164 If $n = \sqrt{a^5}$ and $m = a$, where $a > 0$, an expression for $\frac{n}{m}$ could be

1 $a^{\frac{5}{2}}$

2 a^4

3 $\sqrt[3]{a^2}$

4 $\sqrt{a^3}$

N.CN.A.2: OPERATIONS WITH COMPLEX NUMBERS

165 Write $(5 + 2yi)(4 - 3i) - (5 - 2yi)(4 - 3i)$ in $a + bi$ form, where y is a real number.

166 Simplify $xi(i - 7i)^2$, where i is the imaginary unit.

167 Elizabeth tried to find the product of $(2 + 4i)$ and $(3 - i)$, and her work is shown below.

$$(2 + 4i)(3 - i)$$

$$= 6 - 2i + 12i - 4i^2$$

$$= 6 + 10i - 4i^2$$

$$= 6 + 10i - 4(1)$$

$$= 6 + 10i - 4$$

$$= 2 + 10i$$

Identify the error in the process shown and determine the correct product of $(2 + 4i)$ and $(3 - i)$.

168 Given i is the imaginary unit, $(2 - yi)^2$ in simplest form is

1 $y^2 - 4yi + 4$

2 $-y^2 - 4yi + 4$

3 $-y^2 + 4$

4 $y^2 + 4$

169 Express $(1 - i)^3$ in $a + bi$ form.

170 The expression $6xi^3(-4xi + 5)$ is equivalent to

1 $2x - 5i$

2 $-24x^2 - 30xi$

3 $-24x^2 + 30x - i$

4 $26x - 24x^2i - 5i$

- 171 Which expression is equivalent to $(3k - 2i)^2$, where i is the imaginary unit?
- 1 $9k^2 - 4$
 - 2 $9k^2 + 4$
 - 3 $9k^2 - 12ki - 4$
 - 4 $9k^2 - 12ki + 4$

RATIONALS

A.APR.D.6: UNDEFINED RATIONALS

- 172 The function $f(x) = \frac{x-3}{x^2+2x-8}$ is undefined when x equals
- 1 2 or -4
 - 2 4 or -2
 - 3 3, only
 - 4 2, only

A.APR.D.6: EXPRESSIONS WITH NEGATIVE EXPONENTS

- 173 The expression $\frac{-3x^2 - 5x + 2}{x^3 + 2x^2}$ can be rewritten as
- 1 $\frac{-3x-3}{x^2+2x}$
 - 2 $\frac{-3x-1}{x^2}$
 - 3 $-3x^{-1} + 1$
 - 4 $-3x^{-1} + x^{-2}$

A.APR.D.6: RATIONAL EXPRESSIONS

- 174 The expression $\frac{6x^3 + 17x^2 + 10x + 2}{2x + 3}$ equals

- 1 $3x^2 + 4x - 1 + \frac{5}{2x+3}$
- 2 $6x^2 + 8x - 2 + \frac{5}{2x+3}$
- 3 $6x^2 - x + 13 - \frac{37}{2x+3}$
- 4 $3x^2 + 13x + \frac{49}{2} + \frac{151}{2x+3}$

- 175 The expression $\frac{4x^3 + 5x + 10}{2x + 3}$ is equivalent to

- 1 $2x^2 + 3x - 7 + \frac{31}{2x+3}$
- 2 $2x^2 - 3x + 7 - \frac{11}{2x+3}$
- 3 $2x^2 + 2.5x + 5 + \frac{15}{2x+3}$
- 4 $2x^2 - 2.5x - 5 - \frac{20}{2x+3}$

- 176 The expression $\frac{x^3 + 2x^2 + x + 6}{x + 2}$ is equivalent to

- 1 $x^2 + 3$
- 2 $x^2 + 1 + \frac{4}{x+2}$
- 3 $2x^2 + x + 6$
- 4 $2x^2 + 1 + \frac{4}{x+2}$

- 177 Given $f(x) = 3x^2 + 7x - 20$ and $g(x) = x - 2$, state the quotient and remainder of $\frac{f(x)}{g(x)}$, in the form

$$q(x) + \frac{r(x)}{g(x)}.$$

- 178 Which expression is equivalent to $\frac{4x^3 + 9x - 5}{2x - 1}$,

where $x \neq \frac{1}{2}$?

- 1 $2x^2 + x + 5$
 - 2 $2x^2 + \frac{11}{2} + \frac{1}{2(2x - 1)}$
 - 3 $2x^2 - x + 5$
 - 4 $2x^2 - x + 4 + \frac{1}{2x - 1}$
- 179 What is the quotient when $10x^3 - 3x^2 - 7x + 3$ is divided by $2x - 1$?
- 1 $5x^2 + x + 3$
 - 2 $5x^2 - x + 3$
 - 3 $5x^2 - x - 3$
 - 4 $5x^2 + x - 3$

- 180 Written in simplest form, $\frac{c^2 - d^2}{d^2 + cd - 2c^2}$ where $c \neq d$, is equivalent to

1 $\frac{c + d}{d + 2c}$

2 $\frac{c - d}{d + 2c}$

3 $\frac{-c - d}{d + 2c}$

4 $\frac{-c + d}{d + 2c}$

A.CED.A.1: MODELING RATIONALS

- 181 Julie averaged 85 on the first three tests of the semester in her mathematics class. If she scores 93 on each of the remaining tests, her average will be 90. Which equation could be used to determine how many tests, T , are left in the semester?

1 $\frac{255 + 93T}{3T} = 90$

2 $\frac{255 + 90T}{3T} = 93$

3 $\frac{255 + 93T}{T + 3} = 90$

4 $\frac{255 + 90T}{T + 3} = 93$

- 182 Mallory wants to buy a new window air conditioning unit. The cost for the unit is \$329.99. If she plans to run the unit three months out of the year for an annual operating cost of \$108.78, which function models the cost per year over the lifetime of the unit, $C(n)$, in terms of the number of years, n , that she owns the air conditioner.

- 1 $C(n) = 329.99 + 108.78n$
- 2 $C(n) = 329.99 + 326.34n$
- 3 $C(n) = \frac{329.99 + 108.78n}{n}$
- 4 $C(n) = \frac{329.99 + 326.34n}{n}$

- 183 A formula for work problems involving two people is shown below.

$$\frac{1}{t_1} + \frac{1}{t_2} = \frac{1}{t_b}$$

t_1 = the time taken by the first person to complete the job

t_2 = the time taken by the second person to complete the job

t_b = the time it takes for them working together to complete the job

Fred and Barney are carpenters who build the same model desk. It takes Fred eight hours to build the desk while it only takes Barney six hours. Write an equation that can be used to find the time it would take both carpenters working together to build a desk. Determine, to the *nearest tenth of an hour*, how long it would take Fred and Barney working together to build a desk.

A.REI.A.2: SOLVING RATIONALS

- 184 Solve for x : $\frac{1}{x} - \frac{1}{3} = -\frac{1}{3x}$

- 185 What is the solution set of the equation

$$\frac{3x + 25}{x + 7} - 5 = \frac{3}{x}?$$

- 1 $\left\{\frac{3}{2}, 7\right\}$
- 2 $\left\{\frac{7}{2}, -3\right\}$
- 3 $\left\{-\frac{3}{2}, 7\right\}$
- 4 $\left\{-\frac{7}{2}, -3\right\}$

- 186 The focal length, F , of a camera's lens is related to the distance of the object from the lens, J , and the distance to the image area in the camera, W , by the formula below.

$$\frac{1}{J} + \frac{1}{W} = \frac{1}{F}$$

When this equation is solved for J in terms of F and W , J equals

- 1 $F - W$
- 2 $\frac{FW}{F - W}$
- 3 $\frac{FW}{W - F}$
- 4 $\frac{1}{F} - \frac{1}{W}$

- 187 What is the solution, if any, of the equation

$$\frac{2}{x + 3} - \frac{3}{4 - x} = \frac{2x - 2}{x^2 - x - 12}?$$

- 1 -1
- 2 -5
- 3 all real numbers
- 4 no real solution

188 To solve $\frac{2x}{x-2} - \frac{11}{x} = \frac{8}{x^2 - 2x}$, Ren multiplied

both sides by the least common denominator.

Which statement is true?

- 1 2 is an extraneous solution.
- 2 $\frac{7}{2}$ is an extraneous solution.
- 3 0 and 2 are extraneous solutions.
- 4 This equation does not contain any extraneous solutions.

189 Solve for all values of p : $\frac{3p}{p-5} - \frac{2}{p+3} = \frac{p}{p+3}$

190 The solutions to $x + 3 - \frac{4}{x-1} = 5$ are

- 1 $\frac{3}{2} \pm \frac{\sqrt{17}}{2}$
- 2 $\frac{3}{2} \pm \frac{\sqrt{17}}{2} i$
- 3 $\frac{3}{2} \pm \frac{\sqrt{33}}{2}$
- 4 $\frac{3}{2} \pm \frac{\sqrt{33}}{2} i$

192 If $g(c) = 1 - c^2$ and $m(c) = c + 1$, then which statement is *not* true?

- 1 $g(c) \cdot m(c) = 1 + c - c^2 - c^3$
- 2 $g(c) + m(c) = 2 + c - c^2$
- 3 $m(c) - g(c) = c + c^2$
- 4 $\frac{m(c)}{g(c)} = \frac{-1}{1-c}$

193 If $p(x) = ab^x$ and $r(x) = cd^x$, then $p(x) \cdot r(x)$ equals

- 1 $ac(b+d)^x$
- 2 $ac(b+d)^{2x}$
- 3 $ac(bd)^x$
- 4 $ac(bd)^{x^2}$

194 A manufacturing company has developed a cost model, $C(x) = 0.15x^3 + 0.01x^2 + 2x + 120$, where x is the number of items sold, in thousands. The sales price can be modeled by $S(x) = 30 - 0.01x$. Therefore, revenue is modeled by $R(x) = x \cdot S(x)$. The company's profit, $P(x) = R(x) - C(x)$, could be modeled by

- 1 $0.15x^3 + 0.02x^2 - 28x + 120$
- 2 $-0.15x^3 - 0.02x^2 + 28x - 120$
- 3 $-0.15x^3 + 0.01x^2 - 2.01x - 120$
- 4 $-0.15x^3 + 32x + 120$

FUNCTIONS

F.BF.A.1: OPERATIONS WITH FUNCTIONS

191 Given: $f(x) = 2x^2 + x - 3$ and $g(x) = x - 1$
Express $f(x) \cdot g(x) - [f(x) + g(x)]$ as a polynomial in standard form.

F.IF.C.9: COMPARING FUNCTIONS

195 The x -value of which function's x -intercept is larger, f or h ? Justify your answer.

$$f(x) = \log(x - 4)$$

x	$h(x)$
-1	6
0	4
1	2
2	0
3	-2

196 Which statement regarding the graphs of the functions below is *untrue*?

$$f(x) = 3 \sin 2x, \text{ from } -\pi < x < \pi$$

$$g(x) = (x - 0.5)(x + 4)(x - 2)$$

$$h(x) = \log_2 x$$

$$j(x) = -|4x - 2| + 3$$

- 1 $f(x)$ and $j(x)$ have a maximum y -value of 3. 3 $g(x)$ and $j(x)$ have the same end behavior as $x \rightarrow -\infty$.
- 2 $f(x)$, $h(x)$, and $j(x)$ have one y -intercept. 4 $g(x)$, $h(x)$, and $j(x)$ have rational zeros.

197 Consider the function $h(x) = 2 \sin(3x) + 1$ and the function q represented in the table below.

x	$q(x)$
-2	-8
-1	0
0	0
1	-2
2	0

Determine which function has the *smaller* minimum value for the domain $[-2, 2]$. Justify your answer.

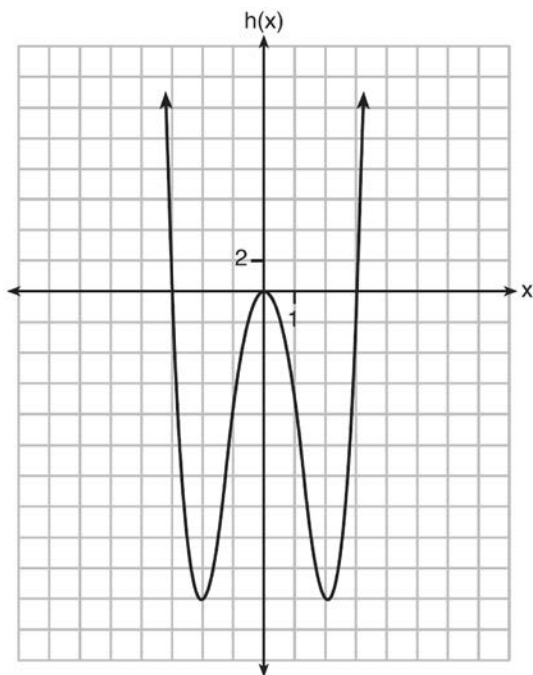
FUNCTIONS

F.BF.B.3: EVEN AND ODD FUNCTIONS

198 Functions f , g , and h are given below.

$$f(x) = \sin(2x)$$

$$g(x) = f(x) + 1$$



Which statement is true about functions f , g , and h ?

- 1 $f(x)$ and $g(x)$ are odd, $h(x)$ is even.
- 2 $f(x)$ and $g(x)$ are even, $h(x)$ is odd.
- 3 $f(x)$ is odd, $g(x)$ is neither, $h(x)$ is even.
- 4 $f(x)$ is even, $g(x)$ is neither, $h(x)$ is odd.

199 Which equation represents an odd function?

- 1 $y = \sin x$
- 2 $y = \cos x$
- 3 $y = (x + 1)^3$
- 4 $y = e^{5x}$

200 Algebraically determine whether the function $j(x) = x^4 - 3x^2 - 4$ is odd, even, or neither.

F.BF.B.4: INVERSE OF FUNCTIONS

201 For the function $f(x) = (x - 3)^3 + 1$, find $f^{-1}(x)$.

202 Given $f^{-1}(x) = -\frac{3}{4}x + 2$, which equation represents $f(x)$?

- 1 $f(x) = \frac{4}{3}x - \frac{8}{3}$
- 2 $f(x) = -\frac{4}{3}x + \frac{8}{3}$
- 3 $f(x) = \frac{3}{4}x - 2$
- 4 $f(x) = -\frac{3}{4}x + 2$

203 What is the inverse of the function $y = \log_3 x$?

- 1 $y = x^3$
- 2 $y = \log_x 3$
- 3 $y = 3^x$
- 4 $x = 3^y$

204 The inverse of the function $f(x) = \frac{x+1}{x-2}$ is

1 $f^{-1}(x) = \frac{x+1}{x+2}$

2 $f^{-1}(x) = \frac{2x+1}{x-1}$

3 $f^{-1}(x) = \frac{x+1}{x-2}$

4 $f^{-1}(x) = \frac{x-1}{x+1}$

205 What is the inverse of $f(x) = -6(x-2)$?

1 $f^{-1}(x) = -2 - \frac{x}{6}$

2 $f^{-1}(x) = 2 - \frac{x}{6}$

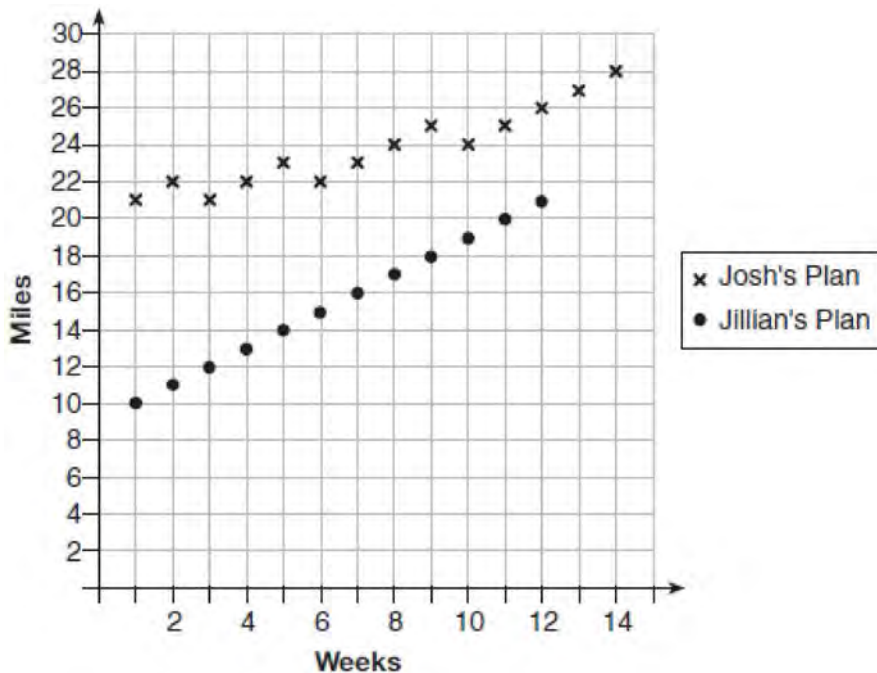
3 $f^{-1}(x) = \frac{1}{-6(x-2)}$

4 $f^{-1}(x) = 6(x+2)$

SEQUENCES AND SERIES

F.LE.A.2, F.IF.A.3, F.BF.A.2: SEQUENCES

- 206 Elaina has decided to run the Buffalo half-marathon in May. She researched training plans on the Internet and is looking at two possible plans: Jillian's 12-week plan and Josh's 14-week plan. The number of miles run per week for each plan is plotted below.



Which one of the plans follows an arithmetic pattern? Explain how you arrived at your answer. Write a recursive definition to represent the number of miles run each week for the duration of the plan you chose. Jillian's plan has an alternative if Elaina wanted to train instead for a full 26-mile marathon. Week one would start at 13 miles and follow the same pattern for the half-marathon, but it would continue for 14 weeks. Write an explicit formula, in *simplest form*, to represent the number of miles run each week for the full-marathon training plan.

- 207 The sequence $a_1 = 6$, $a_n = 3a_{n-1}$ can also be written as

- 1 $a_n = 6 \cdot 3^n$
- 2 $a_n = 6 \cdot 3^{n+1}$
- 3 $a_n = 2 \cdot 3^n$
- 4 $a_n = 2 \cdot 3^{n+1}$

- 208 Given $f(9) = -2$, which function can be used to generate the sequence $-8, -7.25, -6.5, -5.75, \dots$?

- 1 $f(n) = -8 + 0.75n$
- 2 $f(n) = -8 - 0.75(n - 1)$
- 3 $f(n) = -8.75 + 0.75n$
- 4 $f(n) = -0.75 + 8(n - 1)$

Algebra II Regents Exam Questions by State Standard: Topic

www.jmap.org

- 209 While experimenting with her calculator, Candy creates the sequence 4, 9, 19, 39, 79, Write a recursive formula for Candy's sequence. Determine the eighth term in Candy's sequence.

- 210 Simon lost his library card and has an overdue library book. When the book was 5 days late, he owed \$2.25 to replace his library card and pay the fine for the overdue book. When the book was 21 days late, he owed \$6.25 to replace his library card and pay the fine for the overdue book. Suppose the total amount Simon owes when the book is n days late can be determined by an arithmetic sequence. Determine a formula for a_n , the n th term of this sequence. Use the formula to determine the amount of money, in dollars, Simon needs to pay when the book is 60 days late.

- 211 The eighth and tenth terms of a sequence are 64 and 100. If the sequence is either arithmetic or geometric, the ninth term can *not* be
- 1 -82
 - 2 -80
 - 3 80
 - 4 82

- 212 Write an explicit formula for a_n , the n th term of the recursively defined sequence below.

$$a_1 = x + 1$$

$$a_n = x(a_{n-1})$$

For what values of x would $a_n = 0$ when $n > 1$?

- 213 The formula below can be used to model which scenario?

$$a_1 = 3000$$

$$a_n = 0.80a_{n-1}$$

- 1 The first row of a stadium has 3000 seats, and each row thereafter has 80 more seats than the row in front of it.
 - 2 The last row of a stadium has 3000 seats, and each row before it has 80 fewer seats than the row behind it.
 - 3 A bank account starts with a deposit of \$3000, and each year it grows by 80%.
 - 4 The initial value of a specialty toy is \$3000, and its value each of the following years is 20% less.
- 214 The population of Jamesburg for the years 2010-2013, respectively, was reported as follows: 250,000 250,937 251,878 252,822

How can this sequence be recursively modeled?

- 1 $j_n = 250,000(1.00375)^{n-1}$

- 2 $j_n = 250,000 + 937^{(n-1)}$

- 3 $j_1 = 250,000$

$$j_n = 1.00375j_{n-1}$$

- 4 $j_1 = 250,000$

$$j_n = j_{n-1} + 937$$

- 215 A recursive formula for the sequence 18,9,4.5,... is
- 1 $g_1 = 18$
 $g_n = \frac{1}{2}g_{n-1}$
 - 2 $g_n = 18\left(\frac{1}{2}\right)^{n-1}$
 - 3 $g_1 = 18$
 $g_n = 2g_{n-1}$
 - 4 $g_n = 18(2)^{n-1}$
- 216 In 2010, the population of New York State was approximately 19,378,000 with an annual growth rate of 1.5%. Assuming the growth rate is maintained for a large number of years, which equation can be used to predict the population of New York State t years after 2010?
- 1 $P_t = 19,378,000(1.5)^t$
 - 2 $P_0 = 19,378,000$
 $P_t = 19,378,000 + 1.015P_{t-1}$
 - 3 $P_t = 19,378,000(1.015)^{t-1}$
 - 4 $P_0 = 19,378,000$
 $P_t = 1.015P_{t-1}$
- 217 The Rickerts decided to set up an account for their daughter to pay for her college education. The day their daughter was born, they deposited \$1000 in an account that pays 1.8% compounded annually. Beginning with her first birthday, they deposit an additional \$750 into the account on each of her birthdays. Which expression correctly represents the amount of money in the account n years after their daughter was born?
- 1 $a_n = 1000(1.018)^n + 750$
 - 2 $a_n = 1000(1.018)^n + 750n$
 - 3 $a_0 = 1000$
 $a_n = a_{n-1}(1.018) + 750$
 - 4 $a_0 = 1000$
 $a_n = a_{n-1}(1.018) + 750n$
- 218 At her job, Pat earns \$25,000 the first year and receives a raise of \$1000 each year. The explicit formula for the n th term of this sequence is $a_n = 25,000 + (n - 1)1000$. Which rule best represents the equivalent recursive formula?
- 1 $a_n = 24,000 + 1000n$
 - 2 $a_n = 25,000 + 1000n$
 - 3 $a_1 = 25,000, a_n = a_{n-1} + 1000$
 - 4 $a_1 = 25,000, a_n = a_{n+1} + 1000$

F.BF.B.6: SIGMA NOTATION

- 219 Kristin wants to increase her running endurance. According to experts, a gradual mileage increase of 10% per week can reduce the risk of injury. If Kristin runs 8 miles in week one, which expression can help her find the total number of miles she will have run over the course of her 6-week training program?

1 $\sum_{n=1}^6 8(1.10)^{n-1}$

2 $\sum_{n=1}^6 8(1.10)^n$

3 $\frac{8 - 8(1.10)^6}{0.90}$

4 $\frac{8 - 8(0.10)^n}{1.10}$

A.SSE.B.4: SERIES

- 220 Using the formula below, determine the monthly payment on a 5-year car loan with a monthly percentage rate of 0.625% for a car with an original cost of \$21,000 and a \$1000 down payment, to the nearest cent.

$$P_n = PMT \left(\frac{1 - (1+i)^{-n}}{i} \right)$$

P_n = present amount borrowed

n = number of monthly pay periods

PMT = monthly payment

i = interest rate per month

The affordable monthly payment is \$300 for the same time period. Determine an appropriate down payment, to the nearest dollar.

- 221 Alexa earns \$33,000 in her first year of teaching and earns a 4% increase in each successive year. Write a geometric series formula, S_n , for Alexa's total earnings over n years. Use this formula to find Alexa's total earnings for her first 15 years of teaching, to the nearest cent.

- 222 Jasmine decides to put \$100 in a savings account each month. The account pays 3% annual interest, compounded monthly. How much money, S , will Jasmine have after one year?

1 $S = 100(1.03)^{12}$

2 $S = \frac{100 - 100(1.0025)^{12}}{1 - 1.0025}$

3 $S = 100(1.0025)^{12}$

4 $S = \frac{100 - 100(1.03)^{12}}{1 - 1.03}$

- 223 Jim is looking to buy a vacation home for \$172,600 near his favorite southern beach. The formula to compute a mortgage payment, M , is

$$M = P \cdot \frac{r(1+r)^N}{(1+r)^N - 1}$$

where P is the principal

amount of the loan, r is the monthly interest rate, and N is the number of monthly payments. Jim's bank offers a monthly interest rate of 0.305% for a 15-year mortgage. With no down payment, determine Jim's mortgage payment, rounded to the nearest dollar. Algebraically determine and state the down payment, rounded to the nearest dollar, that Jim needs to make in order for his mortgage payment to be \$1100.

Algebra II Regents Exam Questions by Common Core State Standard: Topic

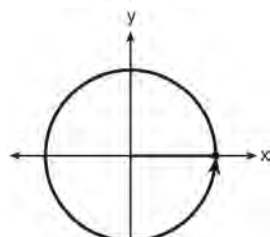
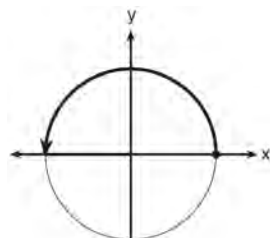
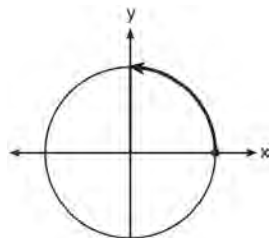
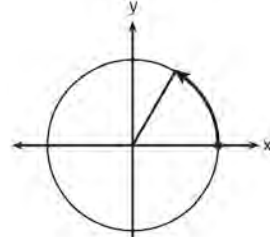
- 224 A ball is dropped from a height of 32 feet. It bounces and rebounds 80% of the height from which it was falling. What is the total downward distance, in feet, the ball traveled up to the 12th bounce?
- 1 29
 - 2 58
 - 3 120
 - 4 149

- 225 Brian deposited 1 cent into an empty non-interest bearing bank account on the first day of the month. He then additionally deposited 3 cents on the second day, 9 cents on the third day, and 27 cents on the fourth day. What would be the total amount of money in the account at the end of the 20th day if the pattern continued?
- 1 \$11,622,614.67
 - 2 \$17,433,922.00
 - 3 \$116,226,146.80
 - 4 \$1,743,392,200.00

TRIGONOMETRY

F.TF.A.1-2: UNIT CIRCLE

- 226 Which diagram shows an angle rotation of 1 radian on the unit circle?



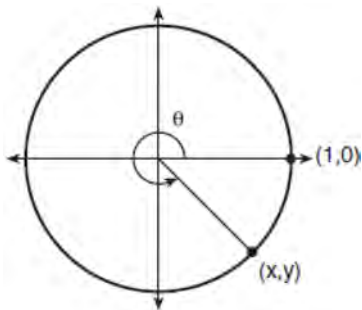
227 The terminal side of θ , an angle in standard position, intersects the unit circle at $P\left(-\frac{1}{3}, -\frac{\sqrt{8}}{3}\right)$.

What is the value of $\sec \theta$?

- 1 -3
- 2 $-\frac{3\sqrt{8}}{8}$
- 3 $-\frac{1}{3}$
- 4 $-\frac{\sqrt{8}}{3}$

F.TF.A.2: RECIPROCAL TRIGONOMETRIC FUNCTIONS

228 Using the unit circle below, explain why $\csc \theta = \frac{1}{y}$.



F.TF.A.2: REFERENCE ANGLES

229 Which diagram represents an angle, α , measuring $\frac{13\pi}{20}$ radians drawn in standard position, and its reference angle, θ ?

- 1
- 2
- 3
- 4

F.TF.A.2, F.TF.C.8: DETERMINING TRIGONOMETRIC FUNCTIONS

- 230 If the terminal side of angle θ , in standard position, passes through point $(-4,3)$, what is the numerical value of $\sin \theta$?
- 1 $\frac{3}{5}$
 - 2 $\frac{4}{5}$
 - 3 $-\frac{3}{5}$
 - 4 $-\frac{4}{5}$
- 231 A circle centered at the origin has a radius of 10 units. The terminal side of an angle, θ , intercepts the circle in Quadrant II at point C . The y -coordinate of point C is 8. What is the value of $\cos \theta$?
- 1 $-\frac{3}{5}$
 - 2 $-\frac{3}{4}$
 - 3 $\frac{3}{5}$
 - 4 $\frac{4}{5}$
- 232 The hours of daylight, y , in Utica in days, x , from January 1, 2013 can be modeled by the equation $y = 3.06 \sin(0.017x - 1.40) + 12.23$. How many hours of daylight, to the *nearest tenth*, does this model predict for February 14, 2013?
- 1 9.4
 - 2 10.4
 - 3 12.1
 - 4 12.2
- 233 Using the identity $\sin^2 \theta + \cos^2 \theta = 1$, find the value of $\tan \theta$, to the *nearest hundredth*, if $\cos \theta$ is -0.7 and θ is in Quadrant II.
- 234 Given that $\sin^2 \theta + \cos^2 \theta = 1$ and $\sin \theta = -\frac{\sqrt{2}}{5}$, what is a possible value of $\cos \theta$?
- 1 $\frac{5 + \sqrt{2}}{5}$
 - 2 $\frac{\sqrt{23}}{5}$
 - 3 $\frac{3\sqrt{3}}{5}$
 - 4 $\frac{\sqrt{35}}{5}$

F.TF.C.8: SIMPLIFYING TRIGONOMETRIC IDENTITIES

- 235 If $\sin^2(32^\circ) + \cos^2(M) = 1$, then M equals
- 1 32°
 - 2 58°
 - 3 68°
 - 4 72°

F.TF.B.5: MODELING TRIGONOMETRIC FUNCTIONS

- 236 The voltage used by most households can be modeled by a sine function. The maximum voltage is 120 volts, and there are 60 cycles *every second*. Which equation best represents the value of the voltage as it flows through the electric wires, where t is time in seconds?
- 1 $V = 120 \sin(t)$
 - 2 $V = 120 \sin(60t)$
 - 3 $V = 120 \sin(60\pi t)$
 - 4 $V = 120 \sin(120\pi t)$

F.IF.B.4, F.IF.C.7: GRAPHING TRIGONOMETRIC FUNCTIONS

- 237 The Ferris wheel at the landmark Navy Pier in Chicago takes 7 minutes to make one full rotation. The height, H , in feet, above the ground of one of the six-person cars can be modeled by

$$H(t) = 70 \sin\left(\frac{2\pi}{7}(t - 1.75)\right) + 80, \text{ where } t \text{ is time,}$$

in minutes. Using $H(t)$ for one full rotation, this car's minimum height, in feet, is

- 1 150
 - 2 70
 - 3 10
 - 4 0
- 238 A sine function increasing through the origin can be used to model light waves. Violet light has a wavelength of 400 nanometers. Over which interval is the height of the wave *decreasing*, only?
- 1 $(0, 200)$
 - 2 $(100, 300)$
 - 3 $(200, 400)$
 - 4 $(300, 400)$

- 239 Based on climate data that have been collected in Bar Harbor, Maine, the average monthly temperature, in degrees F, can be modeled by the equation $B(x) = 23.914 \sin(0.508x - 2.116) + 55.300$. The same governmental agency collected average monthly temperature data for Phoenix, Arizona, and found the temperatures could be modeled by the equation $P(x) = 20.238 \sin(0.525x - 2.148) + 86.729$. Which statement can *not* be concluded based on the average monthly temperature models x months after starting data collection?
- 1 The average monthly temperature variation is more in Bar Harbor than in Phoenix.
 - 2 The midline average monthly temperature for Bar Harbor is lower than the midline temperature for Phoenix.
 - 3 The maximum average monthly temperature for Bar Harbor is 79° F, to the nearest degree.
 - 4 The minimum average monthly temperature for Phoenix is 20° F, to the nearest degree.

- 240 Relative to the graph of $y = 3 \sin x$, what is the shift of the graph of $y = 3 \sin\left(x + \frac{\pi}{3}\right)$?
- 1 $\frac{\pi}{3}$ right
 - 2 $\frac{\pi}{3}$ left
 - 3 $\frac{\pi}{3}$ up
 - 4 $\frac{\pi}{3}$ down

241 Given the parent function $p(x) = \cos x$, which phrase best describes the transformation used to obtain the graph of $g(x) = \cos(x + a) - b$, if a and b are positive constants?

- 1 right a units, up b units
- 2 right a units, down b units
- 3 left a units, up b units
- 4 left a units, down b units

242 As x increases from 0 to $\frac{\pi}{2}$, the graph of the equation $y = 2 \tan x$ will

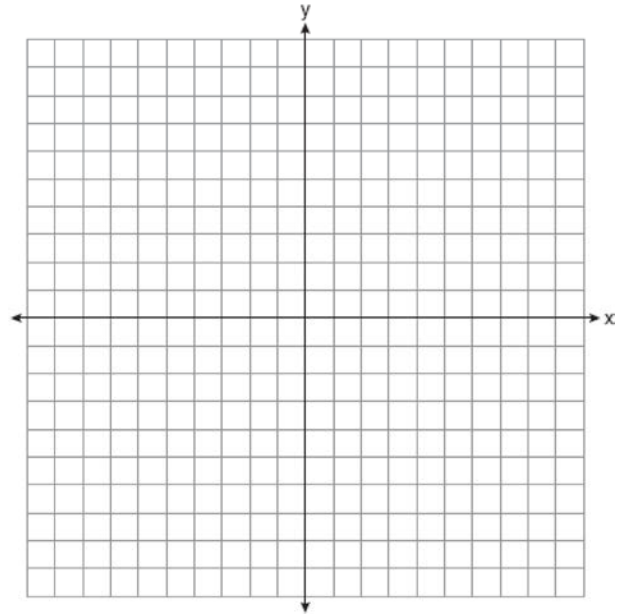
- 1 increase from 0 to 2
- 2 decrease from 0 to -2
- 3 increase without limit
- 4 decrease without limit

243 Which statement is *incorrect* for the graph of the function $y = -3 \cos \left[\frac{\pi}{3} (x - 4) \right] + 7$?

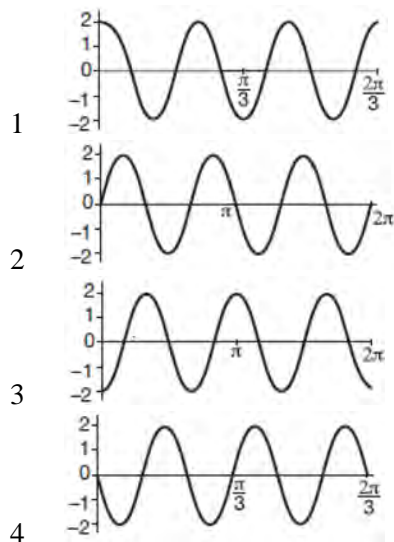
- 1 The period is 6.
- 2 The amplitude is 3.
- 3 The range is $[4, 10]$.
- 4 The midline is $y = -4$.

244 The volume of air in a person's lungs, as the person breathes in and out, can be modeled by a sine graph. A scientist is studying the differences in this volume for people at rest compared to people told to take a deep breath. When examining the graphs, should the scientist focus on the amplitude, period, or midline? Explain your choice.

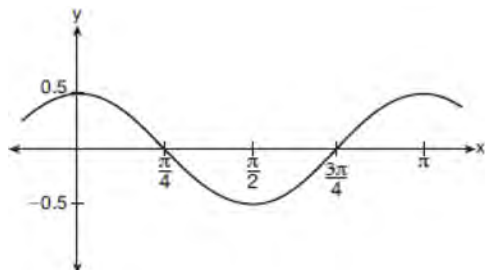
245 On the axes below, graph *one* cycle of a cosine function with amplitude 3, period $\frac{\pi}{2}$, midline $y = -1$, and passing through the point $(0, 2)$.



- 246 Which graph represents a cosine function with no horizontal shift, an amplitude of 2, and a period of $\frac{2\pi}{3}$?




- 247 Which equation is represented by the graph shown below?



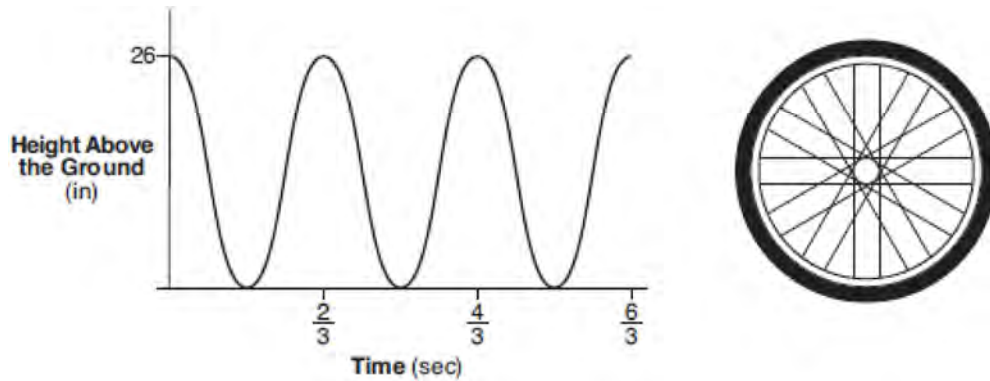
- 1 $y = \frac{1}{2} \cos 2x$
- 2 $y = \cos x$
- 3 $y = \frac{1}{2} \cos x$
- 4 $y = 2 \cos \frac{1}{2} x$

- 248 The ocean tides near Carter Beach follow a repeating pattern over time, with the amount of time between each low and high tide remaining relatively constant. On a certain day, low tide occurred at 8:30 a.m. and high tide occurred at 3:00 p.m. At high tide, the water level was 12 inches above the average local sea level; at low tide it was 12 inches below the average local sea level. Assume that high tide and low tide are the maximum and minimum water levels each day, respectively. Write a cosine function of the form $f(t) = A \cos(Bt)$, where A and B are real numbers, that models the water level, $f(t)$, in inches above or below the average Carter Beach sea level, as a function of the time measured in t hours since 8:30 a.m. On the grid below, graph one cycle of this function.



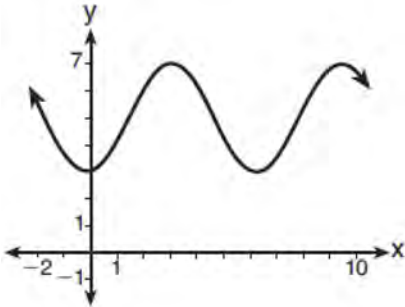
People who fish in Carter Beach know that a certain species of fish is most plentiful when the water level is increasing. Explain whether you would recommend fishing for this species at 7:30 p.m. or 10:30 p.m. using evidence from the given context.

- 249 The graph below represents the height above the ground, h , in inches, of a point on a triathlete's bike wheel during a training ride in terms of time, t , in seconds.

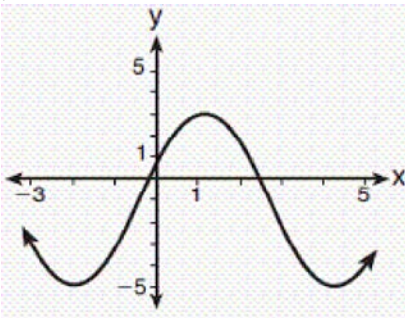


Identify the period of the graph and describe what the period represents in this context.

- 250 Which sinusoid has the greatest amplitude?



- 1
 2 $y = 3 \sin(\theta - 3) + 5$

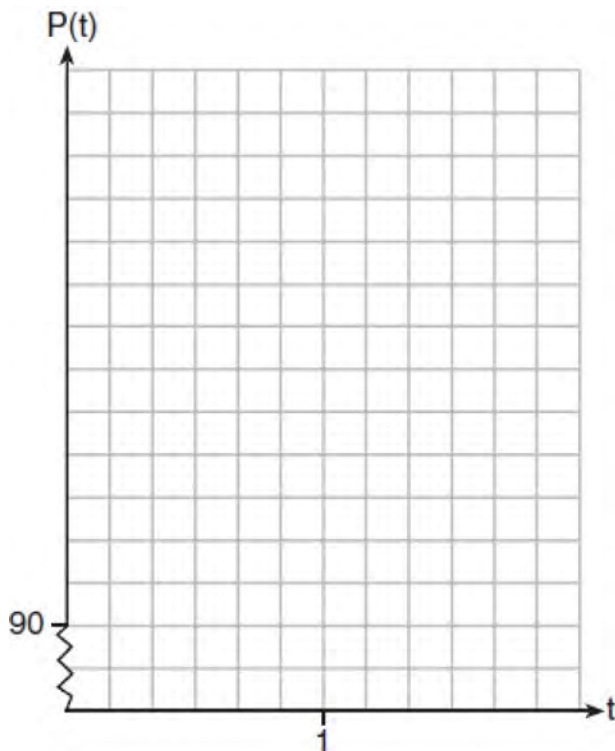


- 3
 4 $y = -5 \sin(\theta - 1) - 3$

- 251 The resting blood pressure of an adult patient can be modeled by the function P below, where $P(t)$ is the pressure in millimeters of mercury after time t in seconds.

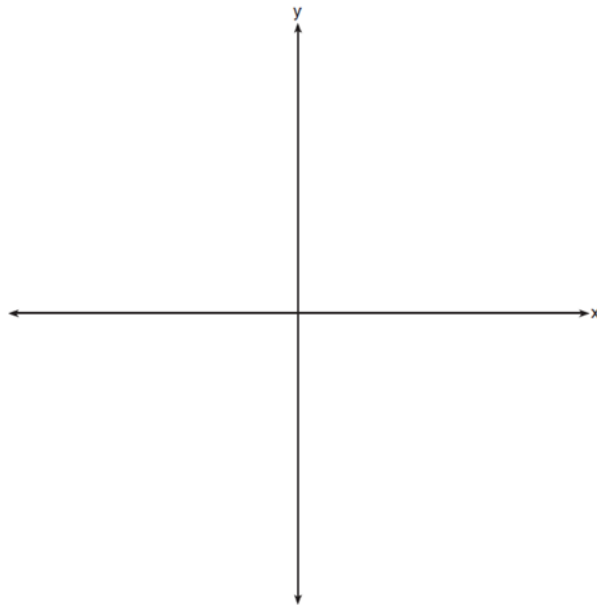
$$P(t) = 24 \cos(3\pi t) + 120$$

On the set of axes below, graph $y = P(t)$ over the domain $0 \leq t \leq 2$.



Determine the period of P . Explain what this value represents in the given context. Normal resting blood pressure for an adult is 120 over 80. This means that the blood pressure oscillates between a maximum of 120 and a minimum of 80. Adults with high blood pressure (above 140 over 90) and adults with low blood pressure (below 90 over 60) may be at risk for health disorders. Classify the given patient's blood pressure as low, normal, or high and explain your reasoning.

- 252 a) On the axes below, sketch *at least one* cycle of a sine curve with an amplitude of 2, a midline at $y = -\frac{3}{2}$, and a period of 2π .



- b) Explain any differences between a sketch of $y = 2 \sin\left(x - \frac{\pi}{3}\right) - \frac{3}{2}$ and the sketch from part a.

CONICS

G.GPE.A.1: EQUATIONS OF CIRCLES

- 253 The equation $4x^2 - 24x + 4y^2 + 72y = 76$ is equivalent to
- 1 $4(x - 3)^2 + 4(y + 9)^2 = 76$
 - 2 $4(x - 3)^2 + 4(y + 9)^2 = 121$
 - 3 $4(x - 3)^2 + 4(y + 9)^2 = 166$
 - 4 $4(x - 3)^2 + 4(y + 9)^2 = 436$

Algebra II Regents Exam Questions by Common Core State Standard: Topic Answer Section

- 1 ANS: 3 PTS: 2 REF: 061607aai NAT: S.IC.A.2
TOP: Analysis of Data
- 2 ANS: 3 PTS: 2 REF: 061710aai NAT: S.IC.A.2
TOP: Analysis of Data
- 3 ANS: 2 PTS: 2 REF: 011820aai NAT: S.IC.A.2
TOP: Analysis of Data
- 4 ANS:
sample: pails of oranges; population: truckload of oranges. It is likely that about 5% of all the oranges are unsatisfactory.
- PTS: 2 REF: 011726aai NAT: S.IC.A.2 TOP: Analysis of Data
- 5 ANS:
Since there are six flavors, each flavor can be assigned a number, 1-6. Use the simulation to see the number of times the same number is rolled 4 times in a row.
- PTS: 2 REF: 081728aai NAT: S.IC.A.2 TOP: Analysis of Data
- 6 ANS:
 $138.905 \pm 2 \cdot 7.95 = 123 - 155$. No, since 125 (50% of 250) falls within the 95% interval.
- PTS: 4 REF: 011835aai NAT: S.IC.A.2 TOP: Analysis of Data
- 7 ANS:
Randomly assign participants to two groups. One group uses the toothpaste with ingredient X and the other group uses the toothpaste without ingredient X .
- PTS: 2 REF: 061626aai NAT: S.IC.B.3 TOP: Analysis of Data
KEY: type
- 8 ANS: 1
II. Ninth graders drive to school less often; III. Students know little about adults; IV. Calculus students love math!
- PTS: 2 REF: 081602aai NAT: S.IC.B.3 TOP: Analysis of Data
KEY: bias
- 9 ANS: 3 PTS: 2 REF: 011706aai NAT: S.IC.B.3
TOP: Analysis of Data KEY: type
- 10 ANS: 3
Self selection causes bias.
- PTS: 2 REF: 061703aai NAT: S.IC.B.3 TOP: Analysis of Data
KEY: bias
- 11 ANS: 2 PTS: 2 REF: 081717aai NAT: S.IC.B.3
TOP: Analysis of Data KEY: type
- 12 ANS: 4 PTS: 2 REF: 011801aai NAT: S.IC.B.3
TOP: Analysis of Data KEY: bias

13 ANS: 2

$$ME = \left(z \sqrt{\frac{p(1-p)}{n}} \right) = \left(1.96 \sqrt{\frac{(0.55)(0.45)}{900}} \right) \approx 0.03$$

PTS: 2 REF: 081612aii NAT: S.IC.B.4 TOP: Analysis of Data

14 ANS:

Yes. The margin of error from this simulation indicates that 95% of the observations fall within ± 0.12 of the simulated proportion, 0.25. The margin of error can be estimated by multiplying the standard deviation, shown to

be 0.06 in the dotplot, by 2, or applying the estimated standard error formula, $\left(\sqrt{\frac{p(1-p)}{n}} \right)$ or $\left(\sqrt{\frac{(0.25)(0.75)}{50}} \right)$

and multiplying by 2. The interval 0.25 ± 0.12 includes plausible values for the true proportion of people who prefer Stephen's new product. The company has evidence that the population proportion could be at least 25%. As seen in the dotplot, it can be expected to obtain a sample proportion of 0.18 (9 out of 50) or less several times, even when the population proportion is 0.25, due to sampling variability. Given this information, the results of the survey do not provide enough evidence to suggest that the true proportion is not at least 0.25, so the development of the product should continue at this time.

PTS: 4 REF: spr1512aii NAT: S.IC.B.4 TOP: Analysis of Data

15 ANS: 2

$$ME = \left(z \sqrt{\frac{p(1-p)}{n}} \right) = \left(1.96 \sqrt{\frac{(0.16)(0.84)}{1334}} \right) \approx 0.02$$

PTS: 2 REF: 081716aii NAT: S.IC.B.4 TOP: Analysis of Data

16 ANS:

The mean difference between the students' final grades in group 1 and group 2 is -3.64 . This value indicates that students who met with a tutor had a mean final grade of 3.64 points less than students who used an on-line subscription. One can infer whether this difference is due to the differences in intervention or due to which students were assigned to each group by using a simulation to rerandomize the students' final grades many (500) times. If the observed difference -3.64 is the result of the assignment of students to groups alone, then a difference of -3.64 or less should be observed fairly regularly in the simulation output. However, a difference of -3 or less occurs in only about 2% of the rerandomizations. Therefore, it is quite unlikely that the assignment to groups alone accounts for the difference; rather, it is likely that the difference between the interventions themselves accounts for the difference between the two groups' mean final grades.

PTS: 4 REF: fall1514aii NAT: S.IC.B.5 TOP: Analysis of Data

17 ANS:

$0.602 \pm 2 \cdot 0.066 = 0.47 - 0.73$. Since 0.50 falls within the 95% interval, this supports the concern there may be an even split.

PTS: 4 REF: 061635aii NAT: S.IC.B.5 TOP: Analysis of Data

18 ANS:

Some of the students who did not drink energy drinks read faster than those who did drink energy drinks.

$17.7 - 19.1 = -1.4$ Differences of -1.4 and less occur $\frac{25}{232}$ or about 10% of the time, so the difference is not unusual.

PTS: 4 REF: 081636aii NAT: S.IC.B.5 TOP: Analysis of Data

19 ANS: 2 PTS: 2 REF: 011709aii NAT: S.IC.B.5

TOP: Analysis of Data

20 ANS:

$0.506 \pm 2 \cdot 0.078 = 0.35 - 0.66$. The 32.5% value falls below the 95% confidence level.

PTS: 4 REF: 061736aii NAT: S.IC.B.5 TOP: Analysis of Data

21 ANS:

Using a 95% level of confidence, $x \pm 2$ standard deviations sets the usual wait time as 150-302 seconds. 360 seconds is unusual.

PTS: 2 REF: 081629aii NAT: S.IC.B.6 TOP: Analysis of Data

22 ANS: 1 PTS: 2 REF: 081722aii NAT: S.IC.B.6

TOP: Analysis of Data

23 ANS:

$$y = 4.168(3.981)^x \quad 100 = 4.168(3.981)^x$$

$$\log \frac{100}{4.168} = \log(3.981)^x$$

$$\log \frac{100}{4.168} = x \log(3.981)$$

$$\frac{\log \frac{100}{4.168}}{\log(3.981)} = x$$

$$x \approx 2.25$$

PTS: 4 REF: 081736aii NAT: S.ID.B.6 TOP: Regression

KEY: exponential AII

24 ANS:

$$D = 1.223(2.652)^A$$

PTS: 2 REF: 011826aii NAT: S.ID.B.6 TOP: Regression

KEY: exponential AII

25 ANS: 3

The pattern suggests an exponential pattern, not linear or sinusoidal. A 4% growth rate is accurate, while a 43% growth rate is not.

PTS: 2 REF: 011713aii NAT: S.ID.B.6 TOP: Regression

KEY: choose model

26 ANS:

$$\text{normcdf}(510, 540, 480, 24) = 0.0994 \quad z = \frac{510 - 480}{24} = 1.25 \quad 1.25 = \frac{x - 510}{20} \quad 2.5 = \frac{x - 510}{20} \quad 535 - 560$$

$$z = \frac{540 - 480}{24} = 2.5 \quad x = 535 \quad x = 560$$

PTS: 4 REF: fall1516aai NAT: S.ID.A.4 TOP: Normal Distributions

KEY: probability

27 ANS: 2



$\bar{x} + 2\sigma$ represents approximately 48% of the data.

PTS: 2 REF: 061609aai NAT: S.ID.A.4 TOP: Normal Distributions

KEY: percent

28 ANS: 3



PTS: 2 REF: 081604aai NAT: S.ID.A.4 TOP: Normal Distributions

KEY: probability

29 ANS: 4

$$496 \pm 2(115)$$

PTS: 2 REF: 011718aai NAT: S.ID.A.4 TOP: Normal Distributions

KEY: interval

30 ANS:



69

PTS: 2 REF: 061726aai NAT: S.ID.A.4 TOP: Normal Distributions

KEY: percent

31 ANS: 1

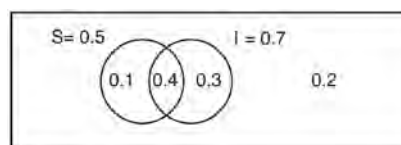


PTS: 2 REF: 081711aia NAT: S.ID.A.4 TOP: Normal Distributions
KEY: percent

32 ANS: 3
 $440 \times 2.3\% \approx 10$

PTS: 2 REF: 011807aia NAT: S.ID.A.4 TOP: Normal Distributions
KEY: predict

33 ANS:



This scenario can be modeled with a Venn Diagram: Since
 $P(S \cup I)^c = 0.2$, $P(S \cup I) = 0.8$. Then, $P(S \cap I) = P(S) + P(I) - P(S \cup I)$ If S and I are independent, then the

$$= 0.5 + 0.7 - 0.8$$

$$= 0.4$$

Product Rule must be satisfied. However, $(0.5)(0.7) \neq 0.4$. Therefore, salary and insurance have not been treated independently.

PTS: 4 REF: spr1513aia NAT: S.CP.A.2 TOP: Theoretical Probability

34 ANS:

$P(A \cup B) = P(A) + P(B) - P(A \cap B)$ A and B are independent since $P(A \cap B) = P(A) \cdot P(B)$

$$0.8 = 0.6 + 0.5 - P(A \cap B) \qquad 0.3 = 0.6 \cdot 0.5$$

$$P(A \cap B) = 0.3 \qquad 0.3 = 0.3$$

PTS: 2 REF: 081632aia NAT: S.CP.A.2 TOP: Theoretical Probability

35 ANS:

$$P(S \cap M) = P(S) + P(M) - P(S \cup M) = \frac{649}{1376} + \frac{433}{1376} - \frac{974}{1376} = \frac{108}{1376}$$

PTS: 2 REF: 061629aia NAT: S.CP.B.7 TOP: Theoretical Probability

36 ANS: 2

The events are independent because $P(A \text{ and } B) = P(A) \cdot P(B)$.

$$0.125 = 0.5 \cdot 0.25$$

If $P(A \text{ or } B) = P(A) + P(B) - P(A \text{ and } B) = 0.25 + 0.5 - .125 = 0.625$, then the events are not mutually exclusive because $P(A \text{ or } B) = P(A) + P(B)$

$$0.625 \neq 0.5 + 0.25$$

PTS: 2 REF: 061714aai NAT: S.CP.B.7 TOP: Theoretical Probability

37 ANS: 1

The probability of rain equals the probability of rain, given that Sean pitches.

PTS: 2 REF: 061611aai NAT: S.CP.A.3 TOP: Conditional Probability

38 ANS:

$$\frac{47}{108} = \frac{1}{4} + \frac{116}{459} - P(M \text{ and } J); \text{ No, because } \frac{31}{459} \neq \frac{1}{4} \cdot \frac{116}{459}$$

$$P(M \text{ and } J) = \frac{31}{459}$$

PTS: 4 REF: 011834aai NAT: S.CP.A.3 TOP: Conditional Probability

39 ANS: 1

$$\frac{157}{25 + 47 + 157}$$

PTS: 2 REF: 081607aai NAT: S.CP.A.4 TOP: Conditional Probability

40 ANS:

Based on these data, the two events do not appear to be independent. $P(F) = \frac{106}{200} = 0.53$, while

$P(F|T) = \frac{54}{90} = 0.6$, $P(F|R) = \frac{25}{65} = 0.39$, and $P(F|C) = \frac{27}{45} = 0.6$. The probability of being female are not the same as the conditional probabilities. This suggests that the events are not independent.

PTS: 2 REF: fall1508aai NAT: S.CP.A.4 TOP: Conditional Probability

41 ANS:

No, because $P(M/R) \neq P(M)$

$$\frac{70}{180} \neq \frac{230}{490}$$

$$0.38 \neq 0.47$$

PTS: 2 REF: 011731aai NAT: S.CP.A.4 TOP: Conditional Probability

42 ANS:

A student is more likely to jog if both siblings jog. 1 jogs: $\frac{416}{2239} \approx 0.19$. both jog: $\frac{400}{1780} \approx 0.22$

PTS: 2 REF: 061732aai NAT: S.CP.A.4 TOP: Conditional Probability

43 ANS:

$$P(P/K) = \frac{P(P \wedge K)}{P(K)} = \frac{1.9}{2.3} \approx 82.6\% \quad \text{A key club member has an 82.6\% probability of being enrolled in AP Physics.}$$

PTS: 4 REF: 011735aii NAT: S.CP.B.6 TOP: Conditional Probability

44 ANS:

$$P(W/D) = \frac{P(W \wedge D)}{P(D)} = \frac{.4}{.5} \approx .8$$

PTS: 2 REF: 081726aii NAT: S.CP.B.6 TOP: Conditional Probability

45 ANS:

$$\frac{f(4) - f(-2)}{4 - (-2)} = \frac{80 - 1.25}{6} = 13.125 \quad g(x) \text{ has a greater rate of change}$$

$$\frac{g(4) - g(-2)}{4 - (-2)} = \frac{179 - (-49)}{6} = 38$$

PTS: 4 REF: 061636aii NAT: F.IF.B.6 TOP: Rate of Change

KEY: All

46 ANS: 4

$$(1) \frac{B(60) - B(10)}{60 - 10} \approx 28\% \quad (2) \frac{B(69) - B(19)}{69 - 19} \approx 33\% \quad (3) \frac{B(72) - B(36)}{72 - 36} \approx 38\% \quad (4) \frac{B(73) - B(60)}{73 - 60} \approx 46\%$$

PTS: 2 REF: 011721aii NAT: F.IF.B.6 TOP: Rate of Change

KEY: All

47 ANS:

$$\frac{156.25 - 56.25}{70 - 50} = \frac{150}{20} = 7.5 \quad \text{Between 50-70 mph, each additional mph in speed requires 7.5 more feet to stop.}$$

PTS: 2 REF: 081631aii NAT: F.IF.B.6 TOP: Rate of Change

KEY: All

48 ANS: 1

$$(1) \frac{9 - 0}{2 - 1} = 9 \quad (2) \frac{17 - 0}{3.5 - 1} = 6.8 \quad (3) \frac{0 - 0}{5 - 1} = 0 \quad (4) \frac{17 - (-5)}{3.5 - 1} \approx 6.3$$

PTS: 2 REF: 011724aii NAT: F.IF.B.6 TOP: Rate of Change

KEY: All

49 ANS: 3

$$\frac{f(7) - f(-7)}{7 - (-7)} = \frac{2^{-0.25(7)} \cdot \sin\left(\frac{\pi}{2}(7)\right) - 2^{-0.25(-7)} \cdot \sin\left(\frac{\pi}{2}(-7)\right)}{14} \approx -0.26$$

PTS: 2 REF: 061721aii NAT: F.IF.B.6 TOP: Rate of Change

KEY: All

50 ANS: 3

$$\log_{0.8} \left(\frac{V}{17000} \right) = t \quad \frac{17,000(0.8)^3 - 17,000(0.8)^1}{3-1} \approx -2450$$

$$0.8^t = \frac{V}{17000}$$

$$V = 17000(0.8)^t$$

PTS: 2

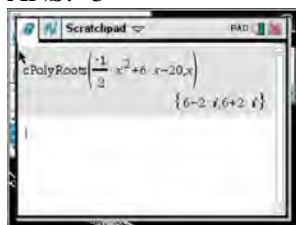
REF: 081709aai

NAT: F.IF.B.6

TOP: Rate of Change

KEY: All

51 ANS: 3



$$-2 \left(-\frac{1}{2}x^2 = -6x + 20 \right)$$

$$x^2 - 12x = -40$$

$$x^2 - 12x + 36 = -40 + 36$$

$$(x - 6)^2 = -4$$

$$x - 6 = \pm 2i$$

$$x = 6 \pm 2i$$

PTS: 2


REF: fall1504aai

NAT: A.REI.B.4

TOP: Solving Quadratics

KEY: complex solutions | completing the square

52 ANS: 1



$$x = \frac{-3 \pm \sqrt{3^2 - 4(2)(2)}}{2(2)} = \frac{-3 \pm \sqrt{-7}}{4} = -\frac{3}{4} \pm \frac{i\sqrt{7}}{4}$$

PTS: 2

REF: 061612aai

NAT: A.REI.B.4

TOP: Solving Quadratics

KEY: complex solutions | quadratic formula

53 ANS: 4

$$x = \frac{8 \pm \sqrt{(-8)^2 - 4(6)(29)}}{2(6)} = \frac{8 \pm \sqrt{-632}}{12} = \frac{8 \pm i\sqrt{4}\sqrt{158}}{12} = \frac{2}{3} \pm \frac{1}{6}i\sqrt{158}$$

PTS: 2

REF: 011711aai

NAT: A.REI.B.4

TOP: Solving Quadratics

KEY: complex solutions | quadratic formula

54 ANS: 3

$$x^2 + 2x + 1 = -5 + 1$$

$$(x + 1)^2 = -4$$

$$x + 1 = \pm 2i$$

$$x = -1 \pm 2i$$

PTS: 2 REF: 081703aai NAT: A.REI.B.4 TOP: Solving Quadratics

KEY: complex solutions | completing the square

55 ANS: 4

$$4x^2 = -98$$

$$x^2 = -\frac{98}{4}$$

$$x^2 = -\frac{49}{2}$$

$$x = \pm \sqrt{-\frac{49}{2}} = \pm \frac{7i}{\sqrt{2}} \cdot \frac{\sqrt{2}}{\sqrt{2}} = \pm \frac{7i\sqrt{2}}{2}$$

PTS: 2 REF: 061707aai NAT: A.REI.B.4 TOP: Solving Quadratics

KEY: complex solutions | taking square roots

56 ANS: 4

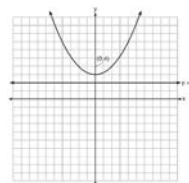
If $1 - i$ is one solution, the other is $1 + i$. $(x - (1 - i))(x - (1 + i)) = 0$

$$x^2 - x - ix - x + ix + (1 - i^2) = 0$$

$$x^2 - 2x + 2 = 0$$

PTS: 2 REF: 081601aai NAT: A.REI.B.4 TOP: Complex Conjugate Root Theorem

57 ANS: 4



A parabola with a focus of $(0,4)$ and a directrix of $y = 2$ is sketched as follows: By inspection, it is determined that the vertex of the parabola is $(0,3)$. It is also evident that the distance, p , between the vertex and the focus is 1. It is possible to use the formula $(x - h)^2 = 4p(y - k)$ to derive the equation of the parabola as follows: $(x - 0)^2 = 4(1)(y - 3)$

$$x^2 = 4y - 12$$

$$x^2 + 12 = 4y$$

$$\frac{x^2}{4} + 3 = y$$

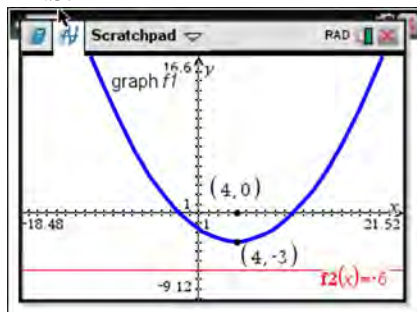
or A point (x,y) on the parabola must be the same distance from the focus as it is from the directrix. For any such point (x,y) , the distance to the focus is $\sqrt{(x-0)^2 + (y-4)^2}$ and the distance to the directrix is $y - 2$. Setting this equal leads to: $x^2 + y^2 - 8y + 16 = y^2 - 4y + 4$

$$x^2 + 16 = 4y + 4$$

$$\frac{x^2}{4} + 3 = y$$

PTS: 2 REF: spr1502aii NAT: G.GPE.A.2 TOP: Graphing Quadratic Functions

58 ANS:



The vertex of the parabola is $(4,-3)$. The x -coordinate of the focus and the vertex is the same. Since the distance from the vertex to the directrix is 3, the distance from the vertex to the focus is 3, so the y -coordinate of the focus is 0. The coordinates of the focus are $(4,0)$.

PTS: 2 REF: 061630aii NAT: G.GPE.A.2 TOP: Graphing Quadratic Functions

59 ANS: 4

The vertex is $(2,-1)$ and $p = 2$. $y = -\frac{1}{4(2)}(x - 2)^2 - 1$

PTS: 2 REF: 081619aii NAT: G.GPE.A.2 TOP: Graphing Quadratic Functions

60 ANS: 4

The vertex is (1,0) and $p = 2$. $y = \frac{1}{4(2)}(x-1)^2 + 0$

PTS: 2 REF: 061717aai NAT: G.GPE.A.2 TOP: Graphing Quadratic Functions

61 ANS: 2

The vertex of the parabola is (0,0). The distance, p , between the vertex and the focus or the vertex and the directrix is 1. $y = \frac{-1}{4p}(x-h)^2 + k$

$$y = \frac{-1}{4(1)}(x-0)^2 + 0$$

$$y = -\frac{1}{4}x^2$$

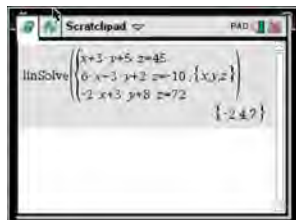
PTS: 2 REF: 081706aai NAT: G.GPE.A.2 TOP: Graphing Quadratic Functions

62 ANS: 1

In vertex form, the parabola is $y = -\frac{1}{4(2)}(x+4)^2 + 3$. The vertex is (-4,3) and $p = 2$. $3 + 2 = 5$

PTS: 2 REF: 011816aai NAT: G.GPE.A.2 TOP: Graphing Quadratic Functions

63 ANS:



$$6x - 3y + 2z = -10 \quad x + 3y + 5z = 45 \quad 4x + 10z = 62 \quad 4x + 4(7) = 20$$

$$-2x + 3y + 8z = 72 \quad 6x - 3y + 2z = -10 \quad 4x + 4z = 20 \quad 4x = -8$$

$$4x + 10z = 62 \quad 7x + 7z = 35 \quad 6z = 42 \quad x = -2$$

$$4x + 4z = 20 \quad z = 7$$

$$6(-2) - 3y + 2(7) = -10$$

$$-3y = -12$$

$$y = 4$$

PTS: 4 REF: spr1510aai NAT: A.REI.C.6 TOP: Solving Linear Systems

KEY: three variables

64 ANS: 2

Combining (1) and (3): $-6c = -18$ Combining (1) and (2): $5a + 3c = -1$ Using (3): $-(-2) - 5b - 5(3) = 2$

$$c = 3$$

$$5a + 3(3) = -1$$

$$2 - 5b - 15 = 2$$

$$5a = -10$$

$$b = -3$$

$$a = -2$$

PTS: 2 REF: 081623aai NAT: A.REI.C.6 TOP: Solving Linear Systems

KEY: three variables

65 ANS:

$$x + y + z = 1 \quad 2x + 2y + 2z = 2 \quad -2z - z = 3 \quad y - (-1) = 3 \quad x + 2 - 1 = 1$$

$$\underline{-x + 3y - 5z = 11} \quad \underline{2x + 4y + 6z = 2} \quad -3z = 3 \quad y = 2 \quad x = 0$$

$$4y - 4z = 12 \quad 2y + 4z = 0 \quad z = -1$$

$$y - z = 3 \quad y + 2z = 0$$

$$y = -2z$$

PTS: 4 REF: 061733aai NAT: A.REI.C.6 TOP: Solving Linear Systems

KEY: three variables

66 ANS: 4

$$3x - (-2x + 14) = 16 \quad 3(6) - 4z = 2$$

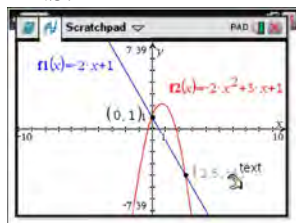
$$5x = 30 \quad -4z = -16$$

$$x = 6 \quad z = 4$$

PTS: 2 REF: 011803aai NAT: A.REI.C.6 TOP: Solving Linear Systems

KEY: three variables

67 ANS:



$$-2x + 1 = -2x^2 + 3x + 1$$

$$2x^2 - 5x = 0$$

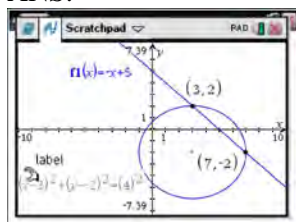
$$x(2x - 5) = 0$$

$$x = 0, \frac{5}{2}$$

PTS: 2 REF: fall1507aai NAT: A.REI.C.7 TOP: Quadratic-Linear Systems

KEY: All

68 ANS:



$$y = -x + 5 \quad y = -7 + 5 = -2$$

$$(x - 3)^2 + (-x + 5 + 2)^2 = 16 \quad y = -3 + 5 = 2$$

$$x^2 - 6x + 9 + x^2 - 14x + 49 = 16$$

$$2x^2 - 20x + 42 = 0$$

$$x^2 - 10x + 21 = 0$$

$$(x - 7)(x - 3) = 0$$

$$x = 7, 3$$

PTS: 4

REF: 061633aia NAT: A.REI.C.7

TOP: Quadratic-Linear Systems

KEY: AII

69 ANS: 4

$$y = g(x) = (x - 2)^2 \quad (x - 2)^2 = 3x - 2 \quad y = 3(6) - 2 = 16$$

$$x^2 - 4x + 4 = 3x - 2 \quad y = 3(1) - 2 = 1$$

$$x^2 - 7x + 6 = 0$$

$$(x - 6)(x - 1) = 0$$

$$x = 6, 1$$

PTS: 2

REF: 011705aia NAT: A.REI.C.7

TOP: Quadratic-Linear Systems

KEY: AII

70 ANS: 1

$$(x + 3)^2 + (2x - 4)^2 = 8 \quad b^2 - 4ac$$

$$x^2 + 6x + 9 + 4x^2 - 16x + 16 = 8 \quad 100 - 4(5)(17) < 0$$

$$5x^2 - 10x + 17 = 0$$

PTS: 2

REF: 081719aia NAT: A.REI.C.7

TOP: Quadratic-Linear Systems

KEY: AII

71 ANS: 3

$$-33t^2 + 360t = 700 + 5t$$

$$-33t^2 + 355t - 700 = 0$$

$$t = \frac{-355 \pm \sqrt{355^2 - 4(-33)(-700)}}{2(-33)} \approx 3,8$$

PTS: 2

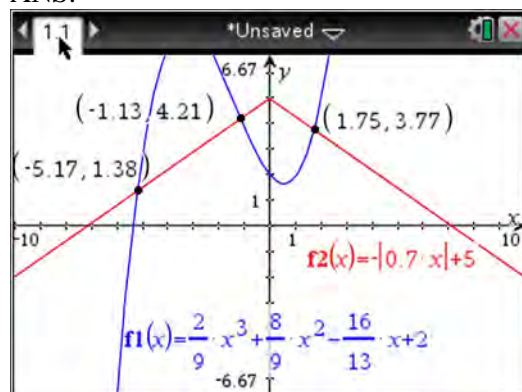
REF: 081606aai

NAT: A.REI.D.11

TOP: Quadratic-Linear Systems

KEY: AII

72 ANS:



PTS: 2

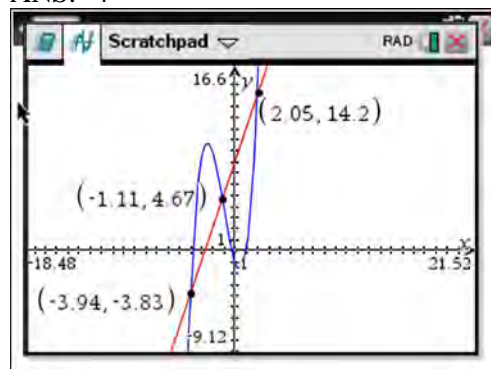
REF: fall1510aai

NAT: A.REI.D.11

TOP: Other Systems

KEY: AII

73 ANS: 4



PTS: 2

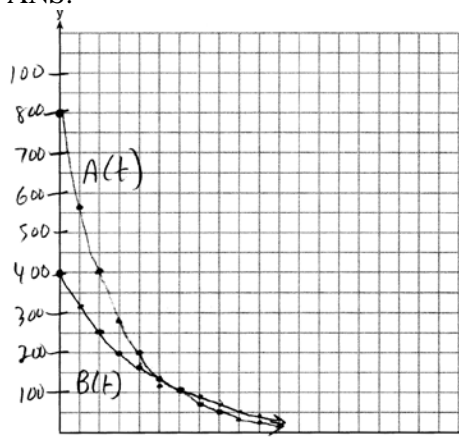
REF: 061622aai

NAT: A.REI.D.11

TOP: Other Systems

KEY: AII

74 ANS:



$$A(t) = 800e^{-0.347t}$$

$$800e^{-0.347t} = 400e^{-0.231t} \quad 0.15 = e^{-0.347t}$$

$$B(t) = 400e^{-0.231t}$$

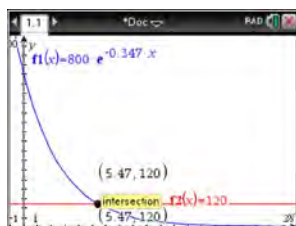
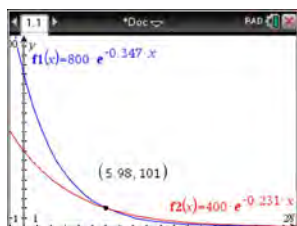
$$\ln 2e^{-0.347t} = \ln e^{-0.231t} \quad \ln 0.15 = \ln e^{-0.347t}$$

$$\ln 2 + \ln e^{-0.347t} = \ln e^{-0.231t} \quad \ln 0.15 = -0.347t \cdot \ln e$$

$$\ln 2 - 0.347t = -0.231t \quad 5.5 \approx t$$

$$\ln 2 = 0.116t$$

$$6 \approx t$$



PTS: 6

REF: 061637aai

NAT: A.REI.D.11

TOP: Other Systems

KEY: AII

75 ANS: 2



PTS: 2

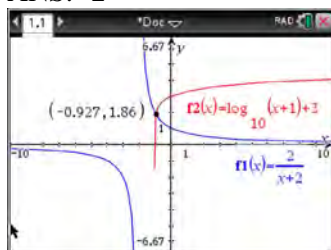
REF: 081603aai

NAT: A.REI.D.11

TOP: Other Systems

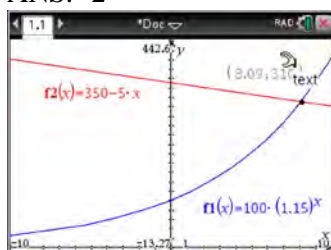
KEY: AII

76 ANS: 2



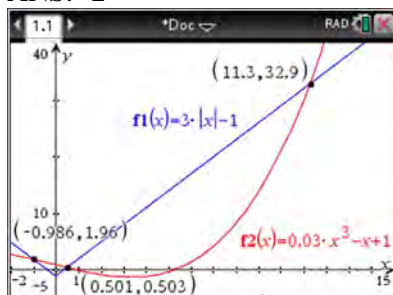
PTS: 2 REF: 011712aai NAT: A.REI.D.11 TOP: Other Systems
KEY: AII

77 ANS: 2



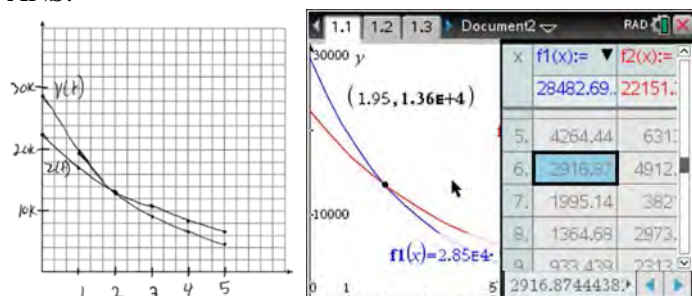
PTS: 2 REF: 011716aai NAT: A.REI.D.11 TOP: Other Systems
KEY: AII

78 ANS: 2



PTS: 2 REF: 061705aai NAT: A.REI.D.11 TOP: Other Systems
KEY: AII

79 ANS:



At 1.95 years, the value of the car equals the loan balance. Zach can cancel the policy after 6 years.

PTS: 4 REF: 081737aai NAT: A.REI.D.11 TOP: Other Systems
KEY: AII

80 ANS: 1 PTS: 2 REF: 011814aai NAT: A.REI.D.11
TOP: Other Systems KEY: AII

81 ANS:
 $20e^{.05t} = 30e^{.03t}$

$$\frac{\frac{2}{3}e^{.05t}}{e^{.05t}} = \frac{e^{.03t}}{e^{.05t}}$$

$$\ln \frac{2}{3} = \ln e^{-.02t}$$

$$\ln \frac{2}{3} = -.02t \ln e$$

$$\frac{\ln \frac{2}{3}}{-.02} = t$$

$$20.3 \approx t$$

PTS: 2 REF: 011829aai NAT: A.REI.D.11 TOP: Other Systems
KEY: AII

82 ANS: 2

$B(t) = 750 \left(1.16^{\frac{1}{12}} \right)^{12t} \approx 750(1.012)^{12t}$ $B(t) = 750 \left(1 + \frac{0.16}{12} \right)^{12t}$ is wrong, because the growth is an annual rate that is not compounded monthly.

PTS: 2 REF: spr1504aai NAT: A.SSE.B.3 TOP: Modeling Exponential Functions
KEY: AII

83 ANS: 3

$$0.75^{\frac{1}{10}} \approx .9716$$

PTS: 2 REF: 061713aai NAT: A.SSE.B.3 TOP: Modeling Exponential Functions
KEY: AII

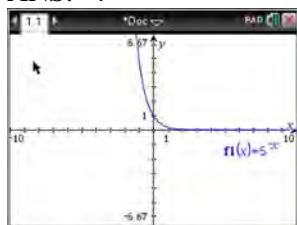
84 ANS: 3

$$\left(\frac{1}{2} \right)^{\frac{1}{73.83}} \approx 0.990656$$

PTS: 2 REF: 081710aai NAT: A.SSE.B.3 TOP: Modeling Exponential Functions
KEY: AII

85 ANS: 4 PTS: 2 REF: 011808aai NAT: A.SSE.B.3
TOP: Modeling Exponential Functions KEY: AII

86 ANS: 4



$$y = 5^{-t} = \left(\frac{1}{5}\right)^t$$

PTS: 2 REF: 061615aia NAT: F.IF.C.8 TOP: Modeling Exponential Functions

87 ANS:

$$\left(\ln \frac{1}{2}\right)$$

$\frac{\left(\ln \frac{1}{2}\right)}{1590}$ is negative, so $M(t)$ represents decay.

PTS: 2 REF: 011728aia NAT: F.IF.C.8 TOP: Modeling Exponential Functions

88 ANS: 3

$$1.0525^{\frac{1}{12}} \approx 1.00427$$

PTS: 2 REF: 061621aia NAT: F.BF.A.1 TOP: Modeling Exponential Functions

KEY: AII

89 ANS: 4 PTS: 2 REF: 081622aia NAT: F.BF.A.1

TOP: Modeling Exponential Functions KEY: AII

90 ANS: 1

$$\frac{A}{P} = e^{rt}$$

$$0.42 = e^{rt}$$

$$\ln 0.42 = \ln e^{rt}$$

$$-0.87 \approx rt$$

PTS: 2 REF: 011723aia NAT: F.BF.A.1 TOP: Modeling Exponential Functions

KEY: AII

91 ANS:

$A(t) = 100(0.5)^{\frac{t}{63}}$, where t is time in years, and $A(t)$ is the amount of titanium-44 left after t years.

$\frac{A(10) - A(0)}{10 - 0} = \frac{89.58132 - 100}{10} = -1.041868$ The estimated mass at $t = 40$ is $100 - 40(-1.041868) \approx 58.3$. The

actual mass is $A(40) = 100(0.5)^{\frac{40}{63}} \approx 64.3976$. The estimated mass is less than the actual mass.

PTS: 6 REF: fall1517aia NAT: F.LE.A.2 TOP: Modeling Exponential Functions

KEY: AII

92 ANS: 1

$$P(28) = 5(2)^{\frac{98}{28}} \approx 56$$

PTS: 2 REF: 011702aai NAT: F.LE.A.2 TOP: Modeling Exponential Functions
KEY: AII

93 ANS: 1

The car lost approximately 19% of its value each year.

PTS: 2 REF: 081613aai NAT: F.LE.B.5 TOP: Modeling Exponential Functions

94 ANS: 2

The 2010 population is 110 million.

PTS: 2 REF: 061718aai NAT: F.LE.B.5 TOP: Modeling Exponential Functions

95 ANS: 4

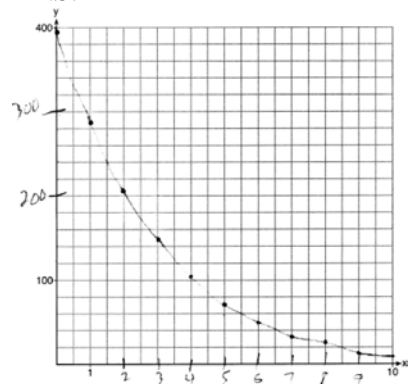
PTS: 2 REF: 011805aai NAT: F.LE.B.5
TOP: Modeling Exponential Functions

96 ANS: 3

$$d = 10 \log \frac{6.3 \times 10^{-3}}{1.0 \times 10^{-12}} \approx 98$$

PTS: 2 REF: 011715aai NAT: F.IF.B.4 TOP: Evaluating Logarithmic Expressions

97 ANS:



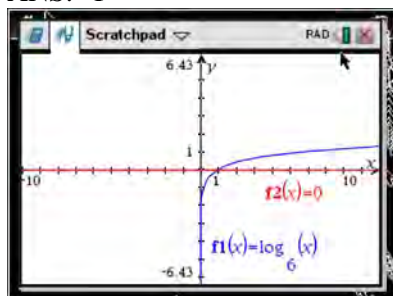
PTS: 2 REF: 061729aai NAT: F.IF.C.7 TOP: Graphing Exponential Functions
KEY: AII

98 ANS: 4

There is no x -intercept.

PTS: 2 REF: 011823aai NAT: F.IF.C.7 TOP: Graphing Exponential Functions
KEY: AII

99 ANS: 1



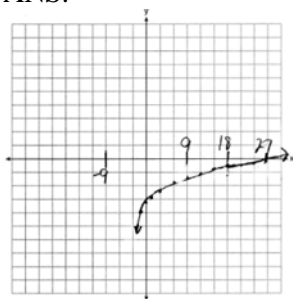
PTS: 2

REF: 061618aai

NAT: F.IF.C.7

TOP: Graphing Logarithmic Functions

100 ANS:

As $x \rightarrow -3, y \rightarrow -\infty$. As $x \rightarrow \infty, y \rightarrow \infty$.

PTS: 4

REF: 061735aai

NAT: F.IF.C.7

TOP: Graphing Logarithmic Functions

101 ANS:

$$A = 5000(1.045)^n \quad 5000 \left(1 + \frac{.046}{4}\right)^{4(6)} - 5000(1.045)^6 \approx 6578.87 - 6511.30 \approx 67.57 \quad 10000 = 5000 \left(1 + \frac{.046}{4}\right)^{4n}$$

$$B = 5000 \left(1 + \frac{.046}{4}\right)^{4n}$$

$$2 = 1.0115^{4n}$$

$$\log 2 = 4n \cdot \log 1.0115$$

$$n = \frac{\log 2}{4 \log 1.0115}$$

$$n \approx 15.2$$

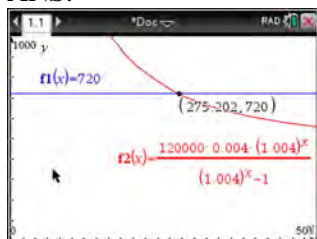
PTS: 6

REF: 081637aai

NAT: A.CED.A.1

TOP: Exponential Growth

102 ANS:



$$720 = \frac{120000 \left(\frac{.048}{12} \right) \left(1 + \frac{.048}{12} \right)^n}{\left(1 + \frac{.048}{12} \right)^n - 1} \frac{275.2}{12} \approx 23 \text{ years}$$

$$720(1.004)^n - 720 = 480(1.004)^n$$

$$240(1.004)^n = 720$$

$$1.004^n = 3$$

$$n \log 1.004 = \log 3$$

$$n \approx 275.2 \text{ months}$$

PTS: 4

REF: spr1509aii NAT: A.CED.A.1 TOP: Exponential Growth

103 ANS: 1

$$8(2^{x+3}) = 48$$

$$2^{x+3} = 6$$

$$(x+3)\ln 2 = \ln 6$$

$$x+3 = \frac{\ln 6}{\ln 2}$$

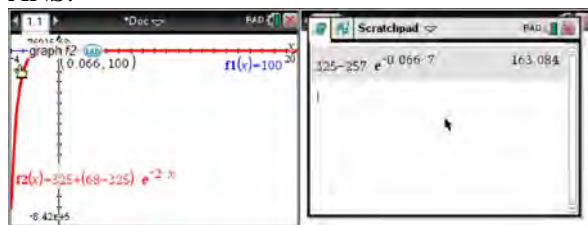
$$x = \frac{\ln 6}{\ln 2} - 3$$

PTS: 2

REF: 061702aii NAT: F.LE.A.4 TOP: Exponential Equations

KEY: without common base

104 ANS:



$$100 = 325 + (68 - 325)e^{-2k} \quad T = 325 - 257e^{-0.066t}$$

$$-225 = -257e^{-2k} \quad T = 325 - 257e^{-0.066(7)} \approx 163$$

$$k = \frac{\ln\left(\frac{-225}{-257}\right)}{-2}$$

$$k \approx 0.066$$

PTS: 4 REF: fall1513aai NAT: F.LE.A.4 TOP: Exponential Growth

105 ANS:

$$A = Pe^{rt}$$

$$135000 = 100000e^{5r}$$

$$1.35 = e^{5r}$$

$$\ln 1.35 = \ln e^{5r}$$

$$\ln 1.35 = 5r$$

$$.06 \approx r \text{ or } 6\%$$

PTS: 2 REF: 061632aai NAT: F.LE.A.4 TOP: Exponential Growth

106 ANS:

$$8.75 = 1.25x^{49} \quad 4$$

$$7 = x^{49}$$

$$x = \sqrt[49]{7} \approx 1.04$$

PTS: 2 REF: 081730aai NAT: F.LE.A.4 TOP: Exponential Growth

107 ANS: 1

$$9110 = 5000e^{30r}$$

$$\ln \frac{911}{500} = \ln e^{30r}$$

$$\frac{\ln \frac{911}{500}}{30} = r$$

$$r \approx .02$$

PTS: 2 REF: 011810aai NAT: F.LE.A.4 TOP: Exponential Growth

108 ANS: 3

$$e^{bt} = \frac{c}{a}$$

$$\ln e^{bt} = \ln \frac{c}{a}$$

$$bt \ln e = \ln \frac{c}{a}$$

$$t = \frac{\ln \frac{c}{a}}{b}$$

PTS: 2

REF: 011813aaii

NAT: F.LE.A.4

TOP: Exponential Growth

109 ANS:

$$7 = 20(0.5)^{\frac{t}{8.02}}$$

$$\log 0.35 = \log 0.5^{\frac{t}{8.02}}$$

$$\log 0.35 = \frac{t \log 0.5}{8.02}$$

$$\frac{8.02 \log 0.35}{\log 0.5} = t$$

$$t \approx 12$$

PTS: 4

REF: 081634aaii

NAT: F.LE.A.4

TOP: Exponential Decay

110 ANS:

$$100 = 140 \left(\frac{1}{2} \right)^{\frac{5}{h}} \quad \log \frac{100}{140} = \log \left(\frac{1}{2} \right)^{\frac{5}{h}}$$

$$40 = 140 \left(\frac{1}{2} \right)^{\frac{t}{10.3002}}$$

$$\log \frac{5}{7} = \frac{5}{h} \log \frac{1}{2}$$

$$\log \frac{2}{7} = \log \left(\frac{1}{2} \right)^{\frac{t}{10.3002}}$$

$$h = \frac{5 \log \frac{1}{2}}{\log \frac{5}{7}} \approx 10.3002$$

$$\log \frac{2}{7} = \frac{t \log \left(\frac{1}{2} \right)}{10.3002}$$

$$t = \frac{10.3002 \log \frac{2}{7}}{\log \frac{1}{2}} \approx 18.6$$

PTS: 6

REF: 061737aaii

NAT: F.LE.A.4

TOP: Exponential Decay

111 ANS: 4

$$k^4 - 4k^2 + 8k^3 - 32k + 12k^2 - 48$$

$$k^2(k^2 - 4) + 8k(k^2 - 4) + 12(k^2 - 4)$$

$$(k^2 - 4)(k^2 + 8k + 12)$$

$$(k + 2)(k - 2)(k + 6)(k + 2)$$

PTS: 2 REF: fall1505aai NAT: A.SSE.A.2 TOP: Factoring Polynomials
KEY: factoring by grouping

112 ANS:

The expression is of the form $y^2 - 5y - 6$ or $(y - 6)(y + 1)$. Let $y = 4x^2 + 5x$:

$$(4x^2 + 5x - 6)(4x^2 + 5x + 1)$$

$$(4x - 3)(x + 2)(4x + 1)(x + 1)$$

PTS: 2 REF: fall1512aai NAT: A.SSE.A.2 TOP: Factoring Polynomials
KEY: a>1

113 ANS: 3

$$(m - 2)^2(m + 3) = (m^2 - 4m + 4)(m + 3) = m^3 + 3m^2 - 4m^2 - 12m + 4m + 12 = m^3 - m^2 - 8m + 12$$

PTS: 2 REF: 081605aai NAT: A.SSE.A.2 TOP: Factoring Polynomials
KEY: factoring by grouping

114 ANS: 3

$$2d(d^3 + 3d^2 - 9d - 27)$$

$$2d(d^2(d + 3) - 9(d + 3))$$

$$2d(d^2 - 9)(d + 3)$$

$$2d(d + 3)(d - 3)(d + 3)$$

$$2d(d + 3)^2(d - 3)$$

PTS: 2 REF: 081615aai NAT: A.SSE.A.2 TOP: Factoring Polynomials
KEY: factoring by grouping

115 ANS: 4

$$m^5 + m^3 - 6m = m(m^4 + m^2 - 6) = m(m^2 + 3)(m^2 - 2)$$

PTS: 2 REF: 011703aai NAT: A.SSE.A.2 TOP: Factoring Polynomials
KEY: higher power AII

116 ANS:

$$x^2(4x - 1) + 4(4x - 1) = (x^2 + 4)(4x - 1)$$

PTS: 2 REF: 061727aai NAT: A.SSE.A.2 TOP: Factoring Polynomials
KEY: factoring by grouping

117 ANS: 1

1) let $y = x + 2$, then $y^2 + 2y - 8$

$$(y + 4)(y - 2)$$

$$(x + 2 + 4)(x + 2 - 2)$$

$$(x + 6)x$$

PTS: 2 REF: 081715aai NAT: A.SSE.A.2 TOP: Factoring Polynomials
 KEY: multivariable

118 ANS:

$$3x^3 + x^2 + 3xy + y = x^2(3x + 1) + y(3x + 1) = (x^2 + y)(3x + 1)$$

PTS: 2 REF: 011828aai NAT: A.SSE.A.2 TOP: Factoring Polynomials
 KEY: factoring by grouping

119 ANS: 1



$$x^4 - 4x^3 - 9x^2 + 36x = 0$$

$$x^3(x - 4) - 9x(x - 4) = 0$$

$$(x^3 - 9x)(x - 4) = 0$$

$$x(x^2 - 9)(x - 4) = 0$$

$$x(x + 3)(x - 3)(x - 4) = 0$$

$$x = 0, \pm 3, 4$$

PTS: 2 REF: 061606aai NAT: A.APR.B.3 TOP: Zeros of Polynomials
 KEY: All

120 ANS: 1 PTS: 2 REF: 061701aai NAT: A.APR.B.3
 TOP: Zeros of Polynomials KEY: All

121 ANS: 4 PTS: 2 REF: 081708aai NAT: A.APR.B.3
 TOP: Zeros of Polynomials KEY: All

122 ANS:

$$f(x) = x^2(x + 4)(x - 3); g(x) = (x + 2)^2(x + 6)(x - 1)$$

PTS: 4 REF: 011836aai NAT: A.APR.B.3 TOP: Zeros of Polynomials

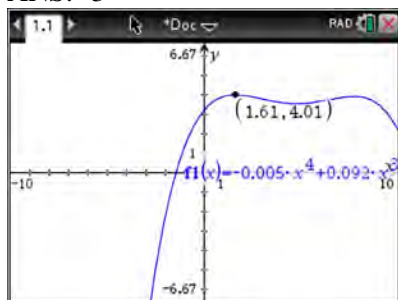
123 ANS: 4

The maximum volume of $p(x) = -(x + 2)(x - 10)(x - 14)$ is about 56, at $x = 12.1$

PTS: 2 REF: 081712aai NAT: F.IF.B.4 TOP: Graphing Polynomial Functions

124 ANS: 2 PTS: 2 REF: 061620aai NAT: F.IF.B.4
 TOP: Graphing Polynomial Functions

125 ANS: 3



PTS: 2 REF: 011817aai NAT: F.IF.B.4 TOP: Graphing Polynomial Functions

126 ANS: 1

The zeros of the polynomial are at $-b$, and c . The sketch of a polynomial of degree 3 with a negative leading coefficient should have end behavior showing as x goes to negative infinity, $f(x)$ goes to positive infinity. The multiplicities of the roots are correctly represented in the graph.

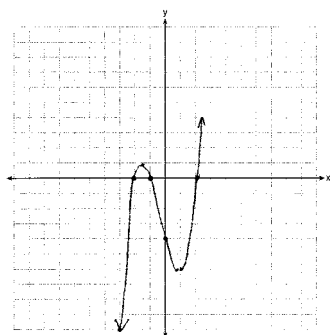
PTS: 2 REF: spr1501aai NAT: F.IF.C.7 TOP: Graphing Polynomial Functions
KEY: AII

127 ANS: 3

The graph shows three real zeros, and has end behavior matching the given end behavior.

PTS: 2 REF: 061604aai NAT: F.IF.C.7 TOP: Graphing Polynomial Functions
KEY: AII

128 ANS:



$$0 = x^2(x + 1) - 4(x + 1)$$

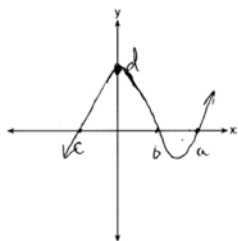
$$0 = (x^2 - 4)(x + 1)$$

$$0 = (x + 2)(x - 2)(x + 1)$$

$$x = -2, -1, 2$$

PTS: 4 REF: 081633aai NAT: F.IF.C.7 TOP: Graphing Polynomial Functions

129 ANS:



PTS: 2

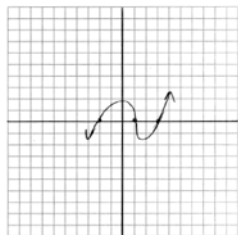
REF: 081732aai

NAT: F.IF.C.7

TOP: Graphing Polynomial Functions

KEY: AII

130 ANS:



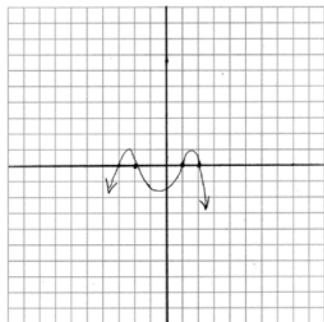
PTS: 2

REF: 011729aai

NAT: F.IF.C.7

TOP: Graphing Polynomial Functions

131 ANS:



PTS: 2

REF: 011831aai

NAT: F.IF.C.7

TOP: Graphing Polynomial Functions

132 ANS: 3

Since $x + 4$ is a factor of $p(x)$, there is no remainder.

PTS: 2

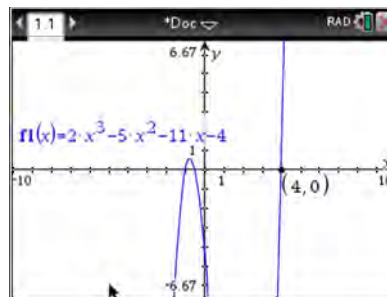
REF: 081621aai

NAT: A.APR.B.2

TOP: Remainder Theorem

133 ANS:

$f(4) = 2(4)^3 - 5(4)^2 - 11(4) - 4 = 128 - 80 - 44 - 4 = 0$ Any method that demonstrates 4 is a zero of $f(x)$ confirms



that $x - 4$ is a factor, as suggested by the Remainder Theorem.

PTS: 2 REF: spr1507aii NAT: A.APR.B.2 TOP: Remainder Theorem

134 ANS:

$$0 = 6(-5)^3 + b(-5)^2 - 52(-5) + 15 \quad z(x) = 6x^3 + 19x^2 - 52x + 15$$

$$0 = -750 + 25b + 260 + 15$$

$$475 = 25b$$

$$19 = b$$

$$\begin{array}{r|rrrr} -5 & 6 & 19 & -52 & 15 \\ & & -30 & 55 & 15 \\ \hline & 6 & -11 & 3 & 0 \end{array}$$

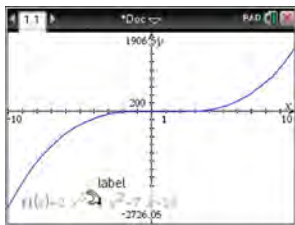
$$6x^2 - 11x + 3 = 0$$

$$(2x - 3)(3x - 1) = 0$$

$$x = \frac{3}{2}, \frac{1}{3}, -5$$

PTS: 4 REF: fall1515aii NAT: A.APR.B.2 TOP: Remainder Theorem

135 ANS:



$$x - 5 \overline{) 2x^3 - 4x^2 - 7x - 10} \quad \text{Since there is a remainder, } x - 5 \text{ is not a factor.}$$

$$\underline{2x^3 - 10x^2}$$

$$6x^2 - 7x$$

$$\underline{6x^2 - 30x}$$

$$23x - 10$$

$$\underline{23x - 115}$$

$$105$$

PTS: 2 REF: 061627aai NAT: A.APR.B.2 TOP: Remainder Theorem

136 ANS: 2 PTS: 2 REF: 011720aai NAT: A.APR.B.2

TOP: Remainder Theorem

137 ANS: 1

$$\begin{array}{r|rrrrr} 2 & 1 & 0 & -4 & -4 & 8 \\ & & 2 & 4 & 0 & -8 \\ \hline & 1 & 2 & 0 & -4 & 0 \end{array}$$

Since there is no remainder when the quartic is divided by $x - 2$, this binomial is a factor.

PTS: 2 REF: 061711aai NAT: A.APR.B.2 TOP: Remainder Theorem

138 ANS:

 $r(2) = -6$. Since there is a remainder when the cubic is divided by $x - 2$, this binomial is not a factor.

$$\begin{array}{r|rrrr} 2 & 1 & -4 & 4 & 6 \\ & & 2 & -4 & 0 \\ \hline & 1 & -2 & 0 & -6 \end{array}$$

PTS: 2 REF: 061725aai NAT: A.APR.B.2 TOP: Remainder Theorem

139 ANS: 2

$$\begin{array}{r|rrrr} -4 & 1 & -11 & 16 & 84 \\ & & -4 & 60 & -304 \\ \hline & 1 & -15 & 76 & \end{array}$$

Since there is a remainder when the cubic is divided by $x + 4$, this binomial is not a factor.

PTS: 2 REF: 081720aai NAT: A.APR.B.2 TOP: Remainder Theorem

140 ANS: 4

$$p(5) = 2(5)^3 - 3(5) + 5 = 240$$

PTS: 2 REF: 011819aai NAT: A.APR.B.2 TOP: Remainder Theorem

141 ANS:

Let x equal the first integer and $x + 1$ equal the next. $(x + 1)^2 - x^2 = x^2 + 2x + 1 - x^2 = 2x + 1$. $2x + 1$ is an odd integer.

PTS: 2 REF: fall1511aii NAT: A.APR.C.4 TOP: Polynomial Identities

142 ANS:

$$\frac{x^3 + 9}{x^3 + 8} = \frac{x^3 + 8}{x^3 + 8} + \frac{1}{x^3 + 8}$$

$$\frac{x^3 + 9}{x^3 + 8} = \frac{x^3 + 9}{x^3 + 8}$$

PTS: 2 REF: 061631aii NAT: A.APR.C.4 TOP: Polynomial Identities

143 ANS: 4

$$(x + y)^3 = x^3 + 3x^2y + 3xy^2 + y^3 \neq x^3 + 3xy + y^3$$

PTS: 2 REF: 081620aii NAT: A.APR.C.4 TOP: Polynomial Identities

144 ANS:

$$2x^3 - 10x^2 + 11x - 7 = 2x^3 + hx^2 + 3x - 8x^2 - 4hx - 12 + k \quad h = -2$$

$$-2x^2 + 8x + 5 = hx^2 - 4hx + k \quad k = 5$$

PTS: 4 REF: 011733aii NAT: A.APR.C.4 TOP: Polynomial Identities

145 ANS:

$$(x^2 + y^2)^2 = (x^2 - y^2)^2 + (2xy)^2$$

$$x^4 + 2x^2y^2 + y^4 = x^4 - 2x^2y^2 + y^4 + 4x^2y^2$$

$$x^4 + 2x^2y^2 + y^4 = x^4 + 2x^2y^2 + y^4$$

PTS: 2 REF: 081727aii NAT: A.APR.C.4 TOP: Polynomial Identities

146 ANS: 2 PTS: 2 REF: 011806aii NAT: A.APR.C.4

TOP: Polynomial Identities

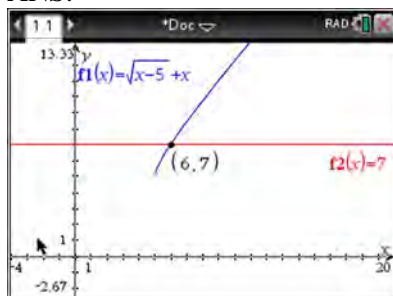
147 ANS:

$$\sqrt[3]{x} \cdot \sqrt{x} = x^{\frac{1}{3}} \cdot x^{\frac{1}{2}} = x^{\frac{3}{6}} \cdot x^{\frac{3}{6}} = x^{\frac{5}{6}}$$

PTS: 2 REF: 061731aii NAT: N.RN.A.2 TOP: Operations with Radicals

KEY: with variables, index > 2

148 ANS:



$$\sqrt{x-5} = -x+7 \quad \sqrt{x-5} = -9+7 = -2 \text{ is extraneous.}$$

$$x-5 = x^2 - 14x + 49$$

$$0 = x^2 - 15x + 54$$

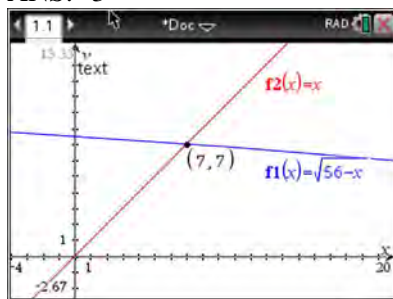
$$0 = (x-6)(x-9)$$

$$x = 6, 9$$

PTS: 2 REF: spr1508aii NAT: A.REI.A.2 TOP: Solving Radicals

KEY: extraneous solutions

149 ANS: 3



$$\sqrt{56-x} = x \quad -8 \text{ is extraneous.}$$

$$56-x = x^2$$

$$0 = x^2 + x - 56$$

$$0 = (x+8)(x-7)$$

$$x = 7$$

PTS: 2 REF: 061605aii NAT: A.REI.A.2 TOP: Solving Radicals

KEY: extraneous solutions

150 ANS:

$$\begin{aligned}(\sqrt{2x-7})^2 &= (5-x)^2 & \sqrt{2(4)-7}+4 &= 5 & \sqrt{2(8)-7}+8 &= 5 \\ 2x-7 &= 25-10x+x^2 & \sqrt{1} &= 1 & \sqrt{9} &\neq -3 \\ 0 &= x^2-12x+32 \\ 0 &= (x-8)(x-4) \\ x &= 4, 8\end{aligned}$$

PTS: 4 REF: 081635aai NAT: A.REI.A.2 TOP: Solving Radicals
KEY: extraneous solutions

151 ANS:

$$\begin{aligned}0 &= \sqrt{t}-2t+6 & 2\left(\frac{9}{4}\right)-6 &< 0, \text{ so } \frac{9}{4} \text{ is extraneous.} \\ 2t-6 &= \sqrt{t} \\ 4t^2-24t+36 &= t \\ 4t^2-25t+36 &= 0 \\ (4t-9)(t-4) &= 0 \\ t &= \frac{9}{4}, 4 \\ (\sqrt{1}-2(1)+6) &- (\sqrt{3}-2(3)+6) = 5 - \sqrt{3} \approx 3.268 \text{ 327 mph}\end{aligned}$$

PTS: 6 REF: 011737aai NAT: A.REI.A.2 TOP: Solving Radicals
KEY: context

152 ANS:

$$\begin{aligned}\sqrt{x-4} &= -x+6 & \sqrt{x-4} &= -8+6 = -2 \text{ is extraneous.} \\ x-4 &= x^2-12x+36 \\ 0 &= x^2-13x+40 \\ 0 &= (x-8)(x-5) \\ x &= 5, 8\end{aligned}$$

PTS: 2 REF: 061730aai NAT: A.REI.A.2 TOP: Solving Radicals
KEY: extraneous solutions

153 ANS: 2

$$\sqrt{x+14} = \sqrt{2x+5} + 1 \qquad \sqrt{22+14} - \sqrt{2(22)+5} = 1$$

$$x+14 = 2x+5+2\sqrt{2x+5}+1 \qquad 6-7 \neq 1$$

$$-x+8 = 2\sqrt{2x+5}$$

$$x^2 - 16x + 64 = 8x + 20$$

$$x^2 - 24x + 44 = 0$$

$$(x-22)(x-2) = 0$$

$$x = 2, 22$$

PTS: 2

REF: 081704aaii

NAT: A.REI.A.2

TOP: Solving Radicals

KEY: advanced

154 ANS: 3

$$\sqrt{x+1} = x+1$$

$$x+1 = x^2+2x+1$$

$$0 = x^2+x$$

$$0 = x(x+1)$$

$$x = -1, 0$$

PTS: 2

REF: 011802aaii

NAT: A.REI.A.2

TOP: Solving Radicals

KEY: extraneous solutions

155 ANS:

Applying the commutative property, $\left(3^{\frac{1}{5}}\right)^2$ can be rewritten as $\left(3^2\right)^{\frac{1}{5}}$ or $9^{\frac{1}{5}}$. A fractional exponent can be

rewritten as a radical with the denominator as the index, or $9^{\frac{1}{5}} = \sqrt[5]{9}$.

PTS: 2

REF: 081626aaii

NAT: N.RN.A.1

TOP: Radicals and Rational Exponents

156 ANS:

Rewrite $\frac{4}{3}$ as $\frac{1}{3} \cdot \frac{4}{1}$, using the power of a power rule.

PTS: 2

REF: 081725aaii

NAT: N.RN.A.1

TOP: Radicals and Rational Exponents

157 ANS:

The denominator of the rational exponent represents the index of a root, and the 4th root of 81 is 3 and 3^3 is 27.

PTS: 2

REF: 011832aaii

NAT: N.RN.A.1

TOP: Radicals and Rational Exponents

158 ANS: 4

PTS: 2

REF: 061601aaii

NAT: N.RN.A.2

TOP: Radicals and Rational Exponents

KEY: variables

159 ANS:

$$\left(x^{\frac{5}{3}}\right)^{\frac{6}{5}} = \left(y^{\frac{5}{6}}\right)^{\frac{6}{5}}$$

$$x^2 = y$$

PTS: 2

REF: 011730aii

NAT: N.RN.A.2

TOP: Radicals and Rational Exponents

KEY: variables

160 ANS:

$$\frac{x^{\frac{8}{3}}}{x^{\frac{4}{3}}} = x^y$$

$$x^{\frac{4}{3}} = x^y$$

$$\frac{4}{3} = y$$

PTS: 2

REF: spr1505aii

NAT: N.RN.A.2

TOP: Radicals and Rational Exponents

KEY: numbers

161 ANS: 2

$$\left(m^{\frac{5}{3}}\right)^{-\frac{1}{2}} = m^{-\frac{5}{6}} = \frac{1}{\sqrt[6]{m^5}}$$

PTS: 2

REF: 011707aii

NAT: N.RN.A.2

TOP: Radicals and Rational Exponents

KEY: variables

162 ANS: 4

PTS: 2

REF: 061716aii

NAT: N.RN.A.2

TOP: Radicals and Rational Exponents

KEY: variables

163 ANS: 4

$$\left(\frac{-54x^9}{y^4}\right)^{\frac{2}{3}} = \frac{(2 \cdot -27)^{\frac{2}{3}} x^{\frac{18}{3}}}{y^{\frac{8}{3}}} = \frac{2^{\frac{2}{3}} \cdot 9x^6}{y^2 \cdot y^{\frac{2}{3}}} = \frac{9x^6 \sqrt[3]{4}}{y^2 \sqrt[3]{y^2}}$$

PTS: 2

REF: 081723aii

NAT: N.RN.A.2

TOP: Radicals and Rational Exponents

KEY: variables

164 ANS: 4

$$\frac{n}{m} = \frac{\sqrt{a^5}}{a} = \frac{a^{\frac{5}{2}}}{a^{\frac{2}{2}}} = a^{\frac{3}{2}} = \sqrt{a^3}$$

PTS: 2 REF: 011811aii NAT: N.RN.A.2 TOP: Radicals and Rational Exponents
KEY: variables

165 ANS:

$$(4 - 3i)(5 + 2yi - 5 + 2yi)$$

$$(4 - 3i)(4yi)$$

$$16yi - 12yi^2$$

$$12y + 16yi$$

PTS: 2 REF: spr1506aii NAT: N.CN.A.2 TOP: Operations with Complex Numbers

166 ANS:

$$xi(-6i)^2 = xi(36i^2) = 36xi^3 = -36xi$$

PTS: 2 REF: 081627aii NAT: N.CN.A.2 TOP: Operations with Complex Numbers

167 ANS:

$$i^2 = -1, \text{ and not } 1; 10 + 10i$$

PTS: 2 REF: 011825aii NAT: N.CN.A.2 TOP: Operations with Complex Numbers

168 ANS: 2

$$(2 - yi)(2 - yi) = 4 - 4yi + y^2i^2 = -y^2 - 4yi + 4$$

PTS: 2 REF: 061603aii NAT: N.CN.A.2 TOP: Operations with Complex Numbers

169 ANS:

$$(1 - i)(1 - i)(1 - i) = (1 - 2i + i^2)(1 - i) = -2i(1 - i) = -2i + 2i^2 = -2 - 2i$$

PTS: 2 REF: 011725aii NAT: N.CN.A.2 TOP: Operations with Complex Numbers

170 ANS: 2

$$6xi^3(-4xi + 5) = -24x^2i^4 + 30xi^3 = -24x^2(1) + 30x(-1) = -24x^2 - 30xi$$

PTS: 2 REF: 061704aii NAT: N.CN.A.2 TOP: Operations with Complex Numbers

171 ANS: 3

$$(3k - 2i)^2 = 9k^2 - 12ki + 4i^2 = 9k^2 - 12ki - 4$$

PTS: 2 REF: 081702aii NAT: N.CN.A.2 TOP: Operations with Complex Numbers

172 ANS: 1

$$x^2 + 2x - 8 = 0$$

$$(x + 4)(x - 2) = 0$$

$$x = -4, 2$$

PTS: 2 REF: 081701aai NAT: A.APR.D.6 TOP: Undefined Rationals

173 ANS: 4

$$\frac{-3x^2 - 5x + 2}{x^3 + 2x^2} = \frac{(-3x + 1)(x + 2)}{x^2(x + 2)} = \frac{-3x}{x^2} + \frac{1}{x^2} = -3x^{-1} + x^{-2}$$

PTS: 2 REF: 061723aai NAT: A.APR.D.6 TOP: Expressions with Negative Exponents

KEY: variables

174 ANS: 1

$$\begin{array}{r} 3x^2 + 4x - 1 \\ 2x + 3 \overline{) 6x^3 + 17x^2 + 10x + 2} \\ \underline{6x^3 + 9x^2} \\ 8x^2 + 10x \\ \underline{8x^2 + 12x} \\ -2x + 2 \\ \underline{-2x - 3} \\ 5 \end{array}$$

PTS: 2 REF: fall1503aai NAT: A.APR.D.6 TOP: Rational Expressions

175 ANS: 2

$$\begin{array}{r} 2x^2 - 3x + 7 \\ 2x + 3 \overline{) 4x^3 + 0x^2 + 5x + 10} \\ \underline{4x^3 + 6x^2} \\ -6x^2 + 5x \\ \underline{-6x^2 - 9x} \\ 14x + 10 \\ \underline{14x + 21} \\ -11 \end{array}$$

PTS: 2 REF: 061614aai NAT: A.APR.D.6 TOP: Rational Expressions

176 ANS: 2

$$\begin{array}{r}
 \overline{) x^3 + 2x^2 + x + 6} \\
 \underline{x^3 + 2x^2} \\
 0x^2 + x + 6 \\
 \underline{0x^2 + 0x} \\
 x + 6 \\
 \underline{x + 2} \\
 4
 \end{array}$$

PTS: 2 REF: 081611aii NAT: A.APR.D.6 TOP: Rational Expressions

177 ANS:

$$\begin{array}{r}
 \overline{) 3x^2 + 7x - 20} \\
 \underline{3x^2 - 6x} \\
 13x - 20 \\
 \underline{13x - 26} \\
 6
 \end{array}
 \quad 3x + 13 + \frac{6}{x-2}$$

PTS: 2 REF: 011732aii NAT: A.APR.D.6 TOP: Rational Expressions

178 ANS: 1

$$\begin{array}{r}
 \overline{) 4x^3 + 0x^2 + 9x - 5} \\
 \underline{4x^3 - 2x^2} \\
 2x^2 + 9x - 5 \\
 \underline{2x^2 - x} \\
 10x - 5 \\
 \underline{10x - 5}
 \end{array}$$

PTS: 2 REF: 081713aii NAT: A.APR.D.6 TOP: Rational Expressions

179 ANS: 4

$$\begin{array}{r}
 \overline{) 10x^3 - 3x^2 - 7x + 3} \\
 \underline{2x^2 - 7x} \\
 \underline{2x^2 - x} \\
 \underline{-6x + 3} \\
 \underline{-6x + 3} \\
 0
 \end{array}$$

PTS: 2 REF: 011809aia NAT: A.APR.D.6 TOP: Rational Expressions

180 ANS: 3

$$\frac{c^2 - d^2}{d^2 + cd - 2c^2} = \frac{(c+d)(c-d)}{(d+2c)(d-c)} = \frac{-(c+d)}{d+2c} = \frac{-c-d}{d+2c}$$

PTS: 2 REF: 011818aia NAT: A.APR.D.6 TOP: Rational Expressions

KEY: $a > 0$

181 ANS: 3 PTS: 2 REF: 061602aia NAT: A.CED.A.1

TOP: Modeling Rationals

182 ANS: 3 PTS: 2 REF: 061722aia NAT: A.CED.A.1

TOP: Modeling Rationals

183 ANS:

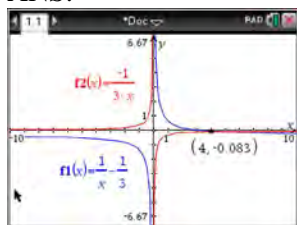
$$\frac{1}{8} + \frac{1}{6} = \frac{1}{t_b}; \quad \frac{24t_b}{8} + \frac{24t_b}{6} = \frac{24t_b}{t_b}$$

$$3t_b + 4t_b = 24$$

$$t_b = \frac{24}{7} \approx 3.4$$

PTS: 2 REF: 011827aia NAT: A.CED.A.1 TOP: Modeling Rationals

184 ANS:



$$\frac{1}{x} - \frac{1}{3} = -\frac{1}{3x}$$

$$\frac{3-x}{3x} = -\frac{1}{3x}$$

$$3-x = -1$$

$$x = 4$$

PTS: 2

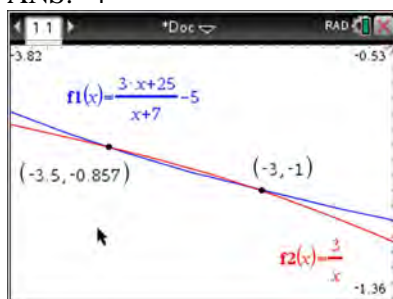
REF: 061625aai

NAT: A.REI.A.2

TOP: Solving Rationals

KEY: rational solutions

185 ANS: 4



$$x(x+7) \left[\frac{3x+25}{x+7} - 5 = \frac{3}{x} \right]$$

$$x(3x+25) - 5x(x+7) = 3(x+7)$$

$$3x^2 + 25x - 5x^2 - 35x = 3x + 21$$

$$2x^2 + 13x + 21 = 0$$

$$(2x+7)(x+3) = 0$$

$$x = -\frac{7}{2}, -3$$

PTS: 2

REF: fall1501aai

NAT: A.REI.A.2

TOP: Solving Rationals

KEY: rational solutions

186 ANS: 3

$$\frac{1}{J} = \frac{1}{F} - \frac{1}{W}$$

$$\frac{1}{J} = \frac{W-F}{FW}$$

$$J = \frac{FW}{W-F}$$

PTS: 2 REF: 081617aai NAT: A.REI.A.2 TOP: Solving Rationals

KEY: rational solutions

187 ANS: 1

$$\frac{2(x-4)}{(x+3)(x-4)} + \frac{3(x+3)}{(x-4)(x+3)} = \frac{2x-2}{x^2-x-12}$$

$$2x - 8 + 3x + 9 = 2x - 2$$

$$3x = -3$$

$$x = -1$$

PTS: 2 REF: 011717aai NAT: A.REI.A.2 TOP: Solving Rationals

KEY: rational solutions

188 ANS: 1

$$\frac{2x}{x-2} \left(\frac{x}{x} \right) - \frac{11}{x} \left(\frac{x-2}{x-2} \right) = \frac{8}{x^2-2x}$$

$$2x^2 - 11x + 22 = 8$$

$$2x^2 - 11x + 14 = 0$$

$$(2x-7)(x-2) = 0$$

$$x = \frac{7}{2}, 2$$

PTS: 2 REF: 061719aai NAT: A.REI.A.2 TOP: Solving Rationals

189 ANS:

$$\frac{3p}{p-5} = \frac{p+2}{p+3}$$

$$3p^2 + 9p = p^2 - 3p - 10$$

$$2p^2 + 12p + 10 = 0$$

$$p^2 + 6p + 5 = 0$$

$$(p+5)(p+1) = 0$$

$$p = -5, -1$$

PTS: 4 REF: 081733aai NAT: A.REI.A.2 TOP: Solving Rationals

KEY: rational solutions

190 ANS: 1

$$x - \frac{4}{x-1} = 2 \quad x = \frac{3 \pm \sqrt{(-3)^2 - 4(1)(-2)}}{2(1)} = \frac{3 \pm \sqrt{17}}{2}$$

$$x(x-1) - 4 = 2(x-1)$$

$$x^2 - x - 4 = 2x - 2$$

$$x^2 - 3x - 2 = 0$$

PTS: 2 REF: 011812aai NAT: A.REI.A.2 TOP: Solving Rationals
KEY: rational solutions

191 ANS:

$$\begin{aligned} & (2x^2 + x - 3) \cdot (x - 1) - \left[(2x^2 + x - 3) + (x - 1) \right] \\ & (2x^3 - 2x^2 + x^2 - x - 3x + 3) - (2x^2 + 2x - 4) \\ & 2x^3 - 3x^2 - 6x + 7 \end{aligned}$$

PTS: 4 REF: 011833aai NAT: F.BF.A.1 TOP: Operations with Functions

192 ANS: 4

$$\frac{m(c)}{g(c)} = \frac{c+1}{1-c^2} = \frac{c+1}{(1+c)(1-c)} = \frac{1}{1-c}$$

PTS: 2 REF: 061608aai NAT: F.BF.A.1 TOP: Operations with Functions

193 ANS: 3 PTS: 2 REF: 011710aai NAT: F.BF.A.1

TOP: Operations with Functions

194 ANS: 2

$$\begin{aligned} x(30 - 0.01x) - (0.15x^3 + 0.01x^2 + 2x + 120) &= 30x - 0.01x^2 - 0.15x^3 - 0.01x^2 - 2x - 120 \\ &= -0.15x^3 - 0.02x^2 + 28x - 120 \end{aligned}$$

PTS: 2 REF: 061709aai NAT: F.BF.A.1 TOP: Operations with Functions

195 ANS:

$0 = \log_{10}(x-4)$ The x -intercept of h is $(2,0)$. f has the larger value.

$$10^0 = x - 4$$

$$1 = x - 4$$

$$x = 5$$

PTS: 2 REF: 081630aai NAT: F.IF.C.9 TOP: Comparing Functions
KEY: All

196 ANS: 2

$h(x)$ does not have a y -intercept.

PTS: 2 REF: 011719aai NAT: F.IF.C.9 TOP: Comparing Functions

197 ANS:

q has the smaller minimum value for the domain $[-2, 2]$. h 's minimum is $-1(2(-1) + 1)$ and q 's minimum is -8 .

PTS: 2

REF: 011830aai

NAT: F.IF.C.9

TOP: Comparing Functions

KEY: AII

198 ANS: 3

$f(x) = -f(x)$, so $f(x)$ is odd. $g(-x) \neq g(x)$, so $g(x)$ is not even. $g(-x) \neq -g(x)$, so $g(x)$ is not odd. $h(-x) = h(x)$, so $h(x)$ is even.

PTS: 2

REF: fall1502aai

NAT: F.BF.B.3

TOP: Even and Odd Functions

199 ANS: 1

The graph of $y = \sin x$ is unchanged when rotated 180° about the origin.

PTS: 2

REF: 081614aai

NAT: F.BF.B.3

TOP: Even and Odd Functions

200 ANS:

$j(-x) = (-x)^4 - 3(-x)^2 - 4 = x^2 - 3x^2 - 4$ Since $j(x) = j(-x)$, the function is even.

PTS: 2

REF: 081731aai

NAT: F.BF.B.3

TOP: Even and Odd Functions

201 ANS:

$$x = (y - 3)^3 + 1$$

$$x - 1 = (y - 3)^3$$

$$\sqrt[3]{x - 1} = y - 3$$

$$\sqrt[3]{x - 1} + 3 = y$$

$$f^{-1}(x) = \sqrt[3]{x - 1} + 3$$

PTS: 2

REF: fall1509aai

NAT: F.BF.B.4

TOP: Inverse of Functions

KEY: equations

202 ANS: 2

$$x = -\frac{3}{4}y + 2$$

$$-4x = 3y - 8$$

$$-4x + 8 = 3y$$

$$-\frac{4}{3}x + \frac{8}{3} = y$$

PTS: 2

REF: 061616aai

NAT: F.BF.B.4

TOP: Inverse of Functions

KEY: equations

203 ANS: 3

PTS: 2

REF: 011708aai

NAT: F.BF.B.4

TOP: Inverse of Functions

KEY: equations

204 ANS: 2

$$x = \frac{y+1}{y-2}$$

$$xy - 2x = y + 1$$

$$xy - y = 2x + 1$$

$$y(x-1) = 2x + 1$$

$$y = \frac{2x+1}{x-1}$$

PTS: 2

REF: 081714aai

NAT: F.BF.B.4

TOP: Inverse of Functions

KEY: equations

205 ANS: 2

$$x = -6(y-2)$$

$$-\frac{x}{6} = y - 2$$

$$-\frac{x}{6} + 2 = y$$

PTS: 2

REF: 011821aai

NAT: F.BF.B.4

TOP: Inverse of Functions

KEY: equations

206 ANS:

Jillian's plan, because distance increases by one mile each week. $a_1 = 10$ $a_n = n + 12$

$$a_n = a_{n-1} + 1$$

PTS: 4

REF: 011734aai

NAT: F.LE.A.2

TOP: Sequences

207 ANS: 3

PTS: 2

REF: 081618aai

NAT: F.LE.A.2

TOP: Sequences

208 ANS: 3

PTS: 2

REF: 061720aai

NAT: F.LE.A.2

TOP: Sequences

KEY: All

209 ANS:

$$a_1 = 4 \quad a_8 = 639$$

$$a_n = 2a_{n-1} + 1$$

PTS: 2

REF: 081729aai

NAT: F.LE.A.2

TOP: Sequences

210 ANS:

$\frac{6.25 - 2.25}{21 - 5} = \frac{4}{16} = \0.25 fine per day. $2.25 - 5(.25) = \$1$ replacement fee. $a_n = 1.25 + (n-1)(.25)$. $a_{60} = \$16$

PTS: 4

REF: 081734aai

NAT: F.LE.A.2

TOP: Sequences

211 ANS: 1

$$d = 18; r = \pm \frac{5}{4}$$

PTS: 2 REF: 011714aii NAT: F.IF.A.3 TOP: Sequences
KEY: term

212 ANS:

$$a_n = x^{n-1}(x+1) \quad x^{n-1} = 0 \quad x+1 = 0$$

$$x = 0 \quad x = -1$$

PTS: 4 REF: spr1511aii NAT: F.BF.A.2 TOP: Sequences

213 ANS: 4

The scenario represents a decreasing geometric sequence with a common ratio of 0.80.

PTS: 2 REF: 061610aii NAT: F.BF.A.2 TOP: Sequences

214 ANS: 3 PTS: 2 REF: 061623aii NAT: F.BF.A.2
TOP: Sequences

215 ANS: 1

(2) is not recursive

PTS: 2 REF: 081608aii NAT: F.BF.A.2 TOP: Sequences

216 ANS: 4 PTS: 2 REF: 081624aii NAT: F.BF.A.2
TOP: Sequences

217 ANS: 3 PTS: 2 REF: 081724aii NAT: F.BF.A.2
TOP: Sequences

218 ANS: 3 PTS: 2 REF: 011824aii NAT: F.BF.A.2
TOP: Sequences

219 ANS: 1 PTS: 2 REF: 081609aii NAT: F.BF.B.6
TOP: Sigma Notation KEY: represent

220 ANS:

$$20000 = PMT \left(\frac{1 - (1 + 0.00625)^{-60}}{0.00625} \right) \quad 21000 - x = 300 \left(\frac{1 - (1 + 0.00625)^{-60}}{0.00625} \right)$$

$$PMT \approx 400.76$$

$$x \approx 6028$$

PTS: 4 REF: 011736aii NAT: A.SSE.B.4 TOP: Series

221 ANS:

$$S_n = \frac{33000 - 33000(1.04)^n}{1 - 1.04} \quad S_{15} = \frac{33000 - 33000(1.04)^{15}}{1 - 1.04} \approx 660778.39$$

PTS: 4 REF: 061634aii NAT: A.SSE.B.4 TOP: Series

222 ANS: 2 PTS: 2 REF: 061724aii NAT: A.SSE.B.4
TOP: Series

223 ANS:

$$M = 172600 \cdot \frac{0.00305(1 + 0.00305)^{12 \cdot 15}}{(1 + 0.00305)^{12 \cdot 15} - 1} \approx 1247 \quad 1100 = (172600 - x) \cdot \frac{0.00305(1 + 0.00305)^{12 \cdot 15}}{(1 + 0.00305)^{12 \cdot 15} - 1}$$

$$1100 \approx (172600 - x) \cdot (0.007228)$$

$$152193 \approx 172600 - x$$

$$20407 \approx x$$

PTS: 4

REF: 061734aii

NAT: A.SSE.B.4

TOP: Series

Algebra II Regents Exam Questions by Common Core State Standard: Topic Answer Section

224 ANS: 4

$$d = 32(.8)^{b-1} \quad S_n = \frac{32 - 32(.8)^{12}}{1 - .8} \approx 149$$

PTS: 2 REF: 081721aai NAT: A.SSE.B.4 TOP: Series

225 ANS: 2

$$S_{20} = \frac{.01 - .01(3)^{20}}{1 - 3} = 17,433,922$$

PTS: 2 REF: 011822aai NAT: A.SSE.B.4 TOP: Series

226 ANS: 1

TOP: Unit Circle

PTS: 2

REF: 081616aai

NAT: F.TF.A.1

227 ANS: 1

TOP: Unit Circle

PTS: 2

REF: 011815aai

NAT: F.TF.A.2

228 ANS:

$\csc \theta = \frac{1}{\sin \theta}$, and $\sin \theta$ on a unit circle represents the y value of a point on the unit circle. Since $y = \sin \theta$,

$$\csc \theta = \frac{1}{y}.$$

PTS: 2 REF: 011727aai NAT: F.TF.A.2 TOP: Reciprocal Trigonometric Relationships

229 ANS: 4

TOP: Reference Angles

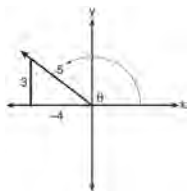
PTS: 2

REF: 081707aai

NAT: F.TF.A.2

230 ANS: 1

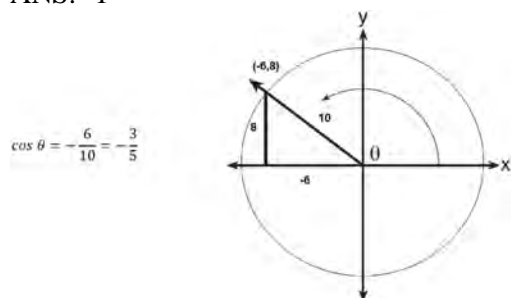
A reference triangle can be sketched using the coordinates $(-4, 3)$ in the second quadrant to find the value of $\sin \theta$.



PTS: 2 REF: spr1503aai NAT: F.TF.A.2 TOP: Determining Trigonometric Functions

KEY: extension to reals

231 ANS: 1



PTS: 2 REF: 061617aai NAT: F.TF.A.2 TOP: Determining Trigonometric Functions
KEY: extension to reals

232 ANS: 2 PTS: 2 REF: 011804aai NAT: F.TF.A.2
TOP: Determining Trigonometric Functions KEY: radians

233 ANS:

$$\sin^2 \theta + (-0.7)^2 = 1 \quad \text{Since } \theta \text{ is in Quadrant II, } \sin \theta = \sqrt{.51} \text{ and } \tan \theta = \frac{\sin \theta}{\cos \theta} = \frac{\sqrt{.51}}{-0.7} \approx -1.02$$

$$\sin^2 \theta = .51$$

$$\sin \theta = \pm \sqrt{.51}$$

PTS: 2 REF: 081628aai NAT: F.TF.C.8 TOP: Determining Trigonometric Functions

234 ANS: 2

$$\cos \theta = \pm \sqrt{1 - \left(\frac{-\sqrt{2}}{5}\right)^2} = \pm \sqrt{\frac{25}{25} - \frac{2}{25}} = \pm \frac{\sqrt{23}}{5}$$

PTS: 2 REF: 061712aai NAT: F.TF.C.8 TOP: Determining Trigonometric Functions

235 ANS: 1 PTS: 2 REF: 011704aai NAT: F.TF.C.8
TOP: Simplifying Trigonometric Expressions

236 ANS: 4

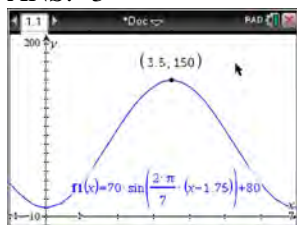
$$\text{period} = \frac{2\pi}{B}$$

$$\frac{1}{60} = \frac{2\pi}{B}$$

$$B = 120\pi$$

PTS: 2 REF: 061624aai NAT: F.TF.B.5 TOP: Modeling Trigonometric Functions

237 ANS: 3



$H(t)$ is at a minimum at $70(-1) + 80 = 10$

PTS: 2 REF: 061613aai NAT: F.IF.B.4 TOP: Graphing Trigonometric Functions
KEY: maximum/minimum

238 ANS: 2 PTS: 2 REF: 081610aai NAT: F.IF.B.4
TOP: Graphing Trigonometric Functions KEY: increasing/decreasing

239 ANS: 4

	Bar Harbor	Phoenix
Minimum	31.386	66.491
Midline	55.3	86.729
Maximum	79.214	106.967
Range	47.828	40.476

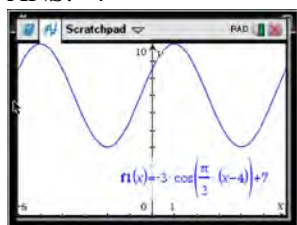
PTS: 2 REF: 061715aai NAT: F.IF.B.4 TOP: Graphing Trigonometric Functions
KEY: maximum/minimum

240 ANS: 2 PTS: 2 REF: 011701aai NAT: F.IF.B.4
TOP: Graphing Trigonometric Functions

241 ANS: 4 PTS: 2 REF: 061706aai NAT: F.IF.B.4
TOP: Graphing Trigonometric Functions

242 ANS: 3 PTS: 2 REF: 081705aai NAT: F.IF.B.4
TOP: Graphing Trigonometric Functions KEY: increasing/decreasing

243 ANS: 4



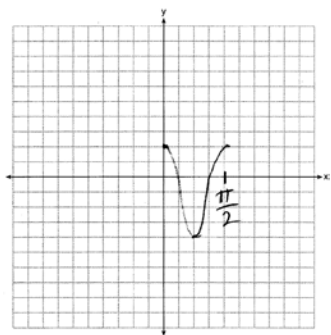
As the range is $[4, 10]$, the midline is $y = \frac{4 + 10}{2} = 7$.

PTS: 2 REF: fall1506aai NAT: F.IF.C.7 TOP: Graphing Trigonometric Functions
KEY: mixed

244 ANS:
Amplitude, because the height of the graph shows the volume of the air.

PTS: 2 REF: 081625aai NAT: F.IF.C.7 TOP: Graphing Trigonometric Functions
KEY: mixed

245 ANS:



PTS: 2 REF: 061628aai NAT: F.IF.C.7 TOP: Graphing Trigonometric Functions
KEY: graph

246 ANS: 3

(3) repeats 3 times over 2π .

PTS: 2 REF: 011722aai NAT: F.IF.C.7 TOP: Graphing Trigonometric Functions
KEY: recognize

247 ANS: 1

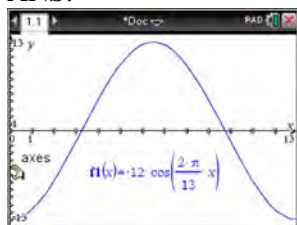
PTS: 2

REF: 061708aai

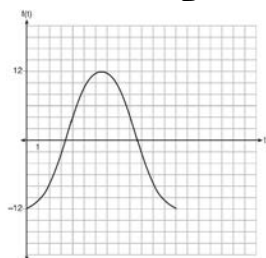
NAT: F.IF.C.7

TOP: Graphing Trigonometric Functions KEY: identify

248 ANS:



The amplitude, 12, can be interpreted from the situation, since the water level has a minimum of -12 and a maximum of 12 . The value of A is -12 since at $8:30$ it is low tide. The period of the function is 13 hours, and is expressed in the function through the parameter B . By experimentation with technology or using the relation $P = \frac{2\pi}{B}$ (where P is the period), it is determined that $B = \frac{2\pi}{13}$.



$$f(t) = -12 \cos\left(\frac{2\pi}{13} t\right)$$

In order to answer the question about when to fish, the student must interpret the function and determine which choice, $7:30$ pm or $10:30$ pm, is on an increasing interval. Since the function is increasing from $t = 13$ to $t = 19.5$ (which corresponds to $9:30$ pm to $4:00$ am), $10:30$ is the appropriate choice.

PTS: 6 REF: spr1514aai NAT: F.IF.C.7 TOP: Graphing Trigonometric Functions
KEY: graph

249 ANS:

period is $\frac{2}{3}$. The wheel rotates once every $\frac{2}{3}$ second.

PTS: 2

REF: 061728a

NAT: F.IF.C.7

TOP: Graphing Trigonometric Functions

KEY: period

250 ANS: 4

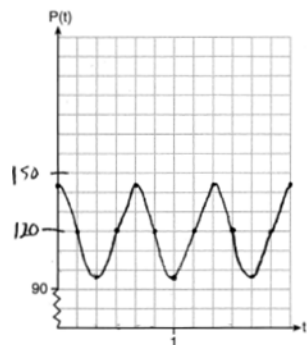
PTS: 2

REF: 081718a

NAT: F.IF.C.7

TOP: Graphing Trigonometric Functions KEY: amplitude

251 ANS:



The period of P is $\frac{2}{3}$, which means the patient's blood pressure reaches a high every $\frac{2}{3}$

second and a low every $\frac{2}{3}$ second. The patient's blood pressure is high because 144 over 96 is greater than 120 over 80.

PTS: 6

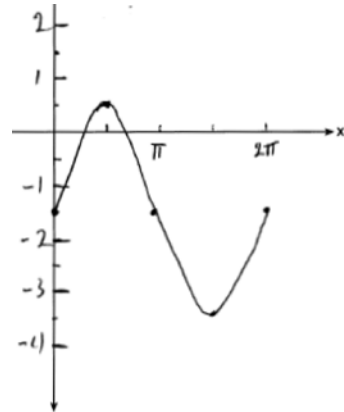
REF: 011837a

NAT: F.IF.C.7

TOP: Graphing Trigonometric Functions

KEY: graph

252 ANS:



Part a sketch is shifted $\frac{\pi}{3}$ units right.

PTS: 4

REF: 081735a

NAT: F.IF.C.7

TOP: Graphing Trigonometric Functions

KEY: graph

253 ANS: 4

$$4(x^2 - 6x + 9) + 4(y^2 + 18y + 81) = 76 + 36 + 324$$

$$4(x - 3)^2 + 4(y + 9)^2 = 436$$

PTS: 2 REF: 061619aai NAT: G.GPE.A.1 TOP: Equations of Circles

KEY: completing the square