

The University of the State of New York
REGENTS HIGH SCHOOL EXAMINATION

GEOMETRY (Common Core)

Wednesday, August 17, 2016 — 8:30 to 11:30 a.m., only

Student Name: _____

School Name: _____

The possession or use of any communications device is strictly prohibited when taking this examination. If you have or use any communications device, no matter how briefly, your examination will be invalidated and no score will be calculated for you.

Print your name and the name of your school on the lines above.

A separate answer sheet for Part I has been provided to you. Follow the instructions from the proctor for completing the student information on your answer sheet.

This examination has four parts, with a total of 36 questions. You must answer all questions in this examination. Record your answers to the Part I multiple-choice questions on the separate answer sheet. Write your answers to the questions in Parts II, III, and IV directly in this booklet. All work should be written in pen, except for graphs and drawings, which should be done in pencil. Clearly indicate the necessary steps, including appropriate formula substitutions, diagrams, graphs, charts, etc. Utilize the information provided for each question to determine your answer. Note that diagrams are not necessarily drawn to scale.

The formulas that you may need to answer some questions in this examination are found at the end of the examination. This sheet is perforated so you may remove it from this booklet.

Scrap paper is not permitted for any part of this examination, but you may use the blank spaces in this booklet as scrap paper. A perforated sheet of scrap graph paper is provided at the end of this booklet for any question for which graphing may be helpful but is not required. You may remove this sheet from this booklet. Any work done on this sheet of scrap graph paper will *not* be scored.

When you have completed the examination, you must sign the statement printed at the end of the answer sheet, indicating that you had no unlawful knowledge of the questions or answers prior to the examination and that you have neither given nor received assistance in answering any of the questions during the examination. Your answer sheet cannot be accepted if you fail to sign this declaration.

Notice...

A graphing calculator, a straightedge (ruler), and a compass must be available for you to use while taking this examination.

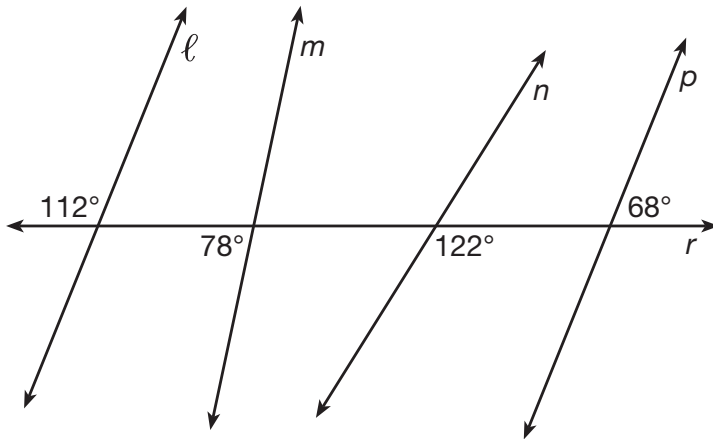
DO NOT OPEN THIS EXAMINATION BOOKLET UNTIL THE SIGNAL IS GIVEN.

Part I

Answer all 24 questions in this part. Each correct answer will receive 2 credits. No partial credit will be allowed. Utilize the information provided for each question to determine your answer. Note that diagrams are not necessarily drawn to scale. For each statement or question, choose the word or expression that, of those given, best completes the statement or answers the question. Record your answers on your separate answer sheet. [48]

1 In the diagram below, lines ℓ , m , n , and p intersect line r .

Use this space for computations.



Which statement is true?

- (1) $\ell \parallel n$
- (2) $\ell \parallel p$
- (3) $m \parallel p$
- (4) $m \parallel n$

2 Which transformation would *not* always produce an image that would be congruent to the original figure?

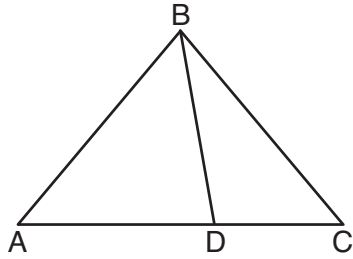
- (1) translation
- (2) dilation
- (3) rotation
- (4) reflection

3 If an equilateral triangle is continuously rotated around one of its medians, which 3-dimensional object is generated?

- (1) cone
- (2) pyramid
- (3) prism
- (4) sphere

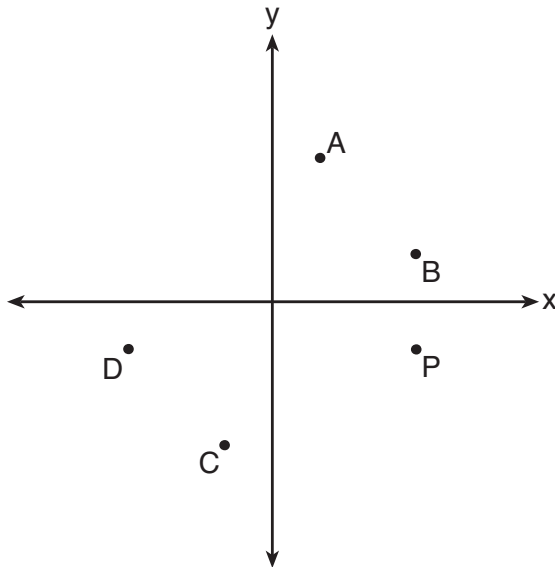
Use this space for computations.

- 4 In the diagram below, $m\angle BDC = 100^\circ$, $m\angle A = 50^\circ$, and $m\angle DBC = 30^\circ$.



Which statement is true?

- (1) $\triangle ABD$ is obtuse. (3) $m\angle ABD = 80^\circ$
(2) $\triangle ABC$ is isosceles. (4) $\triangle ABD$ is scalene.
- 5 Which point shown in the graph below is the image of point P after a counterclockwise rotation of 90° about the origin?



- (1) A (3) C
(2) B (4) D

Use this space for computations.

6 In $\triangle ABC$, where $\angle C$ is a right angle, $\cos A = \frac{\sqrt{21}}{5}$. What is $\sin B$?

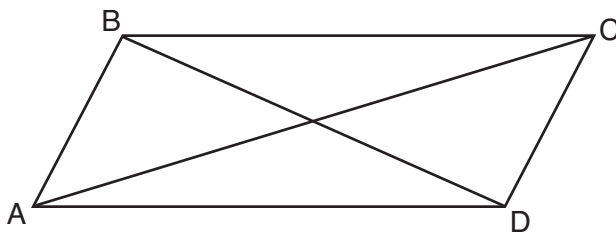
(1) $\frac{\sqrt{21}}{5}$

(3) $\frac{2}{5}$

(2) $\frac{\sqrt{21}}{2}$

(4) $\frac{5}{\sqrt{21}}$

7 Quadrilateral $ABCD$ with diagonals \overline{AC} and \overline{BD} is shown in the diagram below.



Which information is *not* enough to prove $ABCD$ is a parallelogram?

(1) $\overline{AB} \cong \overline{CD}$ and $\overline{AB} \parallel \overline{DC}$

(2) $\overline{AB} \cong \overline{CD}$ and $\overline{BC} \cong \overline{DA}$

(3) $\overline{AB} \cong \overline{CD}$ and $\overline{BC} \parallel \overline{AD}$

(4) $\overline{AB} \parallel \overline{DC}$ and $\overline{BC} \parallel \overline{AD}$

8 An equilateral triangle has sides of length 20. To the *nearest tenth*, what is the height of the equilateral triangle?

(1) 10.0

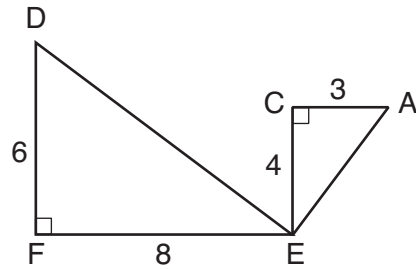
(3) 17.3

(2) 11.5

(4) 23.1

Use this space for computations.

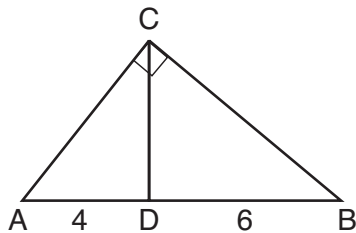
9 Given: $\triangle AEC$, $\triangle DEF$, and $\overline{FE} \perp \overline{CE}$



What is a correct sequence of similarity transformations that shows $\triangle AEC \sim \triangle DEF$?

- (1) a rotation of 180 degrees about point E followed by a horizontal translation
- (2) a counterclockwise rotation of 90 degrees about point E followed by a horizontal translation
- (3) a rotation of 180 degrees about point E followed by a dilation with a scale factor of 2 centered at point E
- (4) a counterclockwise rotation of 90 degrees about point E followed by a dilation with a scale factor of 2 centered at point E

10 In the diagram of right triangle ABC , \overline{CD} intersects hypotenuse \overline{AB} at D .



If $AD = 4$ and $DB = 6$, which length of \overline{AC} makes $\overline{CD} \perp \overline{AB}$?

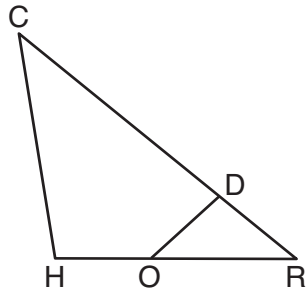
- | | |
|------------------|------------------|
| (1) $2\sqrt{6}$ | (3) $2\sqrt{15}$ |
| (2) $2\sqrt{10}$ | (4) $4\sqrt{2}$ |

Use this space for
computations.

11 Segment CD is the perpendicular bisector of \overline{AB} at E . Which pair of segments does *not* have to be congruent?

- (1) $\overline{AD}, \overline{BD}$ (3) $\overline{AE}, \overline{BE}$
(2) $\overline{AC}, \overline{BC}$ (4) $\overline{DE}, \overline{CE}$

12 In triangle CHR , O is on \overline{HR} , and D is on \overline{CR} so that $\angle H \cong \angle RDO$.



If $RD = 4$, $RO = 6$, and $OH = 4$, what is the length of \overline{CD} ?

- (1) $2\frac{2}{3}$ (3) 11
(2) $6\frac{2}{3}$ (4) 15

13 The cross section of a regular pyramid contains the altitude of the pyramid. The shape of this cross section is a

- (1) circle (3) triangle
(2) square (4) rectangle

14 The diagonals of rhombus $TEAM$ intersect at $P(2,1)$. If the equation of the line that contains diagonal \overline{TA} is $y = -x + 3$, what is the equation of a line that contains diagonal \overline{EM} ?

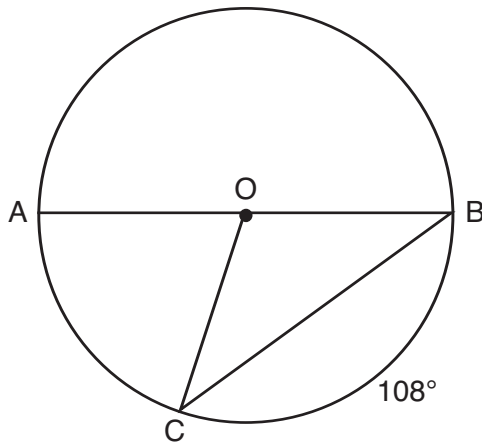
- (1) $y = x - 1$ (3) $y = -x - 1$
(2) $y = x - 3$ (4) $y = -x - 3$

Use this space for computations.

18 Point P is on the directed line segment from point $X(-6, -2)$ to point $Y(6, 7)$ and divides the segment in the ratio 1:5. What are the coordinates of point P ?

- (1) $(4, 5\frac{1}{2})$ (3) $(-4\frac{1}{2}, 0)$
(2) $(-\frac{1}{2}, -4)$ (4) $(-4, -\frac{1}{2})$

19 In circle O , diameter \overline{AB} , chord \overline{BC} , and radius \overline{OC} are drawn, and the measure of arc BC is 108° .



Some students wrote these formulas to find the area of sector COB :

Amy $\frac{3}{10} \cdot \pi \cdot (BC)^2$

Beth $\frac{108}{360} \cdot \pi \cdot (OC)^2$

Carl $\frac{3}{10} \cdot \pi \cdot (\frac{1}{2}AB)^2$

Dex $\frac{108}{360} \cdot \pi \cdot \frac{1}{2}(AB)^2$

Which students wrote correct formulas?

- (1) Amy and Dex (3) Carl and Amy
(2) Beth and Carl (4) Dex and Beth

Use this space for computations.

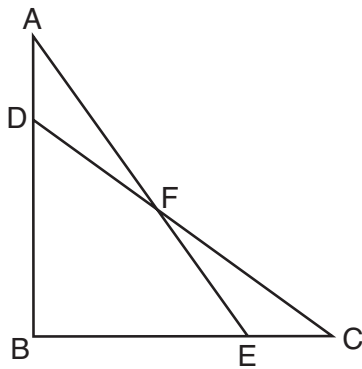
20 Tennis balls are sold in cylindrical cans with the balls stacked one on top of the other. A tennis ball has a diameter of 6.7 cm. To the nearest cubic centimeter, what is the minimum volume of the can that holds a stack of 4 tennis balls?

- (1) 236 (3) 564
(2) 282 (4) 945

21 Line segment $\overline{A'B'}$, whose endpoints are $(4, -2)$ and $(16, 14)$, is the image of \overline{AB} after a dilation of $\frac{1}{2}$ centered at the origin. What is the length of \overline{AB} ?

- (1) 5 (3) 20
(2) 10 (4) 40

22 Given: $\triangle ABE$ and $\triangle CBD$ shown in the diagram below with $\overline{DB} \cong \overline{BE}$

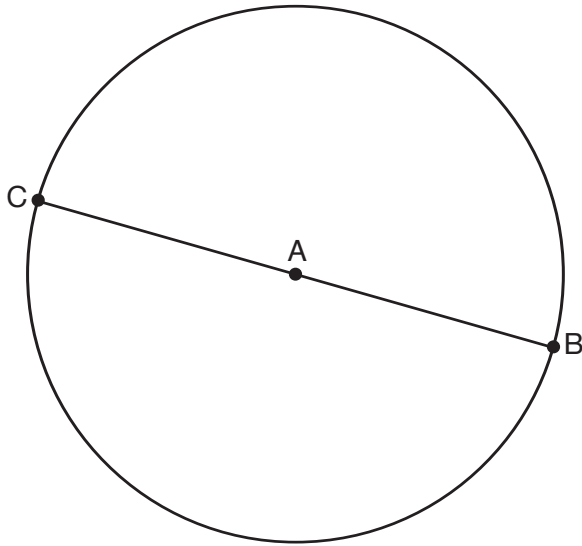


Which statement is needed to prove $\triangle ABE \cong \triangle CBD$ using only SAS \cong SAS?

- (1) $\angle CDB \cong \angle AEB$ (3) $\overline{AD} \cong \overline{CE}$
(2) $\angle AFD \cong \angle EFC$ (4) $\overline{AE} \cong \overline{CD}$

23 In the diagram below, \overline{BC} is the diameter of circle A.

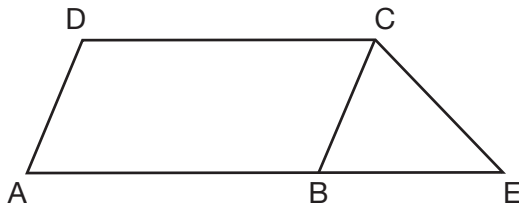
Use this space for computations.



Point D , which is unique from points B and C , is plotted on circle A. Which statement must always be true?

- (1) $\triangle BCD$ is a right triangle.
- (2) $\triangle BCD$ is an isosceles triangle.
- (3) $\triangle BAD$ and $\triangle CBD$ are similar triangles.
- (4) $\triangle BAD$ and $\triangle CAD$ are congruent triangles.

24 In the diagram below, $ABCD$ is a parallelogram, \overline{AB} is extended through B to E , and \overline{CE} is drawn.



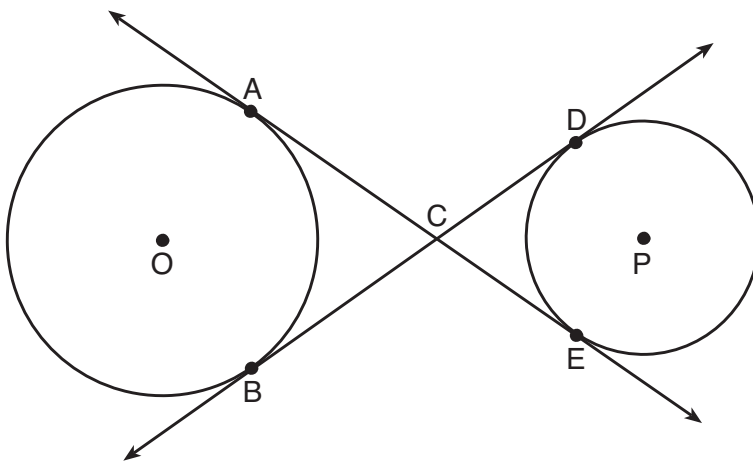
If $\overline{CE} \cong \overline{BE}$ and $m\angle D = 112^\circ$, what is $m\angle E$?

- (1) 44°
- (2) 56°
- (3) 68°
- (4) 112°

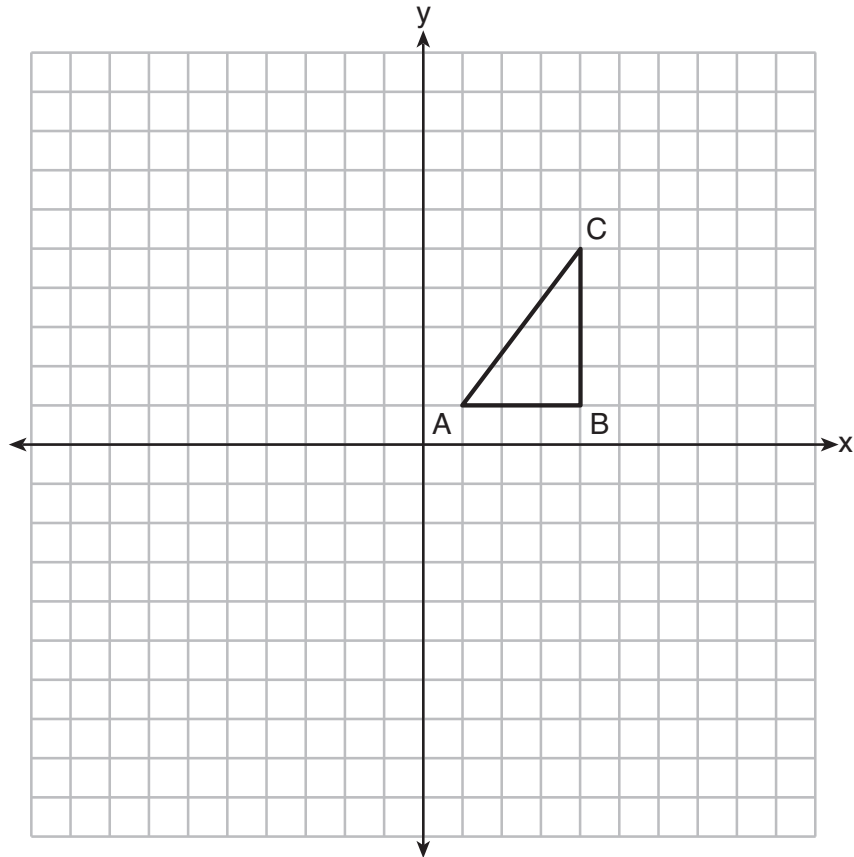
Part II

Answer all 7 questions in this part. Each correct answer will receive 2 credits. Clearly indicate the necessary steps, including appropriate formula substitutions, diagrams, graphs, charts, etc. Utilize the information provided for each question to determine your answer. Note that diagrams are not necessarily drawn to scale. For all questions in this part, a correct numerical answer with no work shown will receive only 1 credit. All answers should be written in pen, except for graphs and drawings, which should be sec done in pencil. [14]

- 25 Lines AE and BD are tangent to circles O and P at $A, E, B,$ and D , as shown in the diagram below. If $AC:CE = 5:3$, and $BD = 56$, determine and state the length of CD .

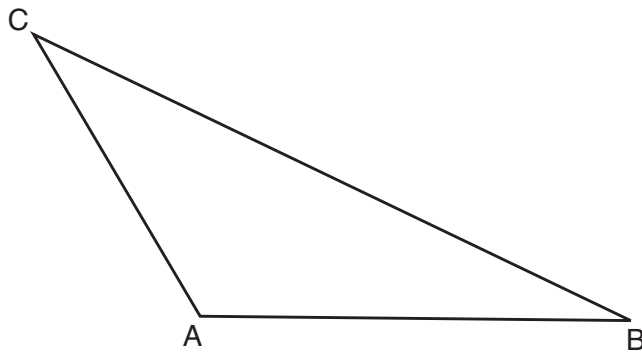


26 In the diagram below, $\triangle ABC$ has coordinates $A(1,1)$, $B(4,1)$, and $C(4,5)$. Graph and label $\triangle A''B''C''$, the image of $\triangle ABC$ after the translation five units to the right and two units up followed by the reflection over the line $y = 0$.

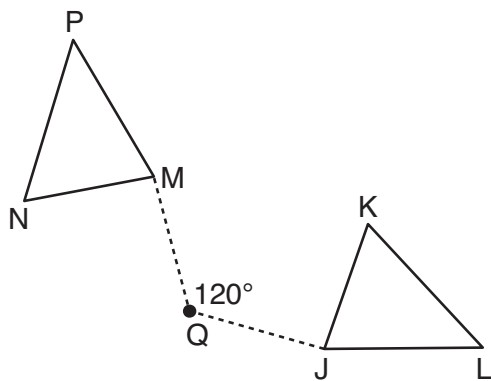


27 A regular hexagon is rotated in a counterclockwise direction about its center. Determine and state the minimum number of degrees in the rotation such that the hexagon will coincide with itself.

28 In the diagram of $\triangle ABC$ shown below, use a compass and straightedge to construct the median to \overline{AB} . [Leave all construction marks.]

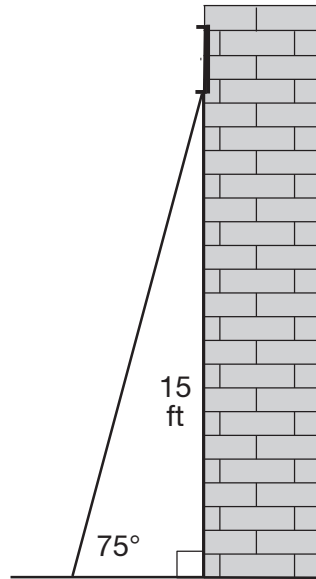


- 29 Triangle MNP is the image of triangle JKL after a 120° counterclockwise rotation about point Q . If the measure of angle L is 47° and the measure of angle N is 57° , determine the measure of angle M . Explain how you arrived at your answer.



30 A circle has a center at $(1,-2)$ and radius of 4. Does the point $(3.4,1.2)$ lie on the circle? Justify your answer.

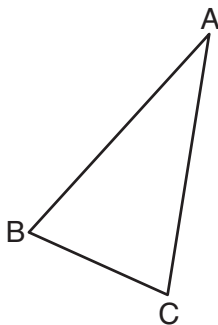
- 31 In the diagram below, a window of a house is 15 feet above the ground. A ladder is placed against the house with its base at an angle of 75° with the ground. Determine and state the length of the ladder to the *nearest tenth of a foot*.



Part III

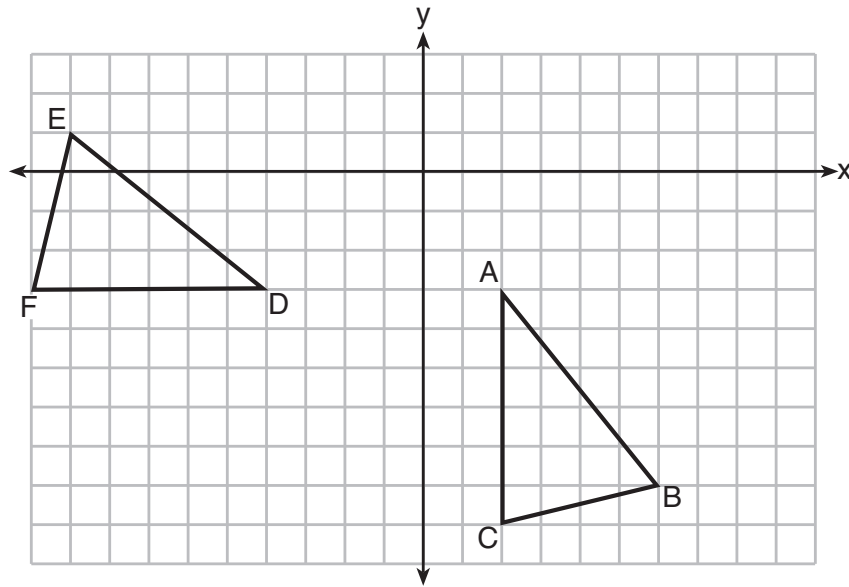
Answer all 3 questions in this part. Each correct answer will receive 4 credits. Clearly indicate the necessary steps, including appropriate formula substitutions, diagrams, graphs, charts, etc. Utilize the information provided for each question to determine your answer. Note that diagrams are not necessarily drawn to scale. For all questions in this part, a correct numerical answer with no work shown will receive only 1 credit. All answers should be written in pen, except for graphs and drawings, which should be done in pencil. [12]

- 32 Using a compass and straightedge, construct and label $\triangle A'B'C'$, the image of $\triangle ABC$ after a dilation with a scale factor of 2 and centered at B . [Leave all construction marks.]



Describe the relationship between the lengths of \overline{AC} and $\overline{A'C'}$.

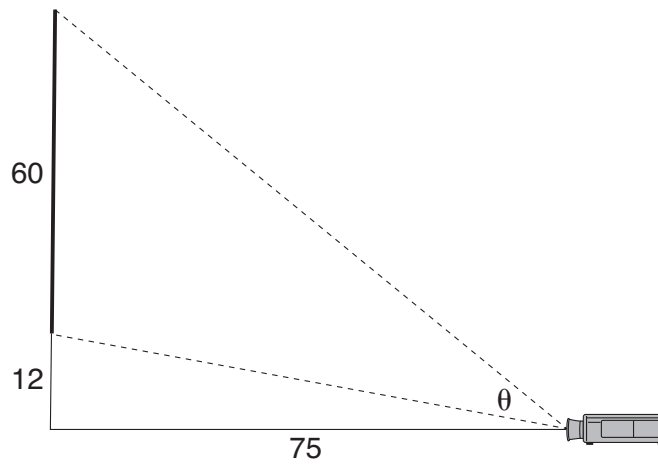
33 The grid below shows $\triangle ABC$ and $\triangle DEF$.



Let $\triangle A'B'C'$ be the image of $\triangle ABC$ after a rotation about point A. Determine and state the location of B' if the location of point C' is $(8, -3)$. Explain your answer.

Is $\triangle DEF$ congruent to $\triangle A'B'C'$? Explain your answer.

34 As modeled below, a movie is projected onto a large outdoor screen. The bottom of the 60-foot-tall screen is 12 feet off the ground. The projector sits on the ground at a horizontal distance of 75 feet from the screen.

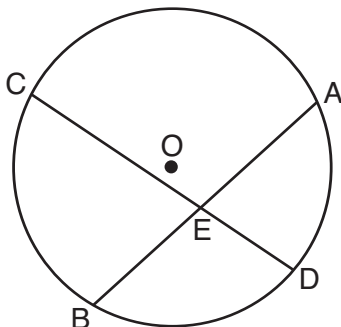


Determine and state, to the *nearest tenth of a degree*, the measure of θ , the projection angle.

Part IV

Answer the 2 questions in this part. Each correct answer will receive 6 credits. Clearly indicate the necessary steps, including appropriate formula substitutions, diagrams, graphs, charts, etc. Utilize the information provided for each question to determine your answer. Note that diagrams are not necessarily drawn to scale. For all questions in this part, a correct numerical answer with no work shown will receive only 1 credit. All answers should be written in pen, except for graphs and drawings, which should be done in pencil. [12]

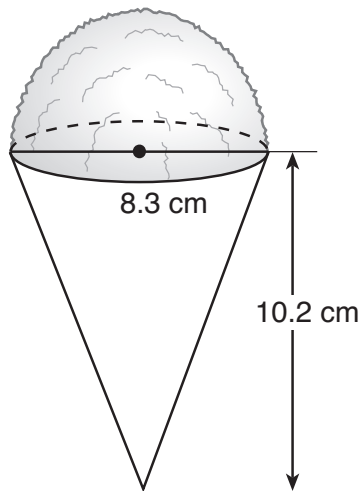
35 Given: Circle O , chords \overline{AB} and \overline{CD} intersect at E



Theorem: If two chords intersect in a circle, the product of the lengths of the segments of one chord is equal to the product of the lengths of the segments of the other chord.

Prove this theorem by proving $AE \cdot EB = CE \cdot ED$.

- 36** A snow cone consists of a paper cone completely filled with shaved ice and topped with a hemisphere of shaved ice, as shown in the diagram below. The inside diameter of both the cone and the hemisphere is 8.3 centimeters. The height of the cone is 10.2 centimeters.



The desired density of the shaved ice is 0.697 g/cm^3 , and the cost, per kilogram, of ice is \$3.83. Determine and state the cost of the ice needed to make 50 snow cones.

High School Math Reference Sheet

1 inch = 2.54 centimeters	1 kilometer = 0.62 mile	1 cup = 8 fluid ounces
1 meter = 39.37 inches	1 pound = 16 ounces	1 pint = 2 cups
1 mile = 5280 feet	1 pound = 0.454 kilogram	1 quart = 2 pints
1 mile = 1760 yards	1 kilogram = 2.2 pounds	1 gallon = 4 quarts
1 mile = 1.609 kilometers	1 ton = 2000 pounds	1 gallon = 3.785 liters
		1 liter = 0.264 gallon
		1 liter = 1000 cubic centimeters

Triangle	$A = \frac{1}{2}bh$
Parallelogram	$A = bh$
Circle	$A = \pi r^2$
Circle	$C = \pi d$ or $C = 2\pi r$
General Prisms	$V = Bh$
Cylinder	$V = \pi r^2 h$
Sphere	$V = \frac{4}{3}\pi r^3$
Cone	$V = \frac{1}{3}\pi r^2 h$
Pyramid	$V = \frac{1}{3}Bh$

Pythagorean Theorem	$a^2 + b^2 = c^2$
Quadratic Formula	$x = \frac{-b \pm \sqrt{b^2 - 4ac}}{2a}$
Arithmetic Sequence	$a_n = a_1 + (n - 1)d$
Geometric Sequence	$a_n = a_1 r^{n - 1}$
Geometric Series	$S_n = \frac{a_1 - a_1 r^n}{1 - r}$ where $r \neq 1$
Radians	1 radian = $\frac{180}{\pi}$ degrees
Degrees	1 degree = $\frac{\pi}{180}$ radians
Exponential Growth/Decay	$A = A_0 e^{k(t - t_0)} + B_0$


Tear Here

Tear Here


Scrap Graph Paper — This sheet will *not* be scored.

Tear Here

Tear Here



Scrap Graph Paper — This sheet will *not* be scored.



Tear Here

Tear Here

GEOMETRY (COMMON CORE)

Printed on Recycled Paper

GEOMETRY (COMMON CORE)

FOR TEACHERS ONLY

The University of the State of New York

REGENTS HIGH SCHOOL EXAMINATION

GEOMETRY (COMMON CORE)

Wednesday, August 17, 2016 — 8:30 to 11:30 a.m., only

SCORING KEY AND RATING GUIDE

Mechanics of Rating

The following procedures are to be followed for scoring student answer papers for the Regents Examination in Geometry (Common Core). More detailed information about scoring is provided in the publication *Information Booklet for Scoring the Regents Examination in Geometry (Common Core)*.

Do *not* attempt to correct the student's work by making insertions or changes of any kind. In scoring the open-ended questions, use check marks to indicate student errors. Unless otherwise specified, mathematically correct variations in the answers will be allowed. Units need not be given when the wording of the questions allows such omissions.

Each student's answer paper is to be scored by a minimum of three mathematics teachers. No one teacher is to score more than approximately one-third of the open-ended questions on a student's paper. Teachers may not score their own students' answer papers. On the student's separate answer sheet, for each question, record the number of credits earned and the teacher's assigned rater/scorer letter.

Schools are not permitted to rescore any of the open-ended questions on this exam after each question has been rated once, regardless of the final exam score. Schools are required to ensure that the raw scores have been added correctly and that the resulting scale score has been determined accurately.

Raters should record the student's scores for all questions and the total raw score on the student's separate answer sheet. Then the student's total raw score should be converted to a scale score by using the conversion chart that will be posted on the Department's web site at: <http://www.p12.nysed.gov/assessment/> on Wednesday, August 17, 2016. Because scale scores corresponding to raw scores in the conversion chart may change from one administration to another, it is crucial that, for each administration, the conversion chart provided for that administration be used to determine the student's final score. The student's scale score should be entered in the box provided on the student's separate answer sheet. The scale score is the student's final examination score.

If the student’s responses for the multiple-choice questions are being hand scored prior to being scanned, the scorer must be careful not to make any marks on the answer sheet except to record the scores in the designated score boxes. Marks elsewhere on the answer sheet will interfere with the accuracy of the scanning.

Part I

Allow a total of 48 credits, 2 credits for each of the following. Allow credit if the student has written the correct answer instead of the numeral 1, 2, 3, or 4.

(1) 2	(9) 4	(17) 2
(2) 2	(10) 2	(18) 4
(3) 1	(11) 4	(19) 2
(4) 2	(12) 3	(20) 4
(5) 1	(13) 3	(21) 4
(6) 1	(14) 1	(22) 3
(7) 3	(15) 3	(23) 1
(8) 3	(16) 1	(24) 1

Updated information regarding the rating of this examination may be posted on the New York State Education Department’s web site during the rating period. Check this web site at: <http://www.p12.nysed.gov/assessment/> and select the link “Scoring Information” for any recently posted information regarding this examination. This site should be checked before the rating process for this examination begins and several times throughout the Regents Examination period.

The Department is providing supplemental scoring guidance, the “Model Response Set,” for the Regents Examination in Geometry (Common Core). This guidance is intended to be part of the scorer training. Schools should use the Model Response Set along with the rubrics in the Scoring Key and Rating Guide to help guide scoring of student work. While not reflective of all scenarios, the Model Response Set illustrates how less common student responses to constructed-response questions may be scored. The Model Response Set will be available on the Department’s web site at: <http://www.nysedregents.org/geometrycc/>.

General Rules for Applying Mathematics Rubrics

I. General Principles for Rating

The rubrics for the constructed-response questions on the Regents Examination in Geometry (Common Core) are designed to provide a systematic, consistent method for awarding credit. The rubrics are not to be considered all-inclusive; it is impossible to anticipate all the different methods that students might use to solve a given problem. Each response must be rated carefully using the teacher's professional judgment and knowledge of mathematics; all calculations must be checked. The specific rubrics for each question must be applied consistently to all responses. In cases that are not specifically addressed in the rubrics, raters must follow the general rating guidelines in the publication *Information Booklet for Scoring the Regents Examination in Geometry (Common Core)*, use their own professional judgment, confer with other mathematics teachers, and/or contact the State Education Department for guidance. During each Regents Examination administration period, rating questions may be referred directly to the Education Department. The contact numbers are sent to all schools before each administration period.

II. Full-Credit Responses

A full-credit response provides a complete and correct answer to all parts of the question. Sufficient work is shown to enable the rater to determine how the student arrived at the correct answer.

When the rubric for the full-credit response includes one or more examples of an acceptable method for solving the question (usually introduced by the phrase “such as”), it does not mean that there are no additional acceptable methods of arriving at the correct answer. Unless otherwise specified, mathematically correct alternative solutions should be awarded credit. The only exceptions are those questions that specify the type of solution that must be used; e.g., an algebraic solution or a graphic solution. A correct solution using a method other than the one specified is awarded half the credit of a correct solution using the specified method.

III. Appropriate Work

Full-Credit Responses: The directions in the examination booklet for all the constructed-response questions state: “Clearly indicate the necessary steps, including appropriate formula substitutions, diagrams, graphs, charts, etc.” The student has the responsibility of providing the correct answer **and** showing how that answer was obtained. The student must “construct” the response; the teacher should not have to search through a group of seemingly random calculations scribbled on the student paper to ascertain what method the student may have used.

Responses With Errors: Rubrics that state “Appropriate work is shown, but...” are intended to be used with solutions that show an essentially complete response to the question but contain certain types of errors, whether computational, rounding, graphing, or conceptual. If the response is incomplete; i.e., an equation is written but not solved or an equation is solved but not all of the parts of the question are answered, appropriate work has **not** been shown. Other rubrics address incomplete responses.

IV. Multiple Errors

Computational Errors, Graphing Errors, and Rounding Errors: Each of these types of errors results in a 1-credit deduction. Any combination of two of these types of errors results in a 2-credit deduction. No more than 2 credits should be deducted for such mechanical errors in a 4-credit question and no more than 3 credits should be deducted in a 6-credit question. The teacher must carefully review the student's work to determine what errors were made and what type of errors they were.

Conceptual Errors: A conceptual error involves a more serious lack of knowledge or procedure. Examples of conceptual errors include using the incorrect formula for the area of a figure, choosing the incorrect trigonometric function, or multiplying the exponents instead of adding them when multiplying terms with exponents.

If a response shows repeated occurrences of the same conceptual error, the student should not be penalized twice. If the same conceptual error is repeated in responses to other questions, credit should be deducted in each response.

For 4- and 6-credit questions, if a response shows one conceptual error and one computational, graphing, or rounding error, the teacher must award credit that takes into account both errors. Refer to the rubric for specific scoring guidelines.

Part II

For each question, use the specific criteria to award a maximum of 2 credits. Unless otherwise specified, mathematically correct alternative solutions should be awarded appropriate credit.

(25) [2] 21, and correct work is shown.

[1] Appropriate work is shown, but one computational error is made.

or

[1] Appropriate work is shown, but one conceptual error is made.

or

[1] An appropriate equation is written to find CD , but CD is not found or is found incorrectly.

or

[1] 21, but no work is shown.

[0] A zero response is completely incorrect, irrelevant, or incoherent or is a correct response that was obtained by an obviously incorrect procedure.

(26) [2] $\triangle A''B''C''$ is graphed and labeled correctly.

[1] Appropriate work is shown, but one computational, graphing, or labeling error is made.

or

[1] Appropriate work is shown, but one conceptual error is made.

[0] A zero response is completely incorrect, irrelevant, or incoherent or is a correct response that was obtained by an obviously incorrect procedure.

- (27) [2] 60, and correct work is shown.
- [1] Appropriate work is shown, but one computational error is made.
- or***
- [1] Appropriate work is shown, but one conceptual error is made.
- or***
- [1] 60, but no work is shown.
- [0] 360, with correct or incorrect work shown, because any figure will map onto itself after a rotation of 360 about its center.
- or***
- [0] A zero response is completely incorrect, irrelevant, or incoherent or is a correct response that was obtained by an obviously incorrect procedure.
- (28) [2] A correct construction is drawn showing all appropriate arcs, and the median to \overline{AB} is drawn.
- [1] A correct construction is drawn showing all appropriate arcs, but the median to \overline{BC} or \overline{AC} is drawn.
- or***
- [1] A correct construction is drawn showing all appropriate arcs, but the median to \overline{AB} is not drawn.
- [0] A drawing that is not an appropriate construction is shown.
- or***
- [0] A zero response is completely incorrect, irrelevant, or incoherent or is a correct response that was obtained by an obviously incorrect procedure.

- (29) [2] 76, and a correct explanation is written.
- [1] Appropriate work is shown, but one computational error is made.
- or***
- [1] Appropriate work is shown, but one conceptual error is made.
- or***
- [1] Appropriate work is shown, but the explanation is missing or incorrect.
- or***
- [1] A correct explanation is written, but the angle measure is missing or incorrect.
- or***
- [1] 76, but no work is shown.
- [0] A zero response is completely incorrect, irrelevant, or incoherent or is a correct response that was obtained by an obviously incorrect procedure.
-
- (30) [2] Yes, and a correct justification is shown.
- [1] Appropriate work is shown, but one computational error is made.
- or***
- [1] Appropriate work is shown, but one conceptual error is made.
- or***
- [1] $(x - 1)^2 + (y + 2)^2 = 16$ or an equivalent equation is written, but no further correct work is shown.
- [0] Yes, but no work is shown.
- or***
- [0] A zero response is completely incorrect, irrelevant, or incoherent or is a correct response that was obtained by an obviously incorrect procedure.

(31) [2] 15.5, and correct work is shown.

[1] Appropriate work is shown, but one computational or rounding error is made.

or

[1] Appropriate work is shown, but one conceptual error is made, such as using an incorrect trigonometric function.

or

[1] $\sin 75 = \frac{15}{x}$ or an equivalent equation is written, but no further correct work is shown.

or

[1] 15.5, but no work is shown.

[0] A zero response is completely incorrect, irrelevant, or incoherent or is a correct response that was obtained by an obviously incorrect procedure.

Part III

For each question, use the specific criteria to award a maximum of 4 credits. Unless otherwise specified, mathematically correct alternative solutions should be awarded appropriate credit.

(32) [4] A correct construction is drawn showing all appropriate arcs, A' and C' are correctly labeled, and a relationship is stated such as $2 \cdot AC = A'C'$ or $AC = \frac{1}{2}A'C'$.

[3] Appropriate work is shown, but one construction or labeling error is made. An appropriate geometric relationship is stated.

or

[3] Appropriate work is shown to construct and label the image of $\triangle ABC$. An appropriate geometric relationship between \overline{AC} and $\overline{A'C'}$ is stated, but it does not describe the relationship of the lengths.

[2] Appropriate work is shown, but two or more construction or labeling errors are made. An appropriate geometric relationship is stated.

or

[2] A correct geometric relationship is described, but no further correct work is shown.

or

[2] Appropriate work is shown to construct the image of $\triangle ABC$, but no further correct work is shown.

[1] Appropriate work is shown to construct the locations of A' and C' , but no further work is shown.

or

[1] An incomplete geometric relationship is described, but no further correct work is shown.

[0] A zero response is completely incorrect, irrelevant, or incoherent or is a correct response that was obtained by an obviously incorrect procedure.

- (33) [4] (7,1), and a correct explanation is written. Yes, and a correct explanation is written.
- [3] Appropriate work is shown, but one graphing error is made.
- or*
- [3] (7,1), but the explanation is missing, incorrect, or incomplete. Yes, and a correct explanation is written.
- or*
- [3] (7,1), and a correct explanation is written. Yes, but an incomplete explanation is written.
- [2] Appropriate work is shown, but two or more graphing errors are made.
- or*
- [2] Appropriate work is shown, but one conceptual error is made.
- or*
- [2] (7,1), and a correct explanation is written, but no further correct work is shown.
- or*
- [2] (7,1), but the explanation is missing, incorrect, or incomplete. Yes, but an incomplete or incorrect explanation is written.
- or*
- [2] Yes, and a correct explanation is written, but no further correct work is shown.
- [1] Yes, but an incomplete or incorrect explanation is written. No further correct work is shown.
- or*
- [1] (7,1), but no further correct work is shown.
- [0] Yes, but the explanation is missing.
- or*
- [0] A zero response is completely incorrect, irrelevant, or incoherent or is a correct response that was obtained by an obviously incorrect procedure.

- (34) [4] 34.7, and correct work is shown.
- [3] Appropriate work is shown, but one computational or rounding error is made.
- or*
- [3] Correct work is shown to find both angles of elevation, but no further correct work is shown.
- [2] Appropriate work is shown, but two or more computational or rounding errors are made.
- or*
- [2] Appropriate work is shown, but one conceptual error is made.
- [1] Appropriate work is shown, but one conceptual error and one computational or rounding error are made.
- or*
- [1] Correct work is shown to find one angle of elevation, but no further correct work is shown.
- or*
- [1] Two appropriate trigonometric equations are written, but no further correct work is shown.
- or*
- [1] 34.7, but no work is shown.
- [0] A zero response is completely incorrect, irrelevant, or incoherent or is a correct response that was obtained by an obviously incorrect procedure.
-

Part IV

For each question, use the specific criteria to award a maximum of 6 credits. Unless otherwise specified, mathematically correct alternative solutions should be awarded appropriate credit.

(35) [6] A complete and correct proof that includes a concluding statement is written.

[5] A proof is written that demonstrates a thorough understanding of the method of proof and contains no conceptual errors, but one statement and/or reason is missing or incorrect.

or

[5] A correct proportion is proven, but no further correct work is shown.

[4] A proof is written that demonstrates a good understanding of the method of proof and contains no conceptual errors, but two statements and/or reasons are missing or incorrect.

or

[4] $\triangle ADE \sim \triangle CBE$ or $\triangle ACE \sim \triangle DBE$ is proven, but no further correct work is shown.

[3] A proof is written that demonstrates a good understanding of the method of proof and contains no conceptual errors, but three statements and/or reasons are missing or incorrect.

or

[3] A proof is written that demonstrates a good understanding of the method of proof, but one conceptual error is made.

[2] A proof is written that demonstrates a method of proof, but one conceptual error is made, and one statement and/or reason is missing or incorrect.

or

[2] Only two correct relevant statements and reasons are written.

[1] Only one correct relevant statement and reason are written.

[0] The “given” and/or the “prove” statements are written, but no further correct relevant statements are written.

or

[0] A zero response is completely incorrect, irrelevant, or incoherent or is a correct response that was obtained by an obviously incorrect procedure.

- (36) [6] 44.53, and correct work is shown.
- [5] Appropriate work is shown, but one computational or rounding error is made.
- or***
- [5] Correct work is shown to find the correct number of kilograms needed for fifty snow cones, but no further correct work is shown.
- or***
- [5] Correct work is shown to find the cost of one snow cone, but no further correct work is shown.
- [4] Appropriate work is shown, but two computational or rounding errors are made.
- or***
- [4] Appropriate work is shown, but one conceptual error is made.
- or***
- [4] Correct work is shown to find the correct number of grams needed for one snow cone. No further correct work is shown.
- [3] Appropriate work is shown, but three or more computational or rounding errors are made.
- or***
- [3] Appropriate work is shown, but one conceptual error and one computational or rounding error are made.
- or***
- [3] Correct work is shown to find the volume of fifty snow cones. No further correct work is shown.
- [2] Appropriate work is shown, but one conceptual error and two computational or rounding errors are made.
- or***
- [2] Appropriate work is shown, but two conceptual errors are made.
- or***
- [2] Correct work is shown to find the volume of the cone and the volume of the hemisphere. No further correct work is shown.
- [1] Appropriate work is shown, but one conceptual error and three or more computational or rounding errors are made.
- or***

[1] Appropriate work is shown, but two conceptual errors and one computational or rounding error are made.

or

[1] Correct work is shown to find the volume of the cone or the volume of the hemisphere. No further correct work is shown.

or

[1] 44.53, but no work is shown.

[0] A zero response is completely incorrect, irrelevant, or incoherent or is a correct response that was obtained by an obviously incorrect procedure.

**Map to the Common Core Learning Standards
Geometry (Common Core)
August 2016**

Question	Type	Credits	Cluster
1	Multiple Choice	2	G-CO.C
2	Multiple Choice	2	G-CO.B
3	Multiple Choice	2	G-GMD.B
4	Multiple Choice	2	G-CO.C
5	Multiple Choice	2	G-CO.A
6	Multiple Choice	2	G-SRT.C
7	Multiple Choice	2	G-CO.C
8	Multiple Choice	2	G-SRT.C
9	Multiple Choice	2	G-SRT.A
10	Multiple Choice	2	G-SRT.B
11	Multiple Choice	2	G-CO.C
12	Multiple Choice	2	G-SRT.B
13	Multiple Choice	2	G-GMD.B
14	Multiple Choice	2	G-GPE.B
15	Multiple Choice	2	G-GPE.B
16	Multiple Choice	2	G-GPE.A
17	Multiple Choice	2	G-MG.A
18	Multiple Choice	2	G-GPE.B
19	Multiple Choice	2	G-C.B
20	Multiple Choice	2	G-MG.A
21	Multiple Choice	2	G-SRT.A
22	Multiple Choice	2	G-CO.C
23	Multiple Choice	2	G-C.A
24	Multiple Choice	2	G-CO.C
25	Constructed Response	2	G-C.A
26	Constructed Response	2	G-CO.A
27	Constructed Response	2	G-CO.A
28	Constructed Response	2	G-CO.D
29	Constructed Response	2	G-CO.B
30	Constructed Response	2	G-GPE.B
31	Constructed Response	2	G-SRT.C
32	Constructed Response	4	G-SRT.A
33	Constructed Response	4	G-CO.B
34	Constructed Response	4	G-SRT.C
35	Constructed Response	6	G-SRT.B
36	Constructed Response	6	G-MG.A

Regents Examination in Geometry (Common Core)

August 2016

Chart for Converting Total Test Raw Scores to Final Examination Scores (Scale Scores)

The *Chart for Determining the Final Examination Score for the August 2016 Regents Examination in Geometry (Common Core)* will be posted on the Department's web site at: <http://www.p12.nysed.gov/assessment/> on Wednesday, August 17, 2016.

Online Submission of Teacher Evaluations of the Test to the Department

Suggestions and feedback from teachers provide an important contribution to the test development process. The Department provides an online evaluation form for State assessments. It contains spaces for teachers to respond to several specific questions and to make suggestions. Instructions for completing the evaluation form are as follows:

1. Go to <http://www.forms2.nysed.gov/emsc/osa/exameval/reexameval.cfm>.
2. Select the test title.
3. Complete the required demographic fields.
4. Complete each evaluation question and provide comments in the space provided.
5. Click the SUBMIT button at the bottom of the page to submit the completed form.

The University of the State of New York
REGENTS HIGH SCHOOL EXAMINATION

GEOMETRY (COMMON CORE)

Wednesday, August 17, 2016 — 8:30 to 11:30 a.m.

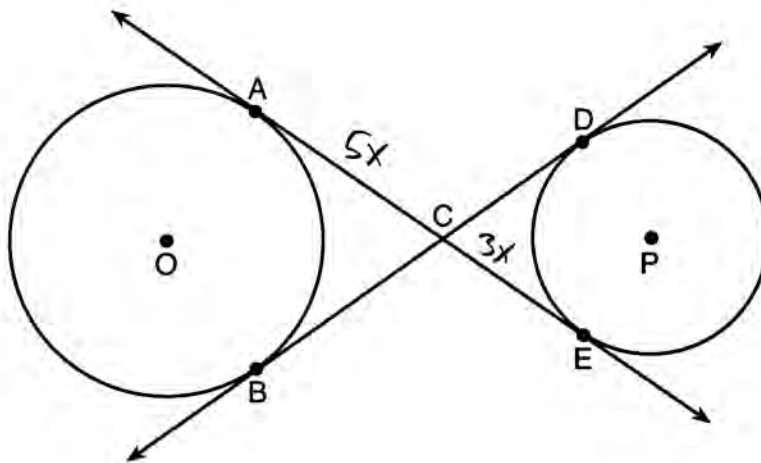
MODEL RESPONSE SET

Table of Contents

Question 25	2
Question 26	6
Question 27	13
Question 28	18
Question 29	22
Question 30	28
Question 31	32
Question 32	36
Question 33	44
Question 34	52
Question 35	58
Question 36	65

Question 25

25 Lines AE and BD are tangent to circles O and P at $A, E, B,$ and D , as shown in the diagram below. If $AC:CE = 5:3$, and $BD = 56$, determine and state the length of CD .



$$5x + 3x = 56$$

$$\frac{8x}{8} = \frac{56}{8}$$

$$x = 7$$

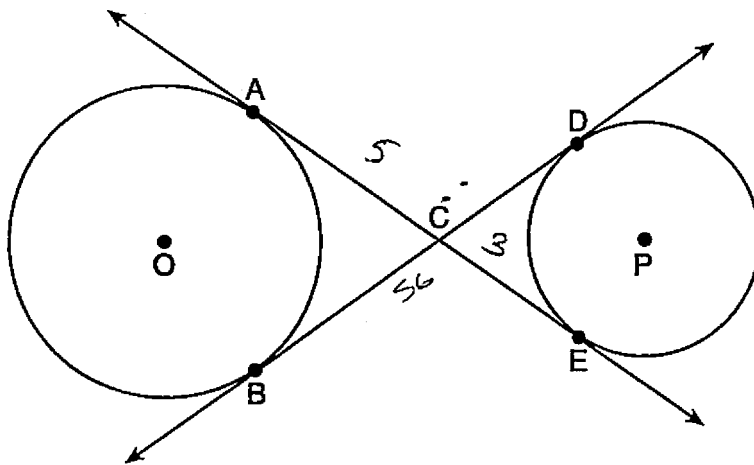
$$CE = 3(7) = 21$$

$$CD = 21$$

Score 2: The student had a complete and correct response.

Question 25

25 Lines AE and BD are tangent to circles O and P at $A, E, B,$ and D , as shown in the diagram below. If $AC:CE = 5:3$, and $BD = 56$, determine and state the length of CD .

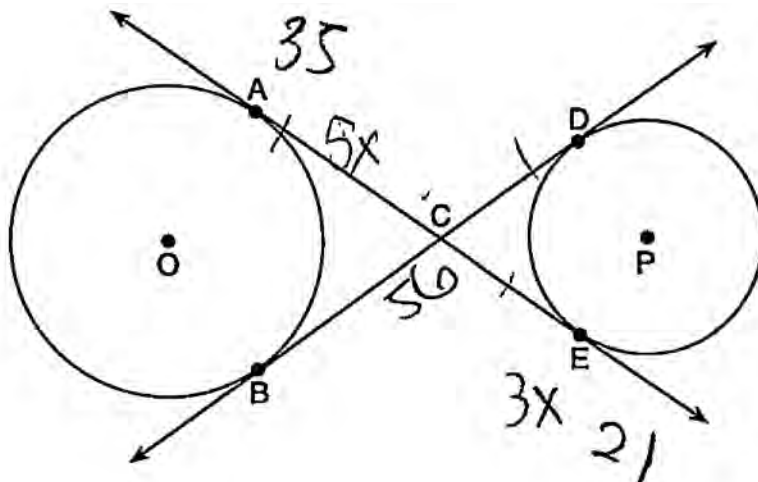


$$\begin{aligned} 1 \text{ unit} &= 56 \div (5+3) \\ &= 56 \div 8 \\ &= 7 \\ ; CD &= 7(3) \\ &= 21 \end{aligned}$$

Score 2: The student had a complete and correct response.

Question 25

25 Lines AE and BD are tangent to circles O and P at $A, E, B,$ and D , as shown in the diagram below. If $AC:CE = 5:3$, and $BD = 56$, determine and state the length of \overline{CD} .



$$5x + 3x = 56$$

$$\begin{array}{r} \text{)} \\ \text{\$}x \\ \text{\$} \\ \hline \end{array}$$

$$= \frac{56}{8}$$

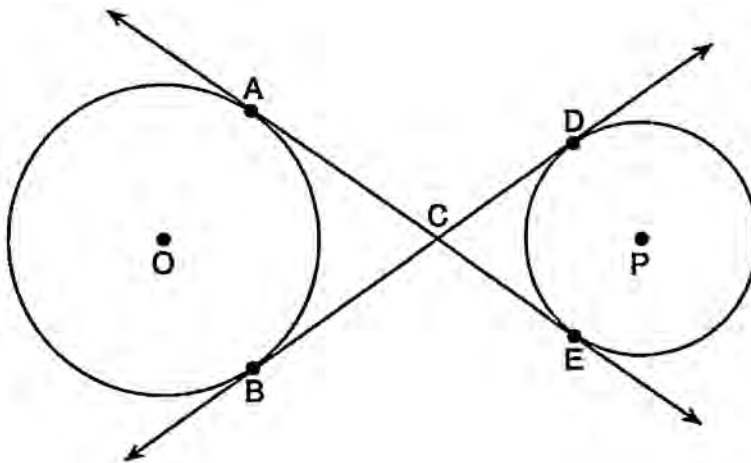
$$x = 7$$

$$CD = 35$$

Score 1: The student substituted incorrectly and found the length of \overline{CB} .

Question 25

25 Lines AE and BD are tangent to circles O and P at $A, E, B,$ and D , as shown in the diagram below. If $AC:CE = 5:3$, and $BD = 56$, determine and state the length of CD .



$$5x + 3x = 360$$

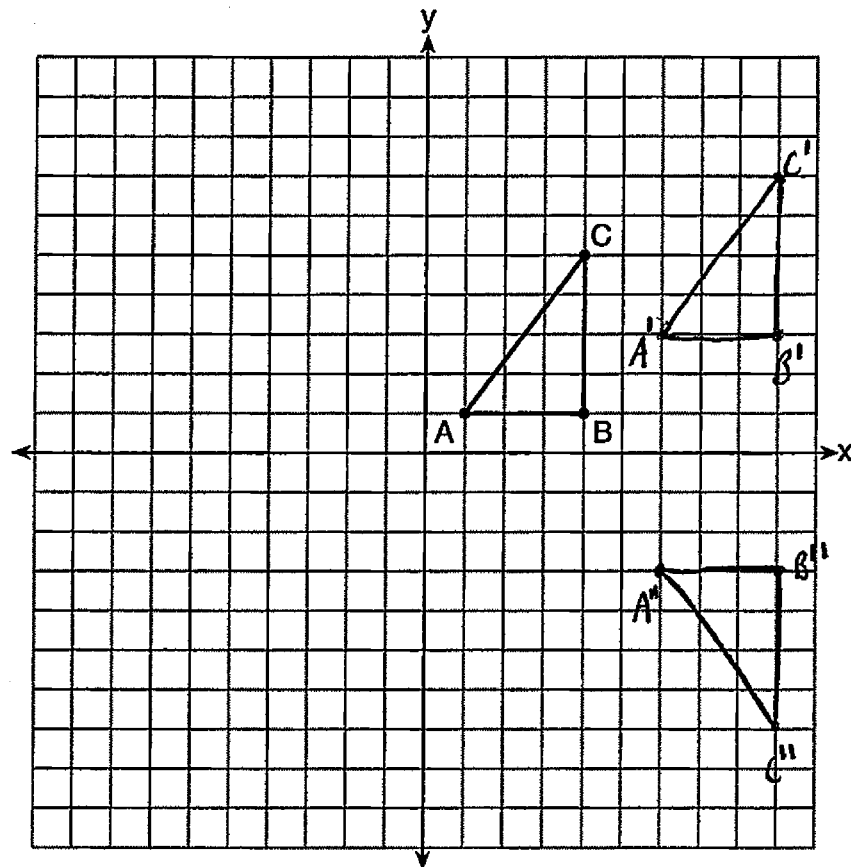
$$\frac{8x}{8} = \frac{360}{8}$$

$$x = 45$$

Score 0: The student did not show enough relevant correct work to receive any credit.

Question 26

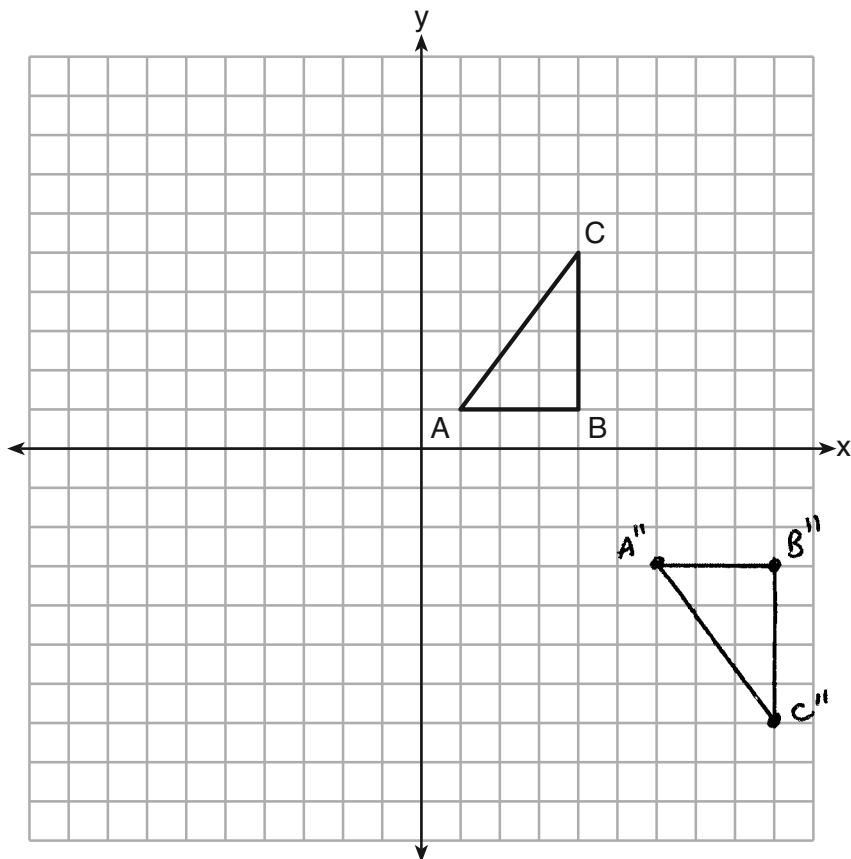
26 In the diagram below, $\triangle ABC$ has coordinates $A(1,1)$, $B(4,1)$, and $C(4,5)$. Graph and label $\triangle A''B''C''$, the image of $\triangle ABC$ after the translation five units to the right and two units up followed by the reflection over the line $y = 0$.



Score 2: The student had a complete and correct response.

Question 26

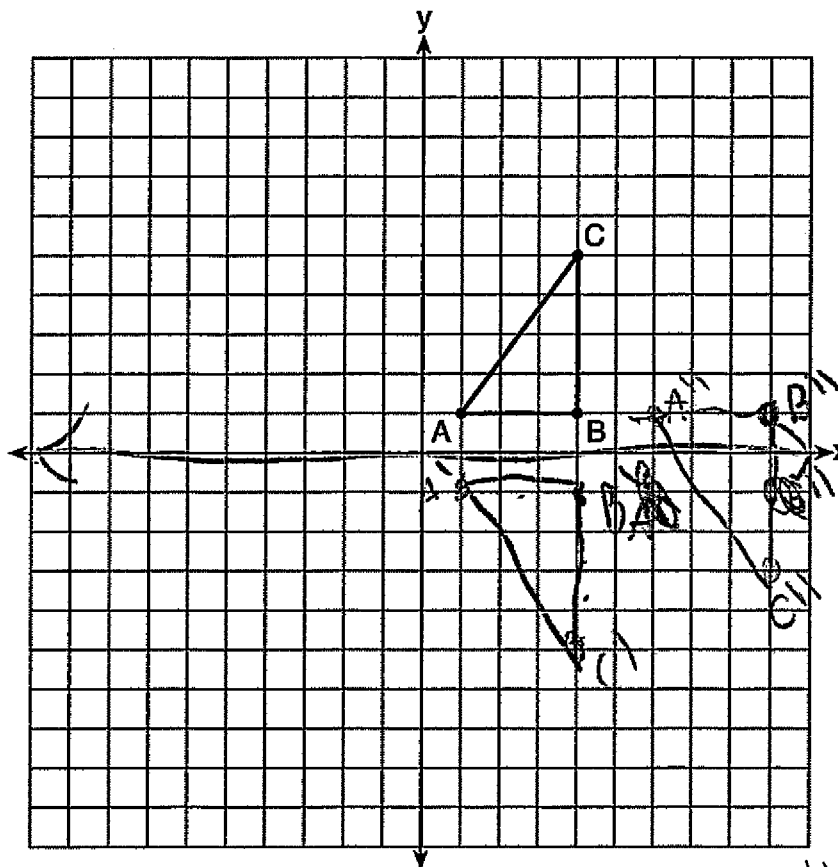
26 In the diagram below, $\triangle ABC$ has coordinates $A(1,1)$, $B(4,1)$, and $C(4,5)$. Graph and label $\triangle A''B''C''$, the image of $\triangle ABC$ after the translation five units to the right and two units up followed by the reflection over the line $y = 0$.



Score 2: The student had a complete and correct response.

Question 26

26 In the diagram below, $\triangle ABC$ has coordinates $A(1,1)$, $B(4,1)$, and $C(4,5)$. Graph and label $\triangle A''B''C''$, the image of $\triangle ABC$ after the translation five units to the right and two units up followed by the reflection over the line $y = 0$.

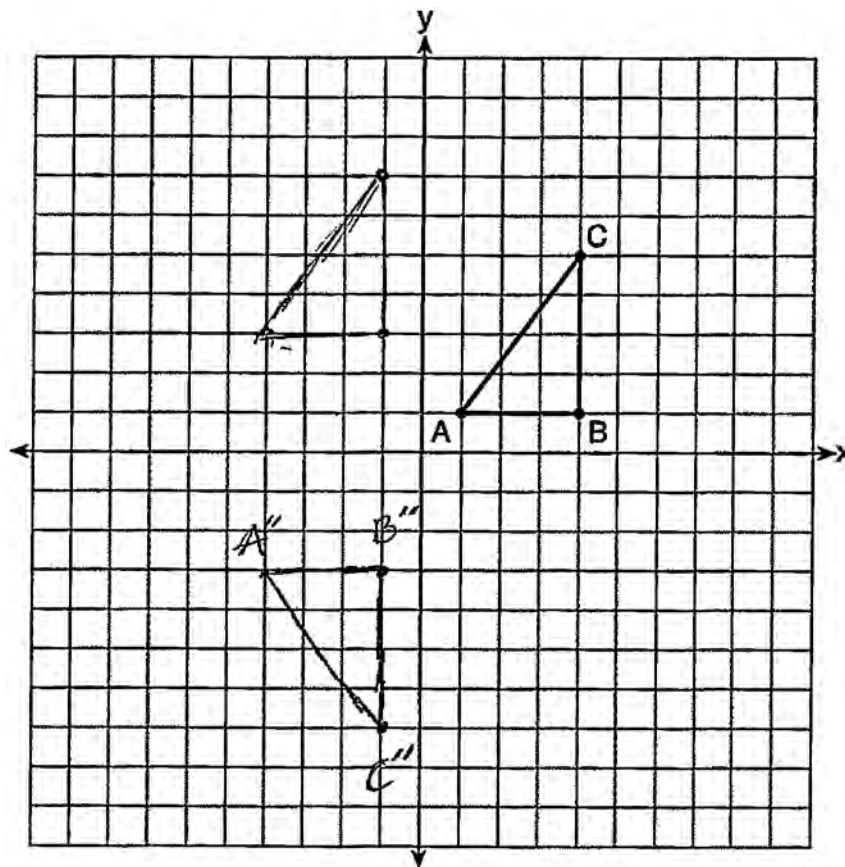


$A''(6,1)$
 $B''(9,1)$
 $C''(9,-3)$

Score 1: The student made an error by graphing the reflection and then the translation.

Question 26

26 In the diagram below, $\triangle ABC$ has coordinates $A(1,1)$, $B(4,1)$, and $C(4,5)$. Graph and label $\triangle A''B''C''$, the image of $\triangle ABC$ after the translation five units to the right and two units up followed by the reflection over the line $y = 0$.

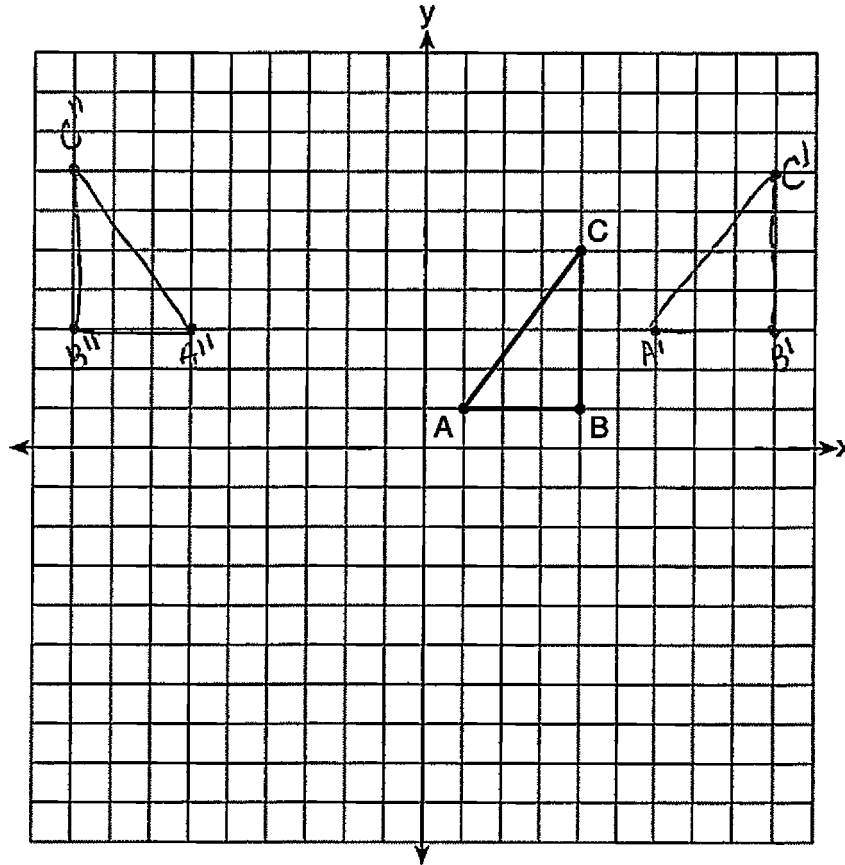


Score 1: The student made an error by translating five units to the left.

Question 26

26 In the diagram below, $\triangle ABC$ has coordinates $A(1,1)$, $B(4,1)$, and $C(4,5)$. Graph and label $\triangle A''B''C''$, the image of $\triangle ABC$ after the translation five units to the right and two units up followed by the reflection over the line $y = 0$.

$x+5$ $y+2$

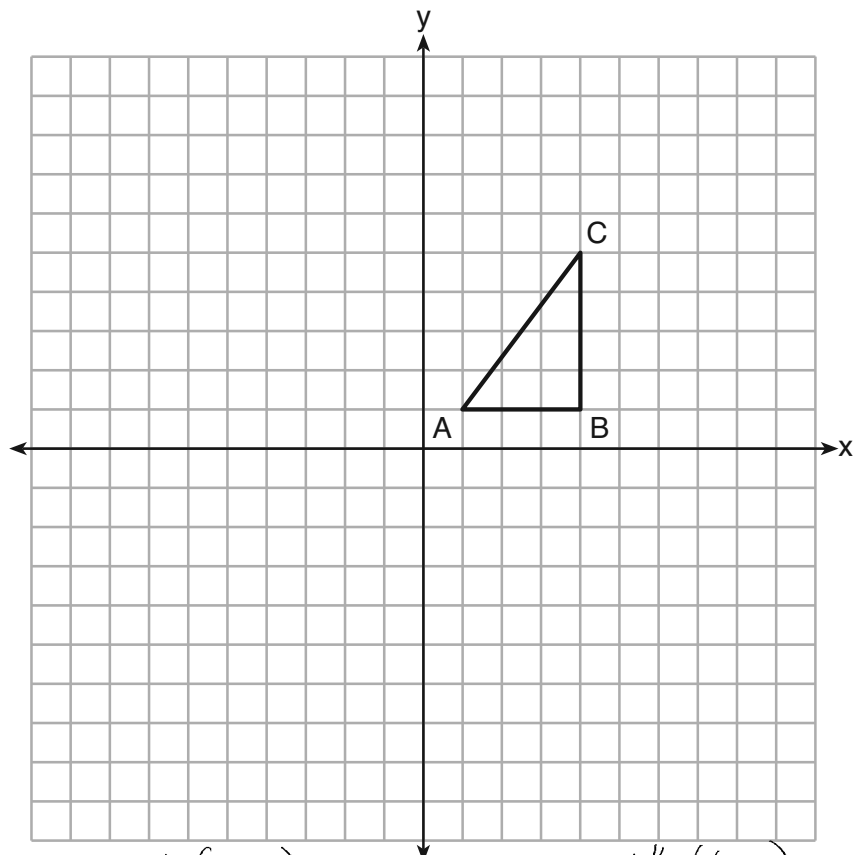


$A(1,1) \rightarrow A'(6,3) \rightarrow A''(-6,3)$
 $B(4,1) \rightarrow B'(9,3) \rightarrow B''(-9,3)$
 $C(4,5) \rightarrow C'(9,7) \rightarrow C''(-9,7)$

Score 1: The student made an error by reflecting over the y -axis.

Question 26

26 In the diagram below, $\triangle ABC$ has coordinates $A(1,1)$, $B(4,1)$, and $C(4,5)$. Graph and label $\triangle A''B''C''$, the image of $\triangle ABC$ after the translation five units to the right and two units up followed by the reflection over the line $y = 0$.

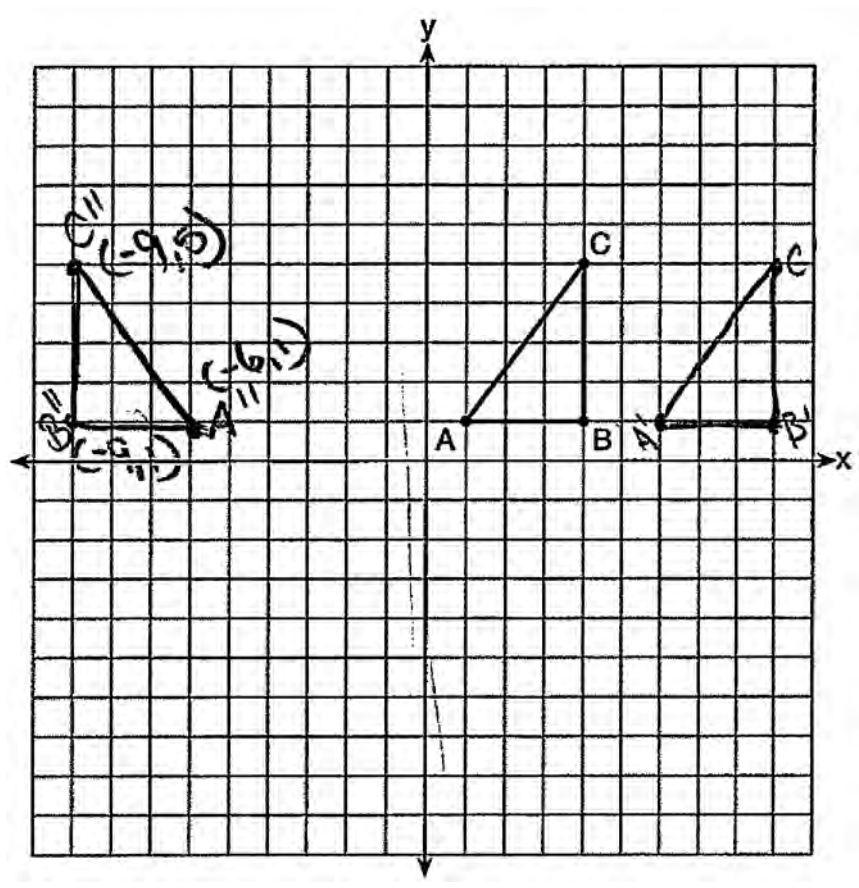


$$\begin{aligned} A(1,1) &\longrightarrow (6,3) \longrightarrow A''(6,-3) \\ B(4,1) &\longrightarrow (9,3) \longrightarrow B''(9,-3) \\ C(4,5) &\longrightarrow (9,7) \longrightarrow C''(9,-7) \end{aligned}$$

Score 1: The student performed the sequence of transformations algebraically.

Question 26

26 In the diagram below, $\triangle ABC$ has coordinates $A(1,1)$, $B(4,1)$, and $C(4,5)$. Graph and label $\triangle A''B''C''$, the image of $\triangle ABC$ after the translation five units to the right and two units up



Score 0: The student graphed the sequence of transformations incorrectly.

Question 27

27 A regular hexagon is rotated in a counterclockwise direction about its center. Determine and state the minimum number of degrees in the rotation such that the hexagon will coincide with itself.



$$\frac{180(n-2)}{n} = \frac{180(6-2)}{6}$$

$$\frac{720}{6} = 120$$

$$\frac{180}{-120}$$

60°

Score 2: The student had a complete and correct response.

Question 27

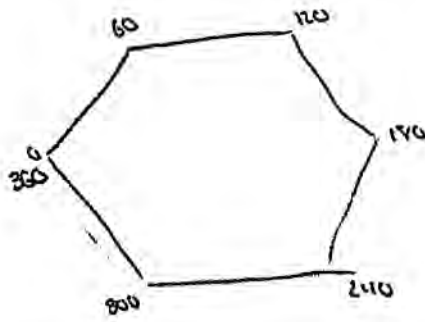
27 A regular hexagon is rotated in a counterclockwise direction about its center. Determine and state the minimum number of degrees in the rotation such that the hexagon will coincide with itself.

$$\frac{360}{6} = 60^\circ$$

Score 2: The student had a complete and correct response.

Question 27

27 A regular hexagon is rotated in a counterclockwise direction about its center. Determine and state the minimum number of degrees in the rotation such that the hexagon will coincide with itself.

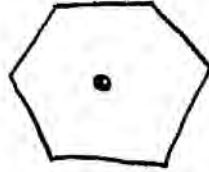


60°

Score 2: The student had a complete and correct response.

Question 27

27 A regular hexagon is rotated in a counterclockwise direction about its center. Determine and state the minimum number of degrees in the rotation such that the hexagon will coincide with itself.



$$180(n-2)$$

$$180(6-2)$$

$$180(4)$$

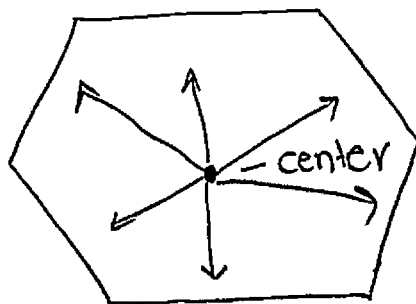
$$720$$

$$\frac{720}{6} = 120^\circ$$

Score 1: The student found the measure of one interior angle of the hexagon.

Question 27

27 A regular hexagon is rotated in a counterclockwise direction about its center. Determine and state the minimum number of degrees in the rotation such that the hexagon will coincide with itself.



$$n + 6 = 180$$

$$n + 6 = 180$$

$$6 + 6 = 180$$

$$12 = 180$$

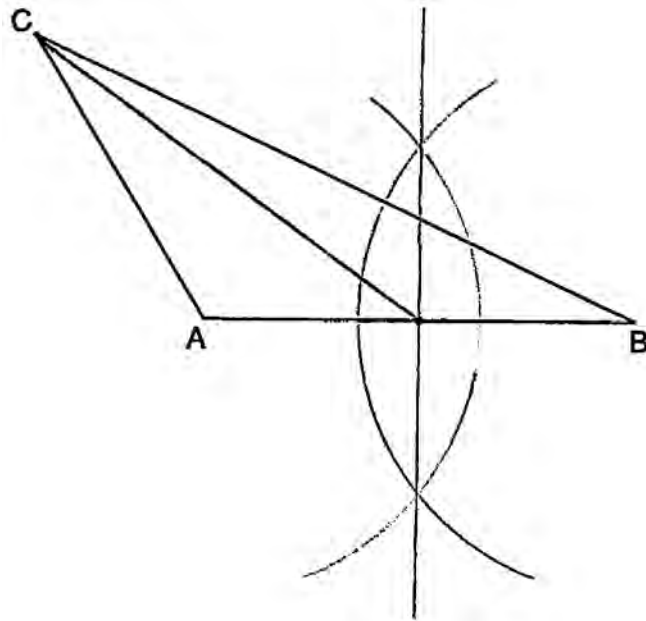
$$x = 15$$

Minimum number of degrees
in a rotation is 15°

Score 0: The student had a completely incorrect response.

Question 28

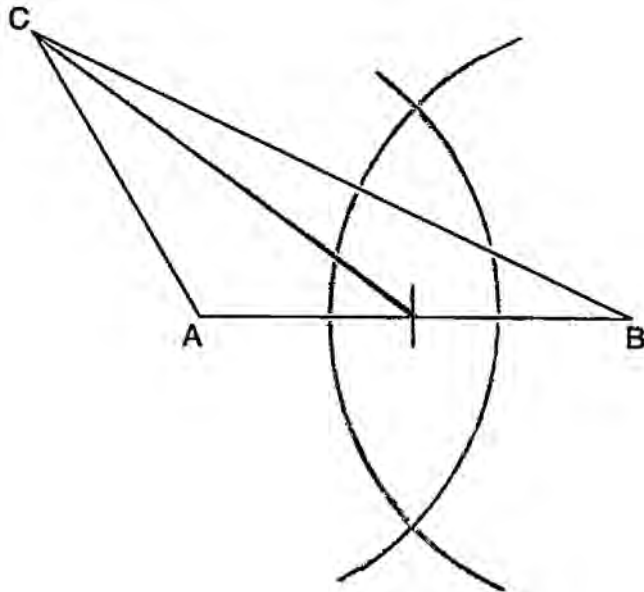
28 In the diagram of $\triangle ABC$ shown below, use a compass and straightedge to construct the median to \overline{AB} . [Leave all construction marks.]



Score 2: The student had a complete and correct response.

Question 28

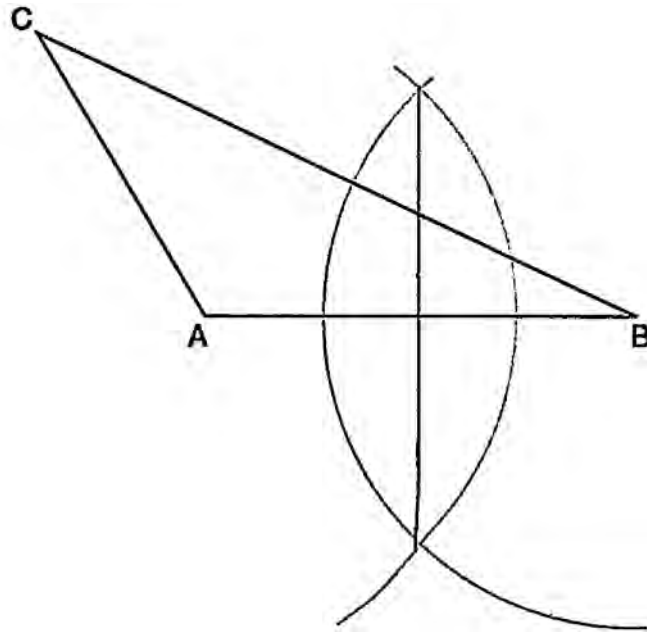
28 In the diagram of $\triangle ABC$ shown below, use a compass and straightedge to construct the median to \overline{AB} . [Leave all construction marks.]



Score 2: The student had a complete and correct response.

Question 28

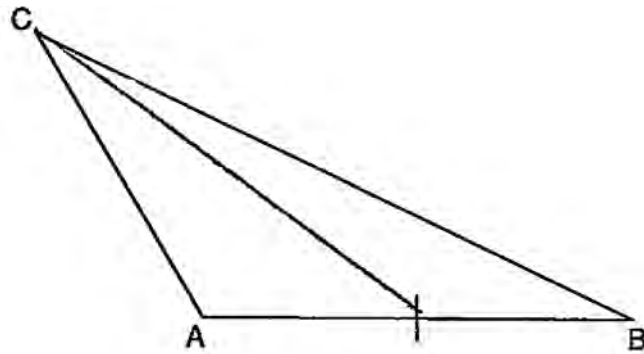
28 In the diagram of $\triangle ABC$ shown below, use a compass and straightedge to construct the median to \overline{AB} . [Leave all construction marks.]



Score 1: The student had a correct construction of a perpendicular bisector, but did not draw the median.

Question 28

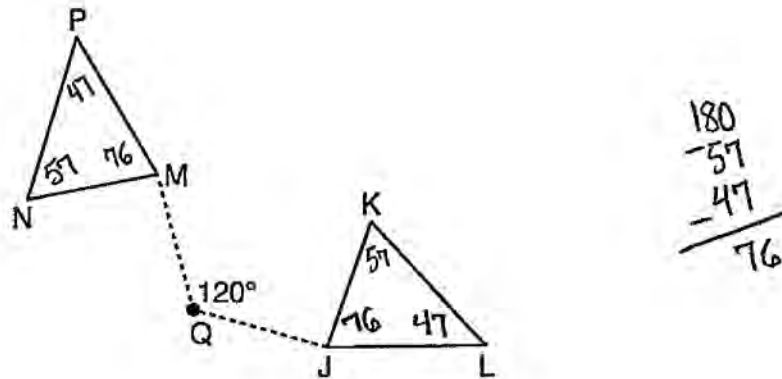
28 In the diagram of $\triangle ABC$ shown below, use a compass and straightedge to construct the median to \overline{AB} . [Leave all construction marks.]



Score 0: The student made a drawing that was not a construction.

Question 29

29 Triangle MNP is the image of triangle JKL after a 120° counterclockwise rotation about point Q . If the measure of angle L is 47° and the measure of angle N is 57° , determine the measure of angle M . Explain how you arrived at your answer.

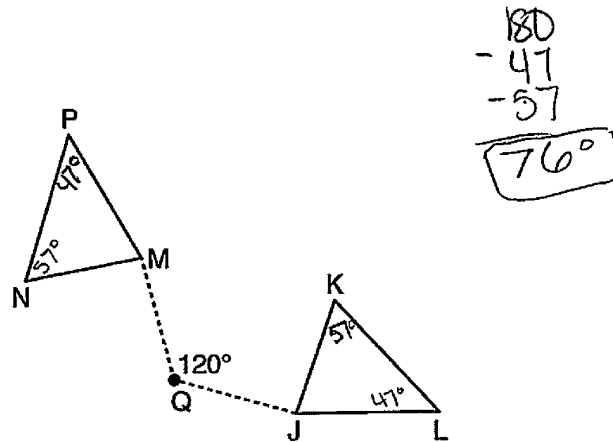


$m\angle M$ is 76° , because angle K is angle N after the rotation, and angle L becomes P and angle J becomes M . Rotation is a rigid motion, so their measures will be the same. On $\triangle MNP$ $m\angle P = 47^\circ$ and $m\angle N = 57^\circ$. A triangle is 180° so $180^\circ - 57^\circ - 47^\circ = 76^\circ$, the measure of $\angle M$.

Score 2: The student had a complete and correct response.

Question 29

- 29 Triangle MNP is the image of triangle JKL after a 120° counterclockwise rotation about point Q . If the measure of angle L is 47° and the measure of angle N is 57° , determine the measure of angle M . Explain how you arrived at your answer.



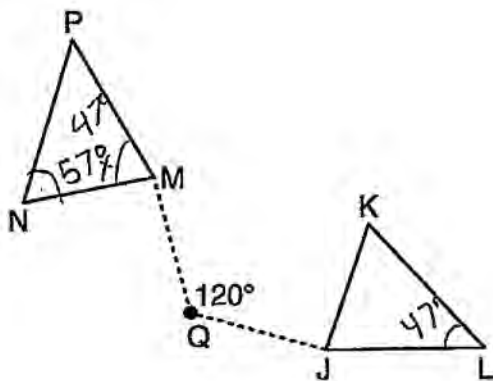
$$\begin{array}{r} 180 \\ - 47 \\ - 57 \\ \hline 76^\circ \end{array}$$

A rotation is an isometry, so the triangles must be congruent and have corresp. congruent angles. So that means $\angle P \cong \angle L$ and $\angle P = 47^\circ$ by substitution. Then 47° and 57° can be subtracted from 180° to find $\angle M = 76^\circ$

Score 2: The student had a complete and correct response.

Question 29

- 29 Triangle MNP is the image of triangle JKL after a 120° counterclockwise rotation about point Q . If the measure of angle L is 47° and the measure of angle N is 57° , determine the measure of angle M . Explain how you arrived at your answer.

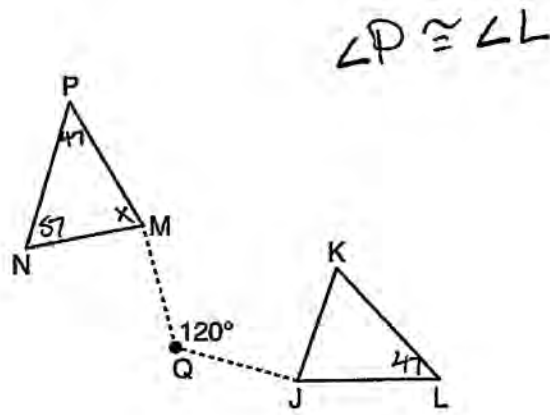


angle $M = 47^\circ$ because rotating the triangle doesn't change angle measurements.

Score 1: The student wrote a correct explanation, but the angle measure was incorrect.

Question 29

29 Triangle MNP is the image of triangle JKL after a 120° counterclockwise rotation about point Q . If the measure of angle L is 47° and the measure of angle N is 57° , determine the measure of angle M . Explain how you arrived at your answer.



$$\begin{array}{r} 47 \\ + 57 \\ \hline 104 \end{array}$$

$$\begin{array}{r} 180 \\ - 104 \\ \hline 76 \end{array}$$

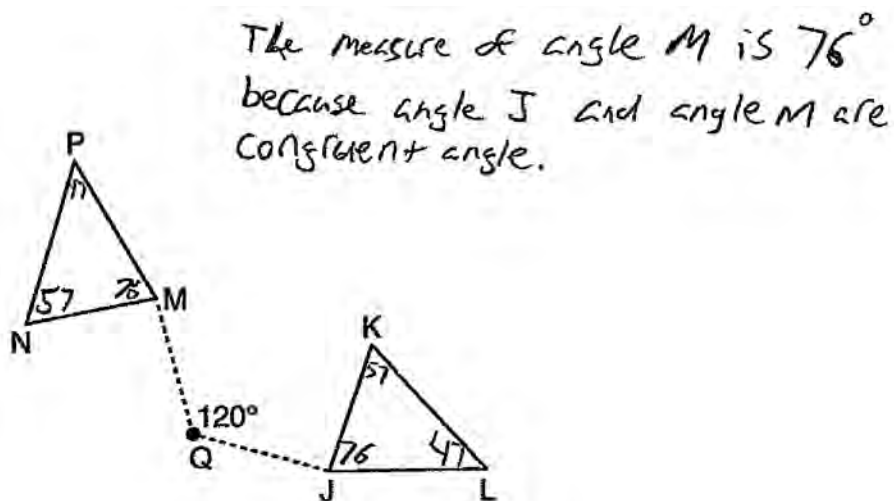
$$\boxed{m = 76^\circ}$$

180° in a \triangle

Score 1: The student did not write an explanation.

Question 29

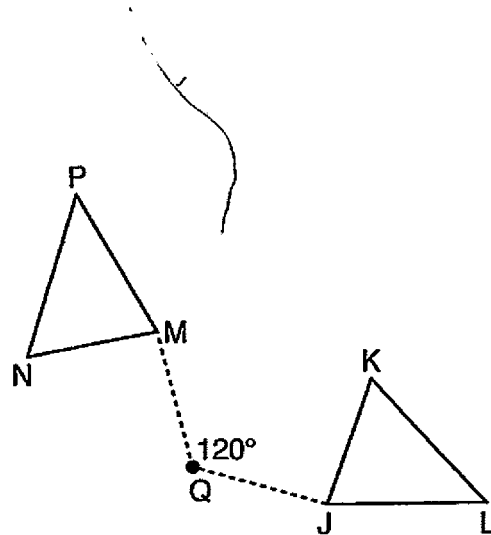
- 29 Triangle MNP is the image of triangle JKL after a 120° counterclockwise rotation about point Q . If the measure of angle L is 47° and the measure of angle N is 57° , determine the measure of angle M . Explain how you arrived at your answer.



Score 1: The student had an incomplete explanation.

Question 29

29 Triangle MNP is the image of triangle JKL after a 120° counterclockwise rotation about point Q . If the measure of angle L is 47° and the measure of angle N is 57° , determine the measure of angle M . Explain how you arrived at your answer.



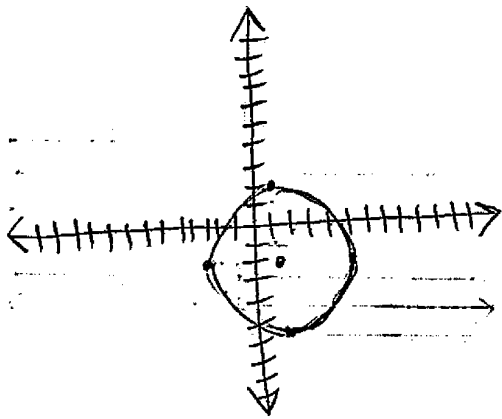
$$120 + 47 + 57 = 224$$

$$224 - 180 = 44^\circ$$

Score 0: The student had a completely incorrect response.

Question 30

30 A circle has a center at $(1, -2)$ and radius of 4. Does the point $(3.4, 1.2)$ lie on the circle? Justify your answer.



$$(x-1)^2 + (y+2)^2 = 4^2$$

$$(3.4-1)^2 + (1.2+2)^2 = 16$$

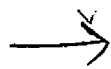
↓

$$5.76 + 10.24 = 16$$

$$16 = 16$$

✓

Yes



The point $(3.4, 1.2)$ lie on the circle. By using the equation of the circle, $(x-1)^2 + (y+2)^2 = 4^2$, you plug in the x and the y . First you get $(3.4-1)^2 + (1.2+2)^2 = 16$. When you solve + simplify everything, you get $16 = 16$.

Score 2: The student had a complete and correct response.

Question 30

30 A circle has a center at $(1, -2)$ and radius of 4. Does the point $(3.4, 1.2)$ lie on the circle? Justify your answer.

Yes.

$$r = \sqrt{0.4^2 + (1.2+2)^2}$$

$$r = \sqrt{0.16 + 0.24}$$

$$r = \sqrt{0.4} = 0.2$$

Score 2: The student had a complete and correct response.

Question 30

30 A circle has a center at $(1, -2)$ and radius of 4. Does the point $(3.4, 1.2)$ lie on the circle? Justify your answer.

$$(x+1)^2 + (y-2)^2 = 16$$

$$(3.4+1)^2 + (1.2-2)^2 = 16$$

$$19.36 + 0.64 \stackrel{?}{=} 16$$

$$20 \neq 16$$


no

Score 1: The student made a substitution error, but wrote an appropriate conclusion.

Question 30

30 A circle has a center at $(1, -2)$ and radius of 4. Does the point $(3.4, 1.2)$ lie on the circle? Justify your answer.

No it does not.



Score 0: The student had a completely incorrect response.

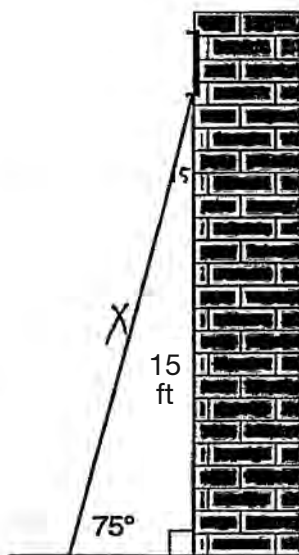
Question 31

- 31 In the diagram below, a window of a house is 15 feet above the ground. A ladder is placed against the house with its base at an angle of 75° with the ground. Determine and state the length of the ladder to the *nearest tenth of a foot*.

$$\frac{\text{Sine}(75)}{1} = \frac{15}{X}$$

$$X = \frac{15}{\text{Sine}(75)}$$

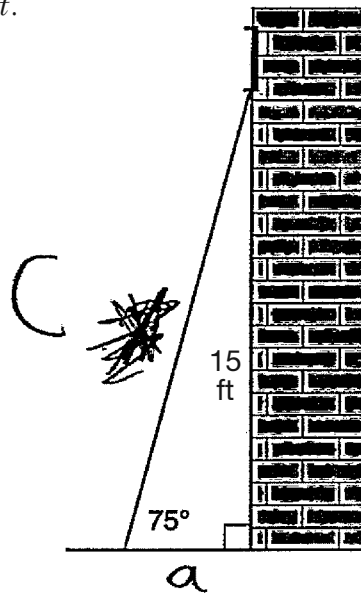
$$X = 15.5$$



Score 2: The student had a complete and correct response.

Question 31

- 31 In the diagram below, a window of a house is 15 feet above the ground. A ladder is placed against the house with its base at an angle of 75° with the ground. Determine and state the length of the ladder to the nearest tenth of a foot.



$$a \cdot \tan(75) = \frac{15}{a} \cdot a$$

$$a = 15$$

$$a^2 + b^2 = c^2$$
$$\sqrt{\left(\frac{15}{\tan(75)}\right)^2 + 2 \cdot 15} = \sqrt{c^2}$$
$$15.5 = c$$

Score 2: The student had a complete and correct response.

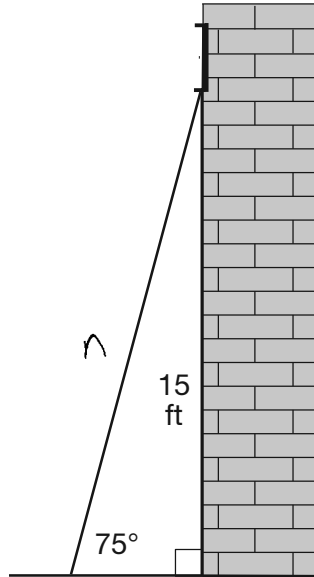
Question 31

- 31 In the diagram below, a window of a house is 15 feet above the ground. A ladder is placed against the house with its base at an angle of 75° with the ground. Determine and state the length of the ladder to the *nearest tenth of a foot*.

$$\sin(75) = \frac{15}{n}$$

$$n = 15 \cdot \sin(75)$$

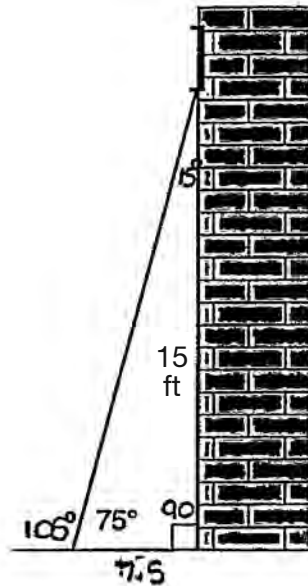
$$n = 14.5$$



Score 1: The student had a correct equation, but solved it incorrectly.

Question 31

31 In the diagram below, a window of a house is 15 feet above the ground. A ladder is placed against the house with its base at an angle of 75° with the ground. Determine and state the length of the ladder to the *nearest tenth of a foot*.



$$\begin{aligned} 90 + 75 &= 165 \\ 180 - 165 &= 15 \\ 15 / 2 &= 7.5 \end{aligned}$$

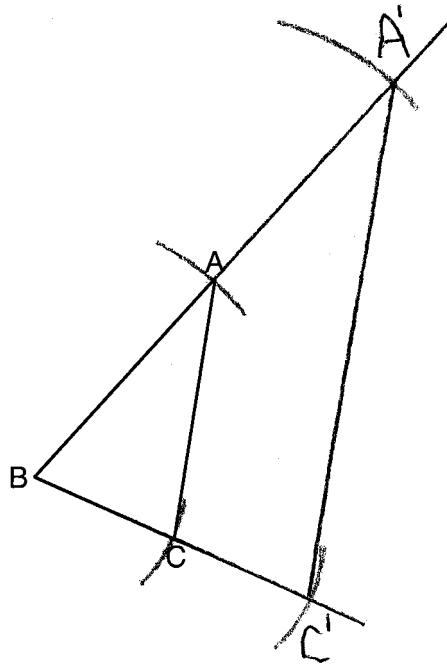
$$\begin{aligned} a^2 + b^2 &= c^2 \\ (7.5)^2 + (15)^2 &= c^2 \\ 56.25 + 225 &= c^2 \\ 281.25 &= c^2 \\ \sqrt{281.25} &= \sqrt{c^2} \\ 16.77050983 &= c \end{aligned}$$

Length of Ladder = 16.8 Ft.

Score 0: The student did not show enough relevant correct work to receive any credit.

Question 32

32 Using a compass and straightedge, construct and label $\triangle A'B'C'$, the image of $\triangle ABC$ after a dilation with a scale factor of 2 and centered at B . [Leave all construction marks.]



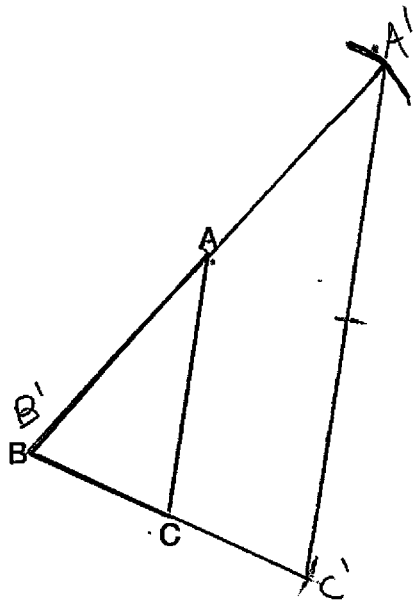
Describe the relationship between the lengths of \overline{AC} and $\overline{A'C'}$.

the length of $\overline{A'C'}$ is twice the length of \overline{AC}

Score 4: The student had a complete and correct response.

Question 32

32 Using a compass and straightedge, construct and label $\triangle A'B'C'$, the image of $\triangle ABC$ after a dilation with a scale factor of 2 and centered at B . [Leave all construction marks.]



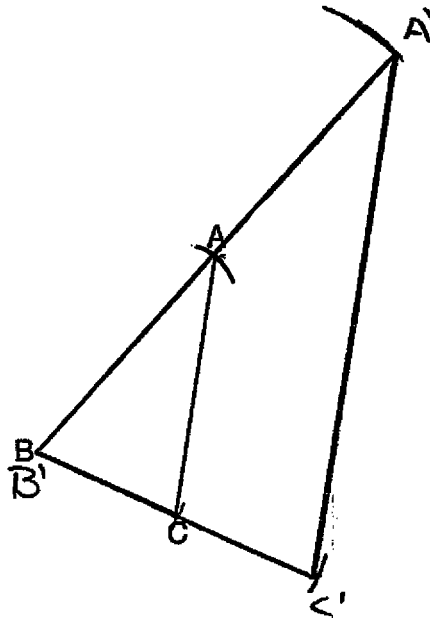
Describe the relationship between the lengths of \overline{AC} and $\overline{A'C'}$.

The ratio of the lengths of $\overline{A'C'}$ to \overline{AC} is 2:1

Score 4: The student had a complete and correct response.

Question 32

32 Using a compass and straightedge, construct and label $\triangle A'B'C'$, the image of $\triangle ABC$ after a dilation with a scale factor of 2 and centered at B . [Leave all construction marks.]



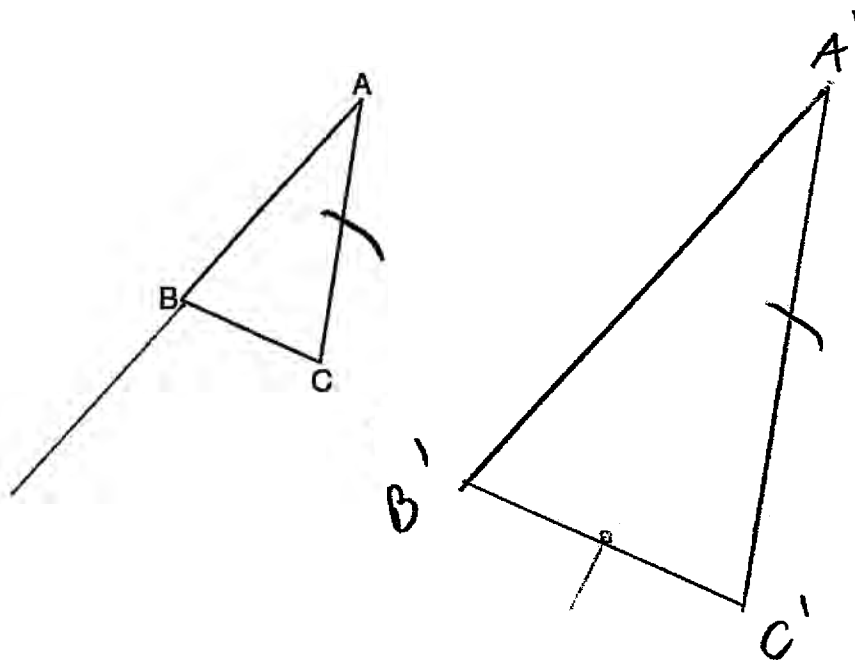
Describe the relationship between the lengths of \overline{AC} and $\overline{A'C'}$.

\overline{AC} and $\overline{A'C'}$ are both parallel to each other.

Score 3: The student had a correct construction, but the description was of a correct relationship other than length.

Question 32

32 Using a compass and straightedge, construct and label $\triangle A'B'C'$, the image of $\triangle ABC$ after a dilation with a scale factor of 2 and centered at B . [Leave all construction marks.]



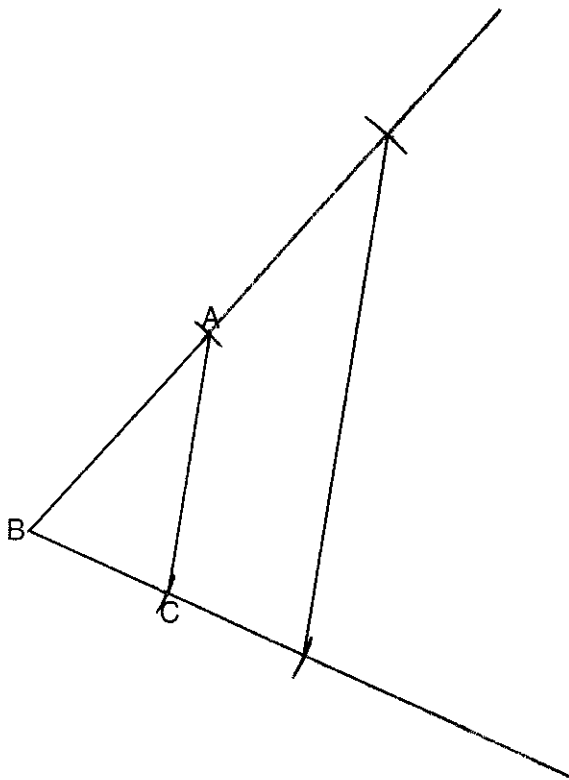
Describe the relationship between the lengths of \overline{AC} and $\overline{A'C'}$.

\overline{AC} is half $\overline{A'C'}$

Score 2: The student had a correct description, but no further correct work was shown.

Question 32

32 Using a compass and straightedge, construct and label $\triangle A'B'C'$, the image of $\triangle ABC$ after a dilation with a scale factor of 2 and centered at B . [Leave all construction marks.]



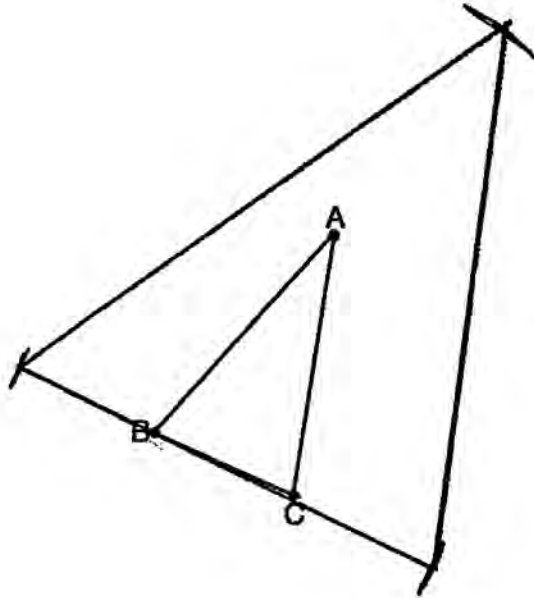
Describe the relationship between the lengths of \overline{AC} and $\overline{A'C'}$.

They are in a ratio of 2:1

Score 2: The student did not label A' and C' on the construction. The description was incomplete.

Question 32

32 Using a compass and straightedge, construct and label $\triangle A'B'C'$, the image of $\triangle ABC$ after a dilation with a scale factor of 2 and centered at B . [Leave all construction marks.]



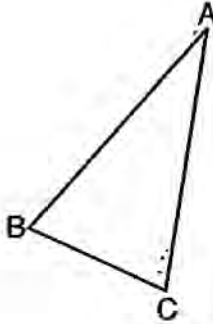
Describe the relationship between the lengths of \overline{AC} and $\overline{A'C'}$.

it is doubled

Score 1: The student made an incorrect construction. The description was incomplete.

Question 32

32 Using a compass and straightedge, construct and label $\triangle A'B'C'$, the image of $\triangle ABC$ after a dilation with a scale factor of 2 and centered at B . [Leave all construction marks.]



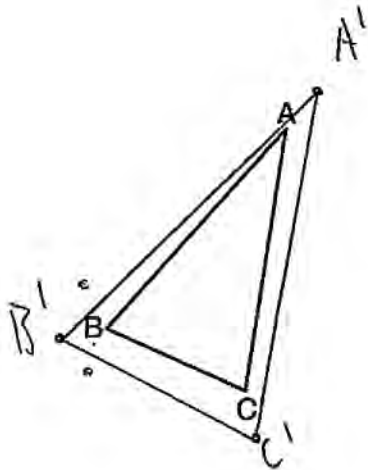
Describe the relationship between the lengths of \overline{AC} and $\overline{A'C'}$.

is 2x bigger.

Score 1: The student wrote an incomplete description and the construction was missing.

Question 32

32 Using a compass and straightedge, construct and label $\triangle A'B'C'$, the image of $\triangle ABC$ after a dilation with a scale factor of 2 and centered at B . [Leave all construction marks.]



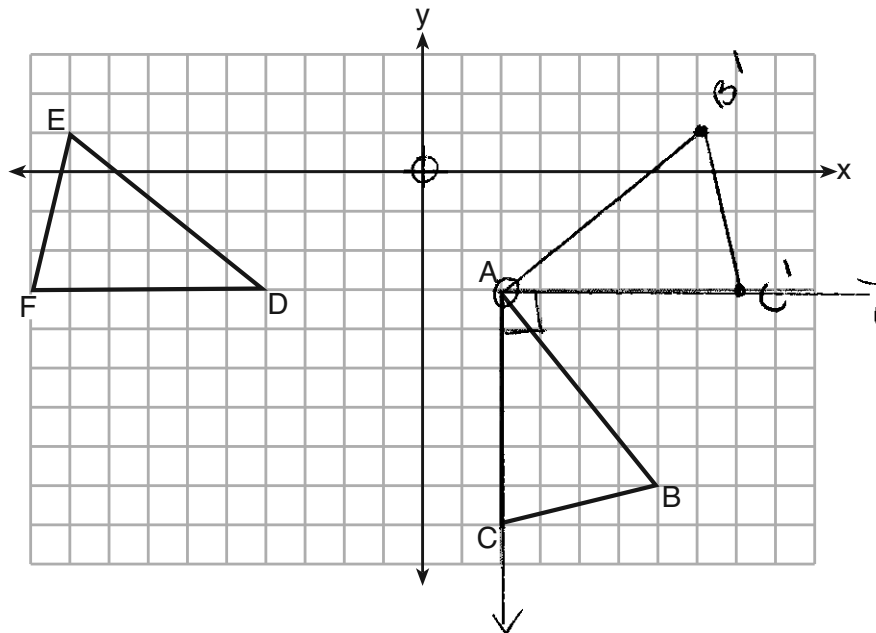
Describe the relationship between the lengths of \overline{AC} and $\overline{A'C'}$.

$\overline{A'C'}$ is a dilated line segment of \overline{AC}

Score 0: The construction and description were completely incorrect.

Question 33

33 The grid below shows $\triangle ABC$ and $\triangle DEF$.



$m = -\frac{5}{4}$
 $\perp m = \frac{4}{5}$

Let $\triangle A'B'C'$ be the image of $\triangle ABC$ after a rotation about point A. Determine and state the location of B' if the location of point C' is $(8, -3)$. Explain your answer.

$B'(7, 1)$ The angle of Rotation that took C to C' was 90° counter-clockwise, so take B to B' by finding the point using the same rotation about point A.

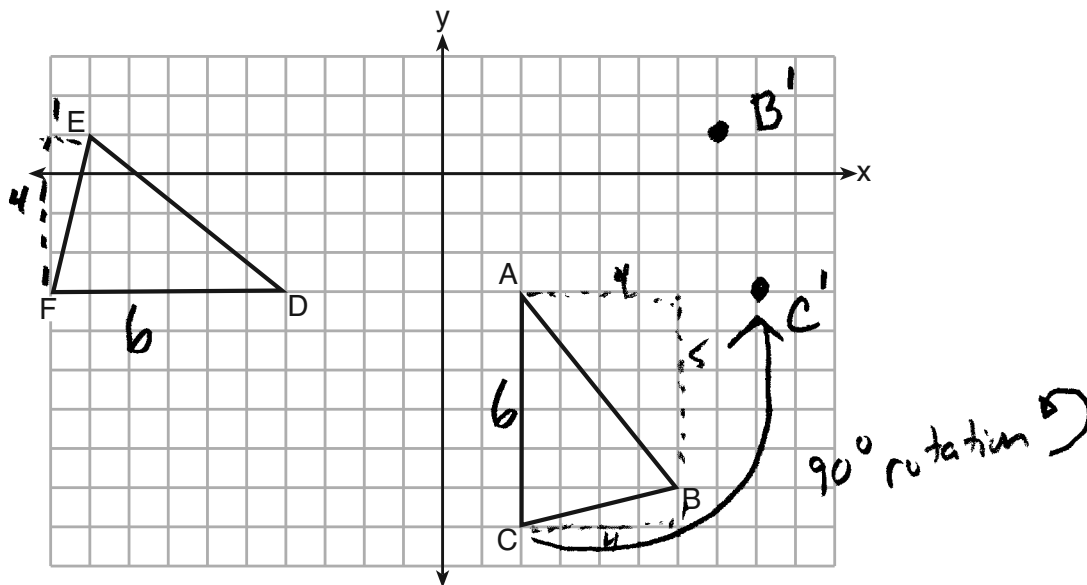
Is $\triangle DEF$ congruent to $\triangle A'B'C'$? Explain your answer.

Yes, when $\triangle A'B'C'$ is reflected over the line $x = -1$, it will map to $\triangle DEF$. Since a reflection is a rigid motion that preserves distance, $\triangle DEF \cong \triangle A'B'C'$

Score 4: The student had a complete and correct response.

Question 33

33 The grid below shows $\triangle ABC$ and $\triangle DEF$.



Let $\triangle A'B'C'$ be the image of $\triangle ABC$ after a rotation about point A. Determine and state the location of B' if the location of point C' is (8, -3). Explain your answer.

Rotate B counterclockwise 90° about A(2, -3)
 $B(6, -8) \xrightarrow{\text{Subtract } (2, -3)} (4, -5) \xrightarrow{\text{Rotate}} (5, 4) \xrightarrow{\text{Add } (2, -3)} B'(7, 1)$
 $B'(7, 1)$, was found by applying the rotation algorithm from a non-origin point.

Is $\triangle DEF$ congruent to $\triangle A'B'C'$? Explain your answer. YES

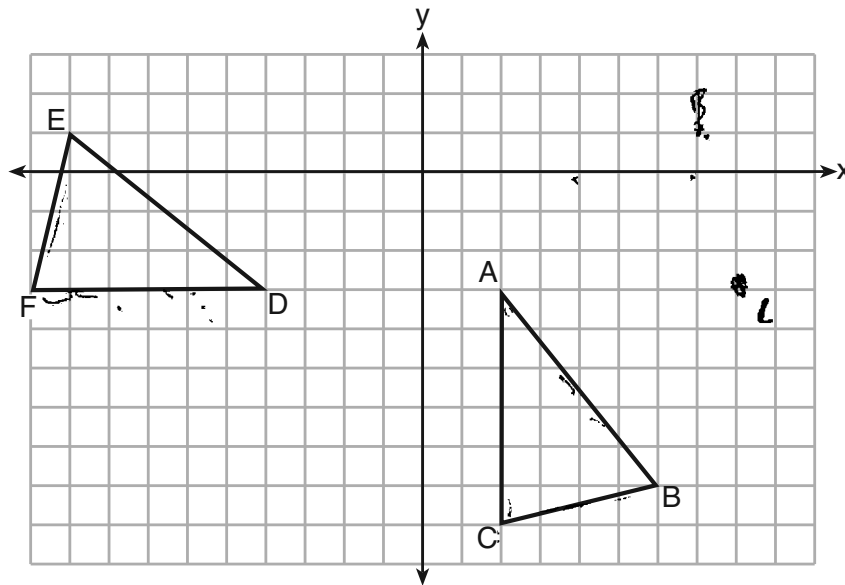
$AC = 6$ $DF = 6$ counted
 $BC = \sqrt{4^2 + 12} = \sqrt{17}$, $EF = \sqrt{4^2 + 12} = \sqrt{17}$
 $AB = \sqrt{5^2 + 4^2} = \sqrt{41}$, $DE = \sqrt{5^2 + 4^2} = \sqrt{41}$ } $\triangle ABC \cong \triangle DEF$ by SSS

Since a rotation preserves distance, $\triangle ABC \cong \triangle A'B'C'$
 So by substitution $\triangle DEF \cong \triangle A'B'C'$

Score 4: The student had a complete and correct response.

Question 33

33 The grid below shows $\triangle ABC$ and $\triangle DEF$.



Let $\triangle A'B'C'$ be the image of $\triangle ABC$ after a rotation about point A. Determine and state the location of B' if the location of point C' is $(8, -3)$. Explain your answer.

It rotates 90° counter clockwise around A so
 Point B' would be $(7, 1)$

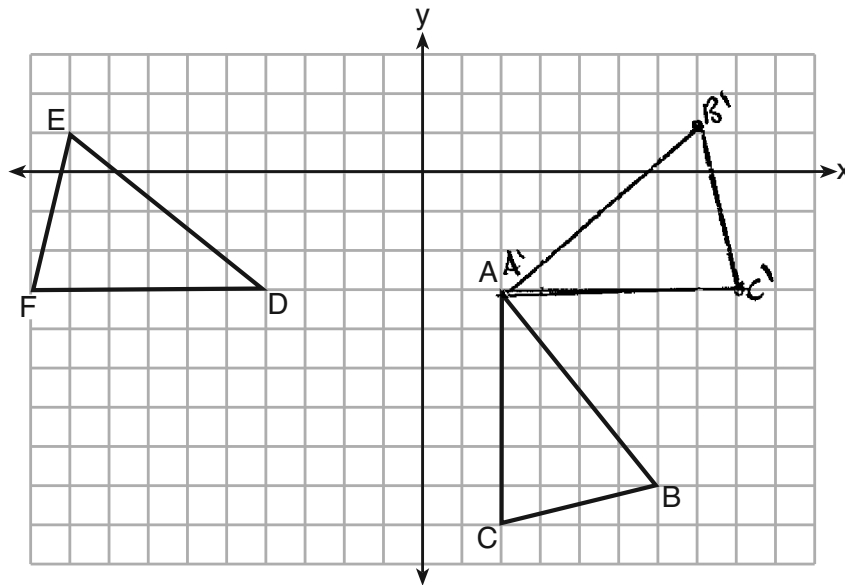
Is $\triangle DEF$ congruent to $\triangle A'B'C'$? Explain your answer.

$\triangle DEF$ and $\triangle ABC$ are congruent
 by SSS so $\triangle DEF$ is congruent to $\triangle A'B'C'$
 by SSS.

Score 3: The student wrote an incomplete explanation for why $\triangle DEF$ is congruent to $\triangle A'B'C'$.

Question 33

33 The grid below shows $\triangle ABC$ and $\triangle DEF$.



Let $\triangle A'B'C'$ be the image of $\triangle ABC$ after a rotation about point A. Determine and state the location of B' if the location of point C' is $(8, -3)$. Explain your answer.

$B'(7, 1)$ C rotated 90° so I rotated B 90°

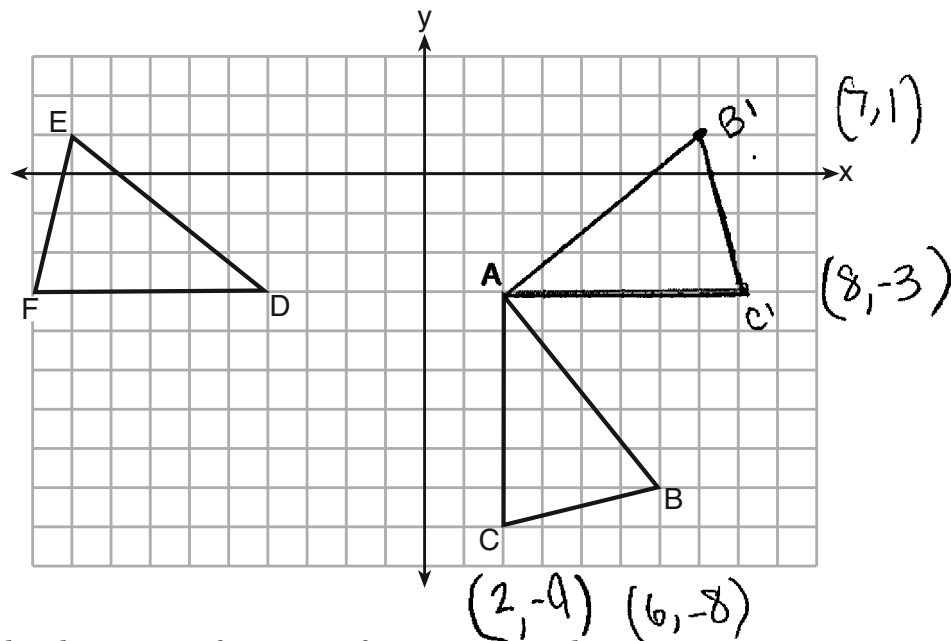
Is $\triangle DEF$ congruent to $\triangle A'B'C'$? Explain your answer.

Yes, if you reflect $\triangle A'B'C'$ over $x = -1$, it matches up perfectly, so $\triangle DEF \cong \triangle A'B'C'$

Score 3: The student wrote an incomplete explanation for why $\triangle DEF$ is congruent to $\triangle A'B'C'$.

Question 33

33 The grid below shows $\triangle ABC$ and $\triangle DEF$.



Let $\triangle A'B'C'$ be the image of $\triangle ABC$ after a rotation about point A. Determine and state the location of B' if the location of point C' is $(8, -3)$. Explain your answer.

$(7, 1)$ B' had to be the same distance away from C' , as B and C were from each other.

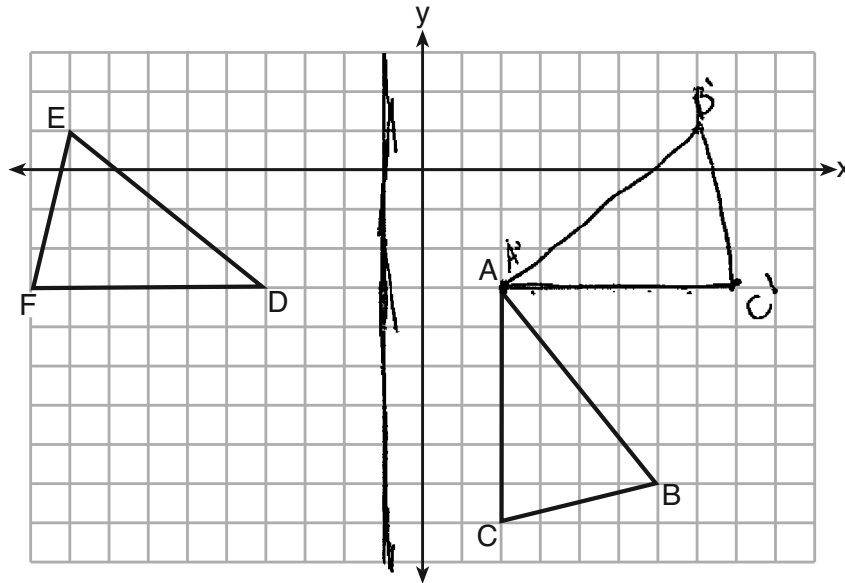
Is $\triangle DEF$ congruent to $\triangle A'B'C'$? Explain your answer.

Yes, each point is the same distance apart from one-another.

Score 2: The student wrote two incomplete explanations.

Question 33

33 The grid below shows $\triangle ABC$ and $\triangle DEF$.



Let $\triangle A'B'C'$ be the image of $\triangle ABC$ after a rotation about point A. Determine and state the location of B' if the location of point C' is $(8, -3)$. Explain your answer.

counted the slopes and plotted points based on C' 's location

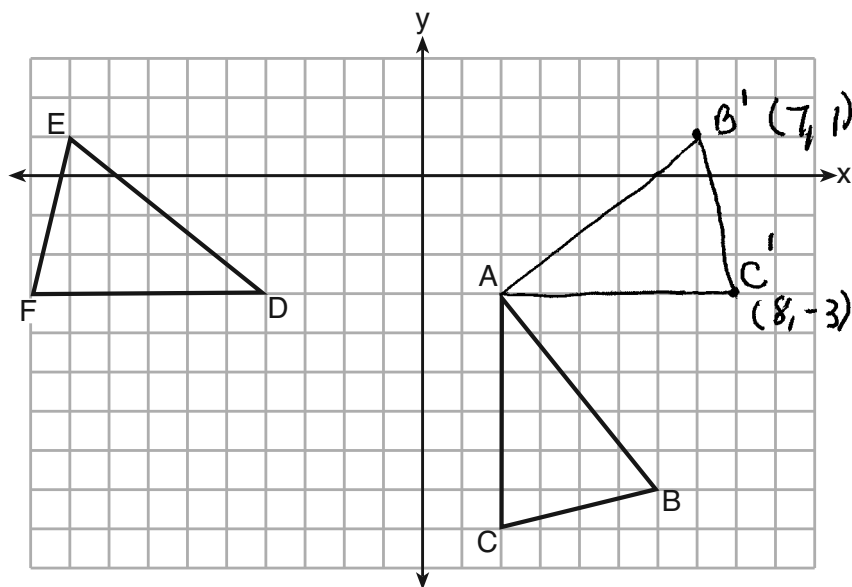
Is $\triangle DEF$ congruent to $\triangle A'B'C'$? Explain your answer.

Yes all the slopes are the same they just reflected over $x = -1$

Score 1: The student wrote yes, but the explanation was incorrect. No further correct work was shown.

Question 33

33 The grid below shows $\triangle ABC$ and $\triangle DEF$.



Let $\triangle A'B'C'$ be the image of $\triangle ABC$ after a rotation about point A. Determine and state the location of B' if the location of point C' is $(8, -3)$. Explain your answer.

Is $\triangle DEF$ congruent to $\triangle A'B'C'$? Explain your answer.

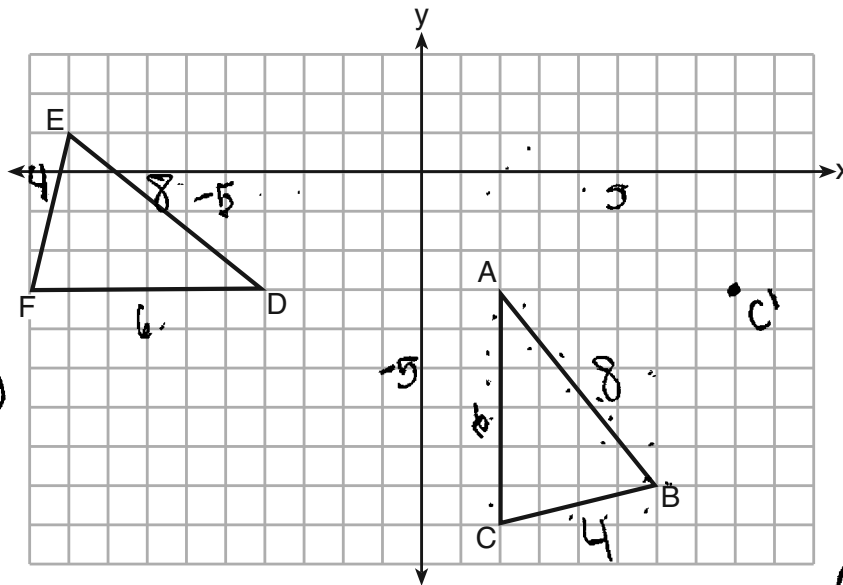
Yes

Score 1: The student showed work to find $(7,1)$, and wrote yes, but did not write any explanations.

Question 33

33 The grid below shows $\triangle ABC$ and $\triangle DEF$.

- $A = (2, -3)$
- $B = (6, -8)$
- $C = (2, -9)$
- $D = (-4, -3)$
- $E = (9, -1)$
- $F = (10, -3)$



$(2, -9)$ $(6, -8)$

Let $\triangle A'B'C'$ be the image of $\triangle ABC$ after a rotation about point A. Determine and state the location of B' if the location of point C' is $(8, -3)$. Explain your answer.

$B' = (12, -14)$ because to get C to C' you had to +6 to the x and -6 from the y.

Is $\triangle DEF$ congruent to $\triangle A'B'C'$? Explain your answer.

$$\overline{AB} = \sqrt{(6-2)^2 + (-8+3)^2} = \sqrt{16+25} = \sqrt{41}$$

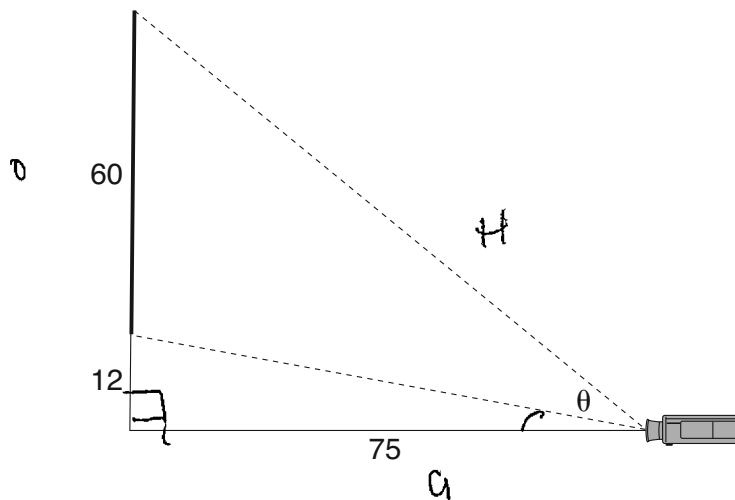
$$\overline{ED} = \sqrt{(9+4)^2 + (-1+3)^2} = \sqrt{169+4} = \sqrt{173}$$

No, because not all of the sides are equal in measure.

Score 0: The student had a completely incorrect response.

Question 34

34 As modeled below, a movie is projected onto a large outdoor screen. The bottom of the 60-foot-tall screen is 12 feet off the ground. The projector sits on the ground at a horizontal distance of 75 feet from the screen.



Determine and state, to the nearest tenth of a degree, the measure of θ , the projection angle.

SOH CAHTOA

$$\tan x = \frac{12}{75}$$

$$(\tan^{-1}) \tan x = \frac{12}{75} (\tan^{-1})$$

$$x = 9.0903$$

$$\tan y = \frac{72}{75}$$

$$(\tan^{-1}) \tan y = \frac{72}{75} (\tan^{-1})$$

$$y = 43.8308$$

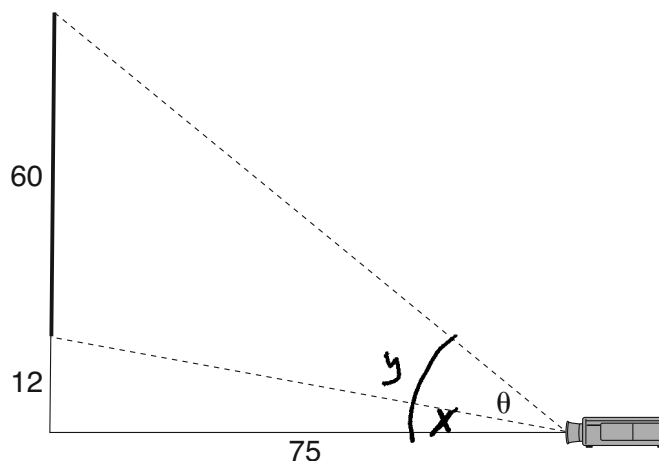
$$\begin{array}{r} 43.8308 \\ - 9.0903 \\ \hline 34.7405 \end{array}$$

The measure of θ is 34.7°

Score 4: The student had a complete and correct response.

Question 34

34 As modeled below, a movie is projected onto a large outdoor screen. The bottom of the 60-foot-tall screen is 12 feet off the ground. The projector sits on the ground at a horizontal distance of 75 feet from the screen.



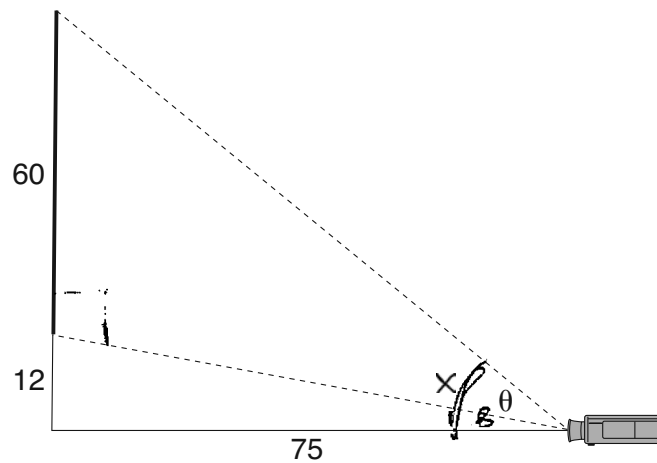
Determine and state, to the *nearest tenth of a degree*, the measure of θ , the projection angle.

$$\theta = y - x$$
$$T = \frac{O}{A}$$
$$2^{\text{ND}} \tan \frac{72}{75} \quad 2^{\text{ND}} \tan \frac{12}{75}$$
$$\theta = 43.83 - 9.09$$
$$34.74$$
$$\textcircled{34.7}$$

Score 4: The student had a complete and correct response.

Question 34

34 As modeled below, a movie is projected onto a large outdoor screen. The bottom of the 60-foot-tall screen is 12 feet off the ground. The projector sits on the ground at a horizontal distance of 75 feet from the screen.



Determine and state, to the nearest tenth of a degree, the measure of θ , the projection angle.

$$\tan B = \frac{12}{75}$$

$$\tan^{-1}\left(\frac{12}{75}\right) = 35.21759297$$

$$\frac{60}{+12} = \frac{72}{72}$$

$$\tan x = \frac{72}{75}$$

$$\tan^{-1}\left(\frac{72}{75}\right) = 43.83086067$$

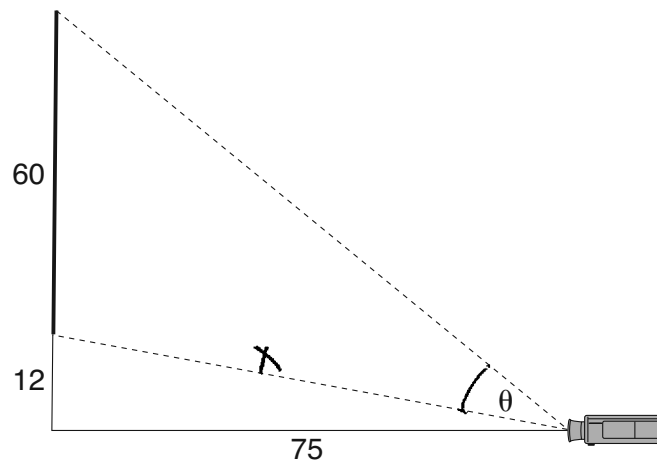
$$\begin{array}{r} 43.83086067 \\ - 35.21759297 \\ \hline 8.6132677 \end{array}$$

The measure of θ is 8.6

Score 3: The student made a transcription error.

Question 34

34 As modeled below, a movie is projected onto a large outdoor screen. The bottom of the 60-foot-tall screen is 12 feet off the ground. The projector sits on the ground at a horizontal distance of 75 feet from the screen.



Determine and state, to the *nearest tenth of a degree*, the measure of θ , the projection angle.

$$\begin{aligned} 75^2 + 12^2 &= x^2 \\ 5625 + 144 &= x^2 \\ \sqrt{5769} &= \sqrt{x^2} \\ 75.953\dots &\approx x \end{aligned}$$


$$\begin{aligned} \tan(\theta) &= \frac{60}{\sqrt{5769}} \\ \tan^{-1}(\tan(\theta)) &= \left(\frac{60}{\sqrt{5769}} \right) \tan^{-1} \end{aligned}$$

$$\begin{aligned} \theta &= 38.307\dots \\ \boxed{\theta &\approx 38.3} \end{aligned}$$

Score 2: The student made a conceptual error in using an obtuse triangle for right triangle trigonometry.

Question 34

34 As modeled below, a movie is projected onto a large outdoor screen. The bottom of the 60-foot-tall screen is 12 feet off the ground. The projector sits on the ground at a horizontal distance of 75 feet from the screen.



$$\tan x = \frac{72}{75}$$

$$43.8^\circ$$

x

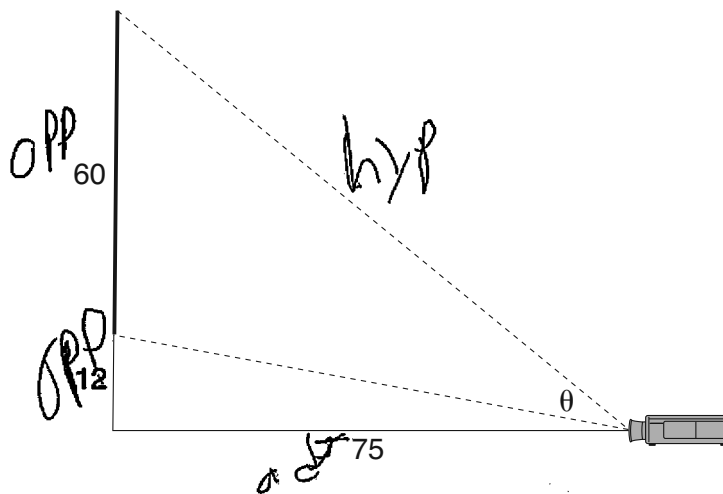
Determine and state, to the *nearest tenth of a degree*, the measure of θ , the projection angle.

$$43.8^\circ$$

Score 1: The student determined only one angle of elevation.

Question 34

34 As modeled below, a movie is projected onto a large outdoor screen. The bottom of the 60-foot-tall screen is 12 feet off the ground. The projector sits on the ground at a horizontal distance of 75 feet from the screen.



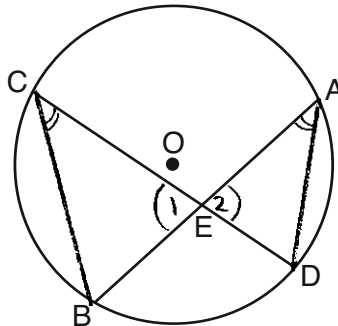
Determine and state, to the *nearest tenth of a degree*, the measure of θ , the projection angle.

$$\tan^{-1}(72/75)$$
$$43.9$$

Score 0: The student did not show enough correct work to receive any credit.

Question 35

35 Given: Circle O , chords \overline{AB} and \overline{CD} intersect at E



Theorem: If two chords intersect in a circle, the product of the lengths of the segments of one chord is equal to the product of the lengths of the segments of the other chord.

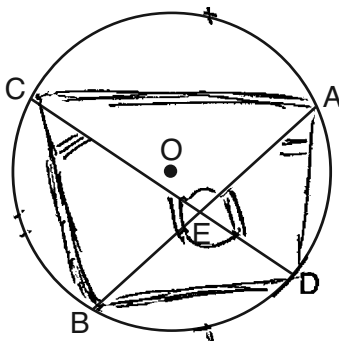
Prove this theorem by proving $AE \cdot EB = CE \cdot ED$.

Statement	Reason
① Circle O , chords \overline{AB} and \overline{CD}	① Given
② \overline{CB} and \overline{AD} are drawn	② auxiliary lines can be drawn
③ $\angle 1 \cong \angle 2$	③ Vertical \angle 's are \cong
④ $\angle C \cong \angle A$	④ Inscribed \angle 's that intercept the same arc are \cong
⑤ $\triangle BCE \sim \triangle DAE$	⑤ AA
⑥ $\frac{AE}{CE} = \frac{ED}{EB}$	⑥ Corresponding sides of similar Δ 's are proportional
⑦ $AE \cdot EB = CE \cdot ED$	⑦ In a proportion, the product of the means equals the product of the extremes

Score 6: The student had a complete and correct response.

Question 35

35 Given: Circle O , chords \overline{AB} and \overline{CD} intersect at E



Theorem: If two chords intersect in a circle, the product of the lengths of the segments of one chord is equal to the product of the lengths of the segments of the other chord.

Prove this theorem by proving $AE \cdot EB = CE \cdot ED$.

Statements	Reasons
1. Circle O , chords \overline{AB} and \overline{CD} intersect at E	1. Given
2. $\angle CEA \cong \angle BED$ $\angle AED \cong \angle CEB$	2. vertical \angle 's \cong
3. $\angle BCE \cong \angle DAB$	3. inscribed \angle 's that intercept the same arc \cong
4. $\triangle ECB \sim \triangle EAD$	4. AA Sim Thm.
5. $\frac{AE}{CE} = \frac{ED}{EB}$	5. Corres. sides of $\sim \Delta$'s are in prop.

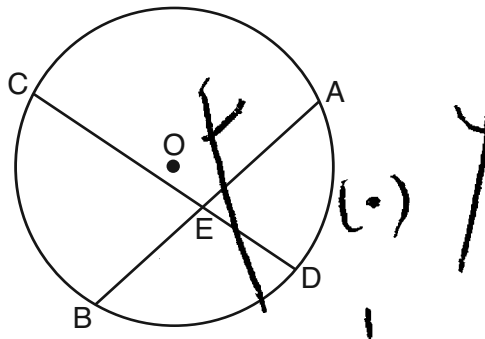
6. $AE \cdot EB = CE \cdot ED$

In a proportion, the product of the means is equal to the product of the extremes

Score 5: The student did not include drawing chords \overline{AC} , \overline{CB} , \overline{BD} , and \overline{AD} in the proof.

Question 35

35 Given: Circle O , chords \overline{AB} and \overline{CD} intersect at E



Theorem: If two chords intersect in a circle, the product of the lengths of the segments of one chord is equal to the product of the lengths of the segments of the other chord.

Prove this theorem by proving $AE \cdot EB = CE \cdot ED$.

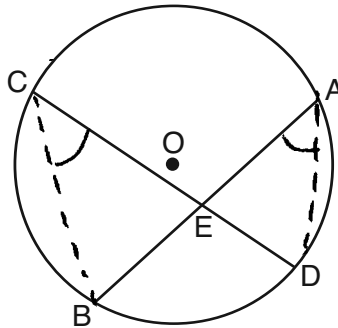
S	R
① Circle O , chords \overline{AB} and \overline{CD} intersect at E	① given
② $\angle CEB$ and $\angle AED$ are vertical angles	② intersecting lines form vertical angles
③ $\angle CEB \cong \angle AED$	③ vertical angles are congruent
④ $\angle C \cong \angle A$	④ inscribed angles of the same arc are congruent
⑤ $\triangle CBE \sim \triangle ADE$	⑤ two angles in the triangles are congruent
⑥ $\frac{EB}{ED} = \frac{CE}{AE}$	⑥ In two similar triangles, corresponding sides are in proportion
⑦ $AE \cdot EB = CE \cdot ED$	⑦ In a proportion, product of means equals product of extremes

$\triangle CBE \sim \triangle AED$

Score 4: The student omitted one statement and reason, and another reason was incomplete.

Question 35

35 Given: Circle O , chords \overline{AB} and \overline{CD} intersect at E



Theorem: If two chords intersect in a circle, the product of the lengths of the segments of one chord is equal to the product of the lengths of the segments of the other chord.

Prove this theorem by proving $AE \cdot EB = CE \cdot ED$.

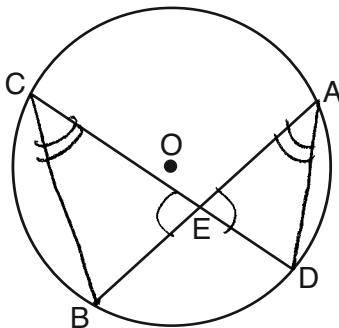
- 1) \overline{AB} and \overline{CD} are chords in Circle O , chords intersect at E
- 2) Draw auxiliary lines \overline{BC} and \overline{AD}
- 3) $\angle C \cong \angle A$
 $\angle B \cong \angle D$
- 4) $\triangle BCE \cong \triangle DAE$
- 5) $AE \cdot EB = CE \cdot ED$

- 1) Given
- 2) Between 2 pts there exists a line segment.
- 3) Angles inscribed in the same arc are \cong
- 4) AA \sim Thm
- 5) CPCTC

Score 3: The student had three missing or incomplete statements.

Question 35

35 Given: Circle O , chords \overline{AB} and \overline{CD} intersect at E



Theorem: If two chords intersect in a circle, the product of the lengths of the segments of one chord is equal to the product of the lengths of the segments of the other chord.

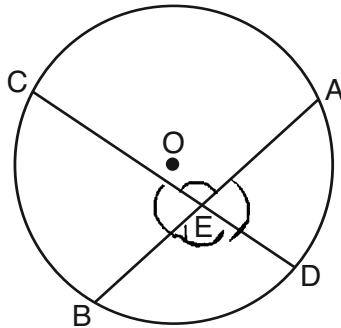
Prove this theorem by proving $AE \cdot EB = CE \cdot ED$.

Given circle O and chords \overline{AB} and \overline{CD} intersect at E . Since vertical angles are congruent, $\angle CEB \cong \angle AED$. $\angle C$ and $\angle A$ are inscribed in \widehat{BD} , so $\angle C \cong \angle A$. So $\triangle CEB \cong \triangle AED$. By the means extremes property, $AE \cdot EB = CE \cdot ED$.

Score 2: The student gave two correct relevant statements and reasons.

Question 35

35 Given: Circle O , chords \overline{AB} and \overline{CD} intersect at E



Theorem: If two chords intersect in a circle, the product of the lengths of the segments of one chord is equal to the product of the lengths of the segments of the other chord.

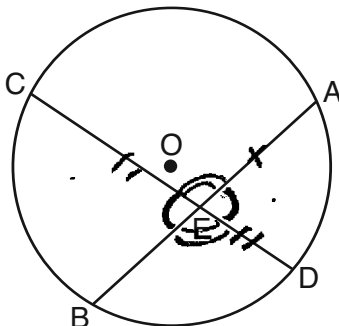
Prove this theorem by proving $AE \cdot EB = CE \cdot ED$.

Statements	Reason
chords \overline{AB} and \overline{CD} intersect at E	Given
$\angle CEA \cong \angle BED$	Vertical angles are congruent
$\angle CEB \cong \angle AED$	Vertical angles are congruent
$AE \cdot EB = CE \cdot ED$	If two chords intersect in a circle the product of the lengths of the segments of one chord is equal to the product of the lengths of the segments of the other chord.

Score 1: The student correctly stated the vertical angles were congruent.

Question 35

35 Given: Circle O , chords \overline{AB} and \overline{CD} intersect at E



Theorem: If two chords intersect in a circle, the product of the lengths of the segments of one chord is equal to the product of the lengths of the segments of the other chord.

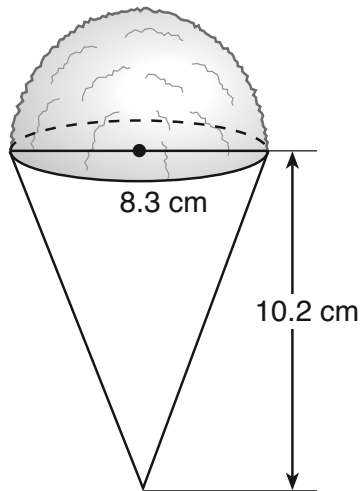
Prove this theorem by proving $AE \cdot EB = CE \cdot ED$.

<u>Statement</u>	<u>Reason</u>
1. \overline{AB} and \overline{CD} intersect at E	1. Given
2. $\angle CEB \cong \angle AED$	3. Opposite exterior angles are congruent
3. $\angle CEA \cong \angle BED$	3. "
4. \overline{CD} bisect \overline{AB}	4. $\overline{AB} ; \overline{CD}$ intersect at E

Score 0: The student had a completely incorrect response.

Question 36

36 A snow cone consists of a paper cone completely filled with shaved ice and topped with a hemisphere of shaved ice, as shown in the diagram below. The inside diameter of both the cone and the hemisphere is 8.3 centimeters. The height of the cone is 10.2 centimeters.

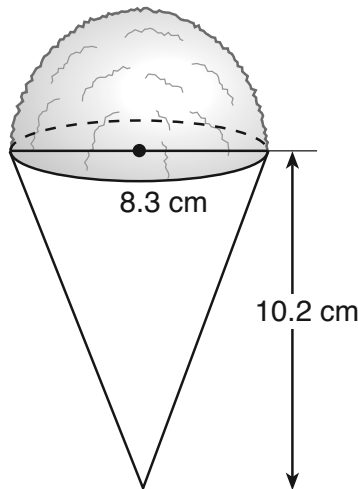


The desired density of the shaved ice is 0.697 g/cm^3 , and the cost, per kilogram, of ice is \$3.83. Determine and state the cost of the ice needed to make 50 snow cones.

Score 6: The student had a complete and correct response.

Question 36

36 A snow cone consists of a paper cone completely filled with shaved ice and topped with a hemisphere of shaved ice, as shown in the diagram below. The inside diameter of both the cone and the hemisphere is 8.3 centimeters. The height of the cone is 10.2 centimeters.



The desired density of the shaved ice is 0.697 g/cm^3 , and the cost, per kilogram, of ice is \$3.83. Determine and state the cost of the ice needed to make 50 snow cones.

$$\begin{aligned}
 V_{\text{cone}} &= \frac{1}{3} \pi r^2 h \\
 &= \frac{1}{3} \pi (4.15)^2 (10.2) \\
 &= 58.5565 \pi
 \end{aligned}$$

$$\begin{aligned}
 V_{\text{sphere}} &= \frac{4}{3} \pi r^3 \\
 &= \frac{4}{3} \pi (4.15)^3 \\
 &= 95.29783333 \pi
 \end{aligned}$$

$$V = 153.8543333 \pi = \boxed{483.3476433 \text{ cm}^3}$$



$$m = (483.3476433)(0.697) = 336.8933074 \text{ g for 1 snow cone}$$

$$\begin{aligned}
 m &= 16.84466537 \\
 &\times 3.83
 \end{aligned}$$

$$\times 50$$

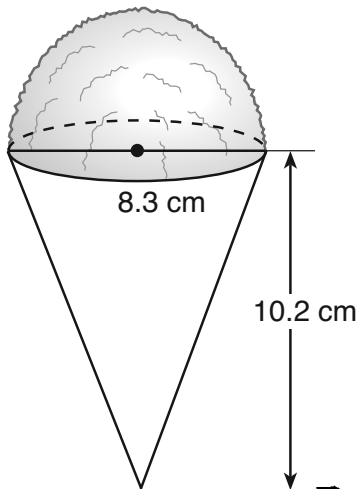
$$\text{Cost} = \$64.52$$

$$16844666537 \text{ g}$$

Score 5: The student found the volume of a sphere and not a hemisphere.

Question 36

36 A snow cone consists of a paper cone completely filled with shaved ice and topped with a hemisphere of shaved ice, as shown in the diagram below. The inside diameter of both the cone and the hemisphere is 8.3 centimeters. The height of the cone is 10.2 centimeters.



$$V \text{ of cone} = \frac{1}{3} \pi r^2 h$$

$$V = \frac{1}{3} \pi 4.15^2 \cdot 10.2$$

$$V = \frac{1}{3} \pi 17.2225 \cdot 10.2$$

$$V = 183.96$$

or

$$V \text{ of sphere} = \frac{4}{3} \pi r^3$$

$$V = \frac{4}{3} \pi 711473375$$

$$V = 149.69$$

total volume = 333 cm³

The desired density of the shaved ice is 0.697 g/cm³, and the cost, per kilogram, of ice is \$3.83. Determine and state the cost of the ice needed to make 50 snow cones.

$$232.5889 \text{ grams per cone}$$

$$\times 50$$

$$\frac{11629.445 \text{ grams}}{1000} = 11.63$$

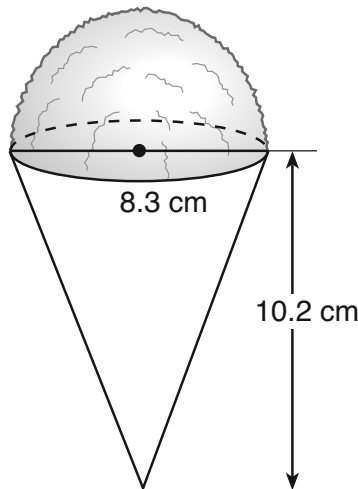
Kilogram = 1000 grams

\$44.54

Score 5: The student used an incorrectly rounded total volume of one snow cone when computing the mass.

Question 36

36 A snow cone consists of a paper cone completely filled with shaved ice and topped with a hemisphere of shaved ice, as shown in the diagram below. The inside diameter of both the cone and the hemisphere is 8.3 centimeters. The height of the cone is 10.2 centimeters.



$$8.3 = d \quad 8.3/2 = 4.15 = r$$

The desired density of the shaved ice is 0.697 g/cm^3 , and the cost, per kilogram, of ice is \$3.83. Determine and state the cost of the ice needed to make 50 snow cones.

$$V_{\text{CONE}} = \frac{1}{3} \pi r^2 h$$

$$\underbrace{\$3.83}_{\Rightarrow 1,000 \text{ g}}$$

$$V_{\text{CONE}} = \frac{1}{3} \pi * 4.15^2 * 10.2$$

$$0.00383 \rightarrow 1 \text{ g}$$

$$V_{\text{CONE}} = \frac{1}{3} * \pi * 17.2225 * 10.2$$

$$V_{\text{CONE}} = 183.961 \text{ cm}^3$$

$$183.961 * 0.697 = 128.221 \text{ g/cm}^3 \rightarrow 1 \text{ snow cone}$$

$$128.221 * 50 = 6411.05$$

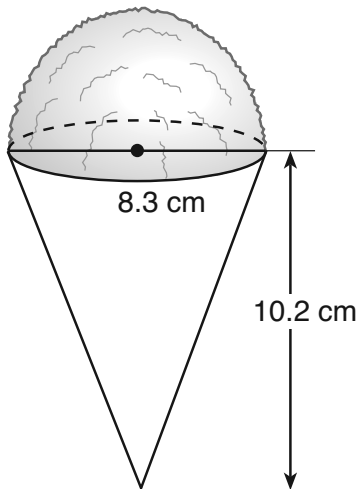
$$6411.05 * 0.00383 = 24.55$$

$$\boxed{\$24.55}$$

Score 4: The student determined the cost of the cone without the hemisphere.

Question 36

36 A snow cone consists of a paper cone completely filled with shaved ice and topped with a hemisphere of shaved ice, as shown in the diagram below. The inside diameter of both the cone and the hemisphere is 8.3 centimeters. The height of the cone is 10.2 centimeters.



The desired density of the shaved ice is 0.697 g/cm³, and the cost, per kilogram, of ice is \$3.83. Determine and state the cost of the ice needed to make 50 snow cones.

$$Vol = \frac{1}{2} \cdot \frac{4}{3} \cdot \pi \cdot 4.15^3 = 149.693$$

$$Vol = \frac{1}{3} \cdot \pi \cdot 4.15^2 \cdot 10.2 = 183.961$$

$$\text{Total volume} = 333.654$$

$$50 \text{ snow cones: } vol = 16682.7 \text{ cm}^3$$

$$kg : \frac{16682.7}{697} = 23.935 \text{ kg}$$

$$\text{cost} : 23.935 \times 3.83 = 91.67105$$

Score 3: The student found the volume of fifty snow cones, but no further correct work was shown.

Question 36

36 A snow cone consists of a paper cone completely filled with shaved ice and topped with a hemisphere of shaved ice, as shown in the diagram below. The inside diameter of both the cone and the hemisphere is 8.3 centimeters. The height of the cone is 10.2 centimeters.

Handwritten calculations for the volume of the cone and hemisphere:

Cone:
 $V = \frac{1}{3} \pi r^2 h$
 $\frac{1}{3} \pi \cdot 4.15 \cdot 10.2 =$
~~44.3287254~~
194

hemisphere:
 $r = 4.15$
 $V = \frac{2}{3} \pi r^3$
 $\frac{2}{3} \pi \cdot 4.15^3$
 $\frac{2}{3} \pi \cdot 71.473375$
149.6934866

The desired density of the shaved ice is 0.697 g/cm^3 , and the cost, per kilogram, of ice is \$3.83. Determine and state the cost of the ice needed to make 50 snow cones.

Handwritten calculations for the cost of the ice:

$0.697 \cdot 194 = 135.218$

$\times \quad 50$
 $\hline 6760.9$

$\frac{6760.9}{191.5} = 35.30$

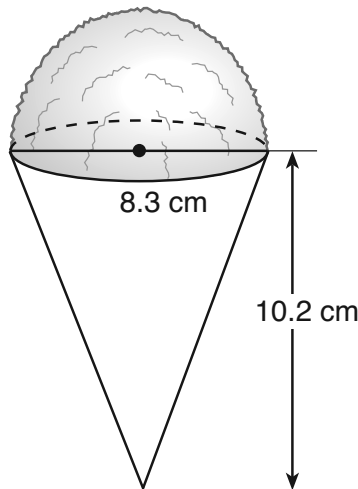
$\frac{3.83}{\times 50}$
 $\hline 191.5$

$\$35.30$

Score 2: The student made an error in determining the volume of the cone, but found an appropriate mass of fifty snow cones. No further correct work was shown.

Question 36

36 A snow cone consists of a paper cone completely filled with shaved ice and topped with a hemisphere of shaved ice, as shown in the diagram below. The inside diameter of both the cone and the hemisphere is 8.3 centimeters. The height of the cone is 10.2 centimeters.



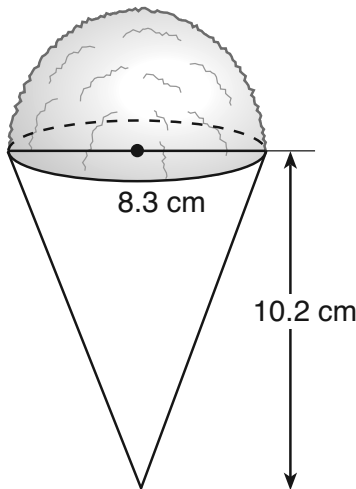
The desired density of the shaved ice is 0.697 g/cm^3 , and the cost, per kilogram, of ice is \$3.83. Determine and state the cost of the ice needed to make 50 snow cones.

$$\begin{aligned} D &= \frac{m}{V} & 0.697 \text{ g/cm}^3 & & V &= \frac{1}{3} \pi r^2 h \\ & & \underline{50(3.83)} & & V &= \frac{1}{3} \pi (4.15)^2 10.2 \\ & & 191.5 & & V &= 183.9606702 \text{ cm}^3 \\ & & & & & 50(183.9606702) \\ & & & & & \boxed{\$ 9198.03 \text{ for 50 snow cones}} \end{aligned}$$

Score 1: The student determined the volume of the cone.

Question 36

- 36 A snow cone consists of a paper cone completely filled with shaved ice and topped with a hemisphere of shaved ice, as shown in the diagram below. The inside diameter of both the cone and the hemisphere is 8.3 centimeters. The height of the cone is 10.2 centimeters.



The desired density of the shaved ice is 0.697 g/cm^3 , and the cost, per kilogram, of ice is \$3.83. Determine and state the cost of the ice needed to make 50 snow cones.

$$\begin{aligned} V &= \frac{1}{3} \pi r^2 h \\ V &= \frac{1}{3} \pi \cdot 4.15^2 \cdot 10.2 \\ V &= \frac{1}{3} \pi \cdot 17.22 \cdot 10.2 \\ V &= \frac{1}{3} \pi \cdot 175.644 \\ V &= 58.548 \end{aligned}$$

Score 0: The student did not show enough work to receive any credit.

The University of the State of New York
THE STATE EDUCATION DEPARTMENT
Office of State Assessment
Albany, New York 12234

IMPORTANT NOTICE

Notice to Teachers

Regents Examination in Geometry (Common Core)

Wednesday, August 17, 2016, 8:30 a.m.

Question 19

This notice applies to students who are taking the August 17, 2016 Regents Examination in Geometry (Common Core).

If possible, please make the following announcement to all students taking this examination before the examination begins:

“Due to a typographical error, Question 19 does not have a correct answer choice. Please note this in your test booklet. Please darken the answer circle for choice 1 for Question 19 on your answer sheet. All students will receive credit for Question 19.”

When scoring this examination, all students should be awarded credit for Question 19.

Please photocopy this notice and provide a copy of it to each teacher administering and each teacher scoring the Regents Examination in Geometry (Common Core).

We apologize for any inconvenience this may cause, and we thank you for your hard work on behalf of the students in New York State.

****Please note that the typographical error has been corrected on the posted version of the Examination and the Scoring Key has been updated to reflect the correct answer.****

Regents Examination in Geometry (Common Core) – August 2016

Chart for Converting Total Test Raw Scores to Final Exam Scores (Scale Scores)

(Use for the August 2016 exam only.)

Raw Score	Scale Score	Performance Level	Raw Score	Scale Score	Performance Level	Raw Score	Scale Score	Performance Level
86	100	5	57	79	3	28	59	2
85	99	5	56	78	3	27	58	2
84	97	5	55	78	3	26	57	2
83	96	5	54	77	3	25	55	2
82	95	5	53	77	3	24	54	1
81	94	5	52	77	3	23	53	1
80	93	5	51	76	3	22	51	1
79	92	5	50	76	3	21	49	1
78	91	5	49	75	3	20	48	1
77	91	5	48	75	3	19	46	1
76	90	5	47	74	3	18	44	1
75	89	5	46	74	3	17	43	1
74	88	5	45	73	3	16	41	1
73	87	5	44	72	3	15	39	1
72	87	5	43	72	3	14	37	1
71	86	5	42	71	3	13	35	1
70	86	5	41	71	3	12	32	1
69	85	5	40	70	3	11	30	1
68	84	4	39	69	3	10	28	1
67	84	4	38	69	3	9	25	1
66	83	4	37	68	3	8	23	1
65	83	4	36	67	3	7	20	1
64	82	4	35	66	3	6	18	1
63	82	4	34	65	3	5	15	1
62	81	4	33	64	2	4	12	1
61	81	4	32	63	2	3	9	1
60	80	4	31	62	2	2	6	1
59	80	4	30	61	2	1	3	1
58	79	3	29	60	2	0	0	1

To determine the student's final examination score (scale score), find the student's total test raw score in the column labeled "Raw Score" and then locate the scale score that corresponds to that raw score. The scale score is the student's final examination score. Enter this score in the space labeled "Scale Score" on the student's answer sheet.

Schools are not permitted to rescore any of the open-ended questions on this exam after each question has been rated once, regardless of the final exam score. Schools are required to ensure that the raw scores have been added correctly and that the resulting scale score has been determined accurately.

Because scale scores corresponding to raw scores in the conversion chart change from one administration to another, it is crucial that for each administration the conversion chart provided for that administration be used to determine the student's final score. The chart above is usable only for this administration of the Regents Examination in Geometry (Common Core).