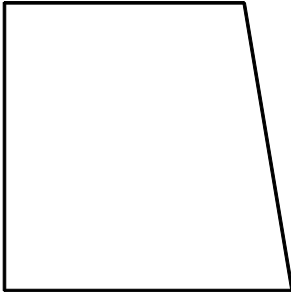



NAME: _____

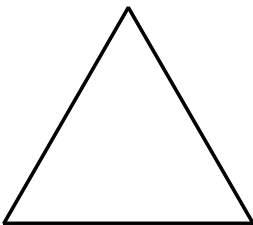
1. For the figure below, draw all the lines of symmetry. If there are none, write "none".



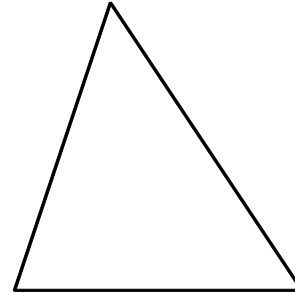
2. For the figure below, draw all the lines of symmetry. If there are none, write "none".




3. For the figure below, draw all the lines of symmetry. If there are none, write "none".



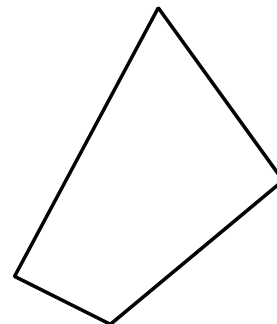
4. For the figure below, draw all the lines of symmetry. If there are none, write "none".



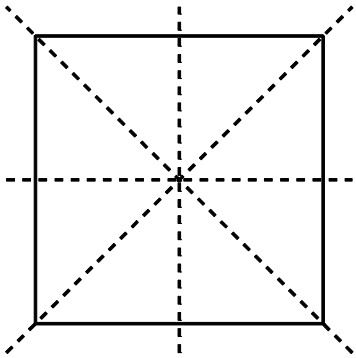
5. For the figure below, draw all the lines of symmetry. If there are none, write "none".



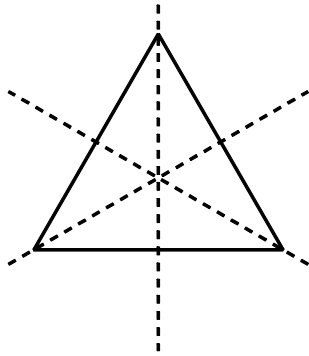
6. For the figure below, draw all the lines of symmetry. If there are none, write "none".



[1] none _____



[2] _____



[3] _____

[4] none _____

[5] none _____

[6] none _____