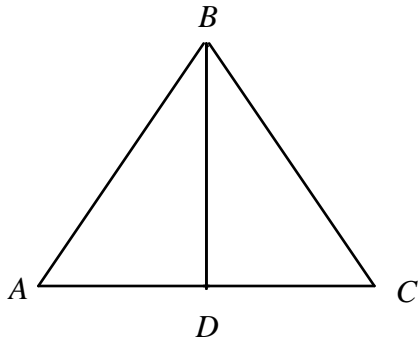
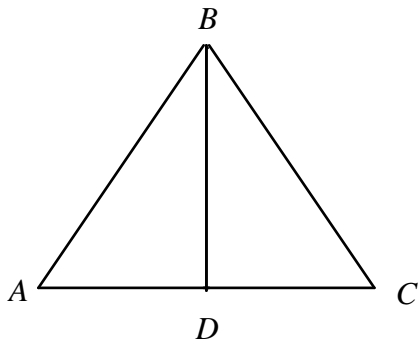


NAME: _____

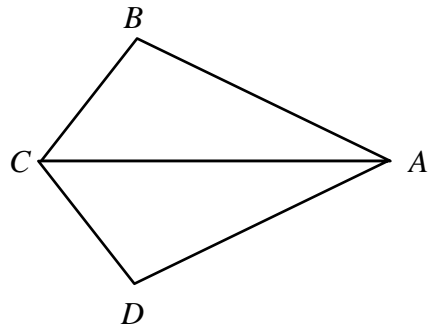
1. Given: \overline{BD} bisects \overline{AC} , $\overline{AB} \cong \overline{BC}$
Prove: $\angle C \cong \angle A$



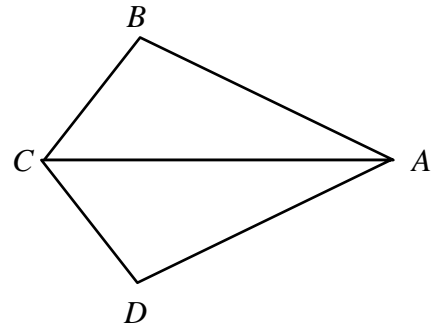
2. Given: \overline{BD} is the median to \overline{AC} ,
 $\overline{AB} \cong \overline{BC}$
Prove: $\angle CBD \cong \angle ABD$



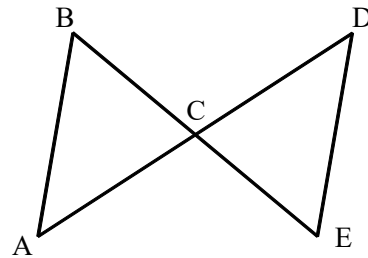
3. Given: $\angle DCA \cong \angle BCA$, $\angle B \cong \angle D$
Prove: $\overline{AB} \cong \overline{AD}$



4. Given: $\angle BAC \cong \angle DAC$, $\angle B \cong \angle D$
Prove: $\overline{BC} \cong \overline{DC}$

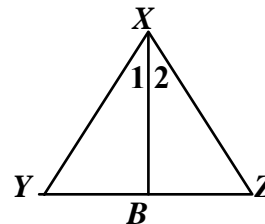


5. Given: $\overline{BC} \cong \overline{EC}$ and $\overline{AC} \cong \overline{DC}$
Prove: $\overline{BA} \cong \overline{ED}$



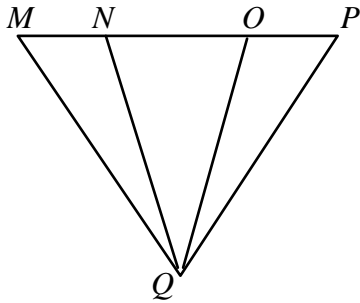
6. Write a flow proof of the Isosceles Triangle Theorem.

Given: $\overline{XY} \cong \overline{XZ}$, \overline{XB} bisects $\angle YXZ$
Prove: $\angle Y \cong \angle Z$



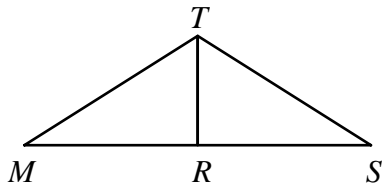
NAME: _____

7. Given: $\overline{QO} \cong \overline{QN}$; $\overline{NM} \cong \overline{OP}$
Prove: $\triangle QMP$ is isosceles

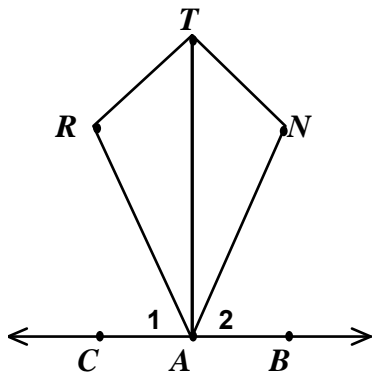


8. Given: R is the midpoint of \overline{MS}
 $\overline{TR} \perp \overline{MS}$

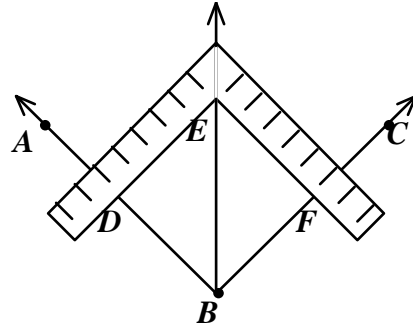
Outline a proof that shows: $\overline{TM} \cong \overline{TS}$



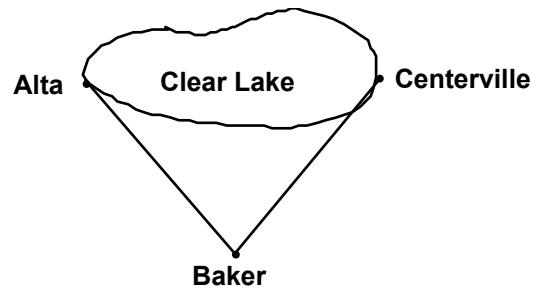
9. Outline a plan for proving that $\overline{RT} \cong \overline{NT}$ if $\overline{AN} \cong \overline{AR}$, $\overline{AT} \perp \overline{CB}$, and $\angle 1 \cong \angle 2$.



10. A carpenter may bisect an angle using a steel square such as follows: Mark off D on \overrightarrow{BA} and F on \overrightarrow{BC} such that $\overline{BD} \cong \overline{BF}$. Then adjust the square so that $\overline{ED} \cong \overline{EF}$ as shown. Prove that \overline{BE} bisects $\angle ABC$.



11. Clear Lake lies between Alta and Centerville. If you know the distance from Baker to Alta and Baker to Centerville, explain how you could use congruent triangles to find the distance across the lake from Alta to Centerville.



12. Point A is on the line $y + 3x = 2$ and is equidistant from points B and C , both of which lie on the line $y = \frac{1}{3}x + 8$. D is on the intersection of both lines. Prove that $y + 3x = 2$ bisects \overline{BC} .

1.	\overline{BD} bisects \overline{AC} , $\overline{AB} \cong \overline{BC}$	1. Given
2.	$\overline{AD} \cong \overline{CD}$	2. Definition of a bisector
3.	$\overline{BD} \cong \overline{BD}$	3. Reflexive
4.	$\triangle ADB \cong \triangle CDB$	4. SSS
[1] 5.	$\angle C \cong \angle A$	5. CPCTC

1.	\overline{BD} is the median to \overline{AC} , $\overline{AB} \cong \overline{BC}$	1. Given
2.	$\overline{AD} \cong \overline{CD}$	2. Definition of a median
3.	$\overline{BD} \cong \overline{BD}$	3. Reflexive
4.	$\triangle ADB \cong \triangle CDB$	4. SSS
[2] 5.	$\angle CBD \cong \angle ABD$	5. CPCTC

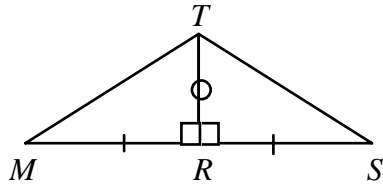
1.	$\angle DCA \cong \angle BCA$, $\angle B \cong \angle D$	1. Given
2.	$\overline{AC} \cong \overline{AC}$	2. Reflexive
3.	$\triangle ABC \cong \triangle ADC$	3. AAS
[3] 4.	$\overline{AB} \cong \overline{AD}$	4. CPCTC

1.	$\angle BAC \cong \angle DAC$, $\angle B \cong \angle D$	1. Given
2.	$\overline{AC} \cong \overline{AC}$	2. Reflexive
3.	$\triangle ABC \cong \triangle ADC$	3. AAS
[4] 4.	$\overline{BC} \cong \overline{DC}$	4. CPCTC

1.	$\overline{BC} \cong \overline{EC}$ $\overline{AC} \cong \overline{DC}$	1. Given
2.	$\angle BCA \cong \angle ECD$	2. Vertical Angles
3.	$\triangle BCA \cong \triangle ECD$	3. SAS
[5] 4.	$\overline{BA} \cong \overline{ED}$	4. CPCTC

[6] Check students' work. Include SAS and CPCTC.

1.	$\overline{QN} \cong \overline{QO}$	1. Given
2.	$\angle QNO \cong \angle QON$	2. If 2 sides of a \triangle are \cong , the \angle s opp. are \cong .
3.	$\angle QNM \cong \angle QOP$	3. If \angle s are supp. to $\cong \angle$ s, they are \cong .
4.	$\overline{NM} \cong \overline{OP}$	4. Given
5.	$\triangle QNM \cong \triangle QOP$	5. SAS
6.	$\overline{QM} \cong \overline{QP}$	6. CPCTC
[7] 7.	$\triangle QMP$ is isosceles	7. If at least 2 sides of a \triangle are \cong , the \triangle is isosc.



$\triangle TMR \cong \triangle TSR$ by the SAS congruency postulate

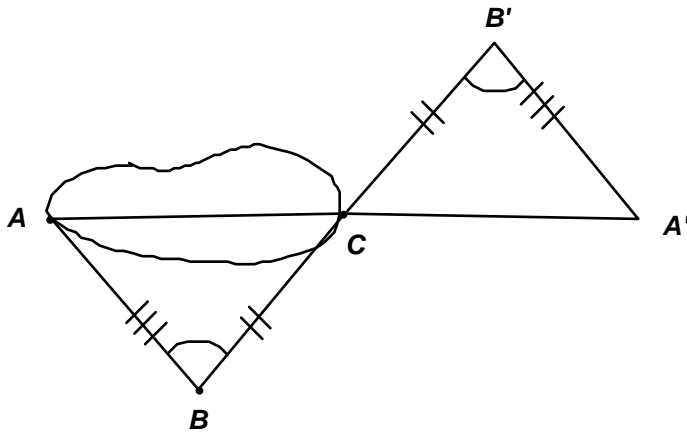
[8] $\overline{TM} \cong \overline{TS}$ by CPCTC

Because $\overline{AT} \perp \overline{CB}$, we know $\angle CAT$ and $\angle BAT$ are right angles and therefore congruent. By the Subtraction Prop., we know $\angle RAT \cong \angle NAT$. \overline{TA} is congruent to itself and $\overline{AN} \cong \overline{AR}$. So,

[9] $\triangle TRA$ and $\triangle TNA$ are congruent by SAS. Thus $\overline{RT} \cong \overline{NT}$ by CPCTC.

Check students' work. They should show that $\triangle DBE \cong \triangle FBE$ by SSS and therefore $\angle DBE \cong \angle FBE$ by CPCTC. Thus the angle is bisected by definition.

Draw another triangle with distances equal to \overline{AB} and \overline{BC} and $\angle B \cong \angle B'$. Measure $\overline{A'C}$. Because the angles are congruent(SAS), $\overline{AC} \cong \overline{A'C}$.



[11]

Check students' proofs. They should show that $y + 3x = 2$ is perpendicular to \overline{BC} because its slope (-3) is the negative reciprocal of that of \overline{BC} $\left(\frac{1}{3}\right)$. Then, because A is equidistant from B and C,

[12] $\overline{AB} \cong \overline{AC}$. Also, $\overline{AD} \cong \overline{AD}$, so $\triangle ABD \cong \triangle ACD$ by HL. Thus $\overline{BD} \cong \overline{CD}$ and the line bisects \overline{BC} .
